



Usa le griglie fornite per risolvere ogni operazione.

1) $39 \times 30 =$

2) $28 \times 20 =$

3) $21 \times 20 =$

4) $27 \times 20 =$

5) $20 \times 28 =$

6) $20 \times 21 =$

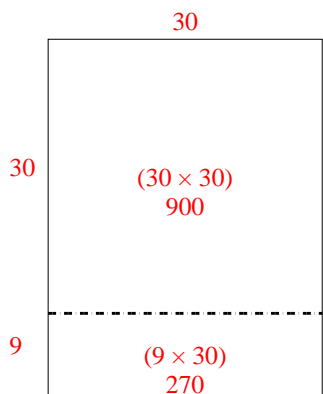
Risposte

- 1. _____
- 2. _____
- 3. _____
- 4. _____
- 5. _____
- 6. _____

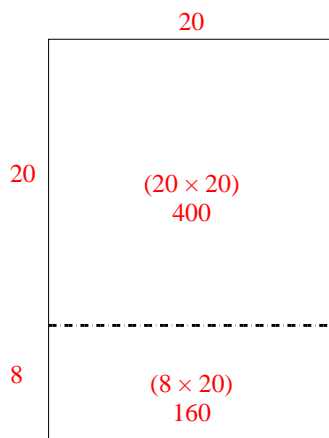


Usa le griglie fornite per risolvere ogni operazione.

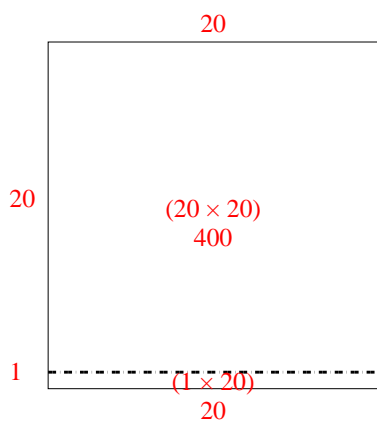
1) $39 \times 30 =$



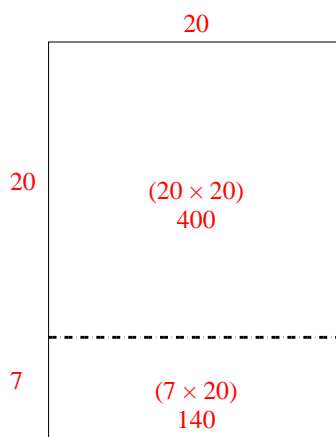
2) $28 \times 20 =$



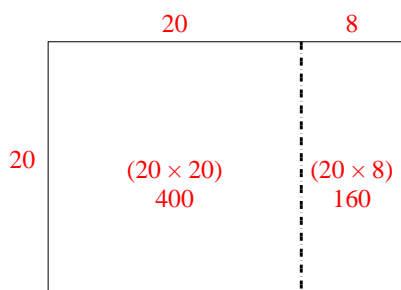
3) $21 \times 20 =$



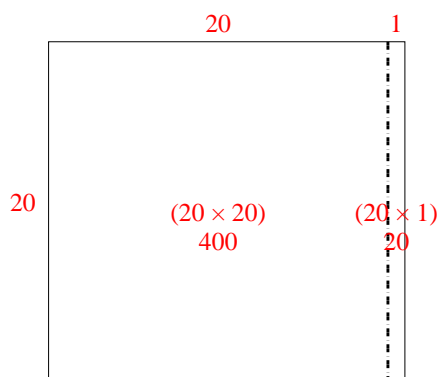
4) $27 \times 20 =$



5) $20 \times 28 =$



6) $20 \times 21 =$



Risposte

1. **1.170**

2. **560**

3. **420**

4. **540**

5. **560**

6. **420**