





Usa le griglie per risolvere ogni operazione.

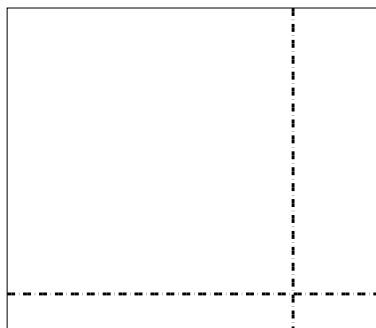
1) $52 \times 32 =$




2) $49 \times 24 =$




3) $34 \times 39 =$



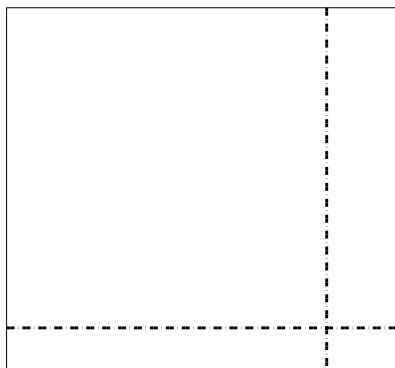
4) $37 \times 45 =$



5) $32 \times 34 =$



6) $34 \times 37 =$



Risposte

1. _____

2. _____

3. _____

4. _____

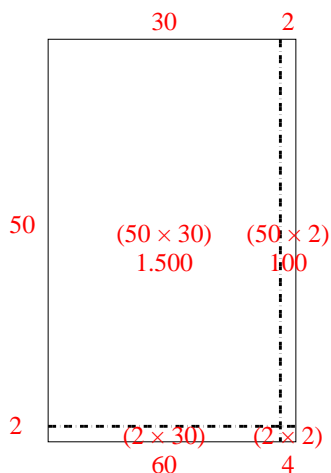
5. _____

6. _____

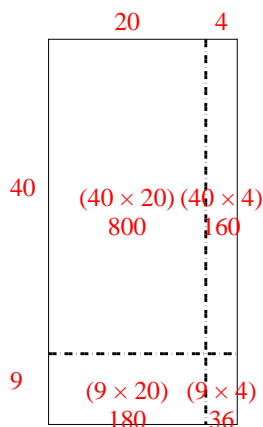


Usa le griglie per risolvere ogni operazione.

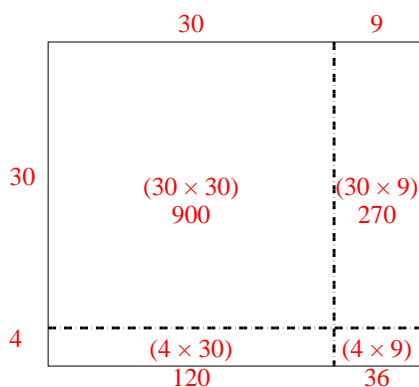
1) $52 \times 32 =$



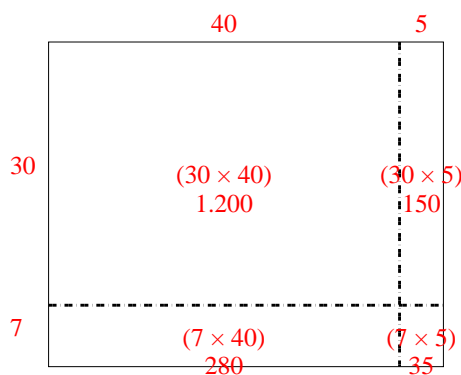
2) $49 \times 24 =$



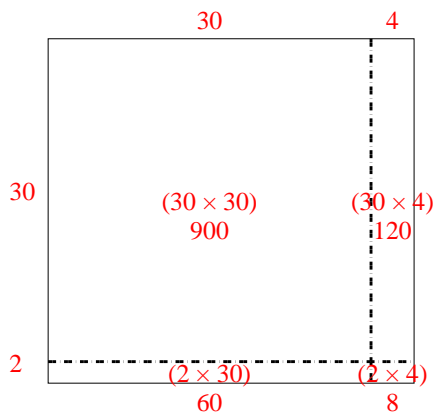
3) $34 \times 39 =$



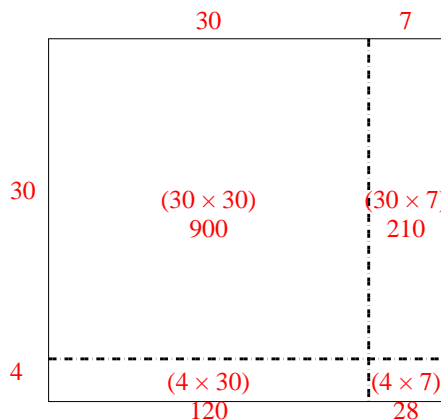
4) $37 \times 45 =$



5) $32 \times 34 =$



6) $34 \times 37 =$



Risposte

1. **1.664**
2. **1.176**
3. **1.326**
4. **1.665**
5. **1.088**
6. **1.258**