


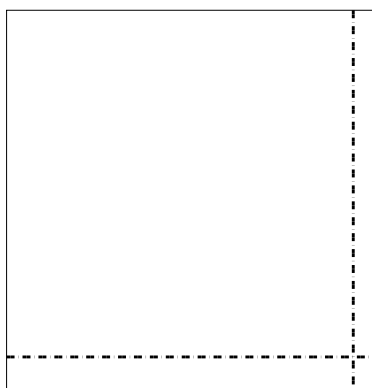


Usa le griglie per risolvere ogni operazione.


1) $77 \times 65 =$




2) $44 \times 43 =$




3) $45 \times 38 =$




4) $36 \times 42 =$



5) $44 \times 68 =$



6) $44 \times 28 =$



Risposte

1. _____

2. _____

3. _____

4. _____

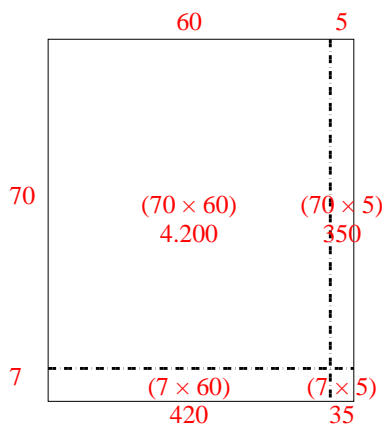
5. _____

6. _____

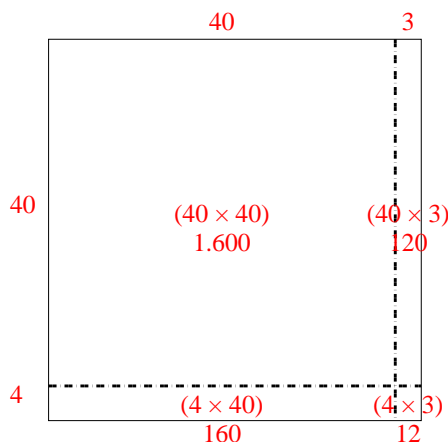


Usa le griglie per risolvere ogni operazione.

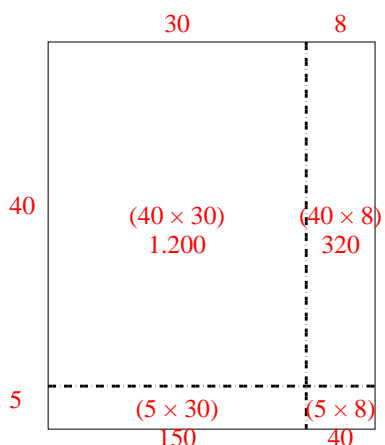
1) $77 \times 65 =$



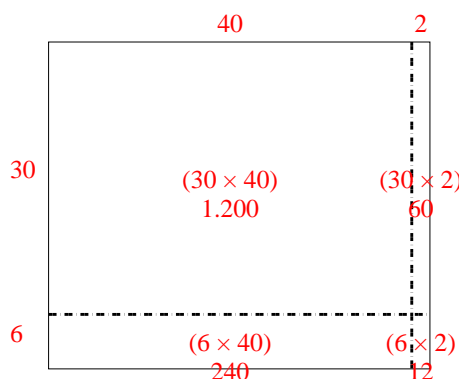
2) $44 \times 43 =$



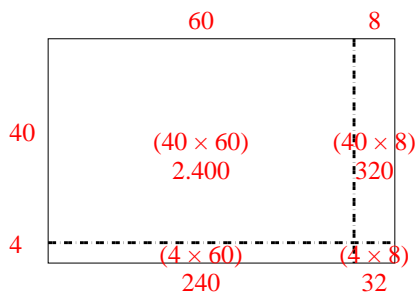
3) $45 \times 38 =$



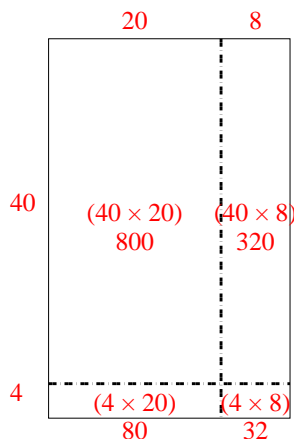
4) $36 \times 42 =$



5) $44 \times 68 =$



6) $44 \times 28 =$



Risposte

1. **5.005**

2. **1.892**

3. **1.710**

4. **1.512**

5. **2.992**

6. **1.232**