




Usa le griglie per risolvere ogni operazione.

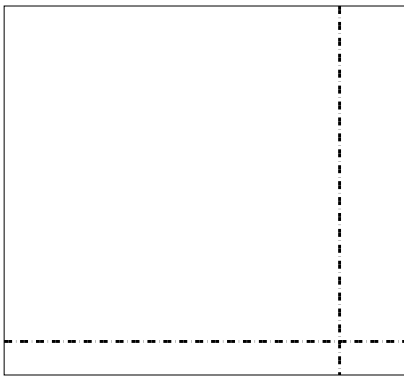
1) $48 \times 23 =$




2) $45 \times 44 =$




3) $33 \times 36 =$




4) $37 \times 24 =$



5) $39 \times 14 =$



6) $35 \times 12 =$



Risposte

1. _____

2. _____

3. _____

4. _____

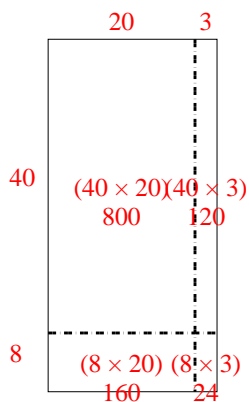
5. _____

6. _____

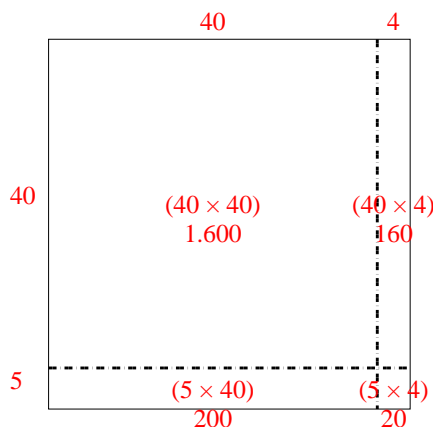


Usa le griglie per risolvere ogni operazione.

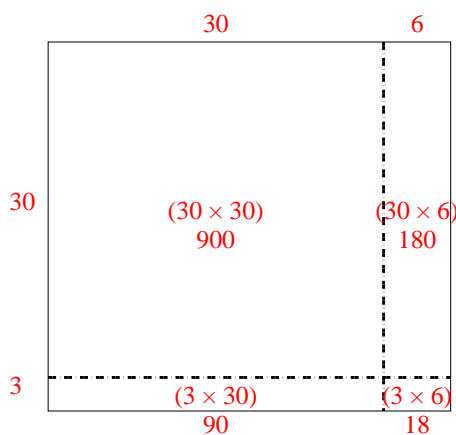
1) $48 \times 23 =$



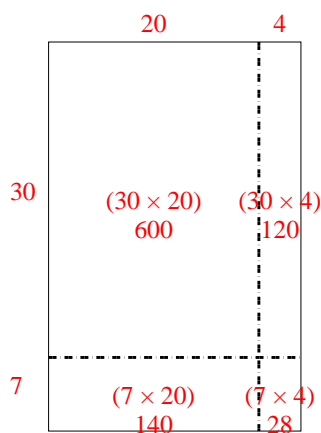
2) $45 \times 44 =$



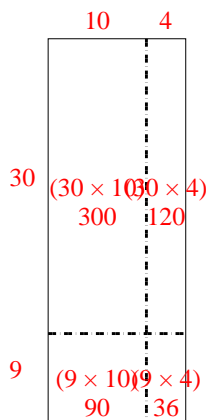
3) $33 \times 36 =$



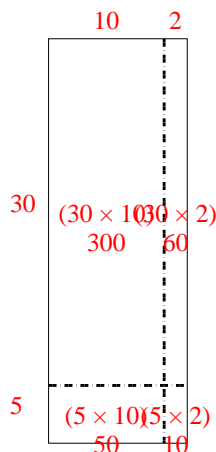
4) $37 \times 24 =$



5) $39 \times 14 =$



6) $35 \times 12 =$



Risposte

1. 1.104
2. 1.980
3. 1.188
4. 888
5. 546
6. 420