





Usa le griglie per risolvere ogni operazione.


1) $36 \times 55 =$




2) $42 \times 26 =$




3) $37 \times 48 =$




4) $44 \times 59 =$



5) $46 \times 39 =$



6) $47 \times 59 =$



Risposte

1. _____

2. _____

3. _____

4. _____

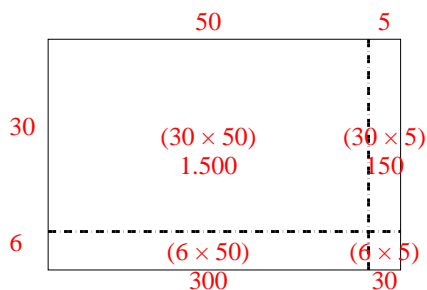
5. _____

6. _____

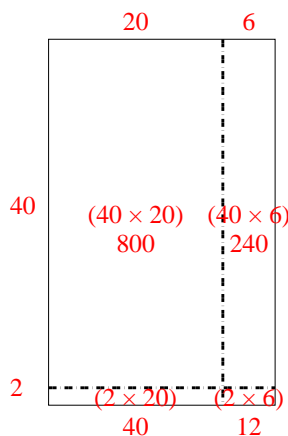


Usa le griglie per risolvere ogni operazione.

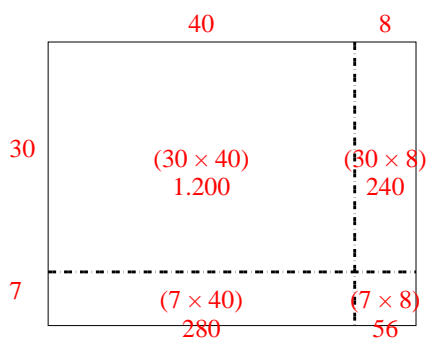
1) $36 \times 55 =$



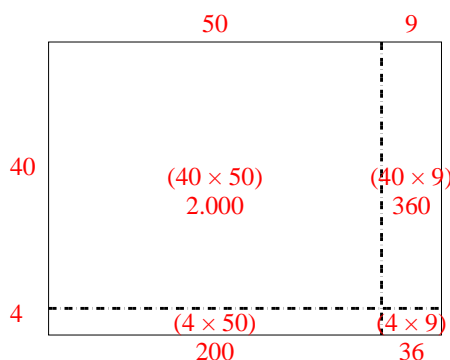
2) $42 \times 26 =$



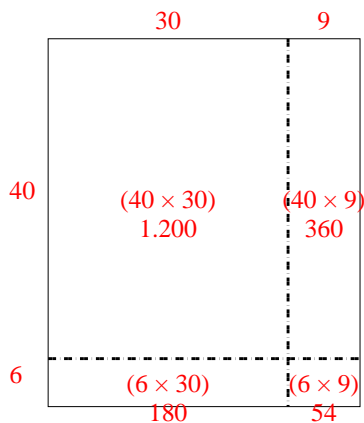
3) $37 \times 48 =$



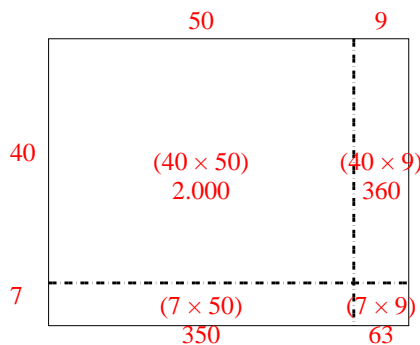
4) $44 \times 59 =$



5) $46 \times 39 =$



6) $47 \times 59 =$



Risposte

1. **1.980**

2. **1.092**

3. **1.776**

4. **2.596**

5. **1.794**

6. **2.773**