





Usa le griglie per risolvere ogni operazione.


1) $38 \times 22 =$




2) $36 \times 44 =$




3) $48 \times 45 =$




4) $49 \times 54 =$



5) $43 \times 29 =$



6) $39 \times 23 =$



Risposte

1. _____

2. _____

3. _____

4. _____

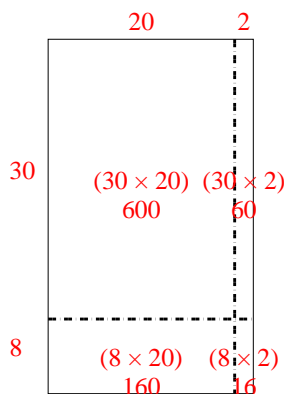
5. _____

6. _____

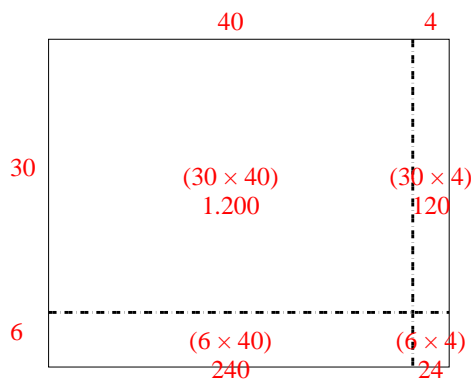


Usa le griglie per risolvere ogni operazione.

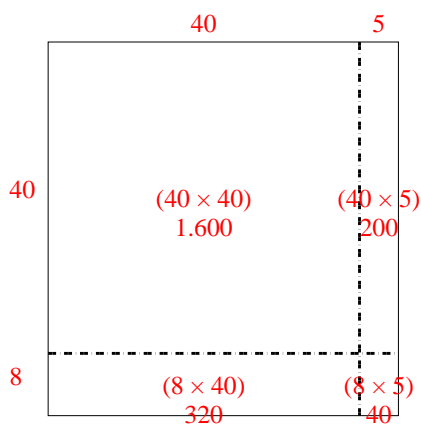
1) $38 \times 22 =$



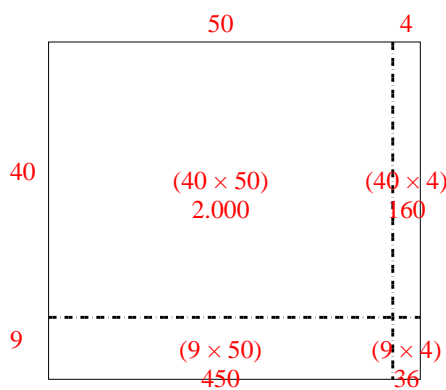
2) $36 \times 44 =$



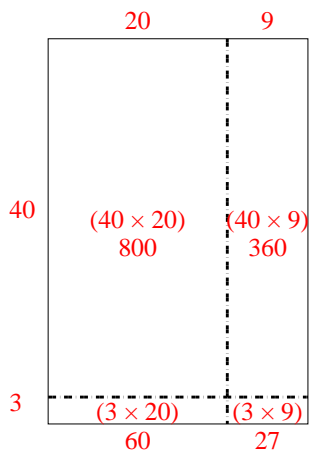
3) $48 \times 45 =$



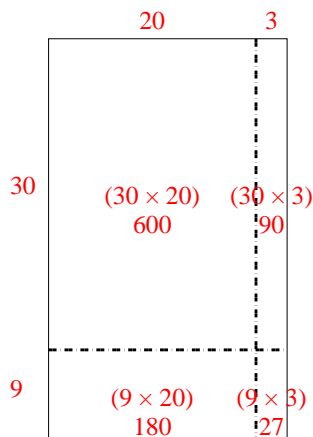
4) $49 \times 54 =$



5) $43 \times 29 =$



6) $39 \times 23 =$



Risposte

1. **836**

2. **1.584**

3. **2.160**

4. **2.646**

5. **1.247**

6. **897**