





Usa le griglie per risolvere ogni operazione.


1) $52 \times 58 =$




2) $36 \times 33 =$




3) $33 \times 46 =$




4) $45 \times 68 =$



5) $52 \times 57 =$



6) $42 \times 37 =$



Risposte

1. _____

2. _____

3. _____

4. _____

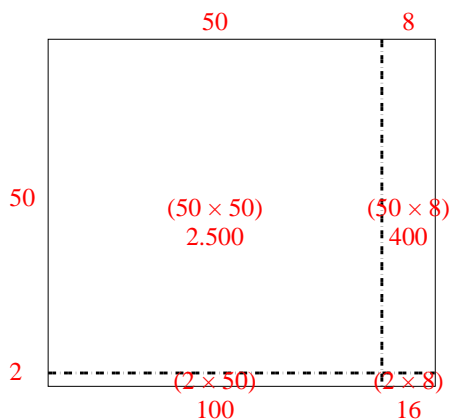
5. _____

6. _____

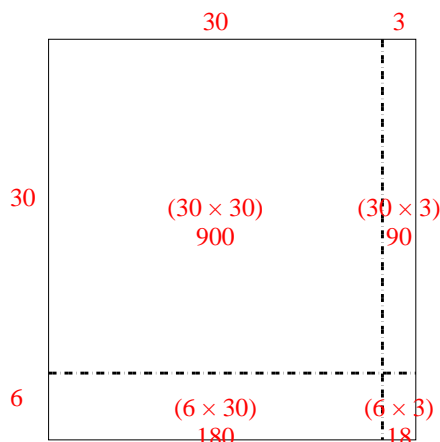


Usa le griglie per risolvere ogni operazione.

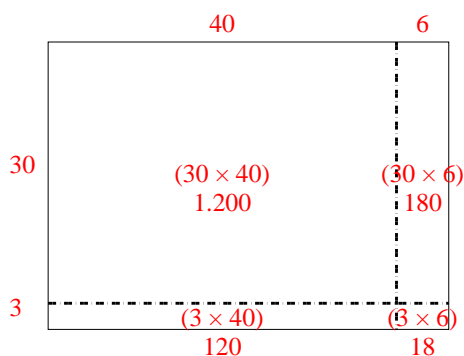
1) $52 \times 58 =$



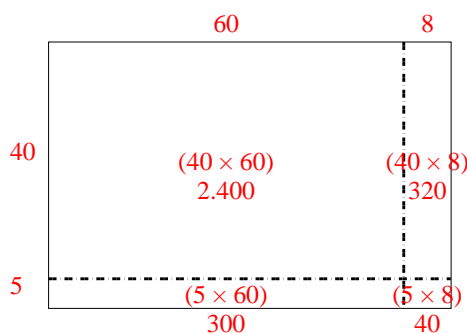
2) $36 \times 33 =$



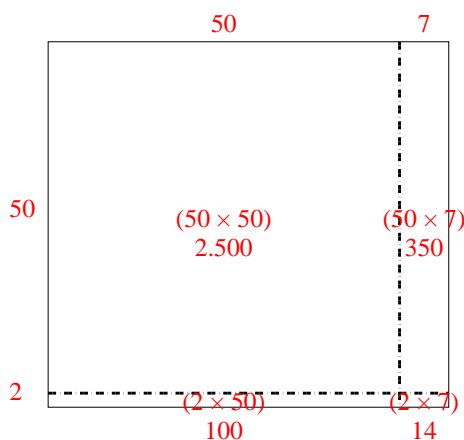
3) $33 \times 46 =$



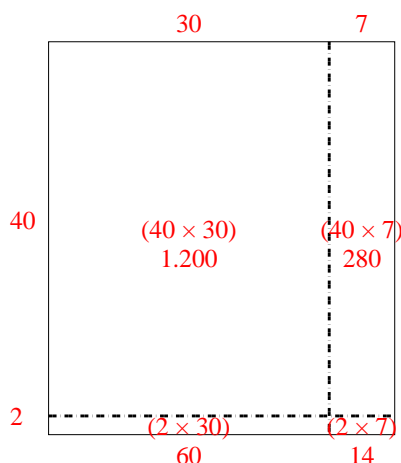
4) $45 \times 68 =$



5) $52 \times 57 =$



6) $42 \times 37 =$



Risposte

1. **3.016**

2. **1.188**

3. **1.518**

4. **3.060**

5. **2.964**

6. **1.554**