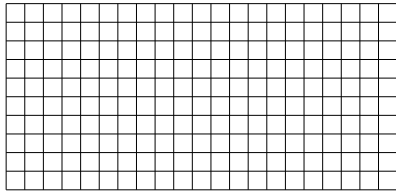





Usa le griglie fornite per calcolare i risultati.


1)  $10 \times 21 =$




2)  $25 \times 10 =$




3)  $10 \times 25 =$




4)  $21 \times 10 =$



5)  $10 \times 16 =$



6)  $10 \times 13 =$



**Risposte**

1. \_\_\_\_\_

2. \_\_\_\_\_

3. \_\_\_\_\_

4. \_\_\_\_\_

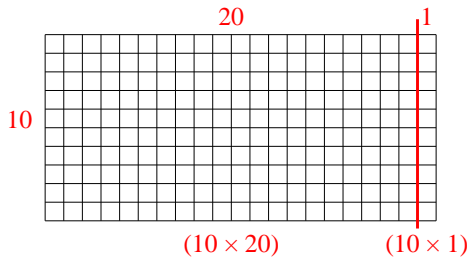
5. \_\_\_\_\_

6. \_\_\_\_\_

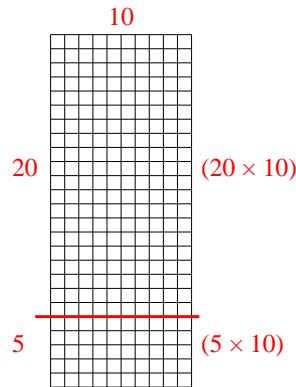


Usa le griglie fornite per calcolare i risultati.

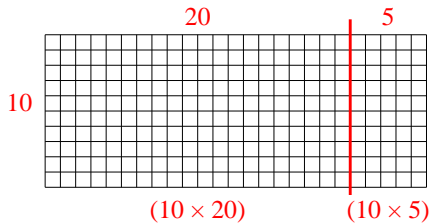
1)  $10 \times 21 =$



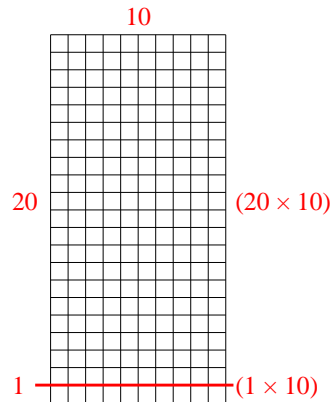
2)  $25 \times 10 =$



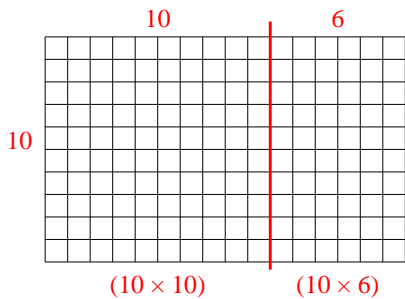
3)  $10 \times 25 =$



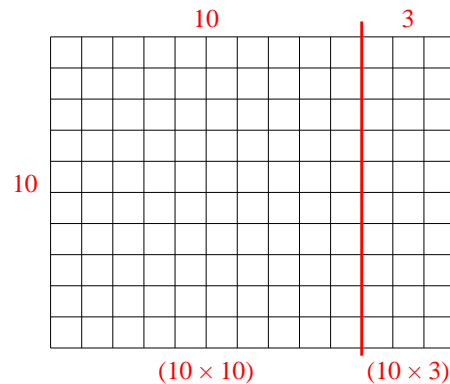
4)  $21 \times 10 =$



5)  $10 \times 16 =$



6)  $10 \times 13 =$



**Risposte**

- 1. 210
- 2. 250
- 3. 250
- 4. 210
- 5. 160
- 6. 130