





Usa le griglie fornite per calcolare i risultati.


1) $20 \times 16 =$




2) $16 \times 10 =$




3) $11 \times 10 =$




4) $15 \times 10 =$



5) $10 \times 11 =$



6) $10 \times 16 =$



Risposte

1. _____

2. _____

3. _____

4. _____

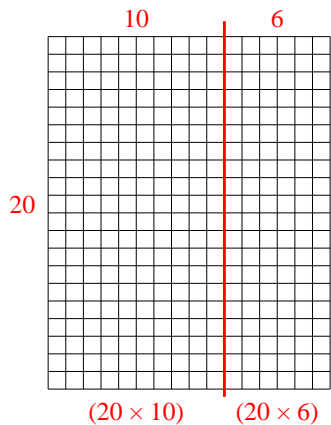
5. _____

6. _____

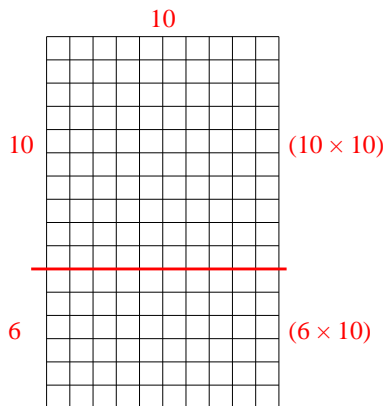


Usa le griglie fornite per calcolare i risultati.

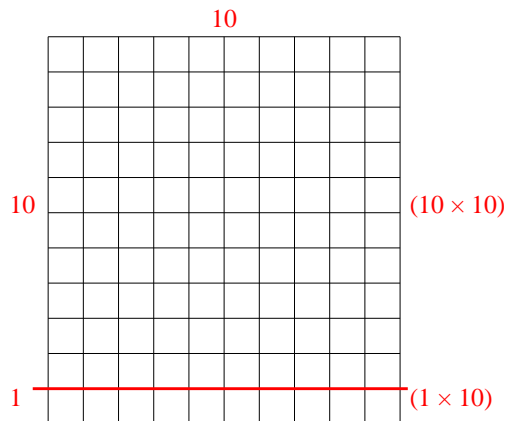
1) $20 \times 16 =$



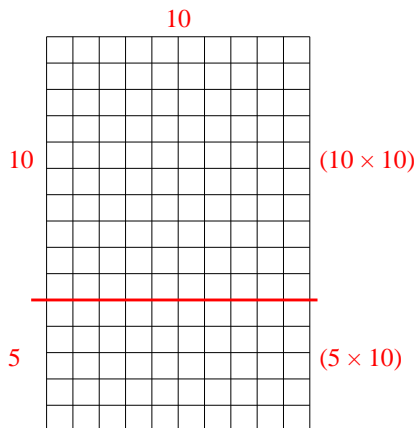
2) $16 \times 10 =$



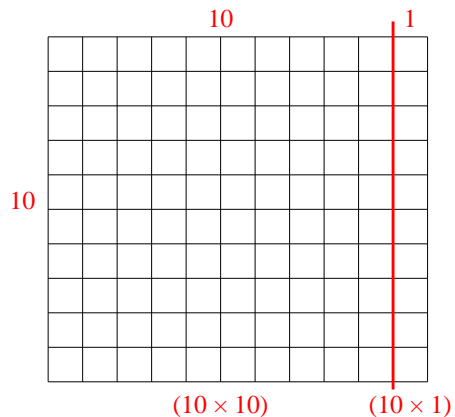
3) $11 \times 10 =$



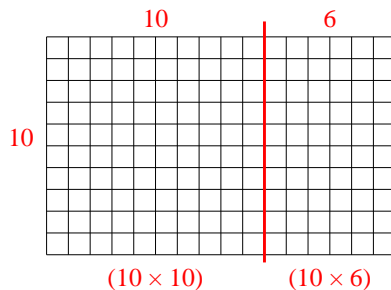
4) $15 \times 10 =$



5) $10 \times 11 =$



6) $10 \times 16 =$



Risposte

1. **320**

2. **160**

3. **110**

4. **150**

5. **110**

6. **160**