





Usa le griglie fornite per calcolare i risultati.


1) $23 \times 20 =$




2) $10 \times 13 =$




3) $10 \times 11 =$




4) $10 \times 17 =$



5) $10 \times 16 =$



6) $19 \times 10 =$

**Risposte**

1. _____

2. _____

3. _____

4. _____

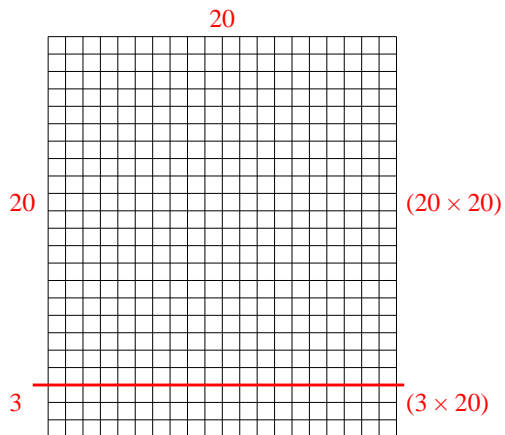
5. _____

6. _____

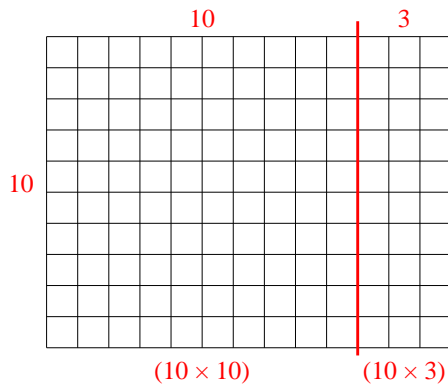


Usa le griglie fornite per calcolare i risultati.

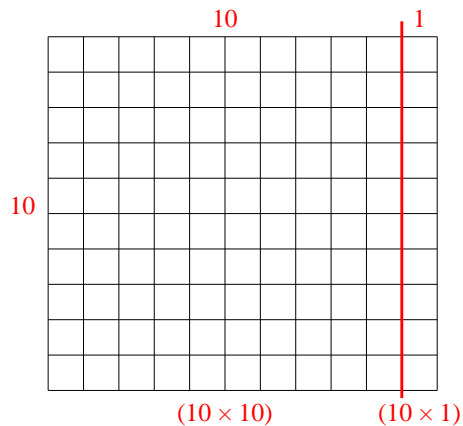
1) $23 \times 20 =$



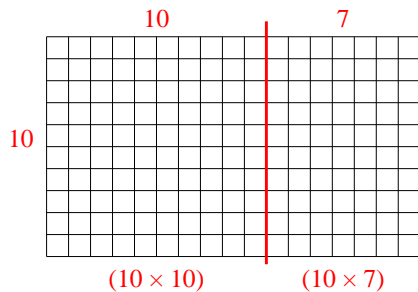
2) $10 \times 13 =$



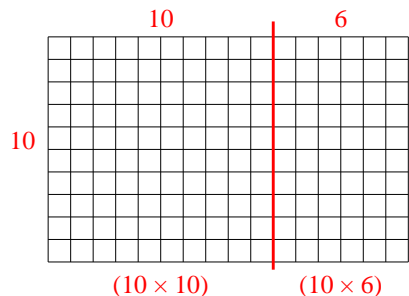
3) $10 \times 11 =$



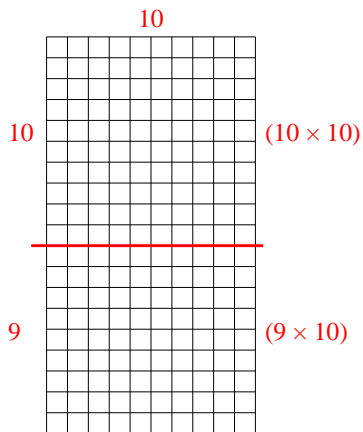
4) $10 \times 17 =$



5) $10 \times 16 =$



6) $19 \times 10 =$



Risposte

1. **460**

2. **130**

3. **110**

4. **170**

5. **160**

6. **190**