





Usa le griglie fornite per calcolare i risultati.


1)  $29 \times 20 =$




2)  $20 \times 13 =$




3)  $10 \times 17 =$




4)  $10 \times 19 =$



5)  $10 \times 15 =$



6)  $19 \times 10 =$



## Risposte

1. \_\_\_\_\_

2. \_\_\_\_\_

3. \_\_\_\_\_

4. \_\_\_\_\_

5. \_\_\_\_\_

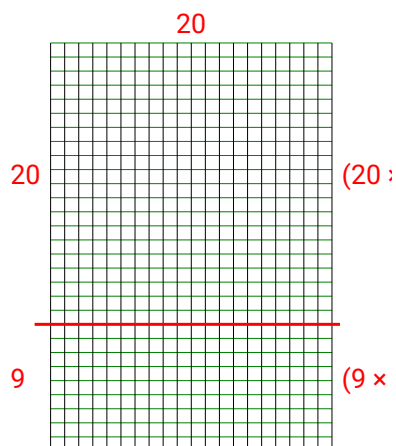
6. \_\_\_\_\_



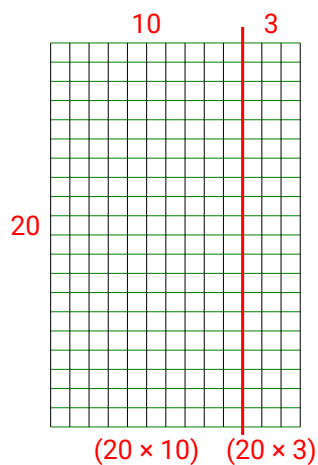


Usa le griglie fornite per calcolare i risultati.

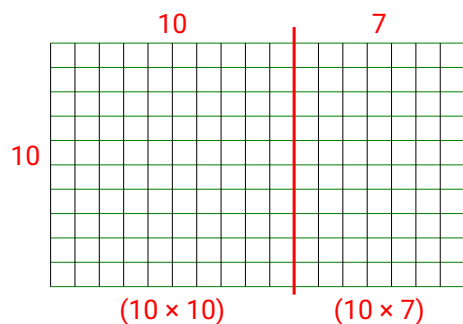
1)  $29 \times 20 =$



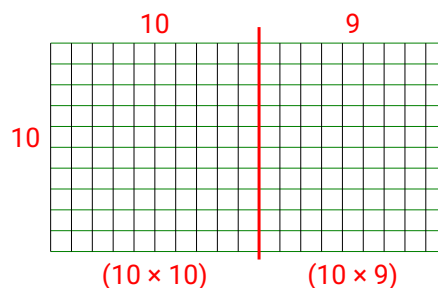
2)  $20 \times 13 =$



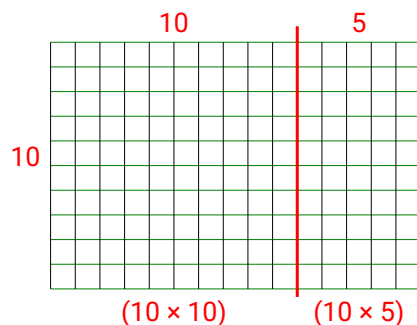
3)  $10 \times 17 =$



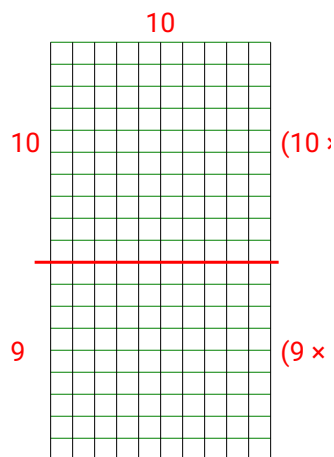
4)  $10 \times 19 =$



5)  $10 \times 15 =$



6)  $19 \times 10 =$

**Risposte**

1. **580**
2. **260**
3. **170**
4. **190**
5. **150**
6. **190**