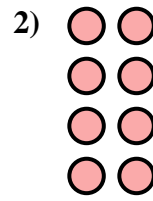
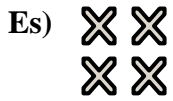








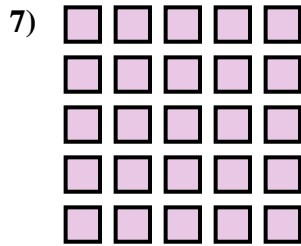

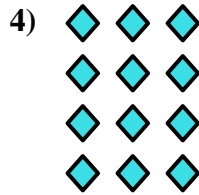
Scrivi un'equazione che esprima il contenuto degli insiemi e trova il numero delle forme.

Risposte



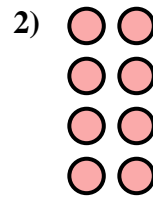
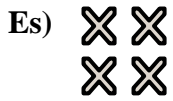
Es. $2 \times 2 = 4$

- 1. _____
- 2. _____
- 3. _____
- 4. _____
- 5. _____
- 6. _____
- 7. _____
- 8. _____
- 9. _____
- 10. _____
- 11. _____
- 12. _____
- 13. _____
- 14. _____



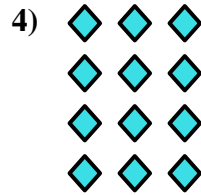


Scrivi un'equazione che esprima il contenuto degli insiemi e trova il numero delle forme.



Risposte

Es. $2 \times 2 = 4$



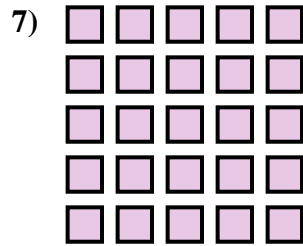

1. $2 \times 4 = 8$

2. $4 \times 2 = 8$

3. $2 \times 3 = 6$

4. $4 \times 3 = 12$

5. $3 \times 4 = 12$






6. $5 \times 3 = 15$

7. $5 \times 5 = 25$

8. $3 \times 2 = 6$

9. $4 \times 5 = 20$

10. $5 \times 2 = 10$



11. $4 \times 4 = 16$

12. $2 \times 5 = 10$

13. $5 \times 4 = 20$

14. $3 \times 5 = 15$

