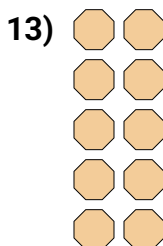
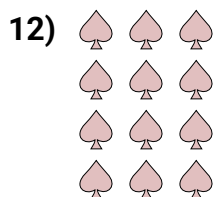
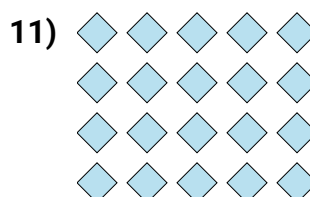
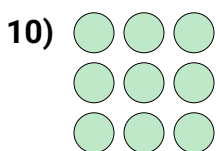


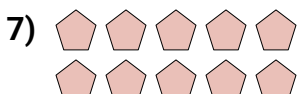
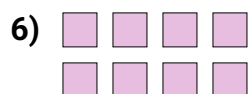
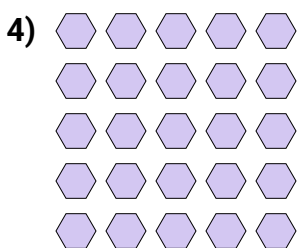
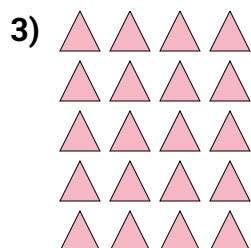






Scrivi un'equazione che esprima il contenuto degli insiemi e trova il numero delle forme.

**Risposte**

Es. $2 \times 3 = 6$

1. _____

2. _____

3. _____

4. _____

5. _____

6. _____

7. _____

8. _____

9. _____

10. _____

11. _____

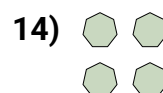
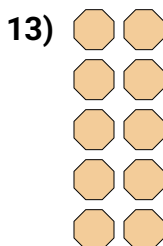
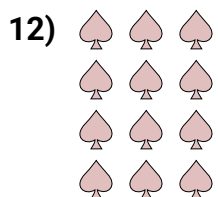
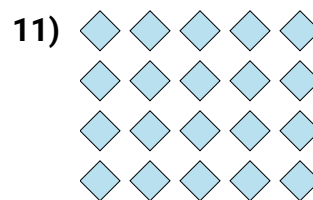
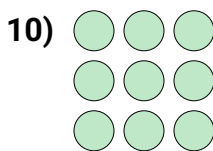


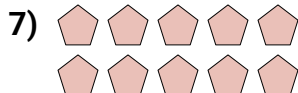
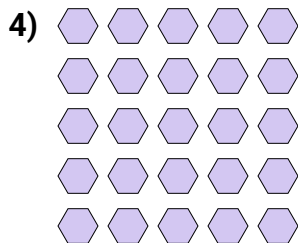
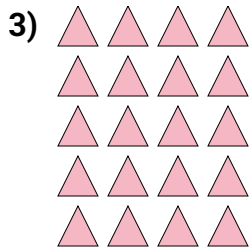

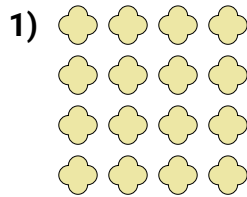
12. _____

13. _____

14. _____



Scrivi un'equazione che esprima il contenuto degli insiemi e trova il numero delle forme.

**Risposte**

Es. $2 \times 3 = 6$

1. $4 \times 4 = 16$

2. $3 \times 5 = 15$

3. $5 \times 4 = 20$

4. $5 \times 5 = 25$

5. $4 \times 2 = 8$

6. $2 \times 4 = 8$

7. $2 \times 5 = 10$

8. $3 \times 2 = 6$

9. $3 \times 4 = 12$

10. $3 \times 3 = 9$

11. $4 \times 5 = 20$

12. $4 \times 3 = 12$

13. $5 \times 2 = 10$

14. $2 \times 2 = 4$