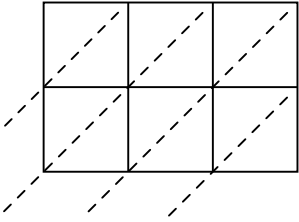




Usa la moltiplicazione del reticolo per risolvere ogni problema.

1)  $636 \times 32 =$



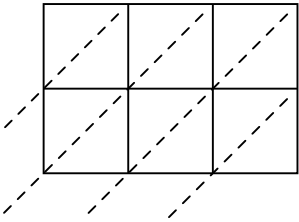
2)  $339 \times 54 =$



3)  $637 \times 28 =$



4)  $525 \times 91 =$



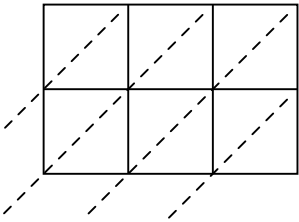
5)  $768 \times 79 =$



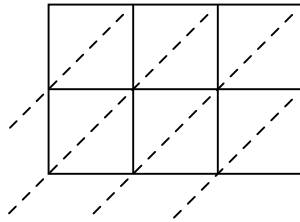
6)  $686 \times 73 =$



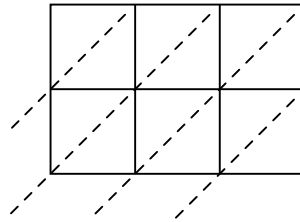
7)  $675 \times 69 =$



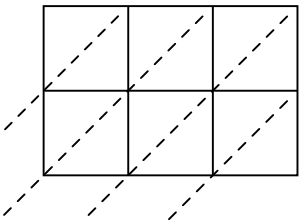
8)  $714 \times 45 =$



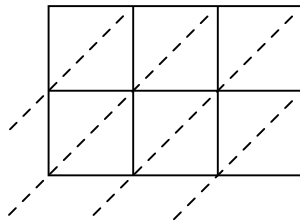
9)  $389 \times 41 =$



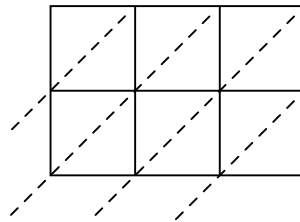
10)  $135 \times 24 =$



11)  $363 \times 59 =$



12)  $417 \times 39 =$

**Risposte**

1. \_\_\_\_\_

2. \_\_\_\_\_

3. \_\_\_\_\_

4. \_\_\_\_\_

5. \_\_\_\_\_

6. \_\_\_\_\_

7. \_\_\_\_\_

8. \_\_\_\_\_

9. \_\_\_\_\_

10. \_\_\_\_\_

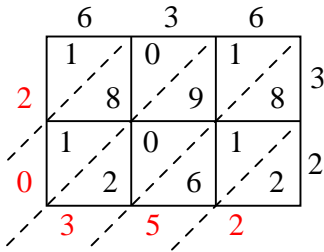
11. \_\_\_\_\_

12. \_\_\_\_\_

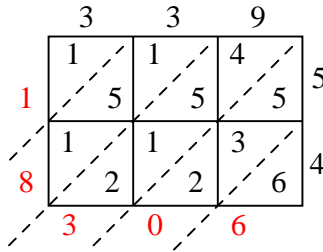


Usa la moltiplicazione del reticolo per risolvere ogni problema.

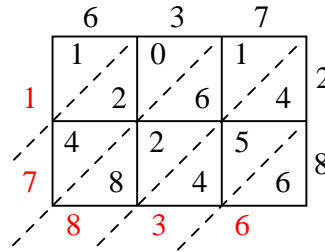
1)  $636 \times 32 =$



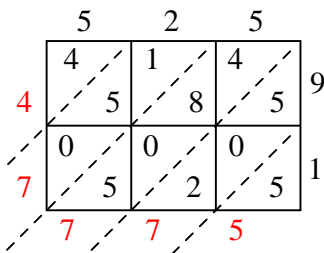
2)  $339 \times 54 =$



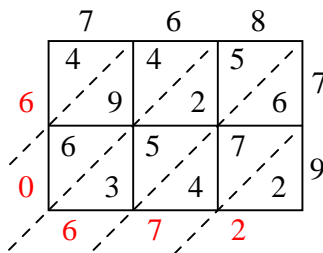
3)  $637 \times 28 =$



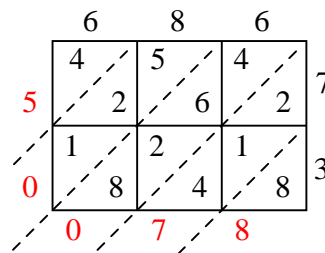
4)  $525 \times 91 =$



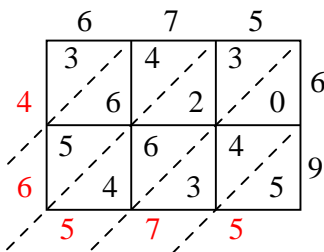
5)  $768 \times 79 =$



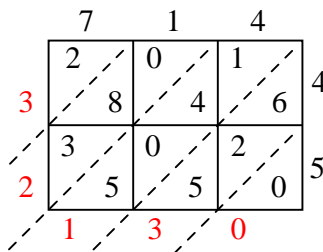
6)  $686 \times 73 =$



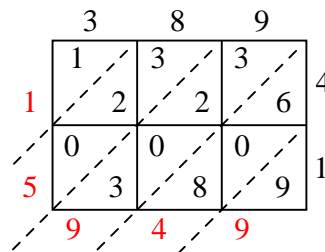
7)  $675 \times 69 =$



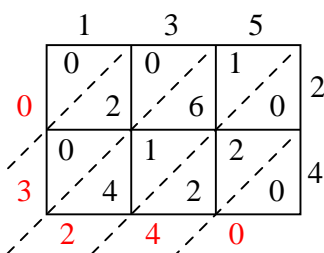
8)  $714 \times 45 =$



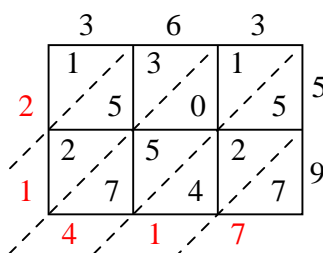
9)  $389 \times 41 =$



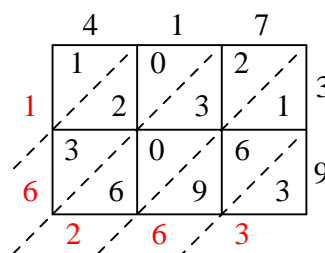
10)  $135 \times 24 =$



11)  $363 \times 59 =$



12)  $417 \times 39 =$

**Risposte**1. **20.352**2. **18.306**3. **17.836**4. **47.775**5. **60.672**6. **50.078**7. **46.575**8. **32.130**9. **15.949**10. **3.240**11. **21.417**12. **16.263**