

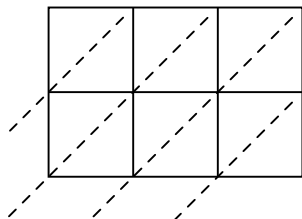


Usa la moltiplicazione del reticolo per risolvere ogni problema.

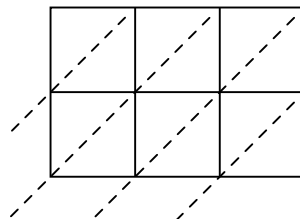
1) $927 \times 78 =$



2) $669 \times 51 =$



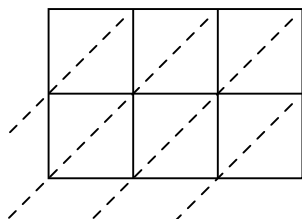
3) $864 \times 95 =$



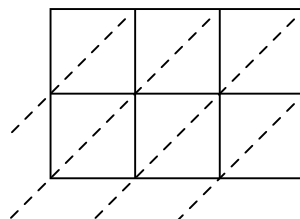
4) $709 \times 28 =$



5) $776 \times 14 =$



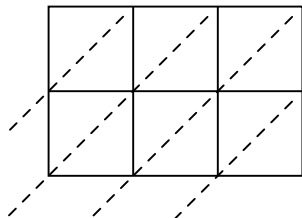
6) $743 \times 46 =$



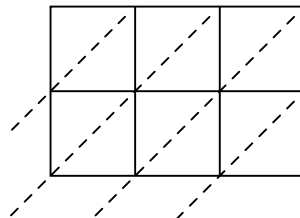
7) $139 \times 10 =$



8) $139 \times 15 =$



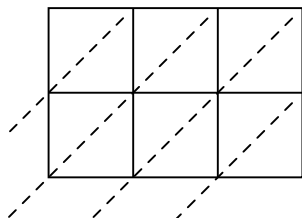
9) $652 \times 85 =$



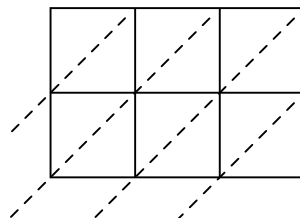
10) $692 \times 17 =$



11) $362 \times 41 =$



12) $355 \times 63 =$

**Risposte**

1. _____

2. _____

3. _____

4. _____

5. _____

6. _____

7. _____

8. _____

9. _____

10. _____

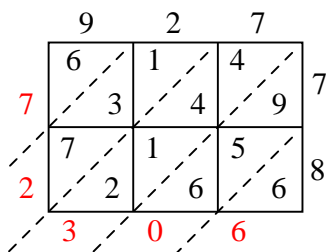
11. _____

12. _____

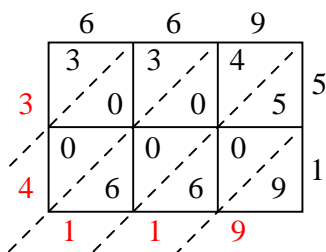


Usa la moltiplicazione del reticolo per risolvere ogni problema.

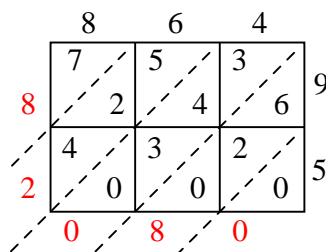
1) $927 \times 78 =$



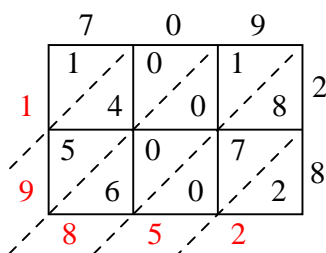
2) $669 \times 51 =$



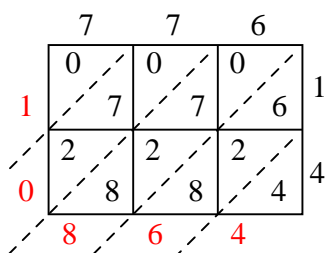
3) $864 \times 95 =$



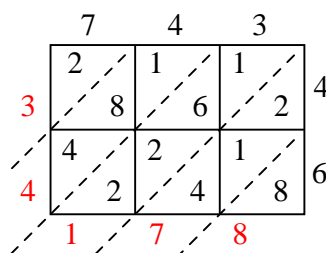
4) $709 \times 28 =$



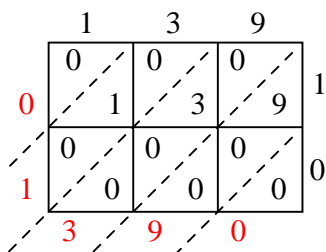
5) $776 \times 14 =$



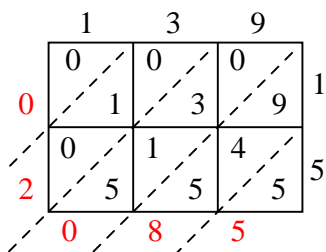
6) $743 \times 46 =$



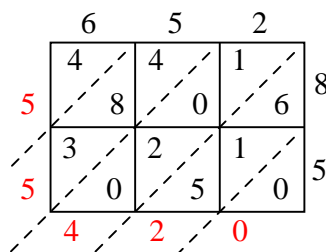
7) $139 \times 10 =$



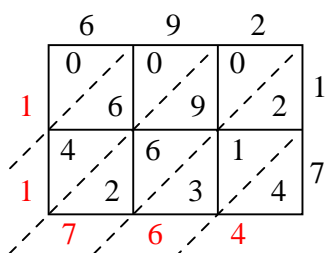
8) $139 \times 15 =$



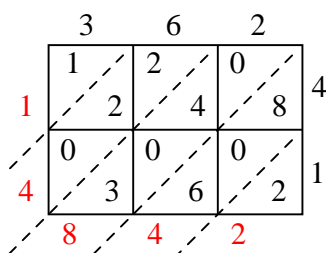
9) $652 \times 85 =$



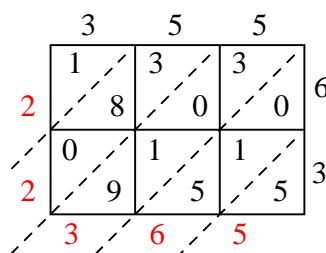
10) $692 \times 17 =$



11) $362 \times 41 =$



12) $355 \times 63 =$

**Risposte**1. **72.306**2. **34.119**3. **82.080**4. **19.852**5. **10.864**6. **34.178**7. **1.390**8. **2.085**9. **55.420**10. **11.764**11. **14.842**12. **22.365**