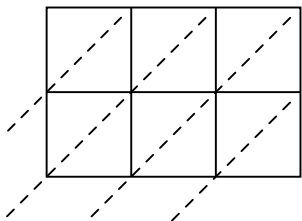


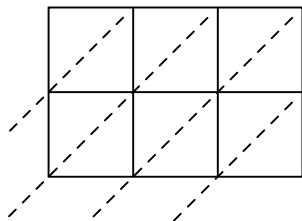


Usa la moltiplicazione del reticolo per risolvere ogni problema.

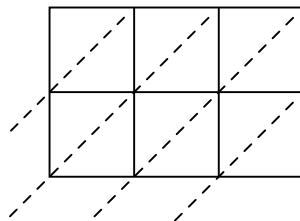
1) $617 \times 36 =$



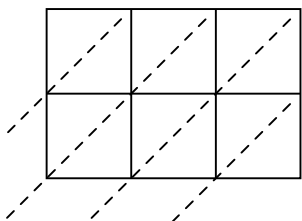
2) $902 \times 60 =$



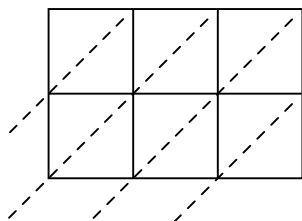
3) $936 \times 11 =$



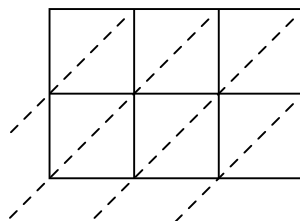
4) $506 \times 97 =$



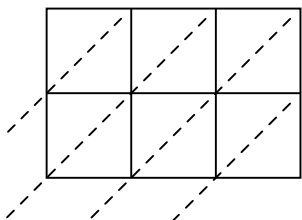
5) $375 \times 92 =$



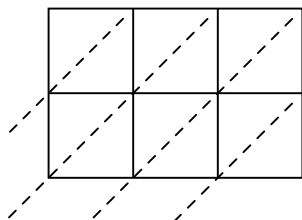
6) $944 \times 94 =$



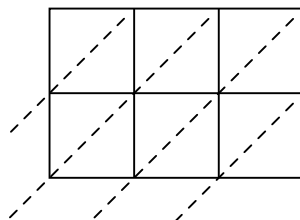
7) $773 \times 32 =$



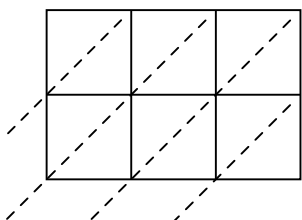
8) $444 \times 54 =$



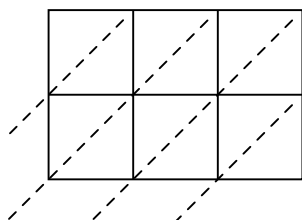
9) $950 \times 35 =$



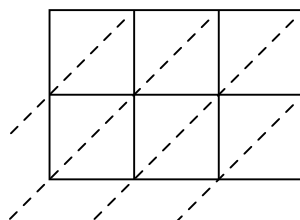
10) $608 \times 49 =$



11) $289 \times 74 =$



12) $530 \times 32 =$

**Risposte**

1. _____

2. _____

3. _____

4. _____

5. _____

6. _____

7. _____

8. _____

9. _____

10. _____

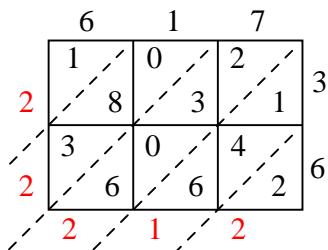
11. _____

12. _____

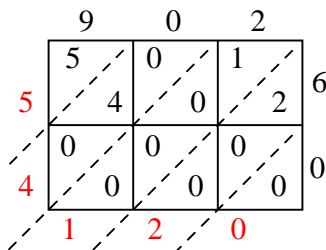


Usa la moltiplicazione del reticolo per risolvere ogni problema.

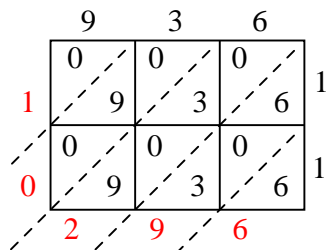
1) $617 \times 36 =$



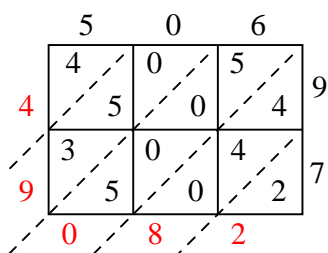
2) $902 \times 60 =$



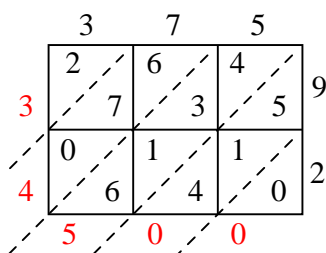
3) $936 \times 11 =$



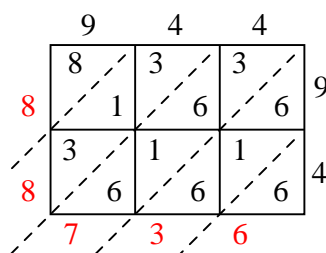
4) $506 \times 97 =$



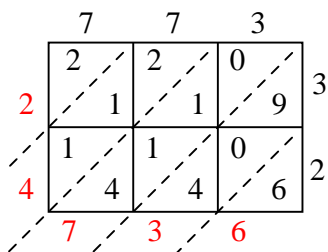
5) $375 \times 92 =$



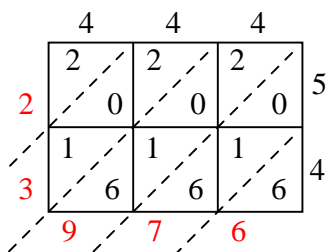
6) $944 \times 94 =$



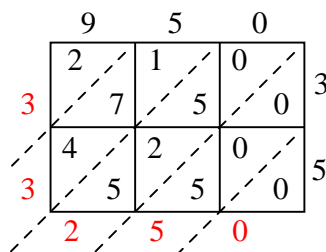
7) $773 \times 32 =$



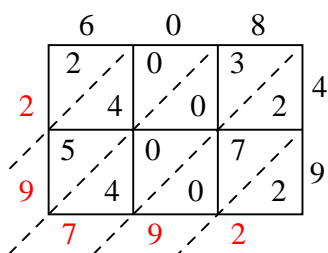
8) $444 \times 54 =$



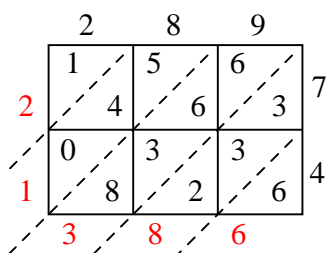
9) $950 \times 35 =$



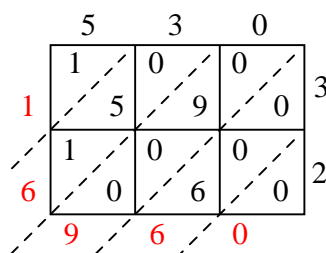
10) $608 \times 49 =$



11) $289 \times 74 =$



12) $530 \times 32 =$

**Risposte**1. **22.212**2. **54.120**3. **10.296**4. **49.082**5. **34.500**6. **88.736**7. **24.736**8. **23.976**9. **33.250**10. **29.792**11. **21.386**12. **16.960**