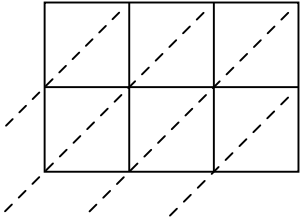


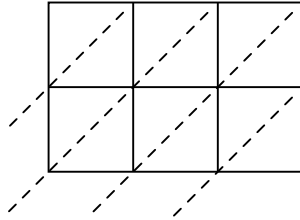


Usa la moltiplicazione del reticolo per risolvere ogni problema.

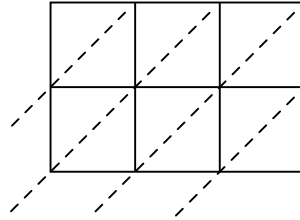
1) $485 \times 11 =$



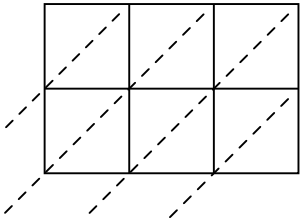
2) $401 \times 55 =$



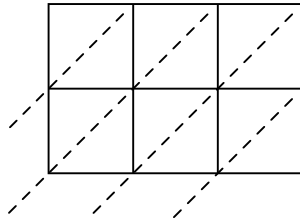
3) $665 \times 39 =$



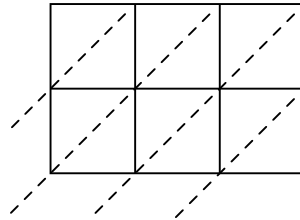
4) $257 \times 58 =$



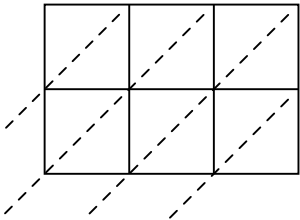
5) $242 \times 51 =$



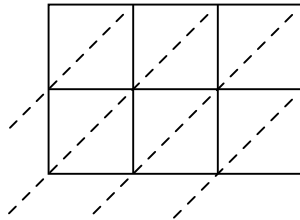
6) $338 \times 18 =$



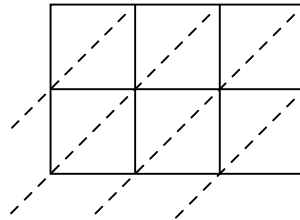
7) $690 \times 32 =$



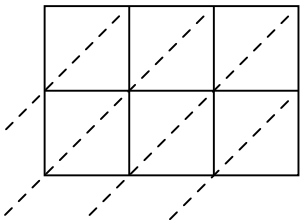
8) $309 \times 90 =$



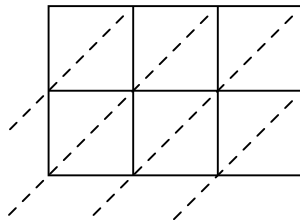
9) $211 \times 95 =$



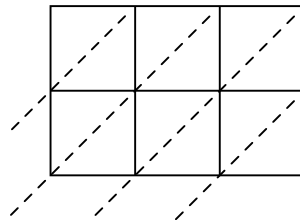
10) $226 \times 83 =$



11) $329 \times 59 =$



12) $306 \times 62 =$



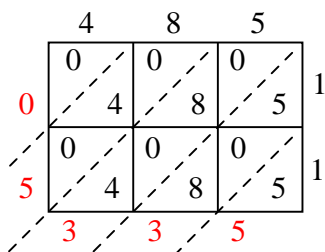
Risposte

1. _____
2. _____
3. _____
4. _____
5. _____
6. _____
7. _____
8. _____
9. _____
10. _____
11. _____
12. _____

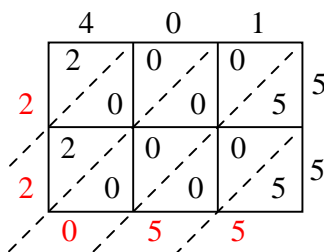


Usa la moltiplicazione del reticolo per risolvere ogni problema.

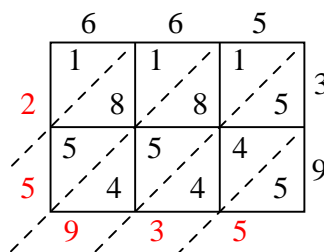
1) $485 \times 11 =$



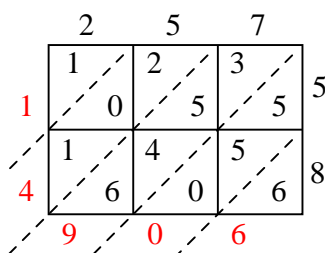
2) $401 \times 55 =$



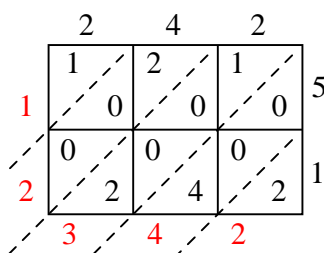
3) $665 \times 39 =$



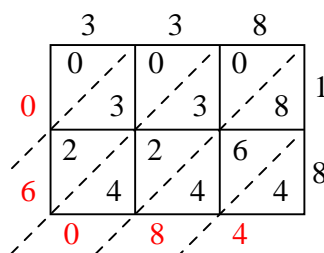
4) $257 \times 58 =$



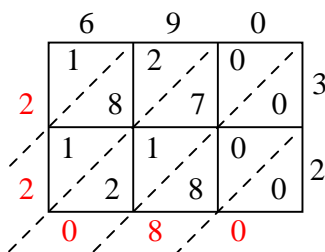
5) $242 \times 51 =$



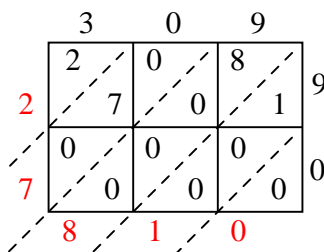
6) $338 \times 18 =$



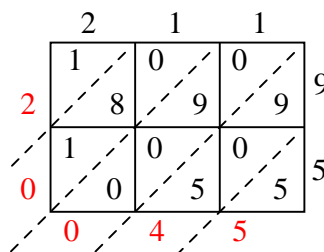
7) $690 \times 32 =$



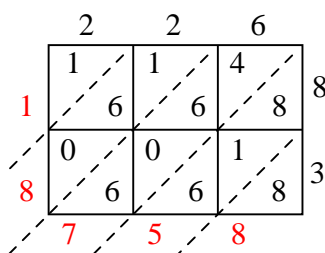
8) $309 \times 90 =$



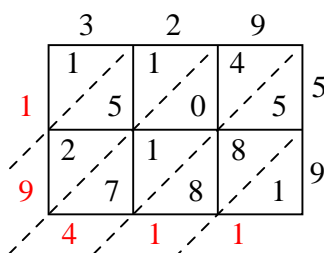
9) $211 \times 95 =$



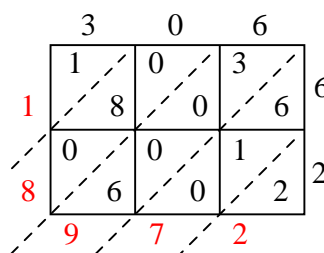
10) $226 \times 83 =$



11) $329 \times 59 =$



12) $306 \times 62 =$

**Risposte**1. **5.335**2. **22.055**3. **25.935**4. **14.906**5. **12.342**6. **6.084**7. **22.080**8. **27.810**9. **20.045**10. **18.758**11. **19.411**12. **18.972**