



Usa la moltiplicazione del reticolo per risolvere ogni problema.

1) $43 \times 55 =$



2) $50 \times 53 =$



3) $92 \times 51 =$



4) $73 \times 44 =$



5) $20 \times 57 =$



6) $97 \times 90 =$



7) $81 \times 62 =$



8) $91 \times 36 =$



9) $23 \times 53 =$



10) $74 \times 41 =$



11) $99 \times 94 =$



12) $52 \times 89 =$



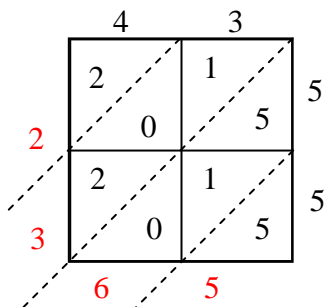
Risposte

1. _____
2. _____
3. _____
4. _____
5. _____
6. _____
7. _____
8. _____
9. _____
10. _____
11. _____
12. _____

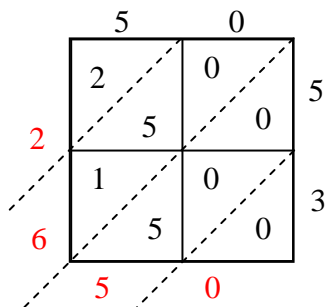


Usa la moltiplicazione del reticolo per risolvere ogni problema.

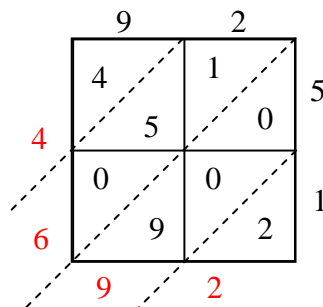
1) $43 \times 55 =$



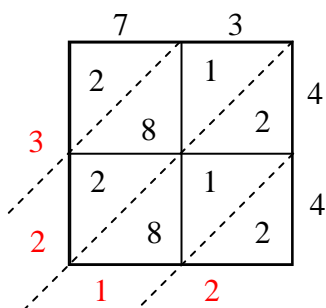
2) $50 \times 53 =$



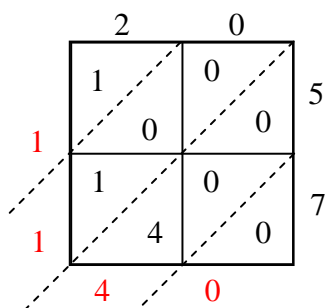
3) $92 \times 51 =$



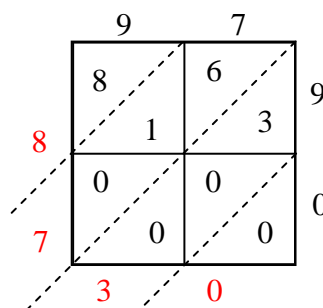
4) $73 \times 44 =$



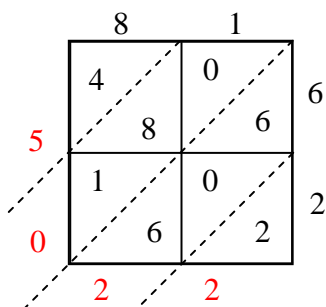
5) $20 \times 57 =$



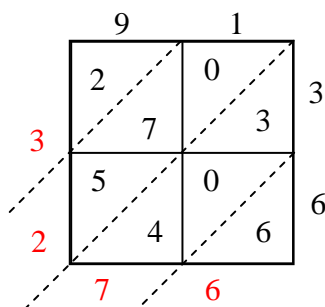
6) $97 \times 90 =$



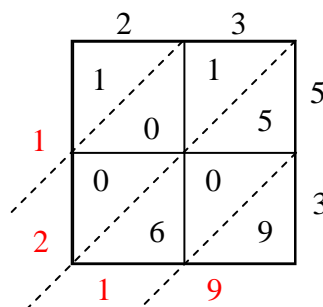
7) $81 \times 62 =$



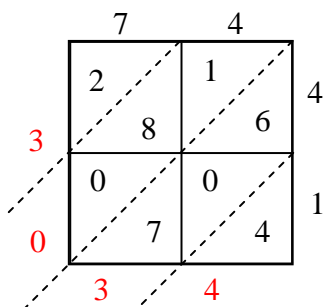
8) $91 \times 36 =$



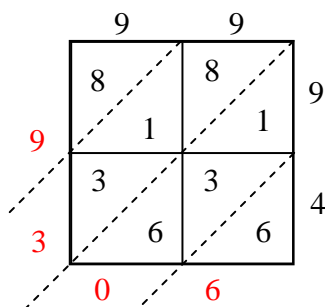
9) $23 \times 53 =$



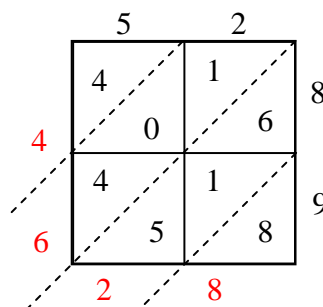
10) $74 \times 41 =$



11) $99 \times 94 =$



12) $52 \times 89 =$

**Risposte**1. **2.365**2. **2.650**3. **4.692**4. **3.212**5. **1.140**6. **8.730**7. **5.022**8. **3.276**9. **1.219**10. **3.034**11. **9.306**12. **4.628**