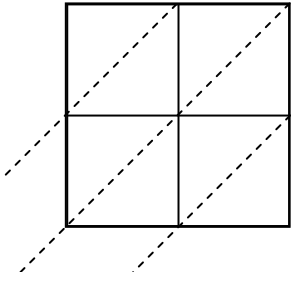


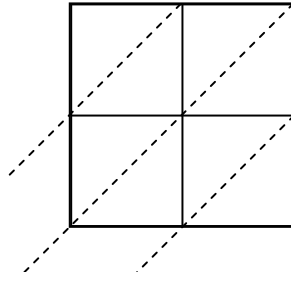


Usa la moltiplicazione del reticolo per risolvere ogni problema.

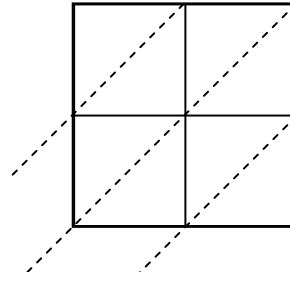
1) $51 \times 54 =$



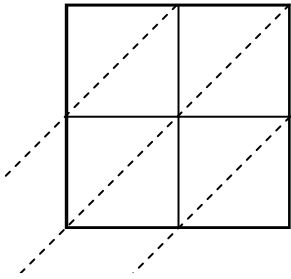
2) $92 \times 75 =$



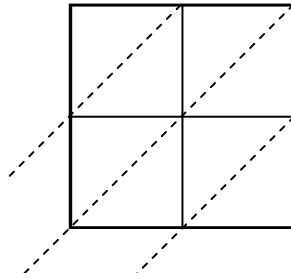
3) $74 \times 33 =$



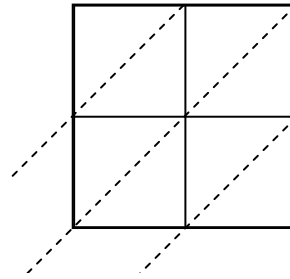
4) $68 \times 33 =$



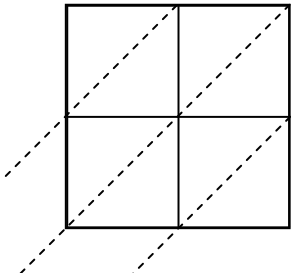
5) $87 \times 39 =$



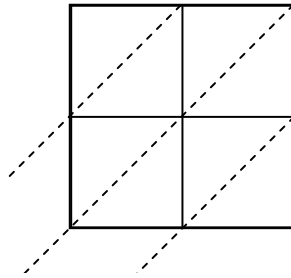
6) $21 \times 53 =$



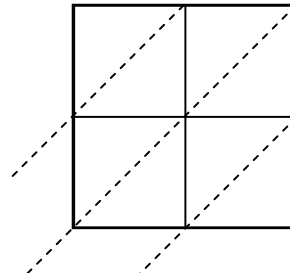
7) $66 \times 63 =$



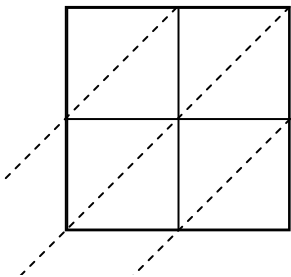
8) $28 \times 79 =$



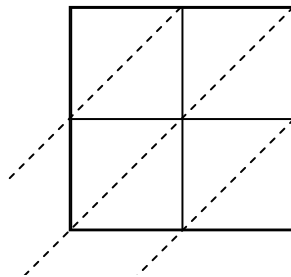
9) $97 \times 26 =$



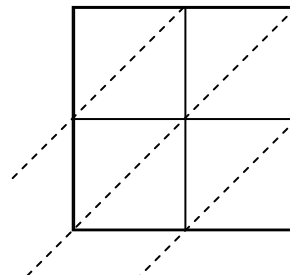
10) $39 \times 30 =$



11) $78 \times 26 =$



12) $82 \times 46 =$

**Risposte**

1. _____

2. _____

3. _____

4. _____

5. _____

6. _____

7. _____

8. _____

9. _____

10. _____

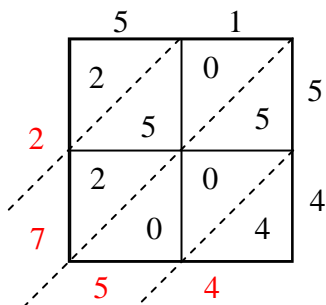
11. _____

12. _____

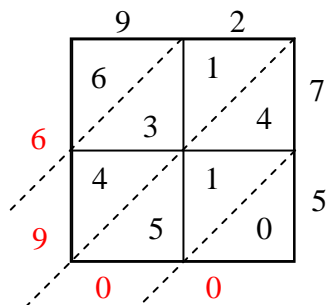


Usa la moltiplicazione del reticolo per risolvere ogni problema.

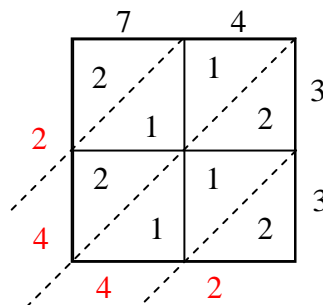
1) $51 \times 54 =$



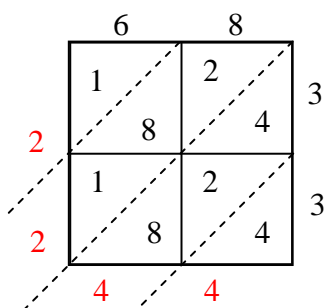
2) $92 \times 75 =$



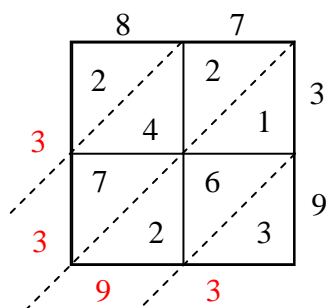
3) $74 \times 33 =$



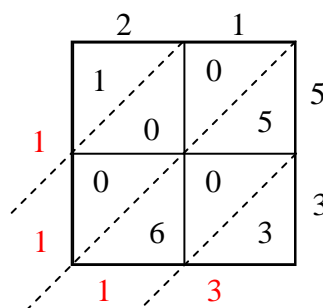
4) $68 \times 33 =$



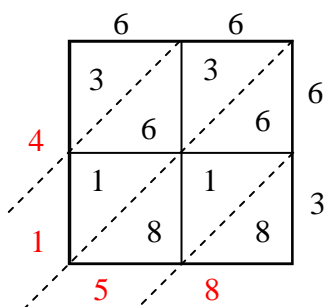
5) $87 \times 39 =$



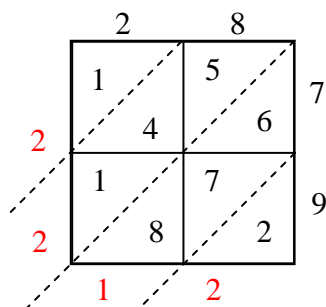
6) $21 \times 53 =$



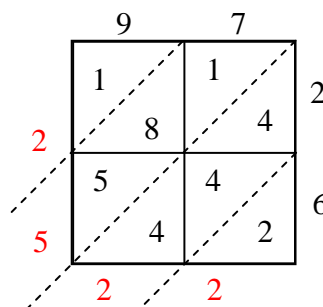
7) $66 \times 63 =$



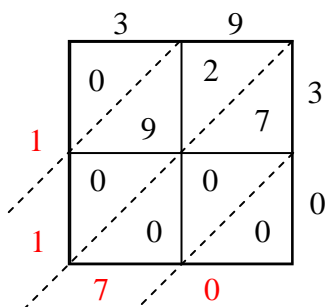
8) $28 \times 79 =$



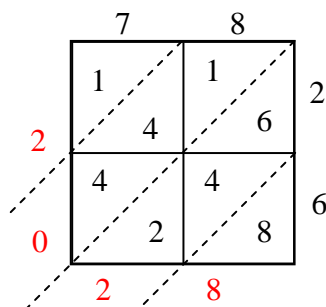
9) $97 \times 26 =$



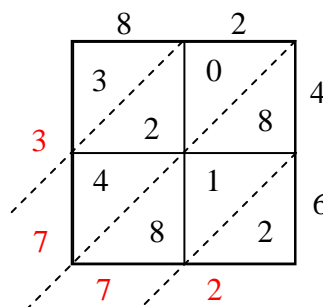
10) $39 \times 30 =$



11) $78 \times 26 =$



12) $82 \times 46 =$

**Risposte**1. **2.754**2. **6.900**3. **2.442**4. **2.244**5. **3.393**6. **1.113**7. **4.158**8. **2.212**9. **2.522**10. **1.170**11. **2.028**12. **3.772**