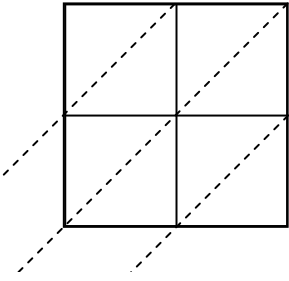


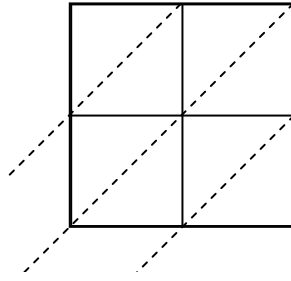


Usa la moltiplicazione del reticolo per risolvere ogni problema.

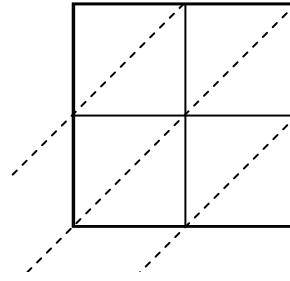
1) $88 \times 14 =$



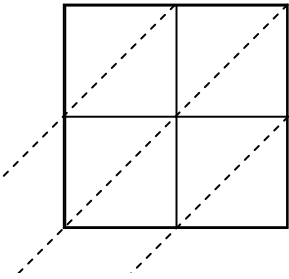
2) $68 \times 34 =$



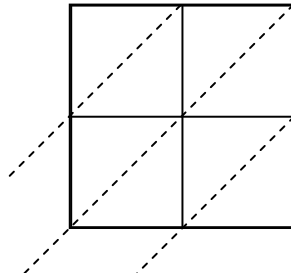
3) $13 \times 37 =$



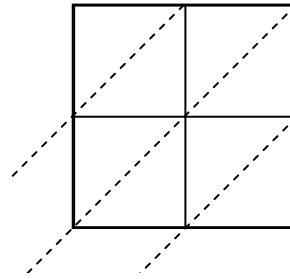
4) $81 \times 34 =$



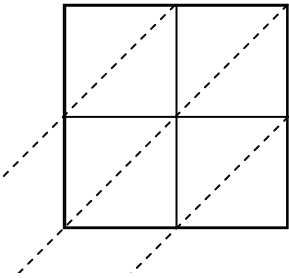
5) $25 \times 82 =$



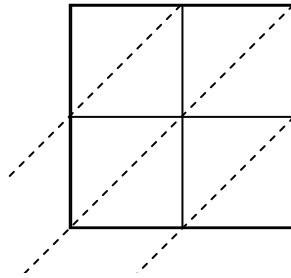
6) $44 \times 99 =$



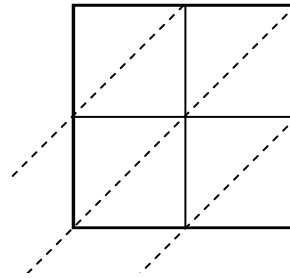
7) $20 \times 70 =$



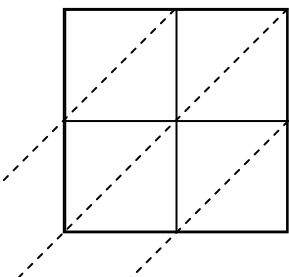
8) $34 \times 98 =$



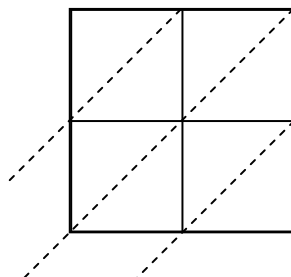
9) $11 \times 53 =$



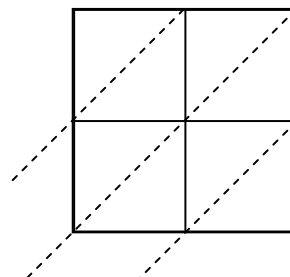
10) $80 \times 53 =$



11) $14 \times 75 =$



12) $15 \times 51 =$

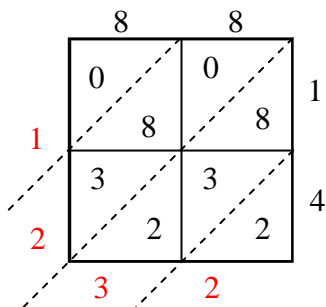
**Risposte**

1. _____
2. _____
3. _____
4. _____
5. _____
6. _____
7. _____
8. _____
9. _____
10. _____
11. _____
12. _____

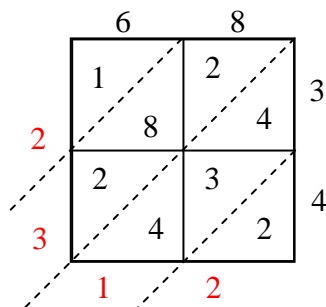


Usa la moltiplicazione del reticolo per risolvere ogni problema.

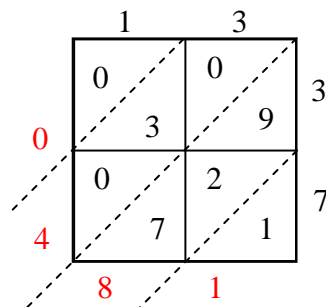
1) $88 \times 14 =$



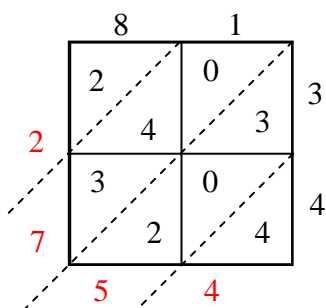
2) $68 \times 34 =$



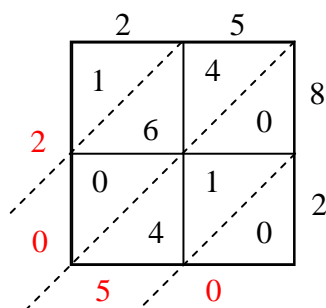
3) $13 \times 37 =$



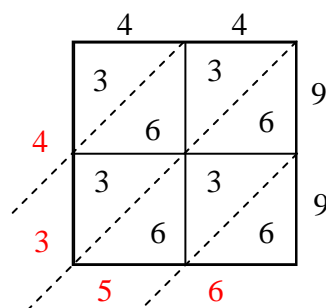
4) $81 \times 34 =$



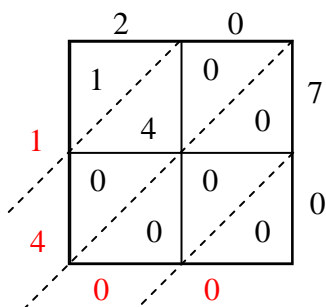
5) $25 \times 82 =$



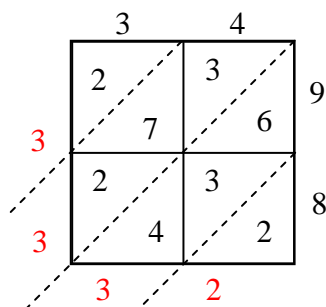
6) $44 \times 99 =$



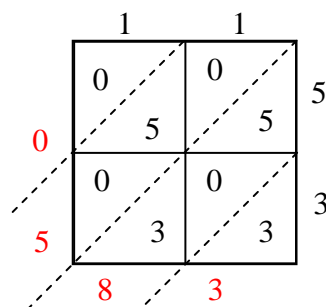
7) $20 \times 70 =$



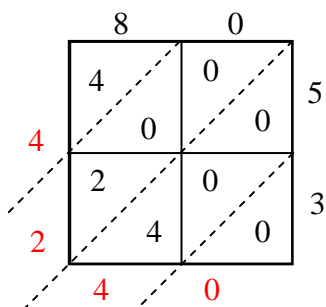
8) $34 \times 98 =$



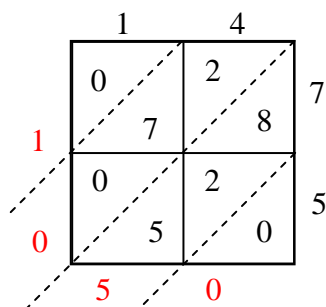
9) $11 \times 53 =$



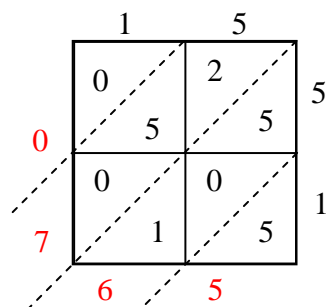
10) $80 \times 53 =$



11) $14 \times 75 =$



12) $15 \times 51 =$

**Risposte**1. **1.232**2. **2.312**3. **481**4. **2.754**5. **2.050**6. **4.356**7. **1.400**8. **3.332**9. **583**10. **4.240**11. **1.050**12. **765**