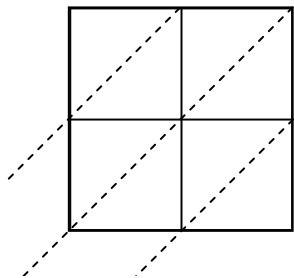




Usa la moltiplicazione del reticolo per risolvere ogni problema.

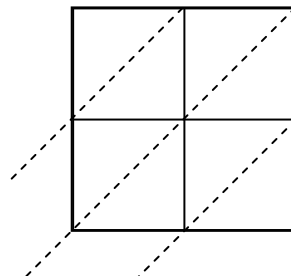
1) $96 \times 32 =$



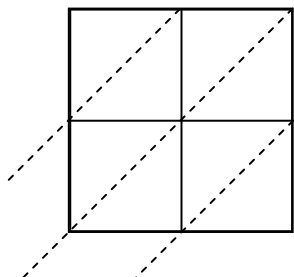
2) $69 \times 54 =$



3) $97 \times 28 =$



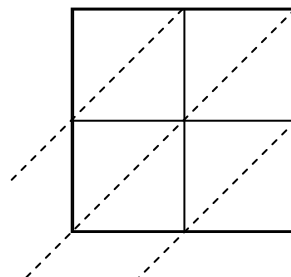
4) $75 \times 91 =$



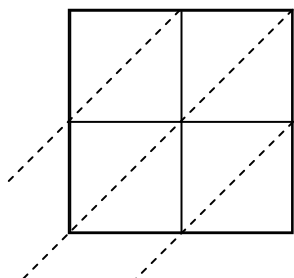
5) $48 \times 79 =$



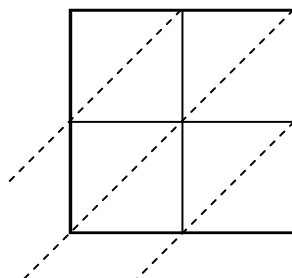
6) $56 \times 73 =$



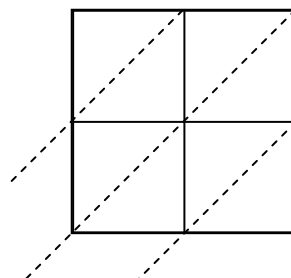
7) $45 \times 69 =$



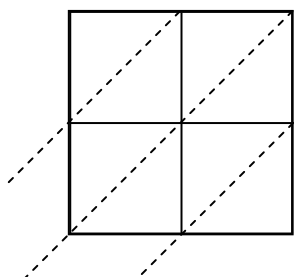
8) $84 \times 45 =$



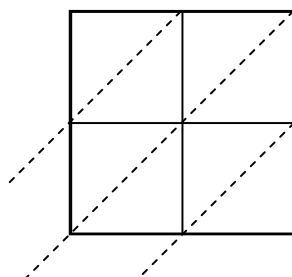
9) $29 \times 41 =$



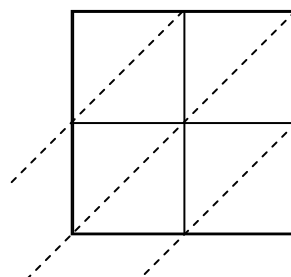
10) $45 \times 24 =$



11) $93 \times 59 =$



12) $57 \times 39 =$

**Risposte**

1. _____

2. _____

3. _____

4. _____

5. _____

6. _____

7. _____

8. _____

9. _____

10. _____

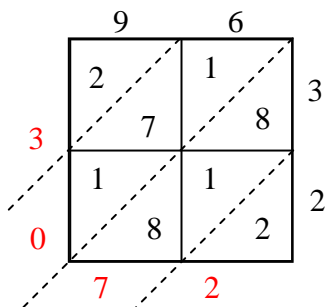
11. _____

12. _____

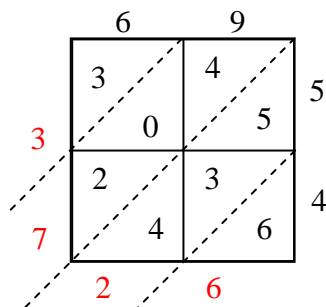


Usa la moltiplicazione del reticolo per risolvere ogni problema.

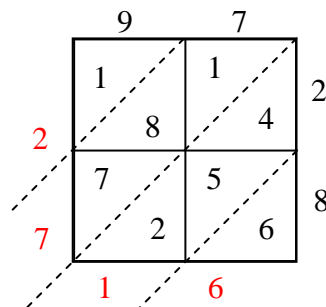
1) $96 \times 32 =$



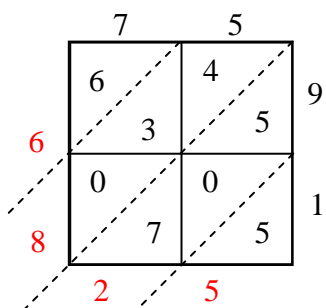
2) $69 \times 54 =$



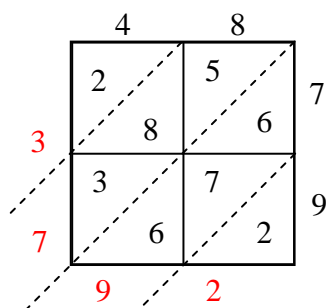
3) $97 \times 28 =$



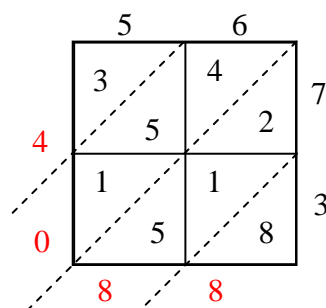
4) $75 \times 91 =$



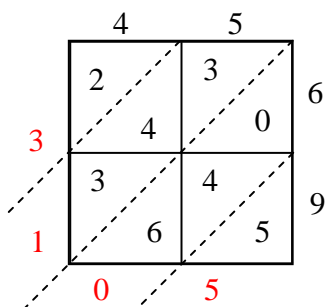
5) $48 \times 79 =$



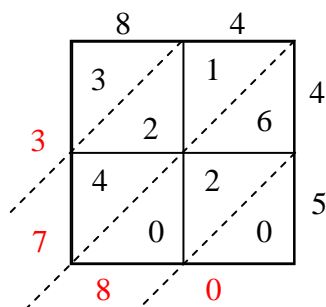
6) $56 \times 73 =$



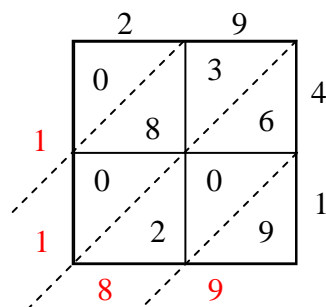
7) $45 \times 69 =$



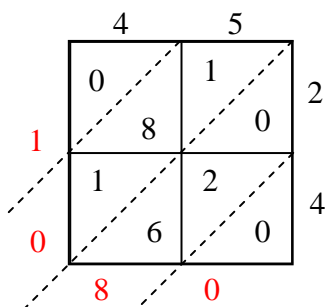
8) $84 \times 45 =$



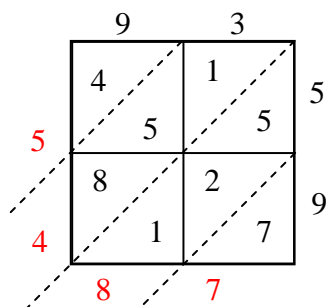
9) $29 \times 41 =$



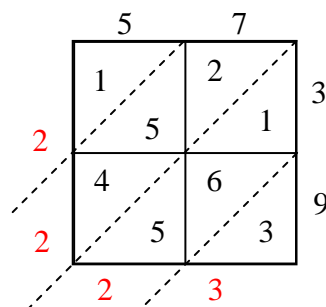
10) $45 \times 24 =$



11) $93 \times 59 =$



12) $57 \times 39 =$

**Risposte**1. **3.072**2. **3.726**3. **2.716**4. **6.825**5. **3.792**6. **4.088**7. **3.105**8. **3.780**9. **1.189**10. **1.080**11. **5.487**12. **2.223**