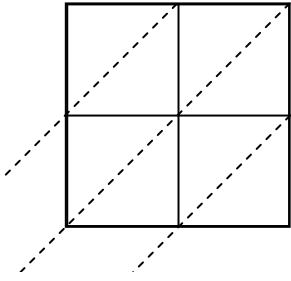


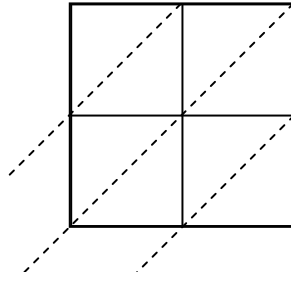


Usa la moltiplicazione del reticolo per risolvere ogni problema.

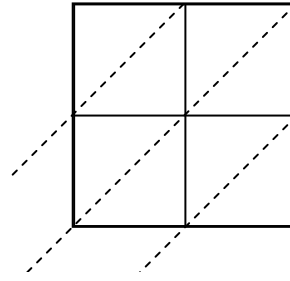
1) $18 \times 35 =$



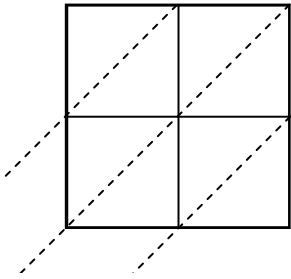
2) $53 \times 85 =$



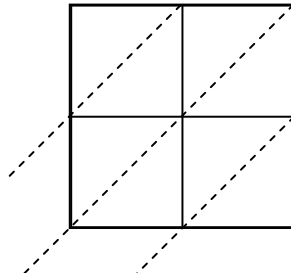
3) $76 \times 55 =$



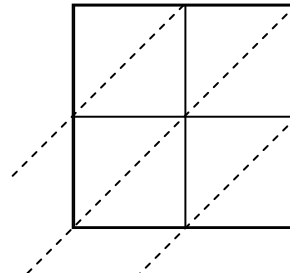
4) $52 \times 57 =$



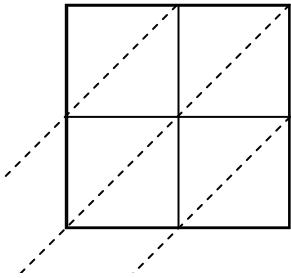
5) $80 \times 99 =$



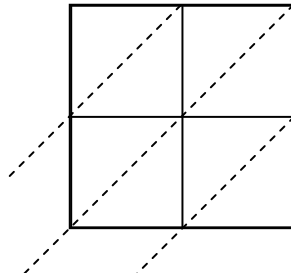
6) $38 \times 19 =$



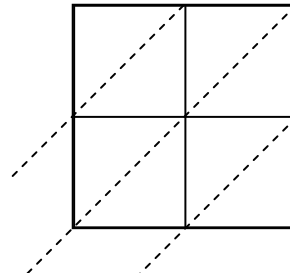
7) $93 \times 53 =$



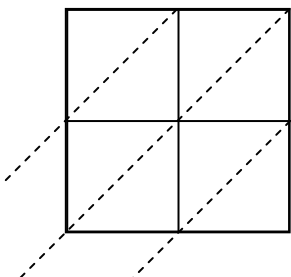
8) $27 \times 83 =$



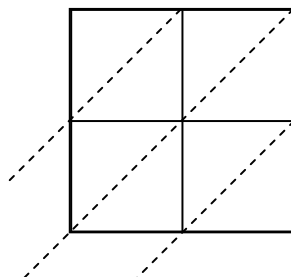
9) $72 \times 60 =$



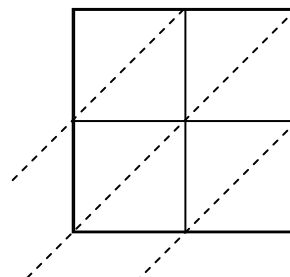
10) $64 \times 16 =$



11) $38 \times 21 =$



12) $43 \times 70 =$

**Risposte**

1. _____

2. _____

3. _____

4. _____

5. _____

6. _____

7. _____

8. _____

9. _____

10. _____

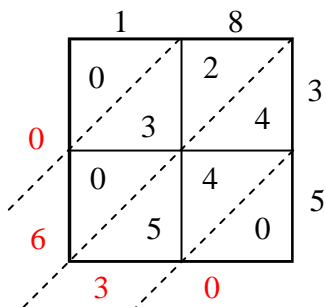
11. _____

12. _____

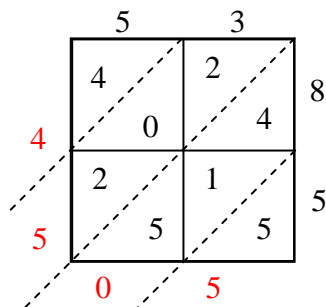


Usa la moltiplicazione del reticolo per risolvere ogni problema.

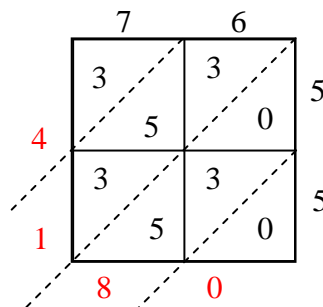
1) $18 \times 35 =$



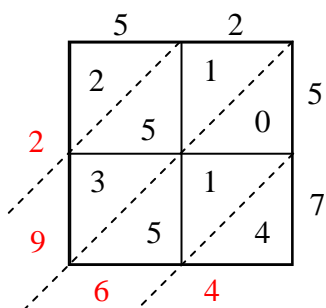
2) $53 \times 85 =$



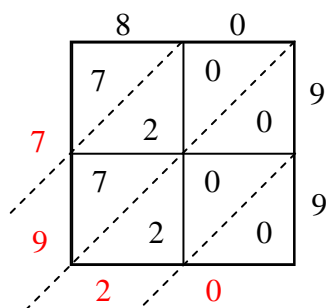
3) $76 \times 55 =$



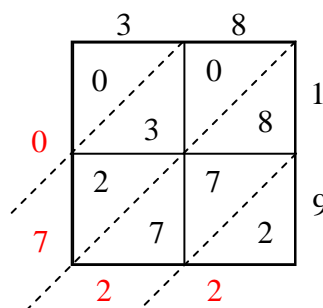
4) $52 \times 57 =$



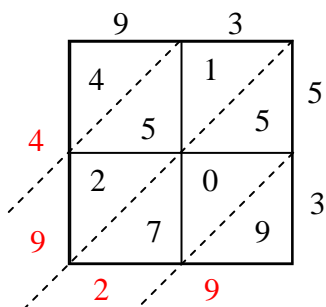
5) $80 \times 99 =$



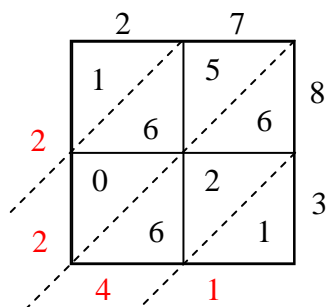
6) $38 \times 19 =$



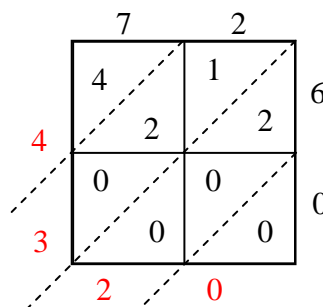
7) $93 \times 53 =$



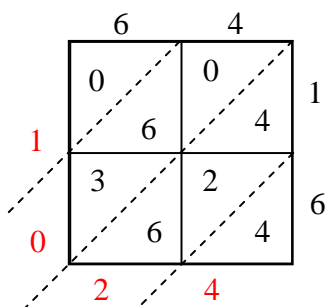
8) $27 \times 83 =$



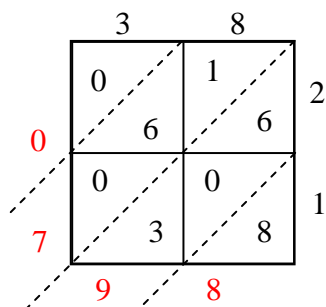
9) $72 \times 60 =$



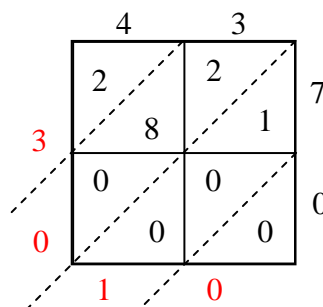
10) $64 \times 16 =$



11) $38 \times 21 =$



12) $43 \times 70 =$

**Risposte**1. **630**2. **4.505**3. **4.180**4. **2.964**5. **7.920**6. **722**7. **4.929**8. **2.241**9. **4.320**10. **1.024**11. **798**12. **3.010**