
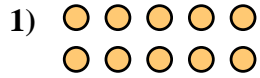
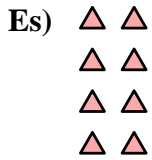




Scrivi ogni array come un problema di addizione e risolvi.

Risposte

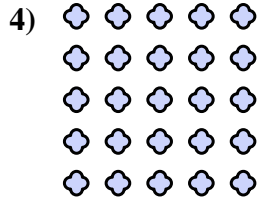
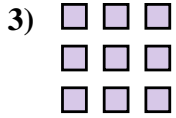


Es. $2+2+2+2=8$

1. _____

2. _____

3. _____





4. _____

5. _____

6. _____

7. _____

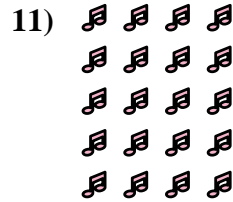
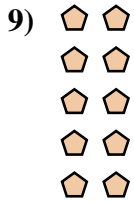


8. _____

9. _____

10. _____


11. _____



12. _____


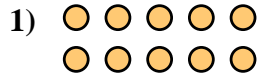
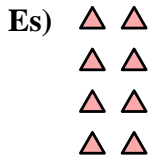
13. _____

14. _____





Scrivi ogni array come un problema di addizione e risolvi.

**Risposte**

Es. $2+2+2+2=8$

1. $5+5=10$

2. $4+4+4=12$

3. $3+3+3=9$

4. $5+5+5+5+5=25$

5. $5+5+5=15$

6. $3+3=6$

7. $4+4+4+4=16$

8. $2+2+2=6$

9. $2+2+2+2+2=10$

10. $3+3+3+3=12$

11. $4+4+4+4+4=20$

12. $4+4=8$

13. $3+3+3+3+3=15$

14. $2+2=4$

