




Scrivi ogni array come un problema di addizione e risolvi.

Risposte

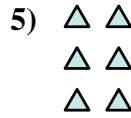



Es. 5+5+5=15

1. _____

2. _____

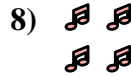
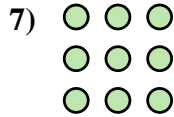

3. _____



4. _____

5. _____

6. _____

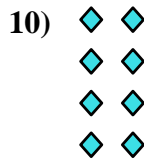


7. _____

8. _____

9. _____

10. _____

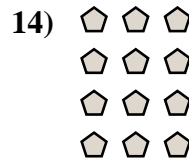


11. _____

12. _____


13. _____

14. _____





Scrivi ogni array come un problema di addizione e risolvi.

**Risposte**

Es. $5+5+5=15$

1. $5+5=10$

2. $4+4+4+4=16$

3. $2+2+2+2+2=10$

4. $4+4+4=12$

5. $2+2+2=6$

6. $5+5+5+5+5=25$

7. $3+3+3=9$

8. $2+2=4$

9. $3+3+3+3+3=15$

10. $2+2+2+2=8$

11. $3+3=6$

12. $5+5+5+5=20$

13. $4+4=8$

14. $3+3+3+3=12$

