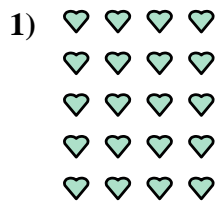





Scrivi ogni array come un problema di addizione e risolvi.

**Risposte**

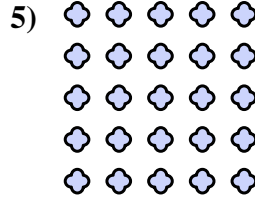


Es.  $4+4+4+4=16$

1. \_\_\_\_\_

2. \_\_\_\_\_

3. \_\_\_\_\_

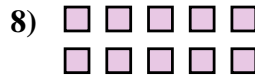
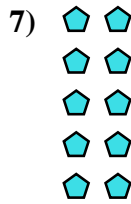


4. \_\_\_\_\_

5. \_\_\_\_\_

6. \_\_\_\_\_


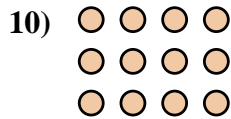
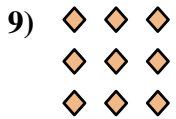
7. \_\_\_\_\_



8. \_\_\_\_\_

9. \_\_\_\_\_

10. \_\_\_\_\_



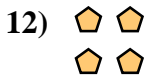


11. \_\_\_\_\_

12. \_\_\_\_\_

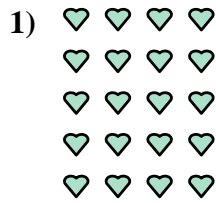

13. \_\_\_\_\_

14. \_\_\_\_\_





Scrivi ogni array come un problema di addizione e risolvi.

**Risposte**

Es.  $4+4+4+4=16$

1.  $4+4+4+4+4=20$

2.  $5+5+5+5=20$

3.  $3+3=6$

4.  $3+3+3+3=12$

5.  $5+5+5+5+5=25$

6.  $5+5+5=15$

7.  $2+2+2+2+2=10$

8.  $5+5=10$

9.  $3+3+3=9$

10.  $4+4+4=12$

11.  $2+2+2+2=8$

12.  $2+2=4$

13.  $2+2+2=6$

14.  $4+4=8$

