





Scrivi ogni array come un problema di addizione e risolvi.

RisposteEs. $4+4+4+4+4=20$

1. _____

2. _____

3. _____

4. _____

5. _____

6. _____

7. _____

8. _____

9. _____

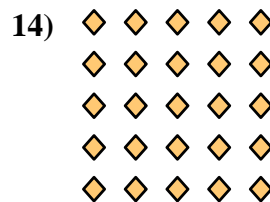

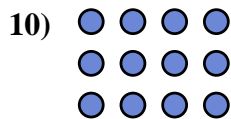


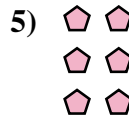
10. _____

11. _____

12. _____



13. _____

14. _____

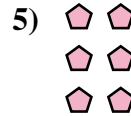





Scrivi ogni array come un problema di addizione e risolvi.



Es. $4+4+4+4+4=20$



1. $2+2+2+2=8$

2. $2+2=4$

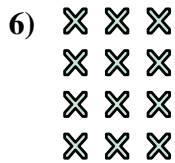
3. $3+3+3+3+3=15$

4. $4+4+4+4=16$

5. $2+2+2=6$

6. $3+3+3+3=12$



7. $2+2+2+2+2=10$



8. $3+3+3=9$

9. $3+3=6$

10. $4+4+4=12$



11. $5+5=10$

12. $4+4=8$

13. $5+5+5=15$

14. $5+5+5+5+5=25$

