




Scrivi ogni array come un problema di addizione e risolvi.



Risposte

Es. $4+4+4+4=16$

1. _____

2. _____

3. _____

4. _____

5. _____

6. _____

7. _____

8. _____

9. _____

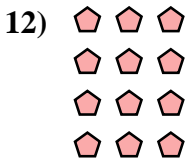

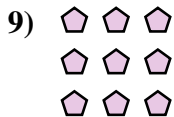
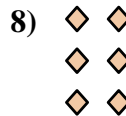

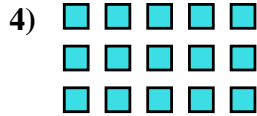
10. _____

11. _____

12. _____


13. _____

14. _____






Scrivi ogni array come un problema di addizione e risolvi.

**Risposte**

Es. $4+4+4+4=16$



1. $4+4=8$

2. $2+2+2+2+2=10$

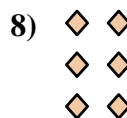

3. $4+4+4=12$

4. $5+5+5=15$

5. $3+3=6$

6. $5+5+5+5=20$



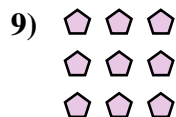
7. $3+3+3+3+3=15$



8. $2+2+2=6$

9. $3+3+3=9$

10. $5+5+5+5+5=25$



11. $4+4+4+4+4=20$

12. $3+3+3+3=12$

13. $2+2=4$

14. $5+5=10$

