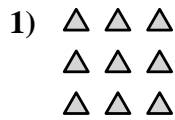
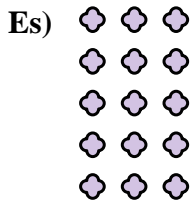




Scrivi ogni array come un problema di addizione e risolvi.

Risposte





Es. 3+3+3+3+3=15

1. _____

2. _____

3. _____




4. _____

5. _____

6. _____

7. _____


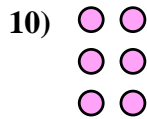
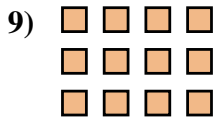


8. _____

9. _____

10. _____

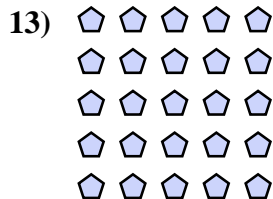
11. _____



12. _____

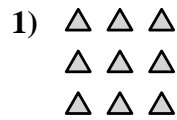
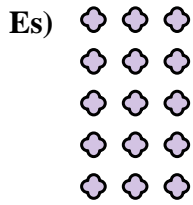
13. _____

14. _____





Scrivi ogni array come un problema di addizione e risolvi.

**Risposte**

Es. $3+3+3+3+3=15$

1. $3+3+3=9$

2. $3+3=6$

3. $2+2+2+2=8$

4. $4+4+4+4=16$

5. $5+5=10$

6. $4+4=8$

7. $3+3+3+3=12$

8. $4+4+4+4+4=20$

9. $4+4+4=12$

10. $2+2+2=6$

11. $5+5+5=15$

12. $5+5+5+5=20$

13. $5+5+5+5+5=25$

14. $2+2=4$

