




Scrivi ogni array come un problema di addizione e risolvi.



Risposte

Es. 4+4+4=12

1. _____

2. _____

3. _____

4. _____

5. _____

6. _____

7. _____

8. _____

9. _____

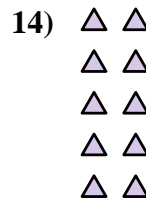
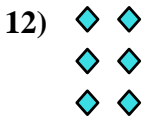
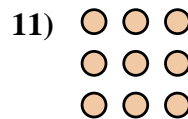

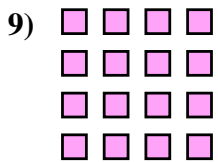

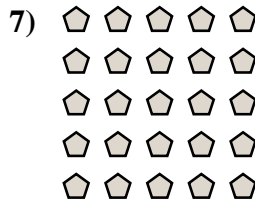
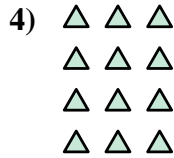

10. _____

11. _____

12. _____


13. _____

14. _____





Scrivi ogni array come un problema di addizione e risolvi.

**Risposte**

Es. $4+4+4=12$

1. $5+5=10$

2. $5+5+5=15$

3. $5+5+5+5=20$

4. $3+3+3+3=12$

5. $3+3+3+3+3=15$

6. $3+3=6$

7. $5+5+5+5+5=25$

8. $2+2=4$

9. $4+4+4+4=16$

10. $2+2+2+2=8$

11. $3+3+3=9$

12. $2+2+2=6$

13. $4+4=8$

14. $2+2+2+2+2=10$

