




Determina quale scelta descrive meglio le monete nell'ordine mostrato.

Risposte



- A. quarter, nickel, penny, dime
- B. nickel, quarter, penny, dime
- C. quarter, penny, dime, nickel
- D. dime, quarter, penny, nickel

1. _____



- A. nickel, dime, penny, quarter
- B. nickel, quarter, dime, penny
- C. penny, quarter, dime, nickel
- D. quarter, dime, nickel, penny

2. _____

3. _____



- A. dime, nickel, quarter, penny
- B. penny, dime, quarter, nickel
- C. penny, dime, nickel, quarter
- D. nickel, dime, penny, quarter

4. _____

5. _____



- A. quarter, dime, penny, nickel
- B. nickel, dime, quarter, penny
- C. dime, quarter, nickel, penny
- D. nickel, quarter, dime, penny

6. _____

7. _____



- A. nickel, dime, penny, quarter
- B. penny, nickel, quarter, dime
- C. dime, quarter, nickel, penny
- D. penny, quarter, nickel, dime


8. _____



- A. dime, penny, quarter, nickel
- B. quarter, dime, penny, nickel
- C. nickel, quarter, dime, penny
- D. penny, nickel, quarter, dime




- A. quarter, penny, dime, nickel
- B. nickel, quarter, penny, dime
- C. dime, quarter, nickel, penny
- D. dime, nickel, penny, quarter



- A. dime, nickel, penny, quarter
- B. nickel, penny, dime, quarter
- C. quarter, dime, nickel, penny
- D. dime, nickel, quarter, penny



Determina quale scelta descrive meglio le monete nell'ordine mostrato.



- A. quarter, nickel, penny, dime
- B. nickel, quarter, penny, dime
- C. quarter, penny, dime, nickel
- D. dime, quarter, penny, nickel



- A. nickel, dime, penny, quarter
- B. nickel, quarter, dime, penny
- C. penny, quarter, dime, nickel
- D. quarter, dime, nickel, penny



- A. dime, nickel, quarter, penny
- B. penny, dime, quarter, nickel
- C. penny, dime, nickel, quarter
- D. nickel, dime, penny, quarter



- A. quarter, dime, penny, nickel
- B. nickel, dime, quarter, penny
- C. dime, quarter, nickel, penny
- D. nickel, quarter, dime, penny




- A. nickel, dime, penny, quarter
- B. penny, nickel, quarter, dime
- C. dime, quarter, nickel, penny
- D. penny, quarter, nickel, dime



- A. dime, penny, quarter, nickel
- B. quarter, dime, penny, nickel
- C. nickel, quarter, dime, penny
- D. penny, nickel, quarter, dime



- A. quarter, penny, dime, nickel
- B. nickel, quarter, penny, dime
- C. dime, quarter, nickel, penny
- D. dime, nickel, penny, quarter



- A. dime, nickel, penny, quarter
- B. nickel, penny, dime, quarter
- C. quarter, dime, nickel, penny
- D. dime, nickel, quarter, penny

Risposte

1. **C**

2. **A**

3. **A**

4. **B**

5. **B**

6. **B**

7. **D**

8. **B**