





Determina la quantità di denaro indicata.

Risposte




1. _____



2. _____



3. _____



4. _____



5. _____



6. _____



7. _____



8. _____






9. _____



10. _____



Determina la quantità di denaro indicata.



Risposte

1. \$0,75

2. \$0,99

3. \$0,99

4. \$0,83

5. \$0,93

6. \$0,89

7. \$0,85

8. \$0,99

9. \$0,98

10. \$0,96