




confronta la lunghezza delle coppie.



Risposte

Es. 2 1/2 6 - 7

1. _____

2. _____

3. _____

4. _____

5. _____

6. _____


7. _____

8. _____

9. _____



confronta la lunghezza delle coppie.



Risposte

Es. 2 1/2 6 - 7

1. 4 1/2 11 - 12

2. 3 7 - 8

3. 5 12 - 13

4. 2 5 - 6

5. 3 1/2 8 - 9

6. 5 1/2 13 - 14

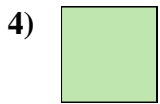

7. 0 1/2 1 - 2

8. 1 2 - 3

9. 4 10 - 11



confronta la lunghezza delle coppie.



Risposte

Es. 1 2-3

1. _____

2. _____

3. _____

4. _____

5. _____

6. _____


7. _____

8. _____

9. _____



confronta la lunghezza delle coppie.

**Risposte**

| | | |
|-----|--------------|----------------|
| Es. | <u>1</u> | <u>2 - 3</u> |
| 1. | <u>1 1/2</u> | <u>3 - 4</u> |
| 2. | <u>5</u> | <u>12 - 13</u> |
| 3. | <u>5 1/2</u> | <u>13 - 14</u> |
| 4. | <u>0 1/2</u> | <u>1 - 2</u> |
| 5. | <u>3</u> | <u>7 - 8</u> |
| 6. | <u>2</u> | <u>5 - 6</u> |
| 7. | <u>4</u> | <u>10 - 11</u> |
| 8. | <u>4 1/2</u> | <u>11 - 12</u> |
| 9. | <u>3 1/2</u> | <u>8 - 9</u> |



confronta la lunghezza delle coppie.



Risposte

Es. 4 1/2 11 - 12

1. _____

2. _____

3. _____

4. _____

5. _____

6. _____

7. _____

8. _____

9. _____



confronta la lunghezza delle coppie.



Risposte

Es. 4 1/2 11 - 12

1. 5 1/2 13 - 14

2. 1 2 - 3

3. 1 1/2 3 - 4

4. 4 10 - 11

5. 2 5 - 6

6. 2 1/2 6 - 7

7. 3 7 - 8

8. 0 1/2 1 - 2

9. 5 12 - 13



confronta la lunghezza delle coppie.



Risposte

Es. 3 7-8

1. _____

2. _____

3. _____

4. _____

5. _____

6. _____

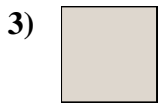
7. _____

8. _____

9. _____



confronta la lunghezza delle coppie.



Risposte

Es. 3 7 - 8

1. 5 12 - 13

2. 1 1/2 3 - 4

3. 0 1/2 1 - 2

4. 4 1/2 11 - 12

5. 3 1/2 8 - 9

6. 2 1/2 6 - 7

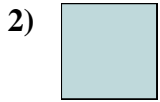
7. 5 1/2 13 - 14

8. 2 5 - 6

9. 4 10 - 11



confronta la lunghezza delle coppie.



Risposte

Es. 3 7-8

1. _____

2. _____

3. _____

4. _____

5. _____

6. _____

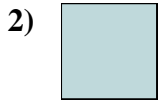
7. _____

8. _____

9. _____



confronta la lunghezza delle coppie.




Risposte

| | | |
|-----|--------------|----------------|
| Es. | <u>3</u> | <u>7 - 8</u> |
| 1. | <u>1 1/2</u> | <u>3 - 4</u> |
| 2. | <u>0 1/2</u> | <u>1 - 2</u> |
| 3. | <u>5 1/2</u> | <u>13 - 14</u> |
| 4. | <u>1</u> | <u>2 - 3</u> |
| 5. | <u>4 1/2</u> | <u>11 - 12</u> |
| 6. | <u>4</u> | <u>10 - 11</u> |
| 7. | <u>5</u> | <u>12 - 13</u> |
| 8. | <u>2</u> | <u>5 - 6</u> |
| 9. | <u>2 1/2</u> | <u>6 - 7</u> |



confronta la lunghezza delle coppie.



Risposte

Es. 5 1/2 13 - 14

1. _____

2. _____

3. _____

4. _____

5. _____

6. _____

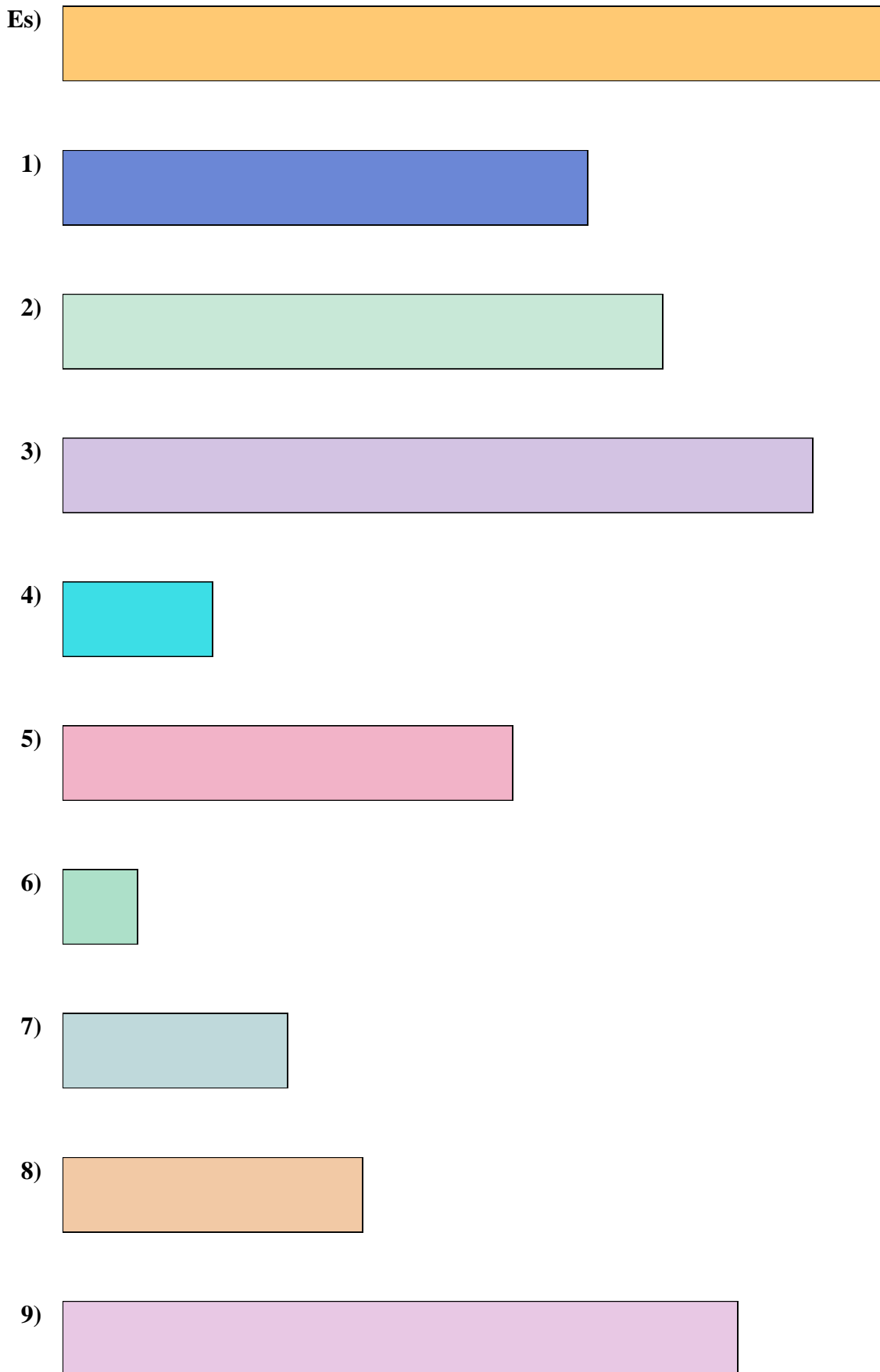
7. _____

8. _____

9. _____



confronta la lunghezza delle coppie.



Risposte

- Es. 5 1/2 13 - 14
1. 3 1/2 8 - 9
2. 4 10 - 11
3. 5 12 - 13
4. 1 2 - 3
5. 3 7 - 8
6. 0 1/2 1 - 2
7. 1 1/2 3 - 4
8. 2 5 - 6
9. 4 1/2 11 - 12



confronta la lunghezza delle coppie.



Risposte

Es. 4 10 - 11

1. _____

2. _____

3. _____

4. _____

5. _____

6. _____

7. _____

8. _____

9. _____



confronta la lunghezza delle coppie.



Risposte

Es. 4 10 - 11

1. 0 1/2 1 - 2

2. 1 1/2 3 - 4

3. 5 1/2 13 - 14

4. 3 7 - 8

5. 2 1/2 6 - 7

6. 1 2 - 3

7. 2 5 - 6

8. 4 1/2 11 - 12

9. 3 1/2 8 - 9



confronta la lunghezza delle coppie.



Risposte

Es. 3 1/2 8 - 9

1. _____

2. _____

3. _____

4. _____

5. _____

6. _____

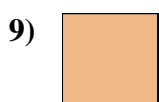
7. _____

8. _____

9. _____



confronta la lunghezza delle coppie.



Risposte

Es. 3 1/2 8 - 9

1. 1 2 - 3

2. 1 1/2 3 - 4

3. 5 1/2 13 - 14

4. 5 12 - 13

5. 2 5 - 6

6. 3 7 - 8


7. 4 1/2 11 - 12

8. 2 1/2 6 - 7

9. 0 1/2 1 - 2



confronta la lunghezza delle coppie.



Risposte

Es. 4 10 - 11

1. _____

2. _____

3. _____

4. _____

5. _____

6. _____


7. _____

8. _____

9. _____



confronta la lunghezza delle coppie.





Risposte

| | | |
|-----|--------------|----------------|
| Es. | <u>4</u> | <u>10 - 11</u> |
| 1. | <u>2</u> | <u>5 - 6</u> |
| 2. | <u>3</u> | <u>7 - 8</u> |
| 3. | <u>3 1/2</u> | <u>8 - 9</u> |
| 4. | <u>0 1/2</u> | <u>1 - 2</u> |
| 5. | <u>1 1/2</u> | <u>3 - 4</u> |
| 6. | <u>2 1/2</u> | <u>6 - 7</u> |
| 7. | <u>5</u> | <u>12 - 13</u> |
| 8. | <u>4 1/2</u> | <u>11 - 12</u> |
| 9. | <u>5 1/2</u> | <u>13 - 14</u> |



confronta la lunghezza delle coppie.



Risposte

Es. 1 2-3

1. _____

2. _____

3. _____

4. _____

5. _____

6. _____


7. _____

8. _____

9. _____



confronta la lunghezza delle coppie.



Risposte

- Es. 1 2 - 3
1. 3 1/2 8 - 9
2. 5 1/2 13 - 14
3. 5 12 - 13
4. 4 1/2 11 - 12
5. 1 1/2 3 - 4
6. 4 10 - 11
7. 2 5 - 6
8. 3 7 - 8
9. 0 1/2 1 - 2