



Misura la lunghezza e l'altezza di ogni rettangolo in pollici e in centimetri

Es)



**Risposte**

Es. 3 1/2 0 1/2 8,9 1,3


1. \_\_\_\_\_

2. \_\_\_\_\_

3. \_\_\_\_\_

4. \_\_\_\_\_


1)




2)



3)



4)





Misura la lunghezza e l'altezza di ogni rettangolo in pollici e in centimetri

Es)



**Risposte**

Es. 3 1/2 0 1/2 8,9 1,3


1. 1 1 1/2 2,5 3,8

2. 1 1/2 1 3,8 2,5

3. 5 1/2 1 1/2 14 3,8

4. 5 1 12,7 2,5


1)



2)



3)



4)

