




Misura la lunghezza e l'altezza di ogni rettangolo in pollici e in centimetri

Es)



1)




2)



3)



4)



## Risposte

Es. 3 0 1/2 7,6 1,3

1. \_\_\_\_\_

2. \_\_\_\_\_

3. \_\_\_\_\_

4. \_\_\_\_\_




Misura la lunghezza e l'altezza di ogni rettangolo in pollici e in centimetri

Es)



1)




2)



3)



4)

**Risposte**Es. 3 0 1/2 7,6 1,31. 2 1/2 1 6,4 2,52. 5 1/2 0 1/2 14 1,33. 2 1 5,1 2,54. 5 1 12,7 2,5