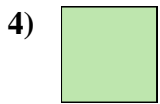





Misura la lunghezza di ogni barra sia in centimetri che in pollici.



Risposte

Es. 1 2-3

1. _____

2. _____

3. _____

4. _____

5. _____

6. _____


7. _____

8. _____

9. _____



Misura la lunghezza di ogni barra sia in centimetri che in pollici.



Risposte

- | | | |
|-----|--------------|----------------|
| Es. | <u>1</u> | <u>2 - 3</u> |
| 1. | <u>1 1/2</u> | <u>3 - 4</u> |
| 2. | <u>5</u> | <u>12 - 13</u> |
| 3. | <u>5 1/2</u> | <u>13 - 14</u> |
| 4. | <u>0 1/2</u> | <u>1 - 2</u> |
| 5. | <u>3</u> | <u>7 - 8</u> |
| 6. | <u>2</u> | <u>5 - 6</u> |
| 7. | <u>4</u> | <u>10 - 11</u> |
| 8. | <u>4 1/2</u> | <u>11 - 12</u> |
| 9. | <u>3 1/2</u> | <u>8 - 9</u> |