



Abbina la descrizione in alto con l'immagine visiva in basso.

**Risposte**

1)  $\vec{AC}$  parallel to  $\vec{EB}$

2)  $\vec{AD}$  intersecting  $\vec{BC}$  at point E

3)  $\angle DEC$  intersected by  $\vec{AC}$

4) Right  $\angle ADE$

5)  $\vec{BC}$  intersecting  $\angle ACD$

6) Acute  $\angle BED$

7)  $\vec{BA}$  intersecting  $\vec{AD}$

8)  $\vec{AB}$  intersecting  $\vec{AD}$

9)  $\vec{AB}$  parallel to  $\vec{CD}$

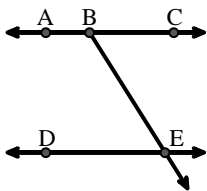
10) D as the midpoint of  $\vec{CE}$

11)  $\vec{BD}$  intersecting  $\vec{CE}$

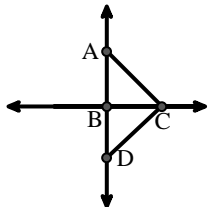
12)  $\vec{BE}$  intersecting  $\vec{CD}$

1. \_\_\_\_\_
2. \_\_\_\_\_
3. \_\_\_\_\_
4. \_\_\_\_\_
5. \_\_\_\_\_
6. \_\_\_\_\_
7. \_\_\_\_\_
8. \_\_\_\_\_
9. \_\_\_\_\_
10. \_\_\_\_\_
11. \_\_\_\_\_
12. \_\_\_\_\_

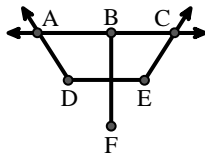
A.



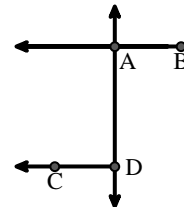
B.



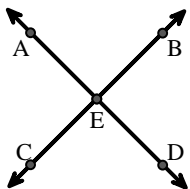
C.



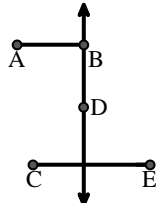
D.



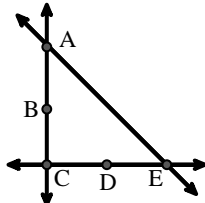
E.



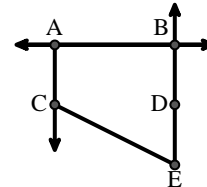
F.



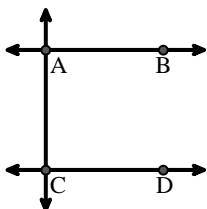
G.



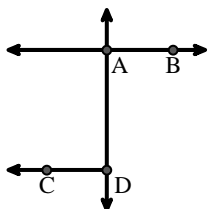
H.



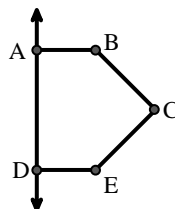
I.



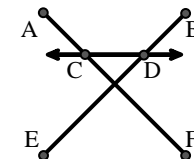
J.



K.



L.





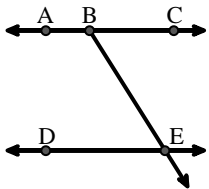
Abbina la descrizione in alto con l'immagine visiva in basso.

**Risposte**

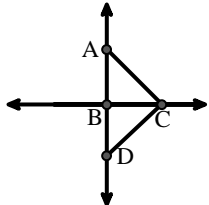
- 1)  $\overrightarrow{AC}$  parallel to  $\overrightarrow{EB}$
- 2)  $\overleftrightarrow{AD}$  intersecting  $\overleftrightarrow{BC}$  at point E
- 3)  $\angle DEC$  intersected by  $\overleftrightarrow{AC}$
- 4) Right  $\angle ADE$
- 5)  $\overleftrightarrow{BC}$  intersecting  $\angle ACD$
- 6) Acute  $\angle BED$
- 7)  $\overleftrightarrow{BA}$  intersecting  $\overleftrightarrow{AD}$
- 8)  $\overleftrightarrow{AB}$  intersecting  $\overleftrightarrow{AD}$
- 9)  $\overleftrightarrow{AB}$  parallel to  $\overleftrightarrow{CD}$
- 10) D as the midpoint of  $\overleftrightarrow{CE}$
- 11)  $\overleftrightarrow{BD}$  intersecting  $\overleftrightarrow{CE}$
- 12)  $\overleftrightarrow{BE}$  intersecting  $\overleftrightarrow{CD}$

1.   **H**
2.   **E**
3.   **C**
4.   **K**
5.   **B**
6.   **A**
7.   **D**
8.   **J**
9.   **I**
10.   **G**
11.   **F**
12.   **L**

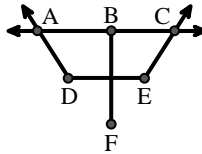
A.



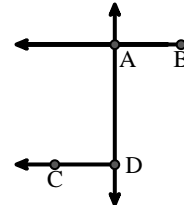
B.



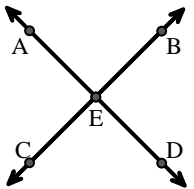
C.



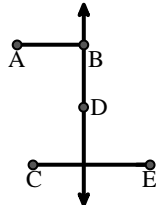
D.



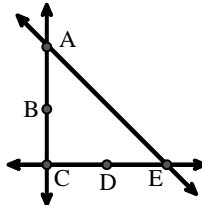
E.



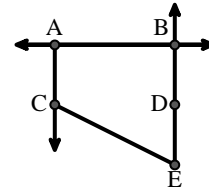
F.



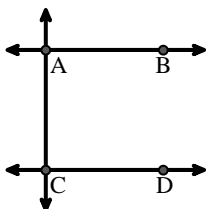
G.



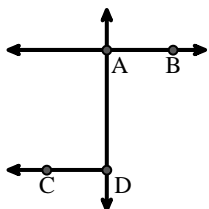
H.



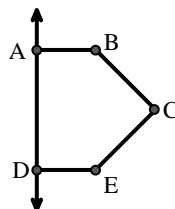
I.



J.



K.



L.

