



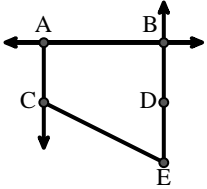
Abbina la descrizione in alto con l'immagine visiva in basso.

Risposte

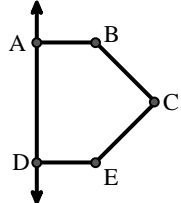
- 1) \overleftrightarrow{AD} intersecting \overleftrightarrow{BC} at point E
- 2) \overrightarrow{AC} parallel to \overrightarrow{EB}
- 3) D as the midpoint of \overleftrightarrow{CE}
- 4) \overleftrightarrow{AC} intersected by \overline{BD}
- 5) \overline{BE} intersecting \overleftrightarrow{CD}
- 6) \overleftrightarrow{BC} intersecting $\angle ACD$
- 7) $\angle BAC$ creating an obtuse angle
- 8) Acute $\angle ABC$ intersecting \overleftrightarrow{AD}
- 9) \overleftrightarrow{AB} intersecting \overleftrightarrow{AD}
- 10) \overrightarrow{BA} intersecting \overleftrightarrow{AD}
- 11) \overleftrightarrow{AB} parallel to \overleftrightarrow{CD}
- 12) Right $\angle ADE$

1. _____
2. _____
3. _____
4. _____
5. _____
6. _____
7. _____
8. _____
9. _____
10. _____
11. _____
12. _____

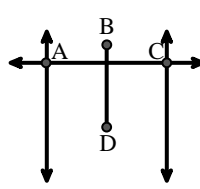
A.



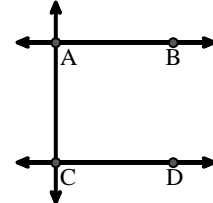
B.



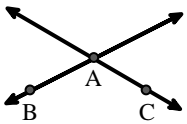
C.



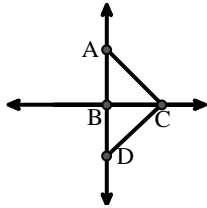
D.



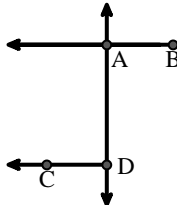
E.



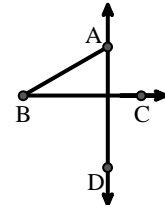
F.



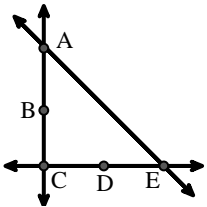
G.



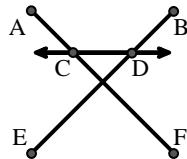
H.



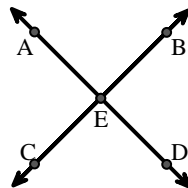
I.



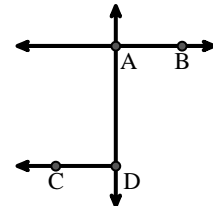
J.



K.



L.

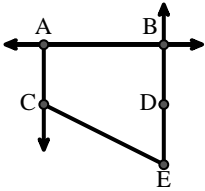




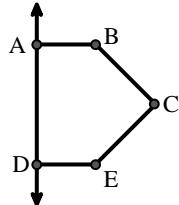
Abbina la descrizione in alto con l'immagine visiva in basso.

1) \overleftrightarrow{AD} intersecting \overleftrightarrow{BC} at point E2) \overrightarrow{AC} parallel to \overrightarrow{EB} 3) D as the midpoint of \overleftrightarrow{CE} 4) \overleftrightarrow{AC} intersected by \overline{BD} 5) \overline{BE} intersecting \overleftrightarrow{CD} 6) \overleftrightarrow{BC} intersecting $\angle ACD$ 7) $\angle BAC$ creating an obtuse angle8) Acute $\angle ABC$ intersecting \overleftrightarrow{AD} 9) \overleftrightarrow{AB} intersecting \overleftrightarrow{AD} 10) \overrightarrow{BA} intersecting \overleftrightarrow{AD} 11) \overleftrightarrow{AB} parallel to \overleftrightarrow{CD} 12) Right $\angle ADE$ **Risposte**1. **K**2. **A**3. **I**4. **C**5. **J**6. **F**7. **E**8. **H**9. **L**10. **G**11. **D**12. **B**

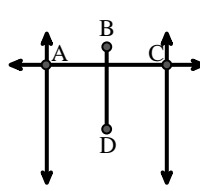
A.



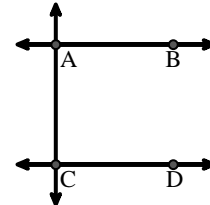
B.



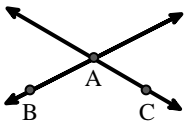
C.



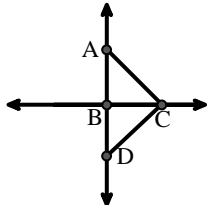
D.



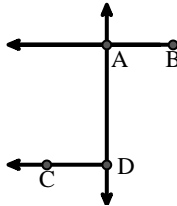
E.



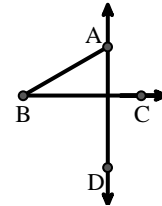
F.



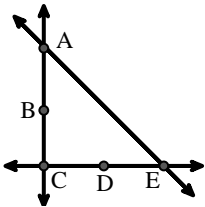
G.



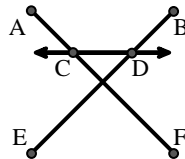
H.



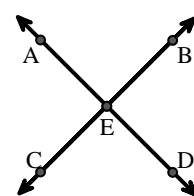
I.



J.



K.



L.

