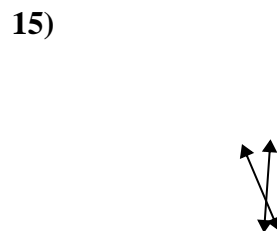
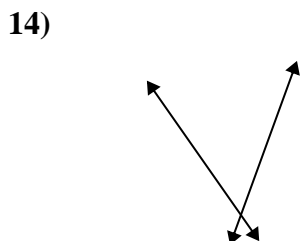
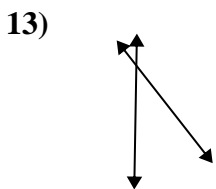
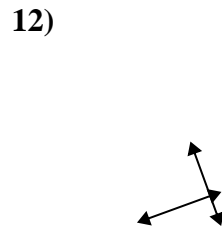
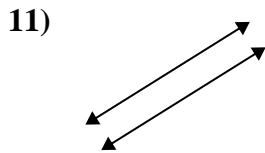
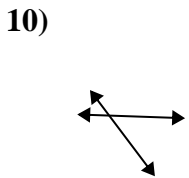
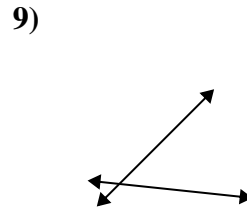
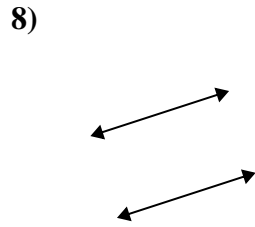
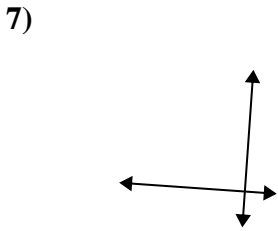
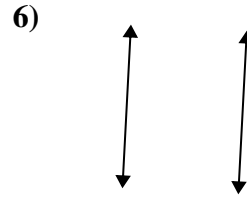
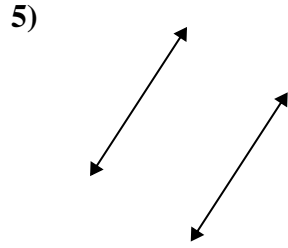
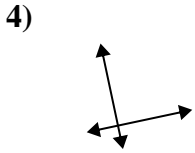
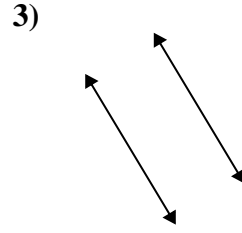
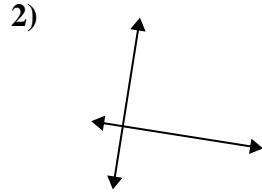
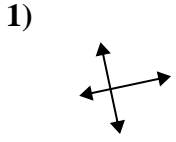




Definisci 'parallele', 'perp'(perpendicolare) o 'inter'(intersezione) per descrivere le linee.

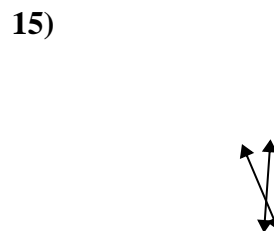
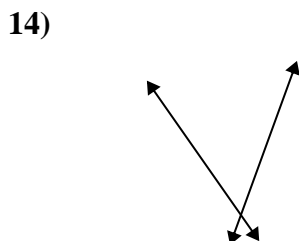
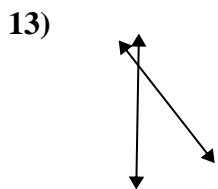
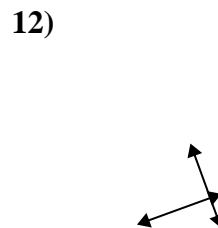
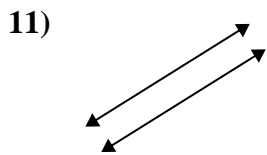
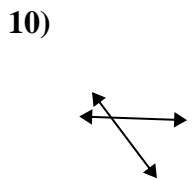
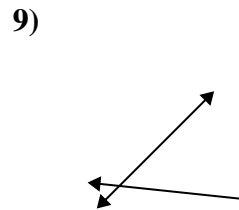
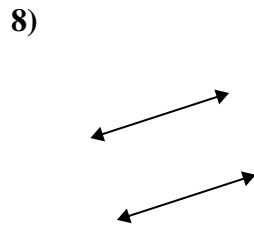
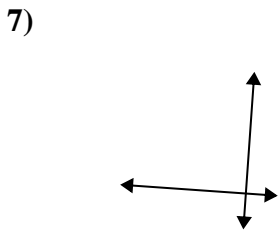
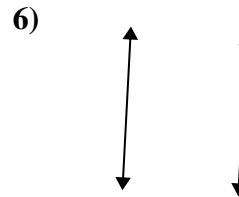
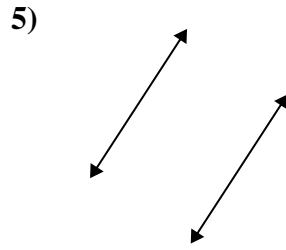
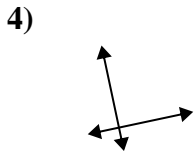
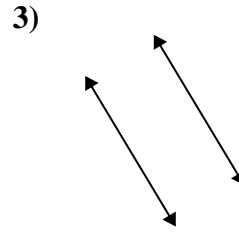
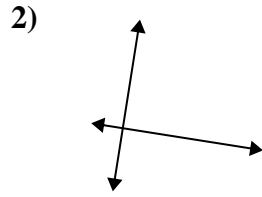
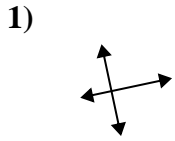
Risposte



1. _____
2. _____
3. _____
4. _____
5. _____
6. _____
7. _____
8. _____
9. _____
10. _____
11. _____
12. _____
13. _____
14. _____
15. _____



Definisci 'parallele', 'perp'(perpendicolare) o 'inter'(intersezione) per descrivere le linee.



Risposte

1. perpendicolari e incidenti

2. perpendicolari e incidenti

3. parallele

4. perpendicolari e incidenti

5. parallele

6. parallele

7. perpendicolari e incidenti

8. parallele

9. incidenti

10. incidenti

11. parallele

12. perpendicolari e incidenti

13. incidenti

14. incidenti

15. incidenti