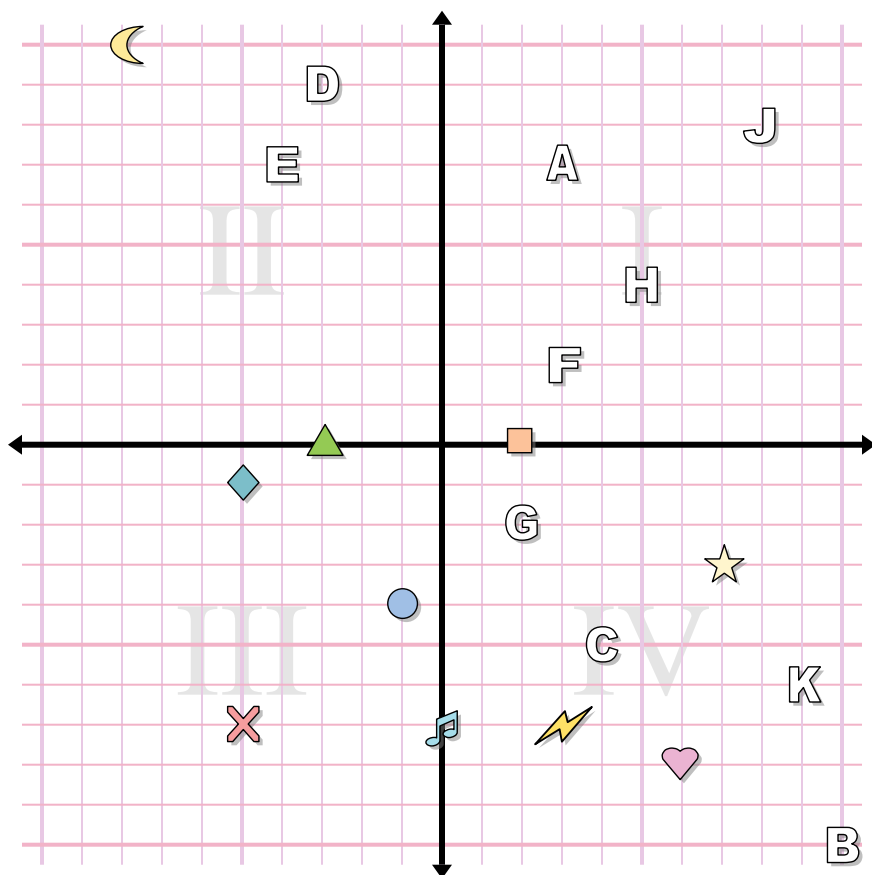




**Risposte**



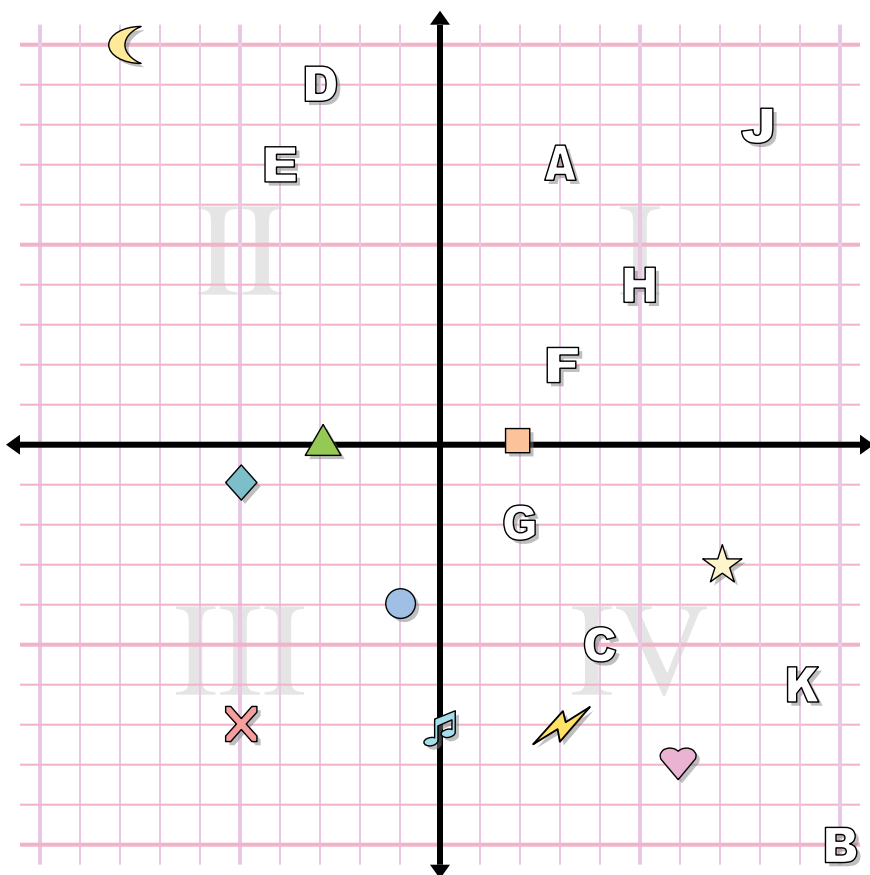
**Determina le coordinate di ogni figura.**

- |               |              |
|---------------|--------------|
| 1) music note | 2) circle    |
| 3) lightning  | 4) cross     |
| 5) moon       | 6) diamond   |
| 7) star       | 8) heart     |
| 9) square     | 10) triangle |

**Indica quale lettera corrisponde a ciascuna coordinata.**

- |              |                |
|--------------|----------------|
| 11) (-4 . 7) | 12) (2 . -2)   |
| 13) (-3 . 9) | 14) (5 . 4)    |
| 15) (8 . 8)  | 16) (3 . 7)    |
| 17) (4 . -5) | 18) (10 . -10) |
| 19) (9 . -6) | 20) (3 . 2)    |

1. \_\_\_\_\_
2. \_\_\_\_\_
3. \_\_\_\_\_
4. \_\_\_\_\_
5. \_\_\_\_\_
6. \_\_\_\_\_
7. \_\_\_\_\_
8. \_\_\_\_\_
9. \_\_\_\_\_
10. \_\_\_\_\_
11. \_\_\_\_\_
12. \_\_\_\_\_
13. \_\_\_\_\_
14. \_\_\_\_\_
15. \_\_\_\_\_
16. \_\_\_\_\_
17. \_\_\_\_\_
18. \_\_\_\_\_
19. \_\_\_\_\_
20. \_\_\_\_\_



**Risposte**

1. (0 . -7)
2. (-1 . -4)
3. (3 . -7)
4. (-5 . -7)
5. (-8 . 10)
6. (-5 . -1)
7. (7 . -3)
8. (6 . -8)
9. (2 . 0)
10. (-3 . 0)
11. E
12. G
13. D
14. H
15. J
16. A
17. C
18. B
19. K
20. F

**Determina le coordinate di ogni figura.**

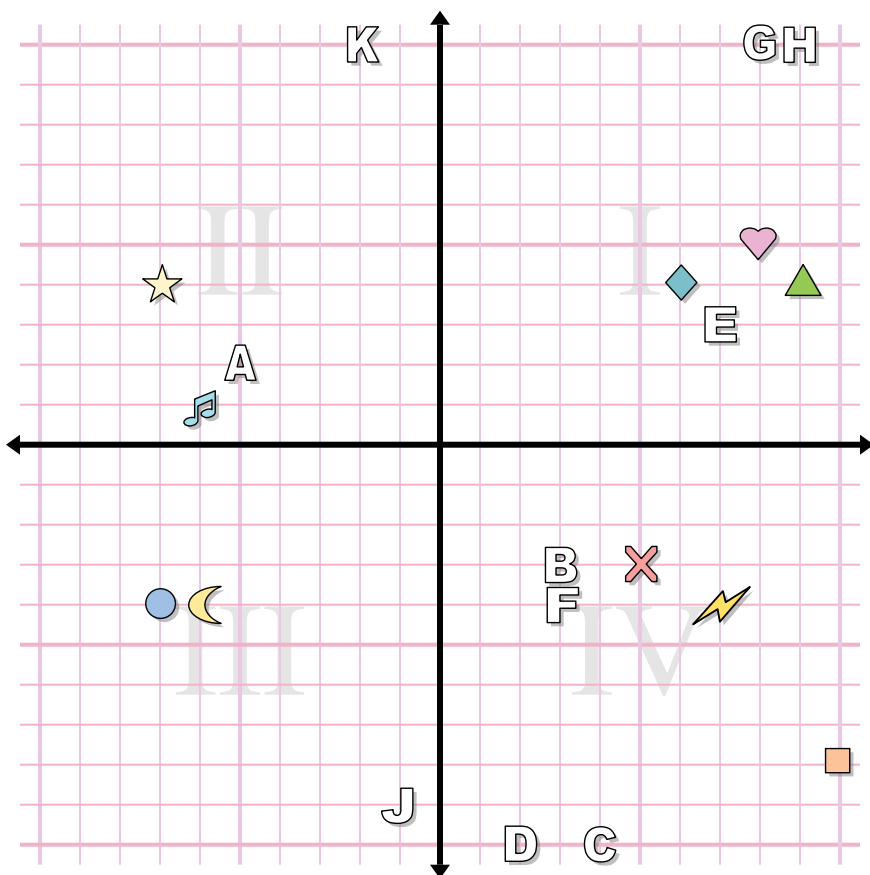
- |               |              |
|---------------|--------------|
| 1) music note | 2) circle    |
| 3) lightning  | 4) cross     |
| 5) moon       | 6) diamond   |
| 7) star       | 8) heart     |
| 9) square     | 10) triangle |

**Indica quale lettera corrisponde a ciascuna coordinata.**

- |              |                |
|--------------|----------------|
| 11) (-4 . 7) | 12) (2 . -2)   |
| 13) (-3 . 9) | 14) (5 . 4)    |
| 15) (8 . 8)  | 16) (3 . 7)    |
| 17) (4 . -5) | 18) (10 . -10) |
| 19) (9 . -6) | 20) (3 . 2)    |



**Risposte**



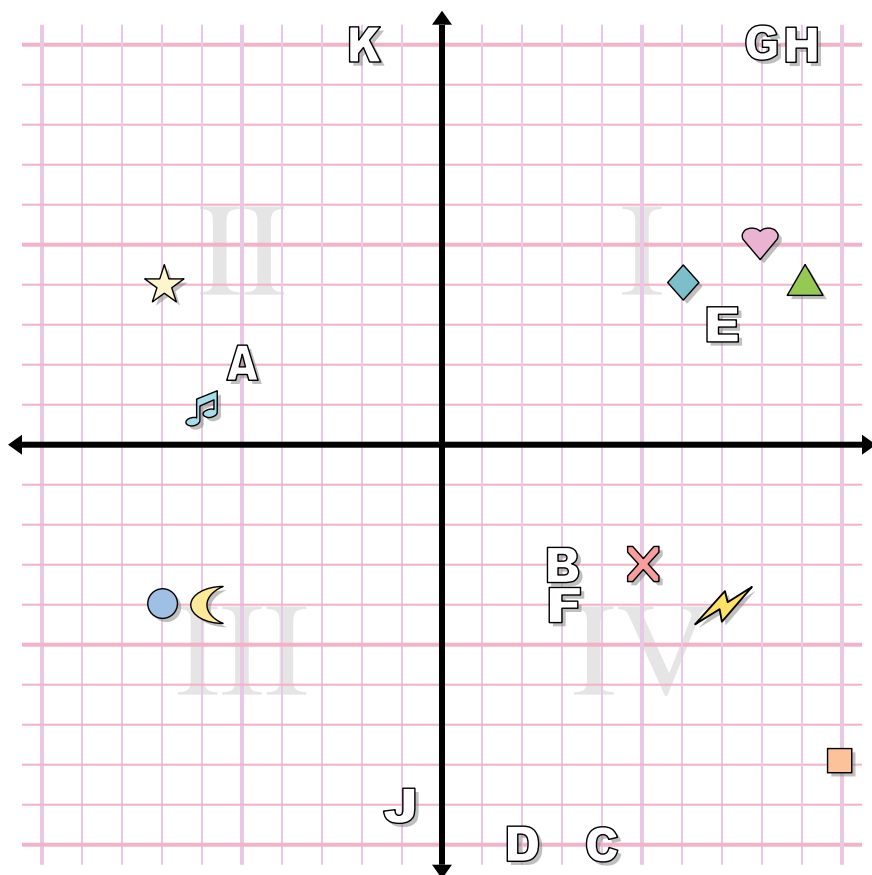
1. \_\_\_\_\_
2. \_\_\_\_\_
3. \_\_\_\_\_
4. \_\_\_\_\_
5. \_\_\_\_\_
6. \_\_\_\_\_
7. \_\_\_\_\_
8. \_\_\_\_\_
9. \_\_\_\_\_
10. \_\_\_\_\_
11. \_\_\_\_\_
12. \_\_\_\_\_
13. \_\_\_\_\_
14. \_\_\_\_\_
15. \_\_\_\_\_
16. \_\_\_\_\_
17. \_\_\_\_\_
18. \_\_\_\_\_
19. \_\_\_\_\_
20. \_\_\_\_\_

**Determina le coordinate di ogni figura.**

- |               |            |
|---------------|------------|
| 1) circle     | 2) diamond |
| 3) square     | 4) heart   |
| 5) music note | 6) cross   |
| 7) lightning  | 8) moon    |
| 9) triangle   | 10) star   |

**Indica quale lettera corrisponde a ciascuna coordinata.**

- |               |               |
|---------------|---------------|
| 11) (2 . -10) | 12) (9 . 10)  |
| 13) (7 . 3)   | 14) (4 . -10) |
| 15) (3 . -3)  | 16) (-2 . 10) |
| 17) (-5 . 2)  | 18) (8 . 10)  |
| 19) (-1 . -9) | 20) (3 . -4)  |



**Risposte**

1. **(-7 . -4)**
2. **(6 . 4)**
3. **(10 . -8)**
4. **(8 . 5)**
5. **(-6 . 1)**
6. **(5 . -3)**
7. **(7 . -4)**
8. **(-6 . -4)**
9. **(9 . 4)**
10. **(-7 . 4)**
11. **D**
12. **H**
13. **E**
14. **C**
15. **B**
16. **K**
17. **A**
18. **G**
19. **J**
20. **F**

**Determina le coordinate di ogni figura.**

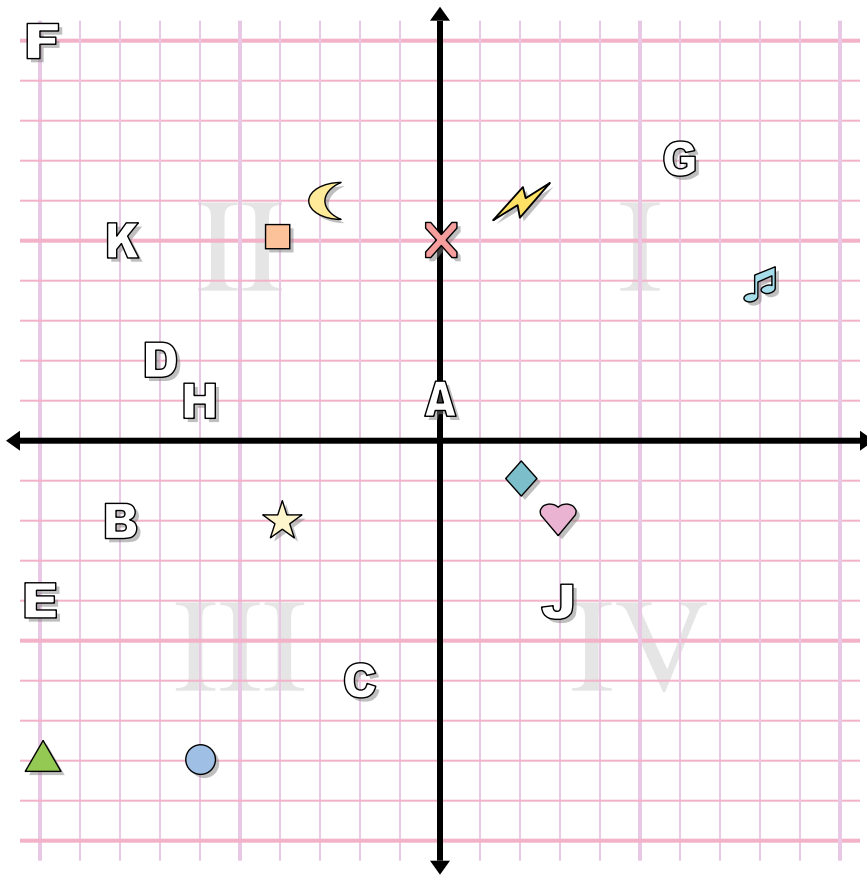
- |               |            |
|---------------|------------|
| 1) circle     | 2) diamond |
| 3) square     | 4) heart   |
| 5) music note | 6) cross   |
| 7) lightning  | 8) moon    |
| 9) triangle   | 10) star   |

**Indica quale lettera corrisponde a ciascuna coordinata.**

- |               |               |
|---------------|---------------|
| 11) (2 . -10) | 12) (9 . 10)  |
| 13) (7 . 3)   | 14) (4 . -10) |
| 15) (3 . -3)  | 16) (-2 . 10) |
| 17) (-5 . 2)  | 18) (8 . 10)  |
| 19) (-1 . -9) | 20) (3 . -4)  |



**Risposte**



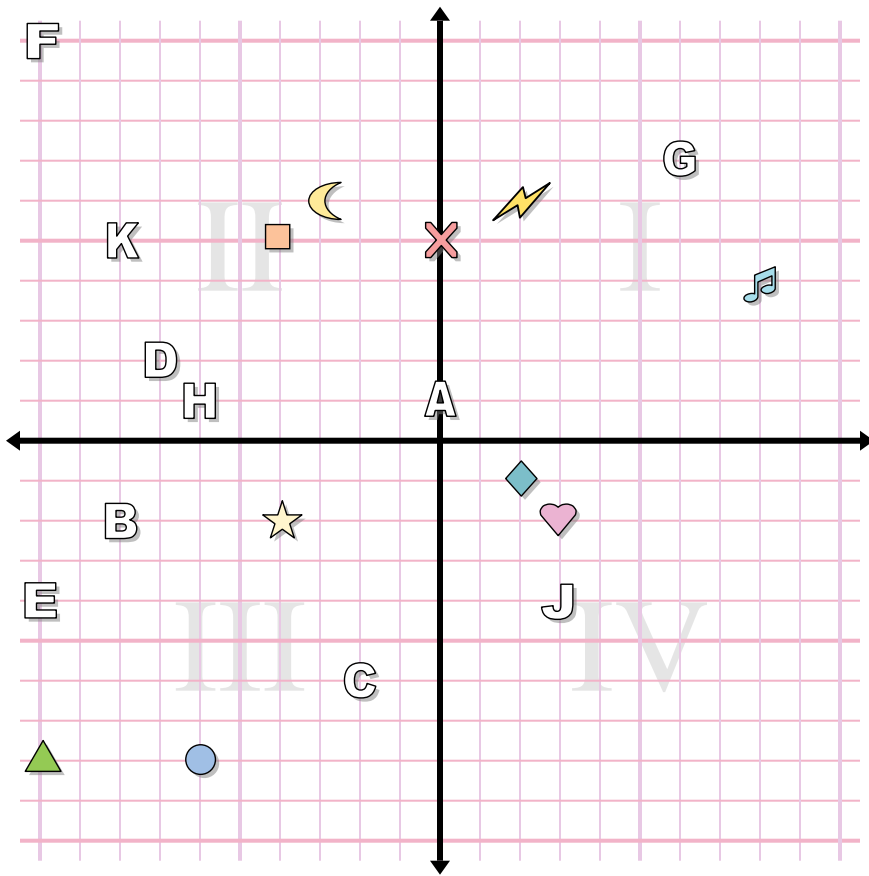
**Determina le coordinate di ogni figura.**

- |               |              |
|---------------|--------------|
| 1) triangle   | 2) moon      |
| 3) square     | 4) heart     |
| 5) star       | 6) circle    |
| 7) music note | 8) lightning |
| 9) cross      | 10) diamond  |

**Indica quale lettera corrisponde a ciascuna coordinata.**

- |               |                |
|---------------|----------------|
| 11) (3 . -4)  | 12) (-6 . 1)   |
| 13) (-2 . -6) | 14) (-8 . 5)   |
| 15) (0 . 1)   | 16) (-10 . 10) |
| 17) (6 . 7)   | 18) (-7 . 2)   |
| 19) (-8 . -2) | 20) (-10 . -4) |

1. \_\_\_\_\_
2. \_\_\_\_\_
3. \_\_\_\_\_
4. \_\_\_\_\_
5. \_\_\_\_\_
6. \_\_\_\_\_
7. \_\_\_\_\_
8. \_\_\_\_\_
9. \_\_\_\_\_
10. \_\_\_\_\_
11. \_\_\_\_\_
12. \_\_\_\_\_
13. \_\_\_\_\_
14. \_\_\_\_\_
15. \_\_\_\_\_
16. \_\_\_\_\_
17. \_\_\_\_\_
18. \_\_\_\_\_
19. \_\_\_\_\_
20. \_\_\_\_\_



**Risposte**

1. **(-10 . -8)**
2. **(-3 . 6)**
3. **(-4 . 5)**
4. **(3 . -2)**
5. **(-4 . -2)**
6. **(-6 . -8)**
7. **(8 . 4)**
8. **(2 . 6)**
9. **(0 . 5)**
10. **(2 . -1)**
11. **J**
12. **H**
13. **C**
14. **K**
15. **A**
16. **F**
17. **G**
18. **D**
19. **B**
20. **E**

**Determina le coordinate di ogni figura.**

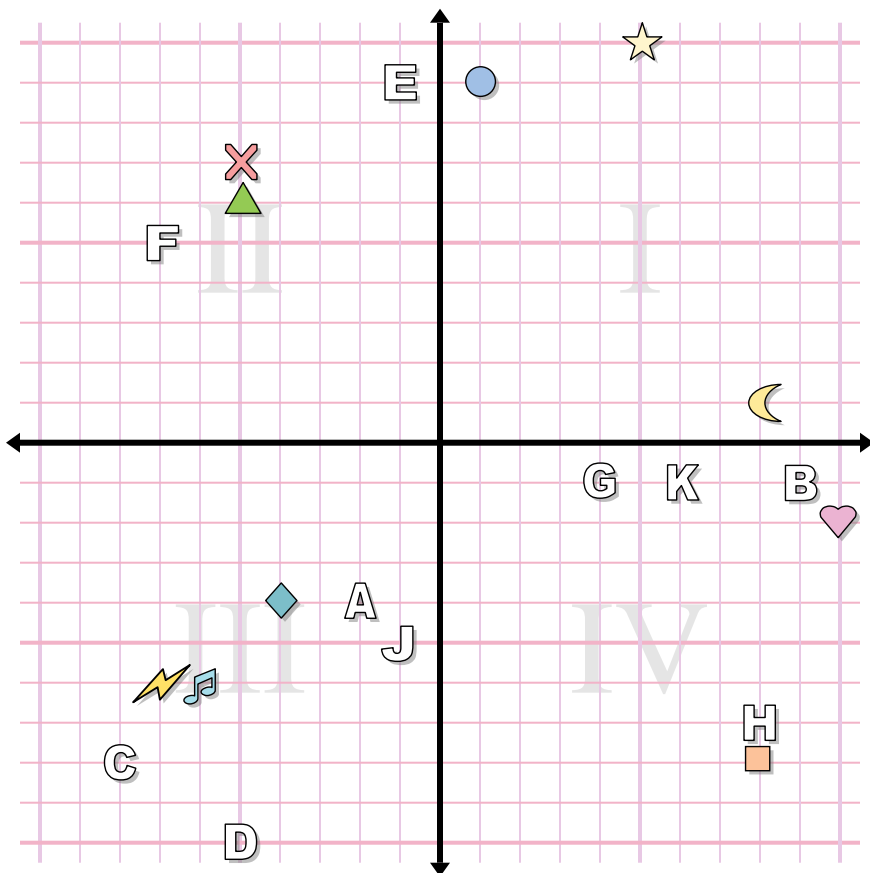
- |               |              |
|---------------|--------------|
| 1) triangle   | 2) moon      |
| 3) square     | 4) heart     |
| 5) star       | 6) circle    |
| 7) music note | 8) lightning |
| 9) cross      | 10) diamond  |

**Indica quale lettera corrisponde a ciascuna coordinata.**

- |               |                |
|---------------|----------------|
| 11) (3 . -4)  | 12) (-6 . 1)   |
| 13) (-2 . -6) | 14) (-8 . 5)   |
| 15) (0 . 1)   | 16) (-10 . 10) |
| 17) (6 . 7)   | 18) (-7 . 2)   |
| 19) (-8 . -2) | 20) (-10 . -4) |



**Risposte**



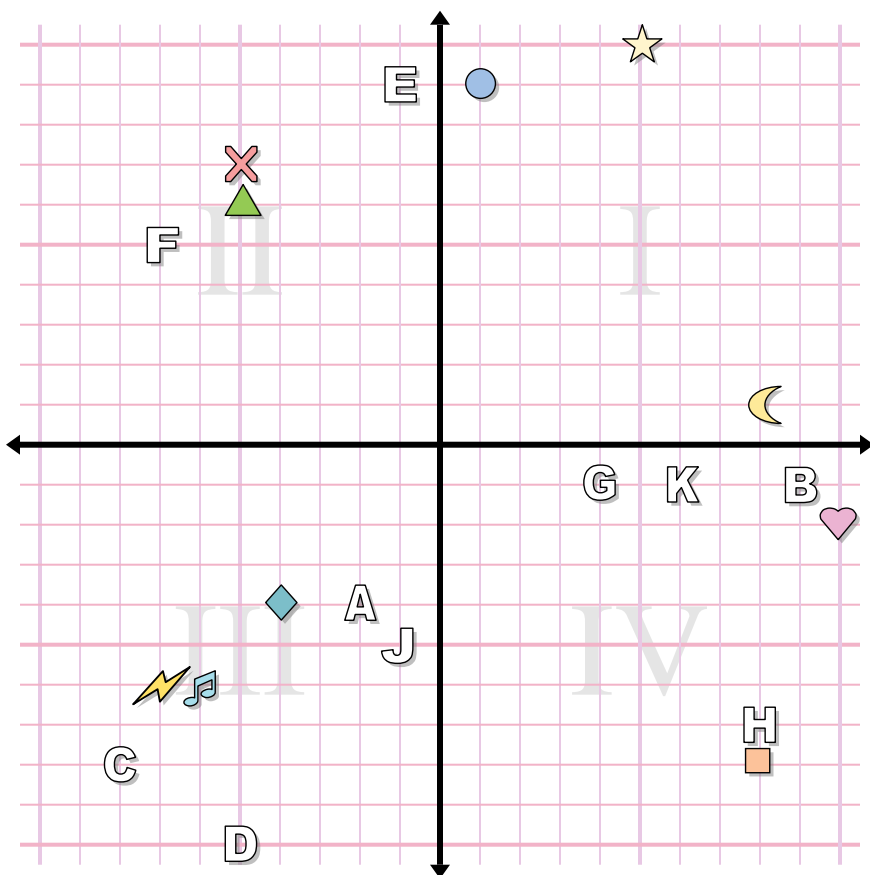
1. \_\_\_\_\_
2. \_\_\_\_\_
3. \_\_\_\_\_
4. \_\_\_\_\_
5. \_\_\_\_\_
6. \_\_\_\_\_
7. \_\_\_\_\_
8. \_\_\_\_\_
9. \_\_\_\_\_
10. \_\_\_\_\_
11. \_\_\_\_\_
12. \_\_\_\_\_
13. \_\_\_\_\_
14. \_\_\_\_\_
15. \_\_\_\_\_
16. \_\_\_\_\_
17. \_\_\_\_\_
18. \_\_\_\_\_
19. \_\_\_\_\_
20. \_\_\_\_\_

**Determina le coordinate di ogni figura.**

- |            |               |
|------------|---------------|
| 1) cross   | 2) music note |
| 3) star    | 4) circle     |
| 5) square  | 6) heart      |
| 7) diamond | 8) lightning  |
| 9) moon    | 10) triangle  |

**Indica quale lettera corrisponde a ciascuna coordinata.**

- |               |                |
|---------------|----------------|
| 11) (-2 . -4) | 12) (-1 . -5)  |
| 13) (8 . -7)  | 14) (-1 . 9)   |
| 15) (6 . -1)  | 16) (-8 . -8)  |
| 17) (9 . -1)  | 18) (4 . -1)   |
| 19) (-7 . 5)  | 20) (-5 . -10) |



**Risposte**

1. **(-5 . 7)**
2. **(-6 . -6)**
3. **(5 . 10)**
4. **(1 . 9)**
5. **(8 . -8)**
6. **(10 . -2)**
7. **(-4 . -4)**
8. **(-7 . -6)**
9. **(8 . 1)**
10. **(-5 . 6)**
11. **A**
12. **J**
13. **H**
14. **E**
15. **K**
16. **C**
17. **B**
18. **G**
19. **F**
20. **D**

**Determina le coordinate di ogni figura.**

- |            |               |
|------------|---------------|
| 1) cross   | 2) music note |
| 3) star    | 4) circle     |
| 5) square  | 6) heart      |
| 7) diamond | 8) lightning  |
| 9) moon    | 10) triangle  |

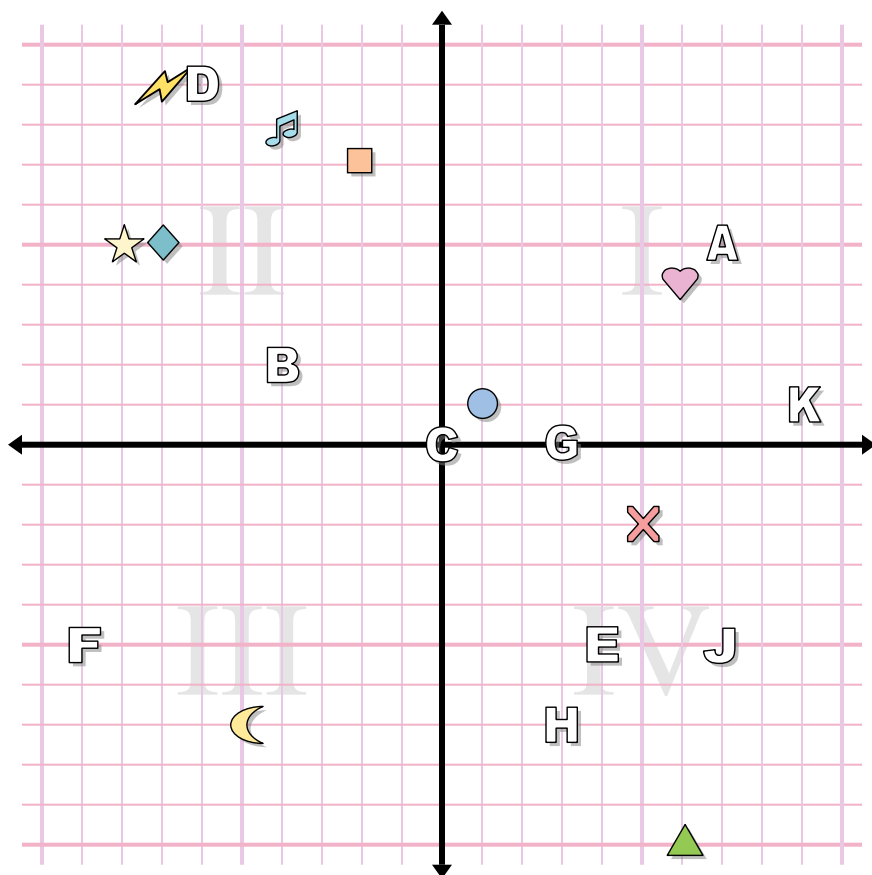
**Indica quale lettera corrisponde a ciascuna coordinata.**

- |               |                |
|---------------|----------------|
| 11) (-2 . -4) | 12) (-1 . -5)  |
| 13) (8 . -7)  | 14) (-1 . 9)   |
| 15) (6 . -1)  | 16) (-8 . -8)  |
| 17) (9 . -1)  | 18) (4 . -1)   |
| 19) (-7 . 5)  | 20) (-5 . -10) |





**Risposte**



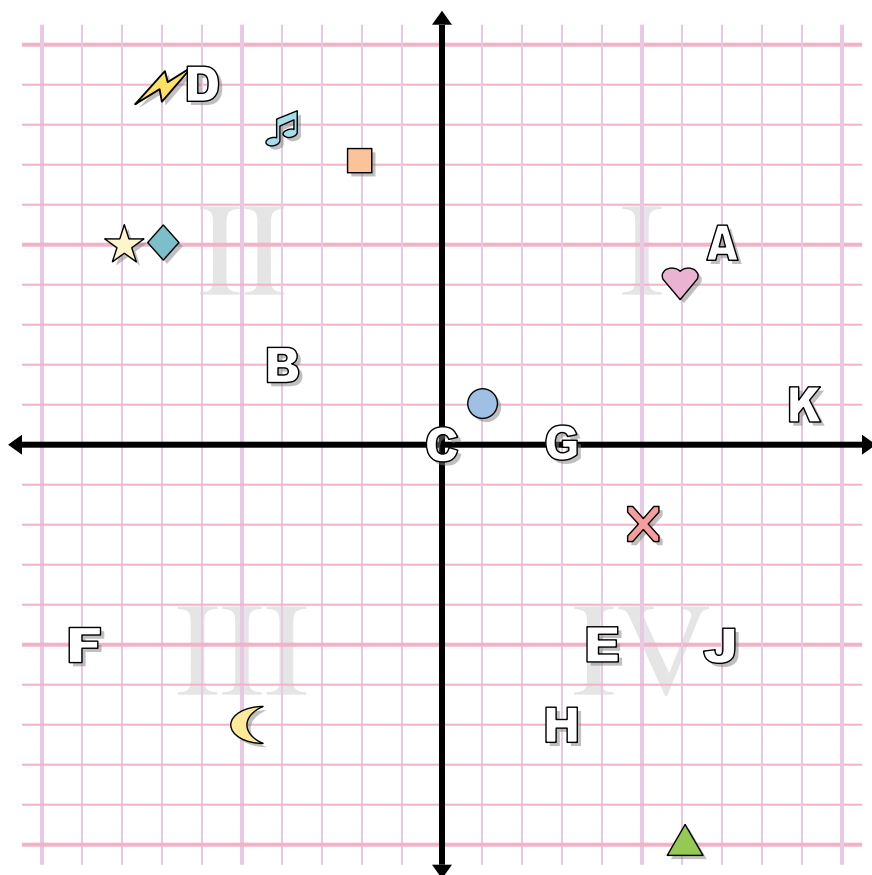
1. \_\_\_\_\_
2. \_\_\_\_\_
3. \_\_\_\_\_
4. \_\_\_\_\_
5. \_\_\_\_\_
6. \_\_\_\_\_
7. \_\_\_\_\_
8. \_\_\_\_\_
9. \_\_\_\_\_
10. \_\_\_\_\_
11. \_\_\_\_\_
12. \_\_\_\_\_
13. \_\_\_\_\_
14. \_\_\_\_\_
15. \_\_\_\_\_
16. \_\_\_\_\_
17. \_\_\_\_\_
18. \_\_\_\_\_
19. \_\_\_\_\_
20. \_\_\_\_\_

**Determina le coordinate di ogni figura.**

- |               |              |
|---------------|--------------|
| 1) cross      | 2) square    |
| 3) music note | 4) moon      |
| 5) circle     | 6) heart     |
| 7) triangle   | 8) lightning |
| 9) diamond    | 10) star     |

**Indica quale lettera corrisponde a ciascuna coordinata.**

- |               |              |
|---------------|--------------|
| 11) (-4 . 2)  | 12) (7 . -5) |
| 13) (0 . 0)   | 14) (3 . 0)  |
| 15) (3 . -7)  | 16) (4 . -5) |
| 17) (7 . 5)   | 18) (-6 . 9) |
| 19) (-9 . -5) | 20) (9 . 1)  |



**Risposte**

1. (5 . -2)
2. (-2 . 7)
3. (-4 . 8)
4. (-5 . -7)
5. (1 . 1)
6. (6 . 4)
7. (6 . -10)
8. (-7 . 9)
9. (-7 . 5)
10. (-8 . 5)
11. **B**
12. **J**
13. **C**
14. **G**
15. **H**
16. **E**
17. **A**
18. **D**
19. **F**
20. **K**

**Determina le coordinate di ogni figura.**

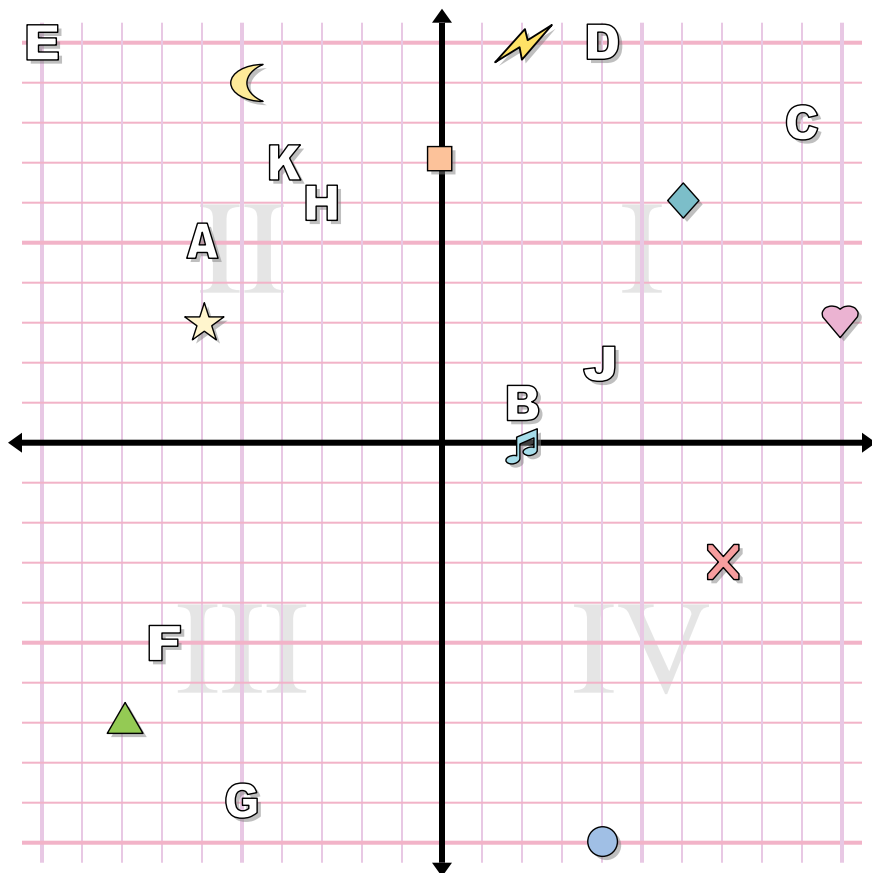
- |               |              |
|---------------|--------------|
| 1) cross      | 2) square    |
| 3) music note | 4) moon      |
| 5) circle     | 6) heart     |
| 7) triangle   | 8) lightning |
| 9) diamond    | 10) star     |

**Indica quale lettera corrisponde a ciascuna coordinata.**

- |               |              |
|---------------|--------------|
| 11) (-4 . 2)  | 12) (7 . -5) |
| 13) (0 . 0)   | 14) (3 . 0)  |
| 15) (3 . -7)  | 16) (4 . -5) |
| 17) (7 . 5)   | 18) (-6 . 9) |
| 19) (-9 . -5) | 20) (9 . 1)  |



**Risposte**



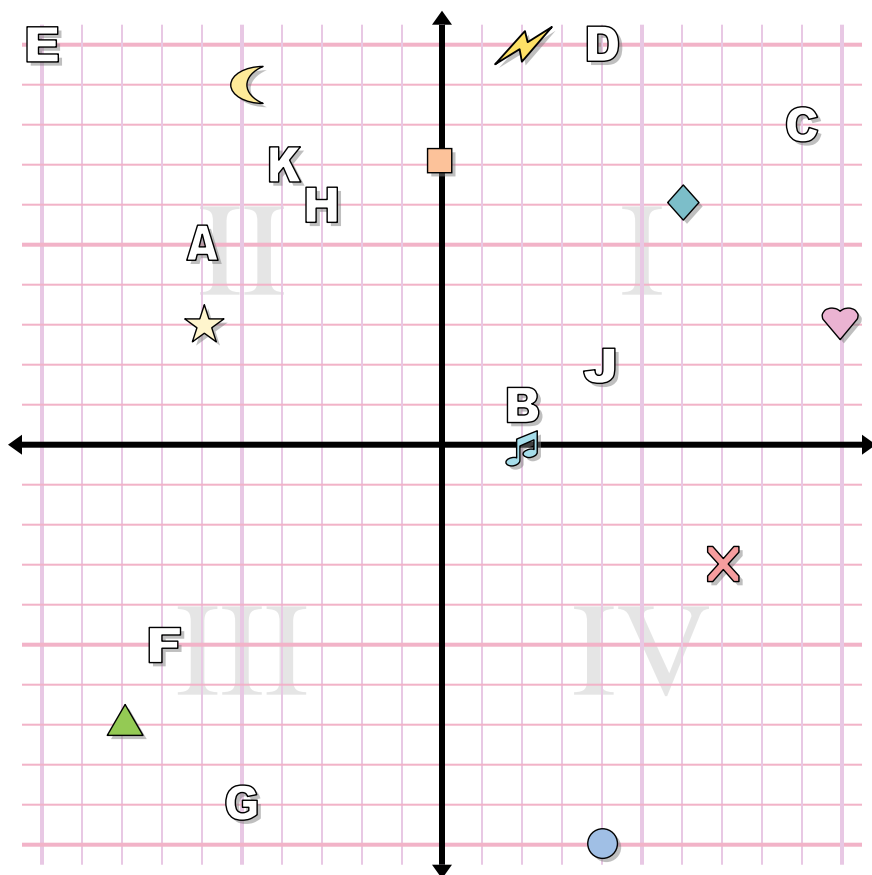
1. \_\_\_\_\_
2. \_\_\_\_\_
3. \_\_\_\_\_
4. \_\_\_\_\_
5. \_\_\_\_\_
6. \_\_\_\_\_
7. \_\_\_\_\_
8. \_\_\_\_\_
9. \_\_\_\_\_
10. \_\_\_\_\_
11. \_\_\_\_\_
12. \_\_\_\_\_
13. \_\_\_\_\_
14. \_\_\_\_\_
15. \_\_\_\_\_
16. \_\_\_\_\_
17. \_\_\_\_\_
18. \_\_\_\_\_
19. \_\_\_\_\_
20. \_\_\_\_\_

**Determina le coordinate di ogni figura.**

- |              |               |
|--------------|---------------|
| 1) star      | 2) moon       |
| 3) heart     | 4) diamond    |
| 5) lightning | 6) triangle   |
| 7) circle    | 8) music note |
| 9) square    | 10) cross     |

**Indica quale lettera corrisponde a ciascuna coordinata.**

- |               |                |
|---------------|----------------|
| 11) (-3 . 6)  | 12) (-4 . 7)   |
| 13) (-5 . -9) | 14) (-7 . -5)  |
| 15) (-6 . 5)  | 16) (9 . 8)    |
| 17) (4 . 10)  | 18) (4 . 2)    |
| 19) (2 . 1)   | 20) (-10 . 10) |



**Risposte**

1. **(-6 . 3)**
2. **(-5 . 9)**
3. **(10 . 3)**
4. **(6 . 6)**
5. **(2 . 10)**
6. **(-8 . -7)**
7. **(4 . -10)**
8. **(2 . 0)**
9. **(0 . 7)**
10. **(7 . -3)**
11. **H**
12. **K**
13. **G**
14. **F**
15. **A**
16. **C**
17. **D**
18. **J**
19. **B**
20. **E**

**Determina le coordinate di ogni figura.**

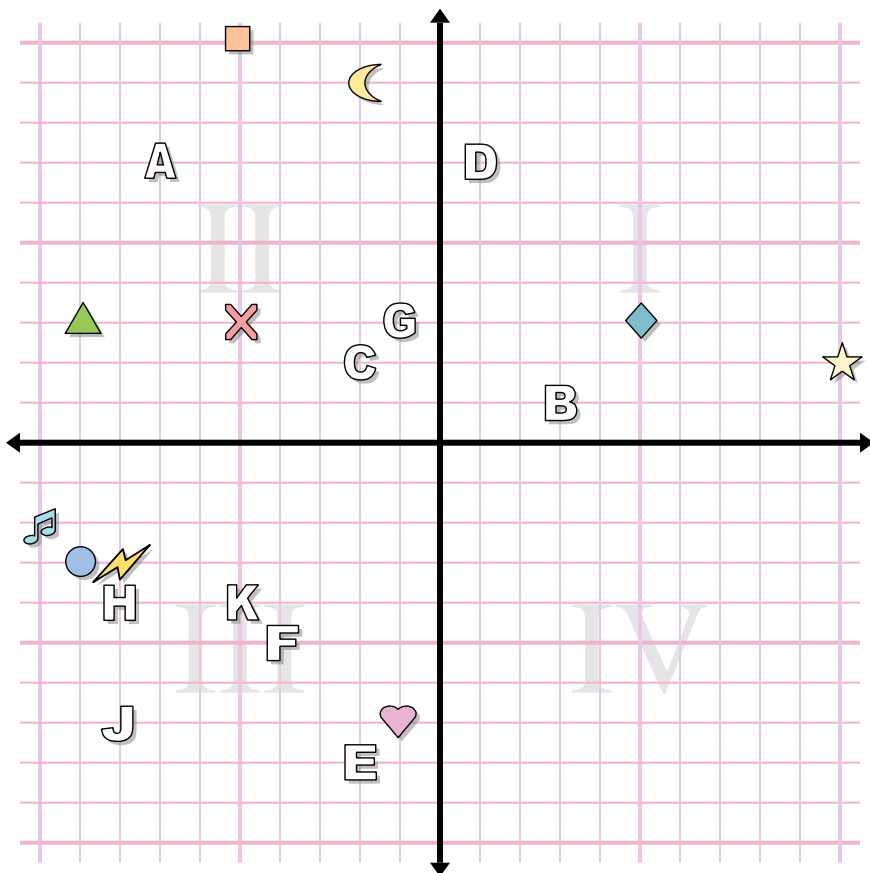
- |              |               |
|--------------|---------------|
| 1) star      | 2) moon       |
| 3) heart     | 4) diamond    |
| 5) lightning | 6) triangle   |
| 7) circle    | 8) music note |
| 9) square    | 10) cross     |

**Indica quale lettera corrisponde a ciascuna coordinata.**

- |               |                |
|---------------|----------------|
| 11) (-3 . 6)  | 12) (-4 . 7)   |
| 13) (-5 . -9) | 14) (-7 . -5)  |
| 15) (-6 . 5)  | 16) (9 . 8)    |
| 17) (4 . 10)  | 18) (4 . 2)    |
| 19) (2 . 1)   | 20) (-10 . 10) |



**Risposte**



1. \_\_\_\_\_
2. \_\_\_\_\_
3. \_\_\_\_\_
4. \_\_\_\_\_
5. \_\_\_\_\_
6. \_\_\_\_\_
7. \_\_\_\_\_
8. \_\_\_\_\_
9. \_\_\_\_\_
10. \_\_\_\_\_
11. \_\_\_\_\_
12. \_\_\_\_\_
13. \_\_\_\_\_
14. \_\_\_\_\_
15. \_\_\_\_\_
16. \_\_\_\_\_
17. \_\_\_\_\_
18. \_\_\_\_\_
19. \_\_\_\_\_
20. \_\_\_\_\_

**Determina le coordinate di ogni figura.**

- |               |              |
|---------------|--------------|
| 1) diamond    | 2) star      |
| 3) triangle   | 4) moon      |
| 5) music note | 6) lightning |
| 7) square     | 8) heart     |
| 9) circle     | 10) cross    |

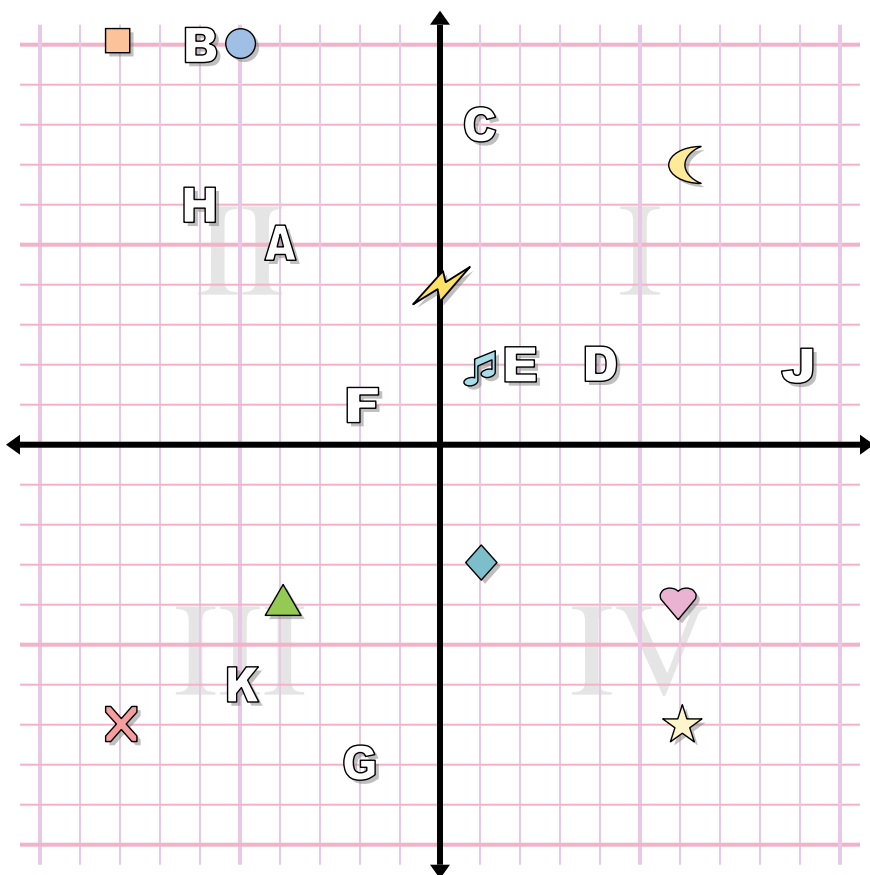
**Indica quale lettera corrisponde a ciascuna coordinata.**

- |               |               |
|---------------|---------------|
| 11) (-7 . 7)  | 12) (-4 . -5) |
| 13) (-8 . -4) | 14) (-2 . -8) |
| 15) (-8 . -7) | 16) (-1 . 3)  |
| 17) (-5 . -4) | 18) (3 . 1)   |
| 19) (-2 . 2)  | 20) (1 . 7)   |





**Risposte**



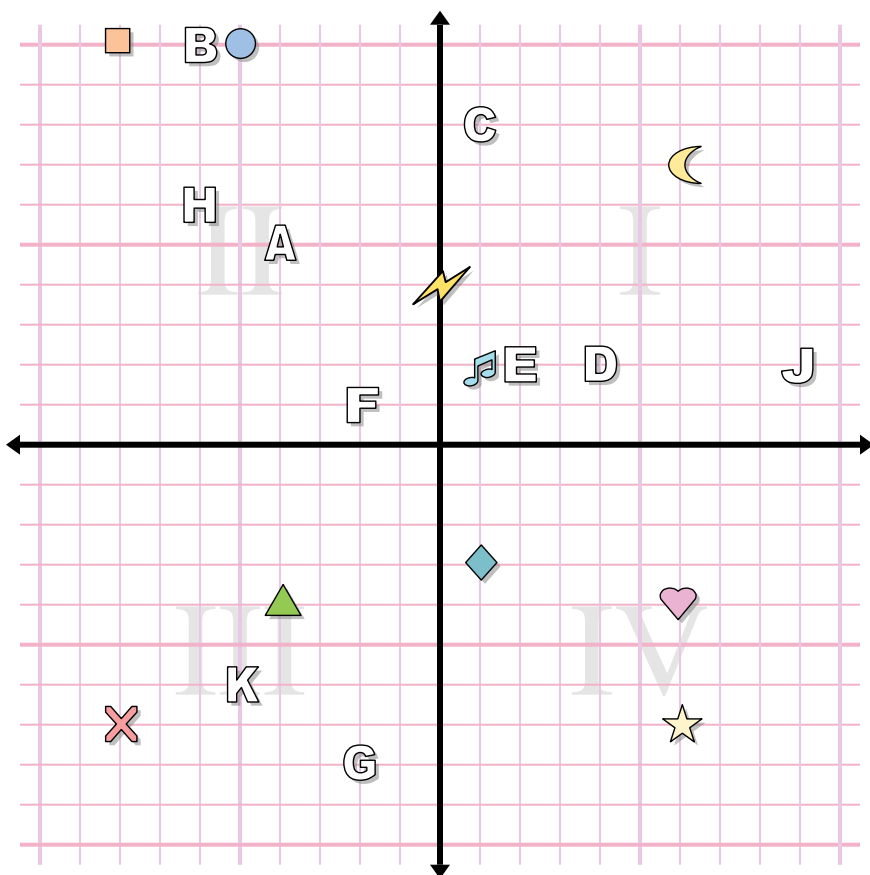
1. \_\_\_\_\_
2. \_\_\_\_\_
3. \_\_\_\_\_
4. \_\_\_\_\_
5. \_\_\_\_\_
6. \_\_\_\_\_
7. \_\_\_\_\_
8. \_\_\_\_\_
9. \_\_\_\_\_
10. \_\_\_\_\_
11. \_\_\_\_\_
12. \_\_\_\_\_
13. \_\_\_\_\_
14. \_\_\_\_\_
15. \_\_\_\_\_
16. \_\_\_\_\_
17. \_\_\_\_\_
18. \_\_\_\_\_
19. \_\_\_\_\_
20. \_\_\_\_\_

**Determina le coordinate di ogni figura.**

- |               |             |
|---------------|-------------|
| 1) star       | 2) cross    |
| 3) music note | 4) square   |
| 5) lightning  | 6) moon     |
| 7) circle     | 8) heart    |
| 9) triangle   | 10) diamond |

**Indica quale lettera corrisponde a ciascuna coordinata.**

- |               |               |
|---------------|---------------|
| 11) (-4 . 5)  | 12) (-2 . 1)  |
| 13) (-5 . -6) | 14) (-6 . 6)  |
| 15) (9 . 2)   | 16) (4 . 2)   |
| 17) (1 . 8)   | 18) (-6 . 10) |
| 19) (2 . 2)   | 20) (-2 . -8) |



**Risposte**

1. (6 . -7)
2. (-8 . -7)
3. (1 . 2)
4. (-8 . 10)
5. (0 . 4)
6. (6 . 7)
7. (-5 . 10)
8. (6 . -4)
9. (-4 . -4)
10. (1 . -3)
11. A
12. F
13. K
14. H
15. J
16. D
17. C
18. B
19. E
20. G

**Determina le coordinate di ogni figura.**

- |               |             |
|---------------|-------------|
| 1) star       | 2) cross    |
| 3) music note | 4) square   |
| 5) lightning  | 6) moon     |
| 7) circle     | 8) heart    |
| 9) triangle   | 10) diamond |

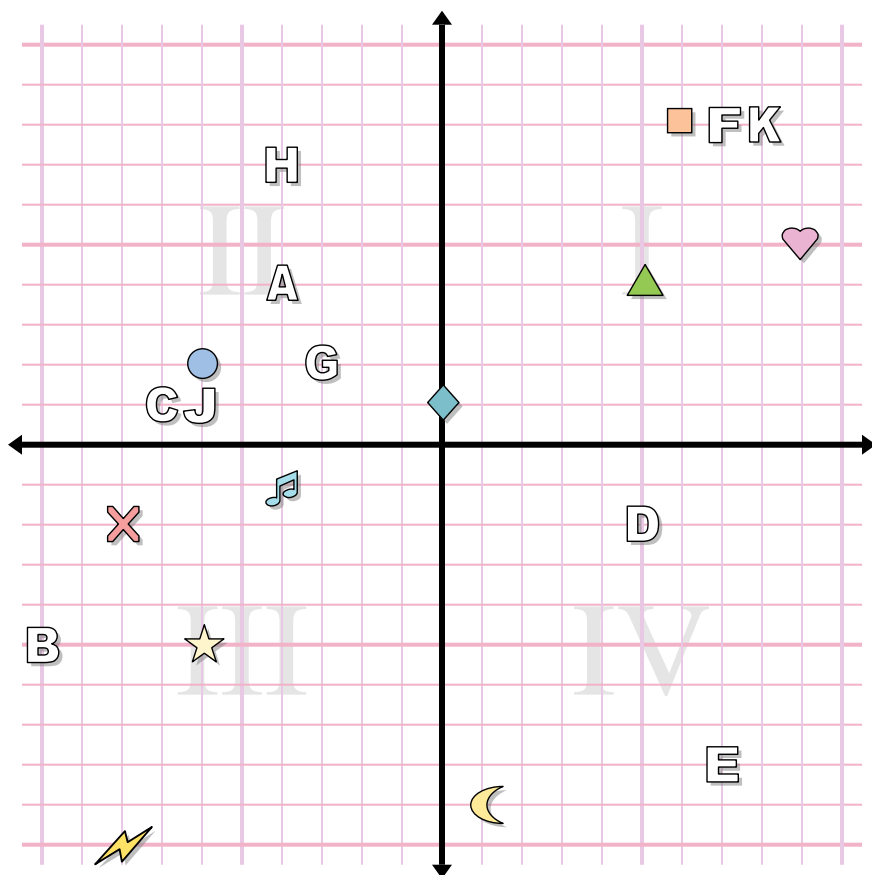
**Indica quale lettera corrisponde a ciascuna coordinata.**

- |               |               |
|---------------|---------------|
| 11) (-4 . 5)  | 12) (-2 . 1)  |
| 13) (-5 . -6) | 14) (-6 . 6)  |
| 15) (9 . 2)   | 16) (4 . 2)   |
| 17) (1 . 8)   | 18) (-6 . 10) |
| 19) (2 . 2)   | 20) (-2 . -8) |





**Risposte**



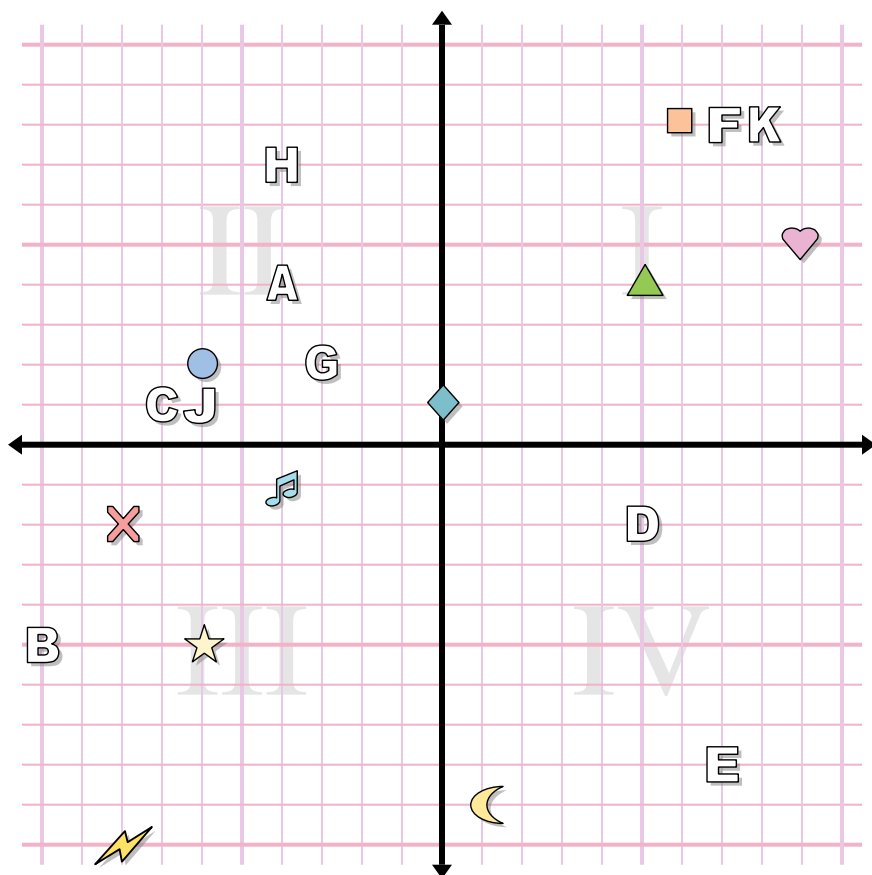
1. \_\_\_\_\_
2. \_\_\_\_\_
3. \_\_\_\_\_
4. \_\_\_\_\_
5. \_\_\_\_\_
6. \_\_\_\_\_
7. \_\_\_\_\_
8. \_\_\_\_\_
9. \_\_\_\_\_
10. \_\_\_\_\_
11. \_\_\_\_\_
12. \_\_\_\_\_
13. \_\_\_\_\_
14. \_\_\_\_\_
15. \_\_\_\_\_
16. \_\_\_\_\_
17. \_\_\_\_\_
18. \_\_\_\_\_
19. \_\_\_\_\_
20. \_\_\_\_\_

**Determina le coordinate di ogni figura.**

- |               |             |
|---------------|-------------|
| 1) music note | 2) triangle |
| 3) cross      | 4) heart    |
| 5) lightning  | 6) square   |
| 7) circle     | 8) diamond  |
| 9) moon       | 10) star    |

**Indica quale lettera corrisponde a ciascuna coordinata.**

- |                |              |
|----------------|--------------|
| 11) (-3 . 2)   | 12) (8 . 8)  |
| 13) (-6 . 1)   | 14) (7 . -8) |
| 15) (5 . -2)   | 16) (-4 . 4) |
| 17) (-10 . -5) | 18) (-7 . 1) |
| 19) (7 . 8)    | 20) (-4 . 7) |



**Risposte**

1.           (-4 . -1)
2.           (5 . 4)
3.           (-8 . -2)
4.           (9 . 5)
5.           (-8 . -10)
6.           (6 . 8)
7.           (-6 . 2)
8.           (0 . 1)
9.           (1 . -9)
10.           (-6 . -5)
11.           **G**
12.           **K**
13.           **J**
14.           **E**
15.           **D**
16.           **A**
17.           **B**
18.           **C**
19.           **F**
20.           **H**

**Determina le coordinate di ogni figura.**

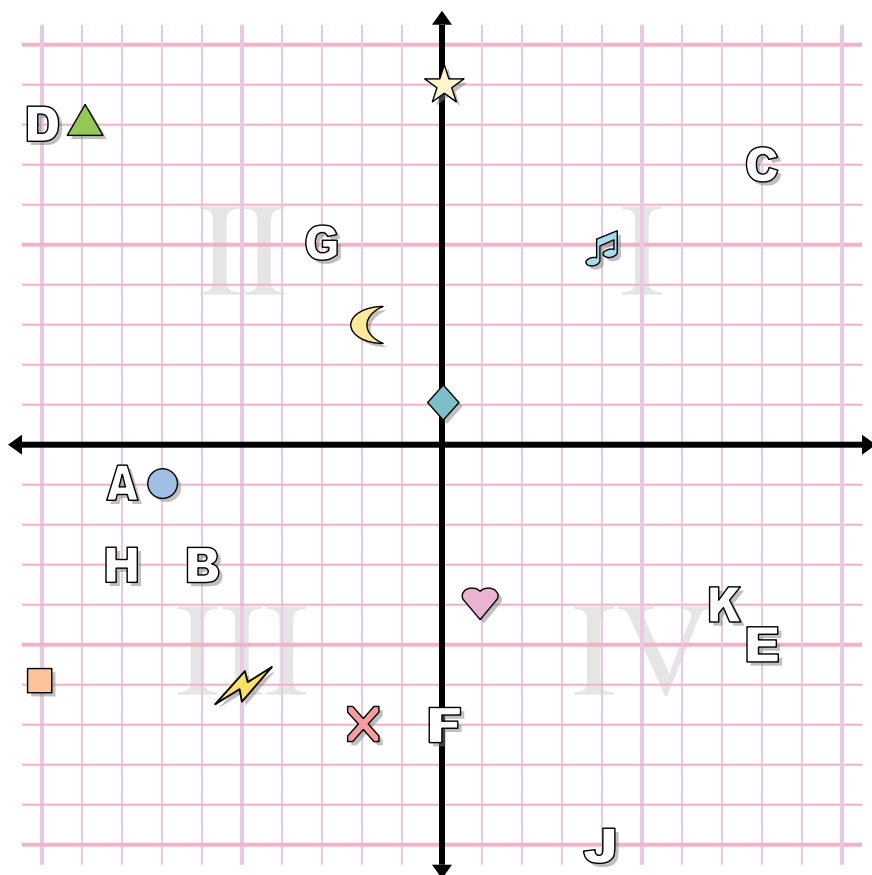
- |               |             |
|---------------|-------------|
| 1) music note | 2) triangle |
| 3) cross      | 4) heart    |
| 5) lightning  | 6) square   |
| 7) circle     | 8) diamond  |
| 9) moon       | 10) star    |

**Indica quale lettera corrisponde a ciascuna coordinata.**

- |                |              |
|----------------|--------------|
| 11) (-3 . 2)   | 12) (8 . 8)  |
| 13) (-6 . 1)   | 14) (7 . -8) |
| 15) (5 . -2)   | 16) (-4 . 4) |
| 17) (-10 . -5) | 18) (-7 . 1) |
| 19) (7 . 8)    | 20) (-4 . 7) |



**Risposte**



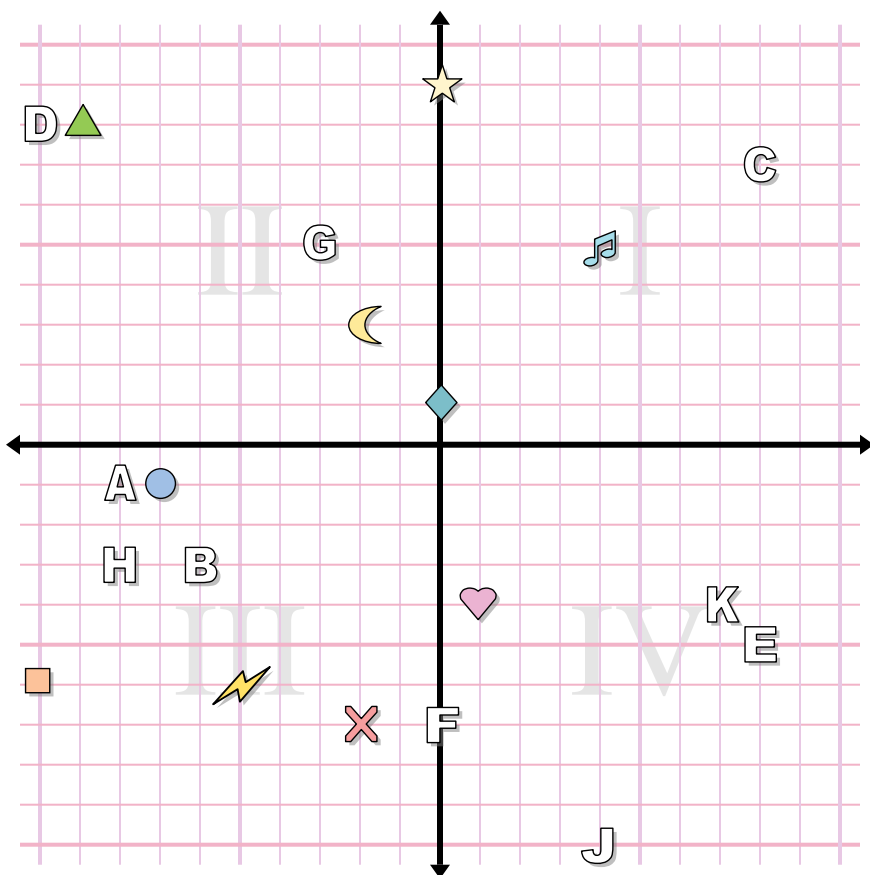
1. \_\_\_\_\_
2. \_\_\_\_\_
3. \_\_\_\_\_
4. \_\_\_\_\_
5. \_\_\_\_\_
6. \_\_\_\_\_
7. \_\_\_\_\_
8. \_\_\_\_\_
9. \_\_\_\_\_
10. \_\_\_\_\_
11. \_\_\_\_\_
12. \_\_\_\_\_
13. \_\_\_\_\_
14. \_\_\_\_\_
15. \_\_\_\_\_
16. \_\_\_\_\_
17. \_\_\_\_\_
18. \_\_\_\_\_
19. \_\_\_\_\_
20. \_\_\_\_\_

**Determina le coordinate di ogni figura.**

- |             |               |
|-------------|---------------|
| 1) moon     | 2) music note |
| 3) triangle | 4) square     |
| 5) circle   | 6) cross      |
| 7) heart    | 8) diamond    |
| 9) star     | 10) lightning |

**Indica quale lettera corrisponde a ciascuna coordinata.**

- |               |               |
|---------------|---------------|
| 11) (-6 . -3) | 12) (-10 . 8) |
| 13) (8 . -5)  | 14) (4 . -10) |
| 15) (-3 . 5)  | 16) (-8 . -3) |
| 17) (0 . -7)  | 18) (7 . -4)  |
| 19) (-8 . -1) | 20) (8 . 7)   |



**Risposte**

1. **(-2 . 3)**
2. **(4 . 5)**
3. **(-9 . 8)**
4. **(-10 . -6)**
5. **(-7 . -1)**
6. **(-2 . -7)**
7. **(1 . -4)**
8. **(0 . 1)**
9. **(0 . 9)**
10. **(-5 . -6)**
11. **B**
12. **D**
13. **E**
14. **J**
15. **G**
16. **H**
17. **F**
18. **K**
19. **A**
20. **C**

**Determina le coordinate di ogni figura.**

- |             |               |
|-------------|---------------|
| 1) moon     | 2) music note |
| 3) triangle | 4) square     |
| 5) circle   | 6) cross      |
| 7) heart    | 8) diamond    |
| 9) star     | 10) lightning |

**Indica quale lettera corrisponde a ciascuna coordinata.**

- |               |               |
|---------------|---------------|
| 11) (-6 . -3) | 12) (-10 . 8) |
| 13) (8 . -5)  | 14) (4 . -10) |
| 15) (-3 . 5)  | 16) (-8 . -3) |
| 17) (0 . -7)  | 18) (7 . -4)  |
| 19) (-8 . -1) | 20) (8 . 7)   |