



Disegna un cerchio alle coordinate elencate.

1) (8 . 3)



2) (8 . 8)



3) (2 . 2)



4) (10 . 3)



5) (8 . 7)



6) (3 . 10)



7) (1 . 10)



8) (1 . 1)



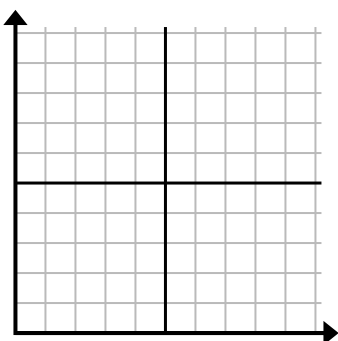
9) (3 . 7)



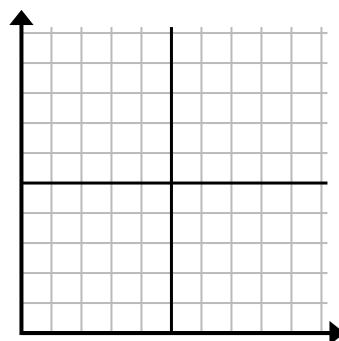
10) (1 . 2)



11) (4 . 10)



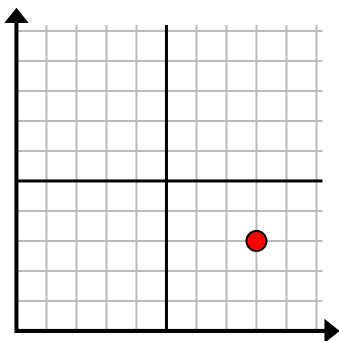
12) (2 . 3)



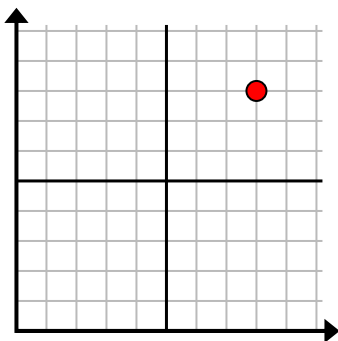


Disegna un cerchio alle coordinate elencate.

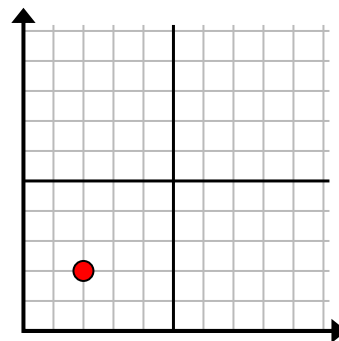
1) (8 . 3)



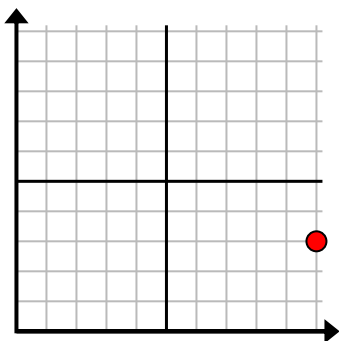
2) (8 . 8)



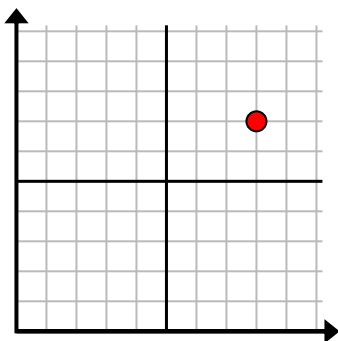
3) (2 . 2)



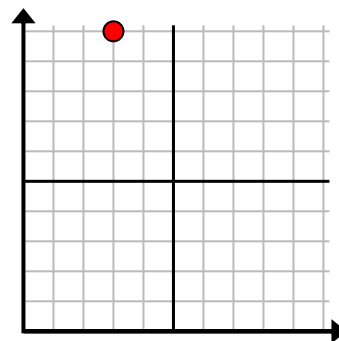
4) (10 . 3)



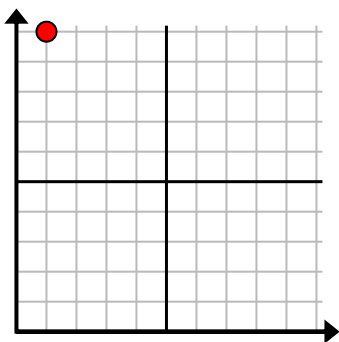
5) (8 . 7)



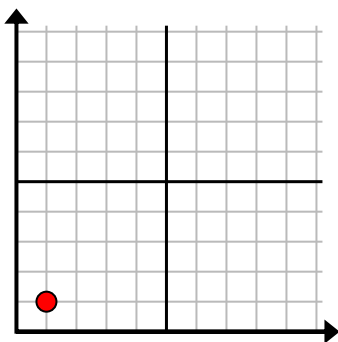
6) (3 . 10)



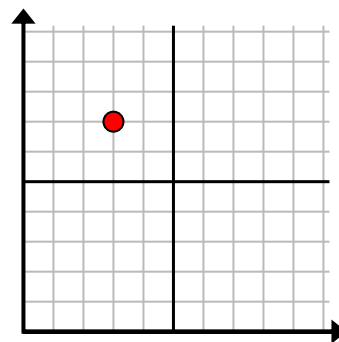
7) (1 . 10)



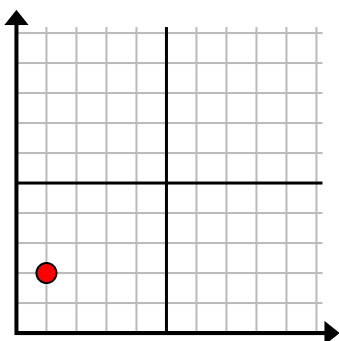
8) (1 . 1)



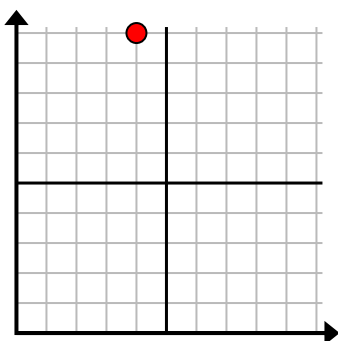
9) (3 . 7)



10) (1 . 2)



11) (4 . 10)



12) (2 . 3)

