



Disegna un cerchio alle coordinate elencate.

1) (8 . 8)



2) (4 . 0)



3) (7 . 7)



4) (2 . 2)



5) (4 . 5)



6) (1 . 3)



7) (2 . 5)



8) (7 . 5)



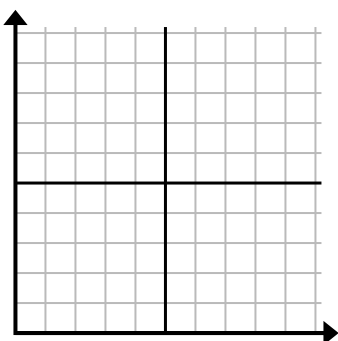
9) (9 . 7)



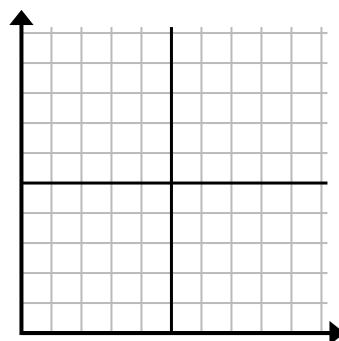
10) (2 . 3)



11) (7 . 6)



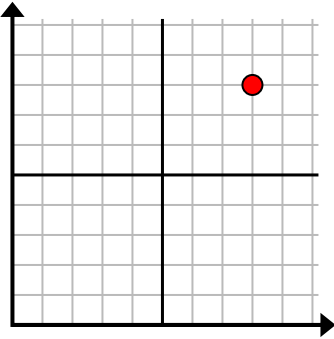
12) (10 . 4)



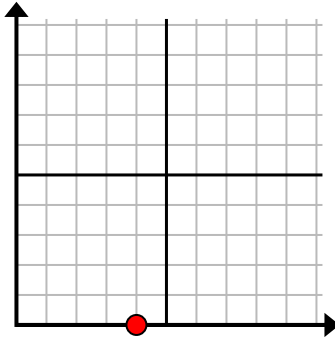


Disegna un cerchio alle coordinate elencate.

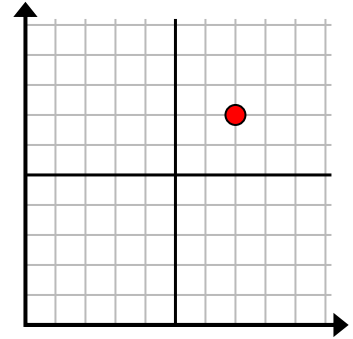
1) (8 . 8)



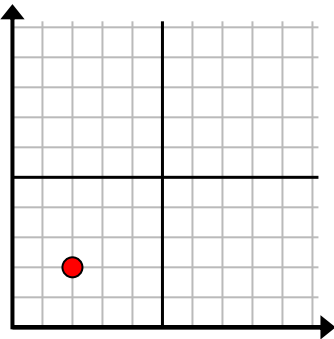
2) (4 . 0)



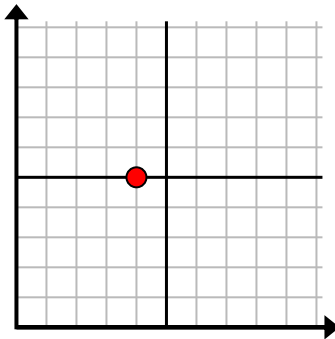
3) (7 . 7)



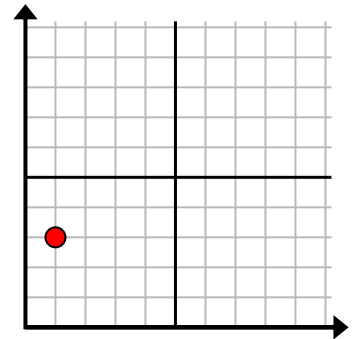
4) (2 . 2)



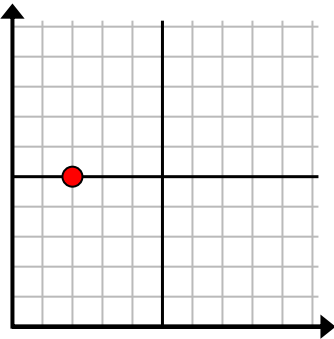
5) (4 . 5)



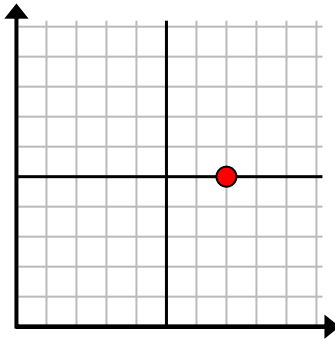
6) (1 . 3)



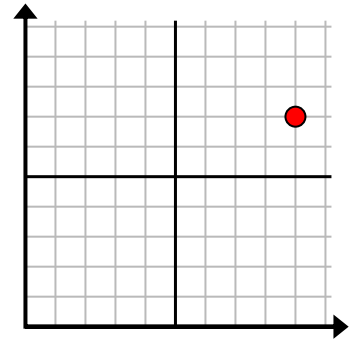
7) (2 . 5)



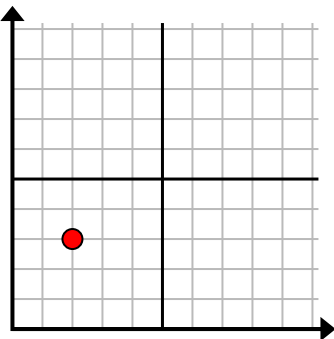
8) (7 . 5)



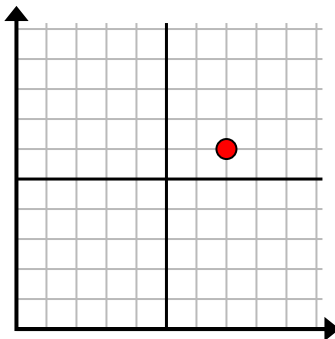
9) (9 . 7)



10) (2 . 3)



11) (7 . 6)



12) (10 . 4)

