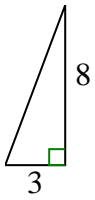




Determina quale scelta ha la stessa pendenza di quella mostrata.

Risposte

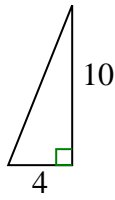
1)



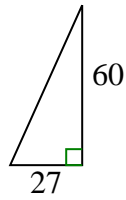
A.



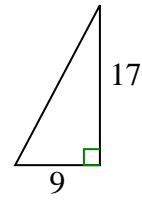
B.



C.



D.



1. _____

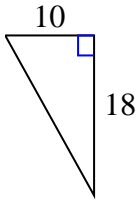
2. _____

3. _____

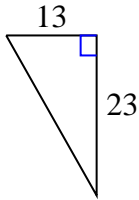
4. _____

5. _____

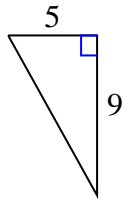
2)



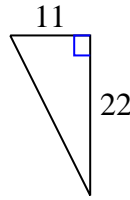
A.



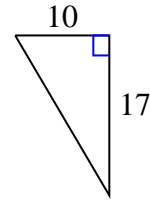
B.



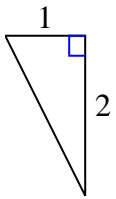
C.



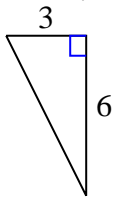
D.



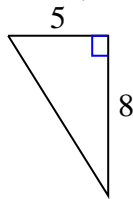
3)



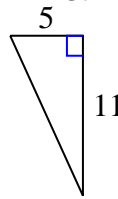
A.



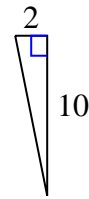
B.



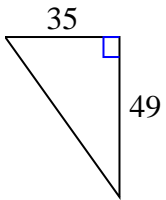
C.



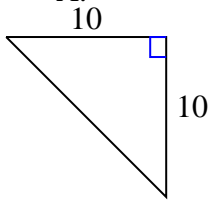
D.



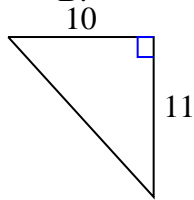
4)



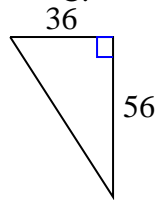
A.



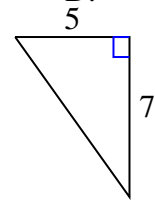
B.



C.



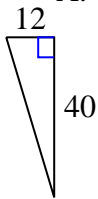
D.



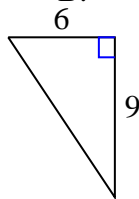
5)



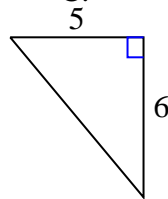
A.



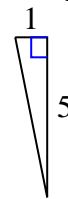
B.



C.



D.

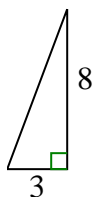




Determina quale scelta ha la stessa pendenza di quella mostrata.

Risposte

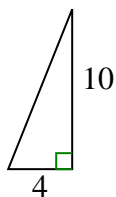
1)



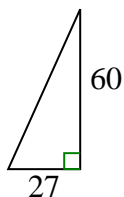
A.



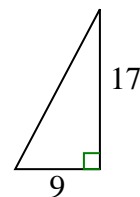
B.



C.

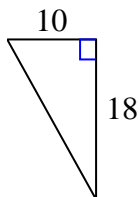


D.

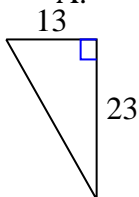


1. **A**

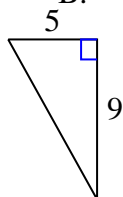
2)



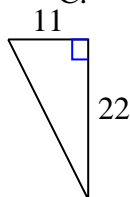
A.



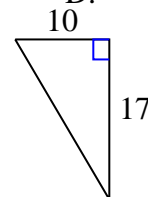
B.



C.

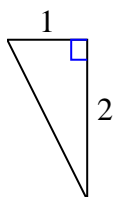


D.

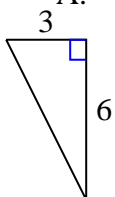


2. **B**

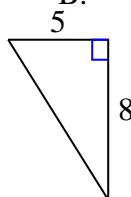
3)



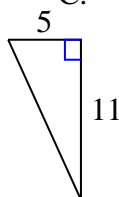
A.



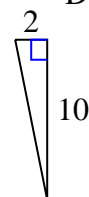
B.



C.

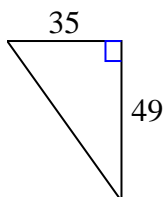


D.

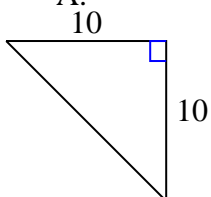


3. **A**

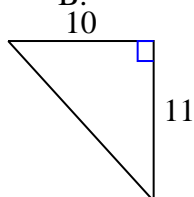
4)



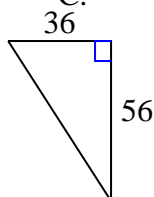
A.



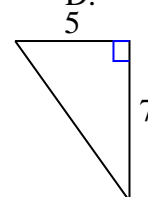
B.



C.

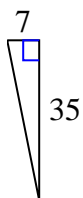


D.

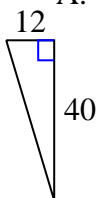


4. **D**

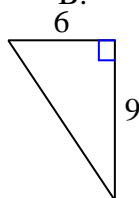
5)



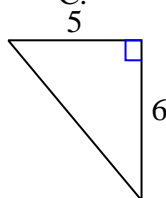
A.



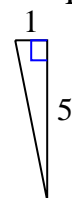
B.



C.



D.



5. **D**