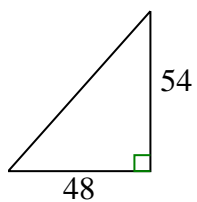




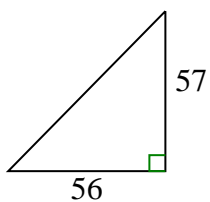
Determina quale scelta ha la stessa pendenza di quella mostrata.

**Risposte**

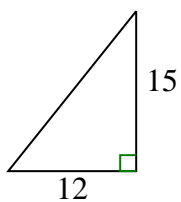
1)



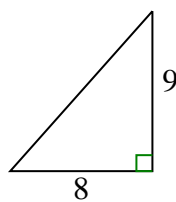
A.



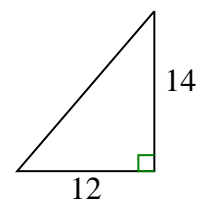
B.



C.



D.



1. \_\_\_\_\_

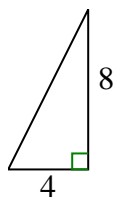
2. \_\_\_\_\_

3. \_\_\_\_\_

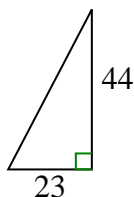
4. \_\_\_\_\_

5. \_\_\_\_\_

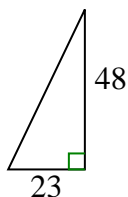
2)



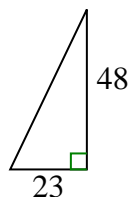
A.



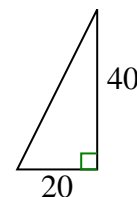
B.



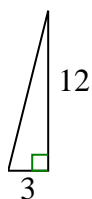
C.



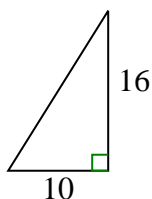
D.



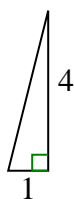
3)



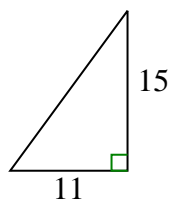
A.



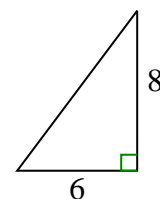
B.



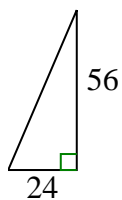
C.



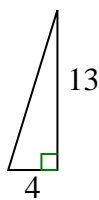
D.



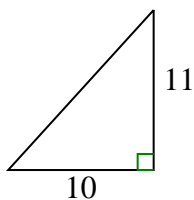
4)



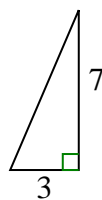
A.



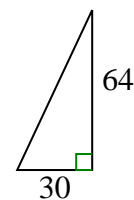
B.



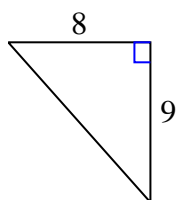
C.



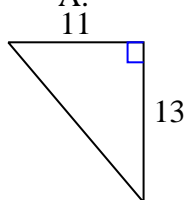
D.



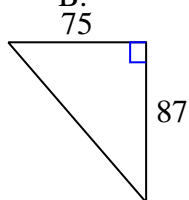
5)



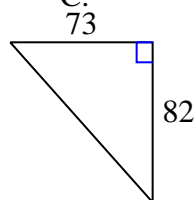
A.



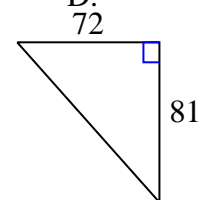
B.



C.



D.

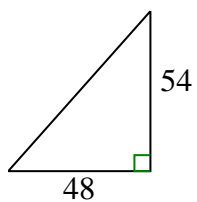




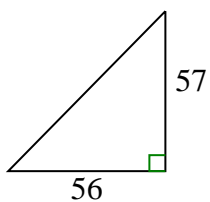
Determina quale scelta ha la stessa pendenza di quella mostrata.

**Risposte**

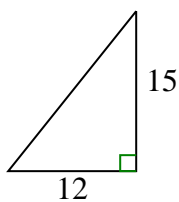
1)



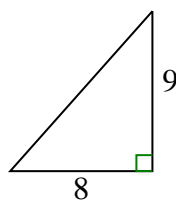
A.



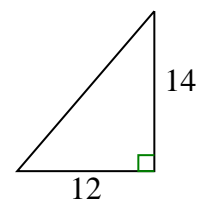
B.



C.

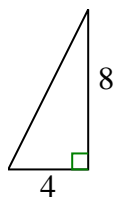


D.



1.   **C**  

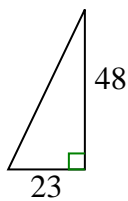
2)



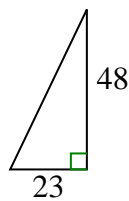
A.



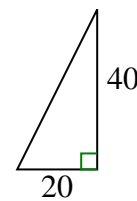
B.



C.



D.



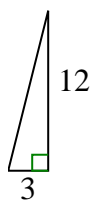
2.   **D**  

3.   **B**  

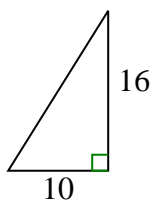
4.   **C**  

5.   **D**  

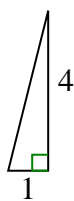
3)



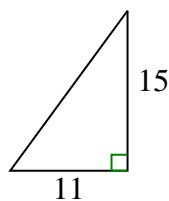
A.



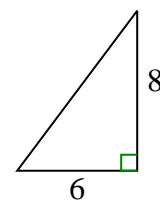
B.



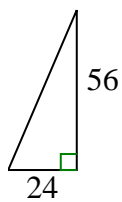
C.



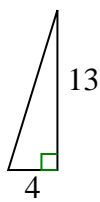
D.



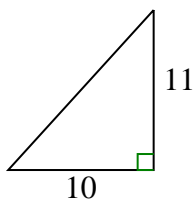
4)



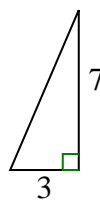
A.



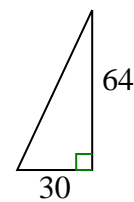
B.



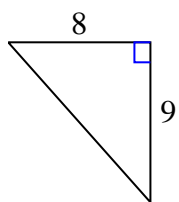
C.



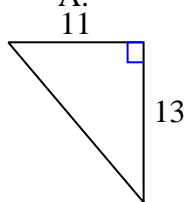
D.



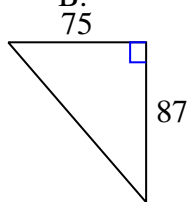
5)



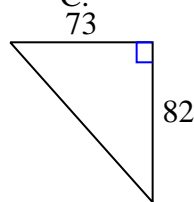
A.



B.



C.



D.

