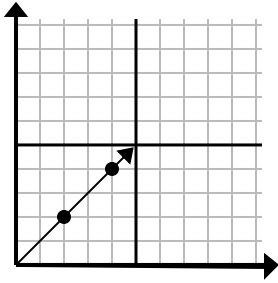




Determina quale scelta rappresenta un punto sulla linea se dovesse continuare.

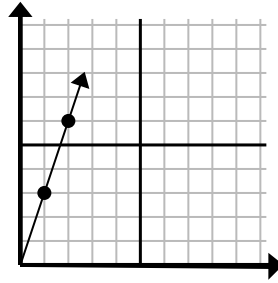
Risposte

1)



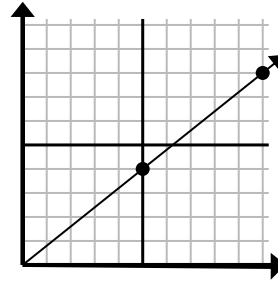
- A. (6 . 6)
- B. (8 . 8)
- C. (10 . 10)
- D. (5 . 6)

2)



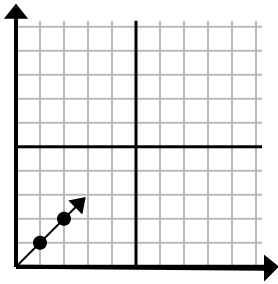
- A. (5 . 5)
- B. (3 . 9)
- C. (4 . 12)
- D. (6 . 6)

3)



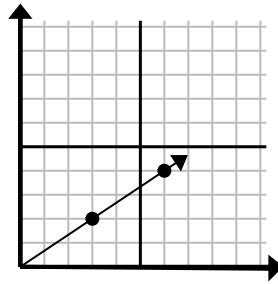
- A. (25 . 20)
- B. (15 . 12)
- C. (30 . 24)
- D. (13 . 8)

4)



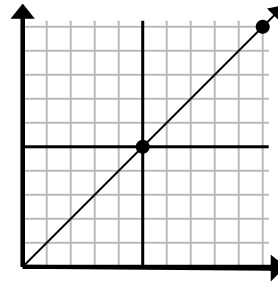
- A. (4 . 4)
- B. (5 . 3)
- C. (6 . 6)
- D. (3 . 3)

5)



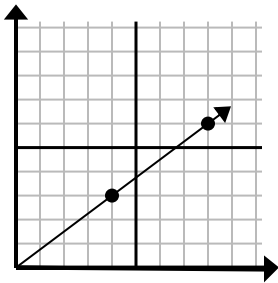
- A. (11 . 3)
- B. (9 . 6)
- C. (8 . 7)
- D. (12 . 8)

6)



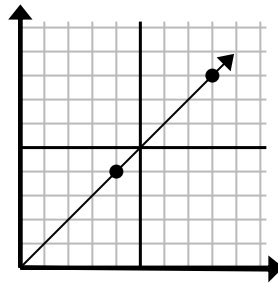
- A. (25 . 25)
- B. (20 . 20)
- C. (15 . 15)
- D. (13 . 8)

7)



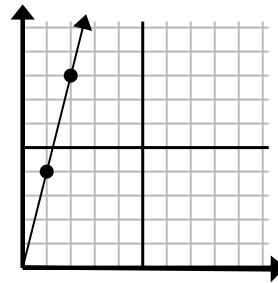
- A. (12 . 9)
- B. (28 . 21)
- C. (16 . 12)
- D. (12 . 4)

8)



- A. (28 . 28)
- B. (9 . 6)
- C. (16 . 16)
- D. (12 . 12)

9)



- A. (4 . 6)
- B. (3 . 6)
- C. (7 . 6)
- D. (3 . 12)

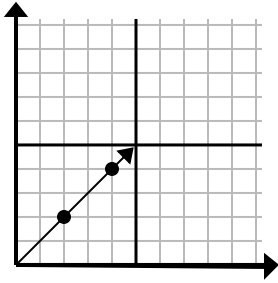
1. _____
2. _____
3. _____
4. _____
5. _____
6. _____
7. _____
8. _____
9. _____



Determina quale scelta rappresenta un punto sulla linea se dovesse continuare.

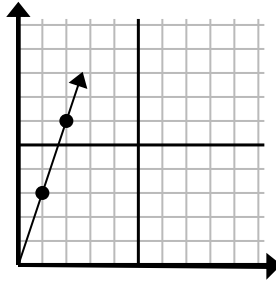
Risposte

1)



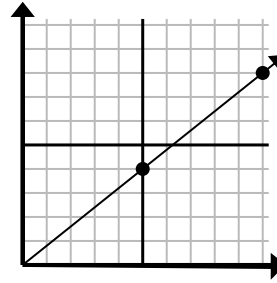
- A. (6 . 6)
 B. (8 . 8)
 C. (10 . 10)
 D. (5 . 6)

2)



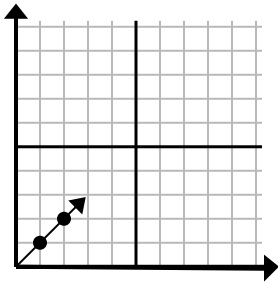
- A. (5 . 5)
 B. (3 . 9)
 C. (4 . 12)
 D. (6 . 6)

3)



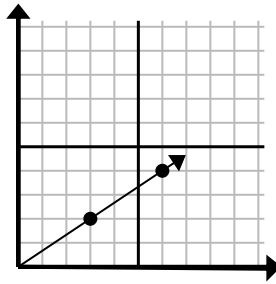
- A. (25 . 20)
 B. (15 . 12)
 C. (30 . 24)
 D. (13 . 8)

4)



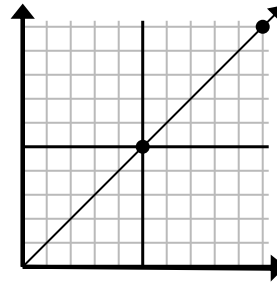
- A. (4 . 4)
 B. (5 . 3)
 C. (6 . 6)
 D. (3 . 3)

5)



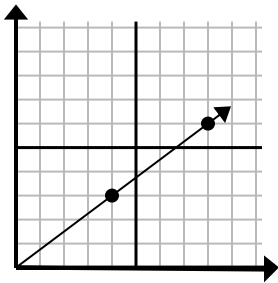
- A. (11 . 3)
 B. (9 . 6)
 C. (8 . 7)
 D. (12 . 8)

6)



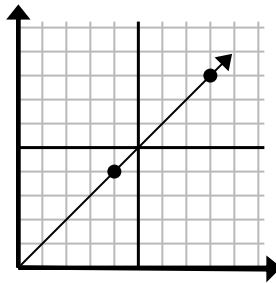
- A. (25 . 25)
 B. (20 . 20)
 C. (15 . 15)
 D. (13 . 8)

7)



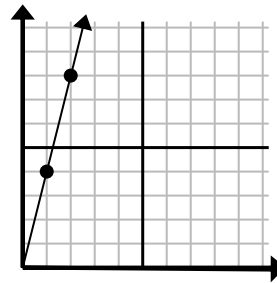
- A. (12 . 9)
 B. (28 . 21)
 C. (16 . 12)
 D. (12 . 4)

8)



- A. (28 . 28)
 B. (9 . 6)
 C. (16 . 16)
 D. (12 . 12)

9)



- A. (4 . 6)
 B. (3 . 6)
 C. (7 . 6)
 D. (3 . 12)

1. **A**
 2. **B**
 3. **B**
 4. **D**
 5. **B**
 6. **C**
 7. **A**
 8. **D**
 9. **D**