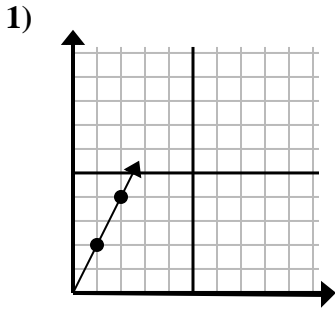


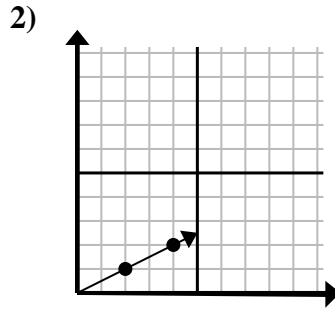


Determina quale scelta rappresenta un punto sulla linea se dovesse continuare.

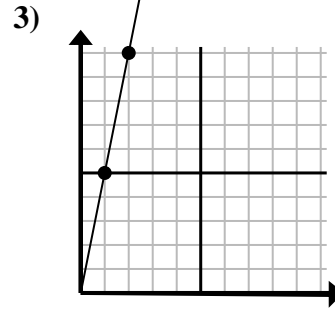
Risposte



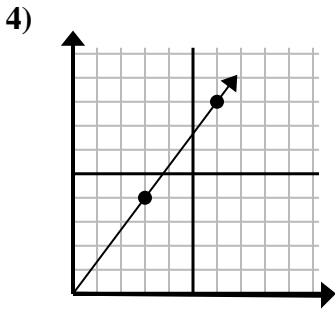
- A. (3 . 6)
- B. (7 . 3)
- C. (6 . 4)
- D. (7 . 14)



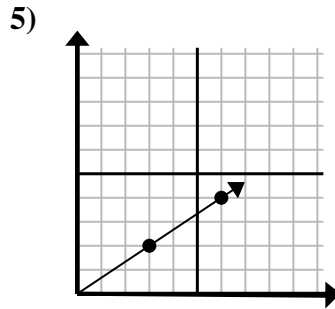
- A. (5 . 6)
- B. (5 . 4)
- C. (6 . 3)
- D. (9 . 6)



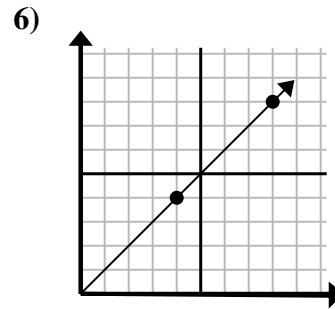
- A. (7 . 10)
- B. (3 . 15)
- C. (6 . 30)
- D. (5 . 8)



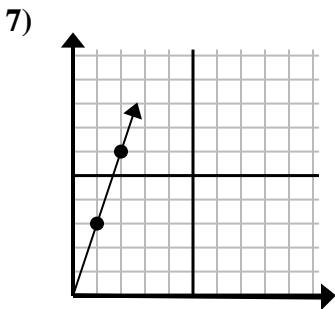
- A. (12 . 16)
- B. (10 . 6)
- C. (21 . 28)
- D. (9 . 12)



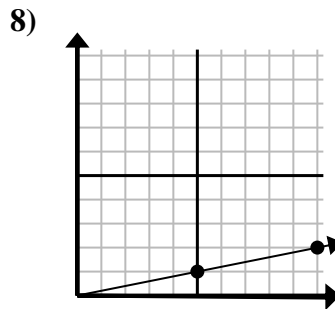
- A. (9 . 4)
- B. (9 . 6)
- C. (15 . 10)
- D. (12 . 8)



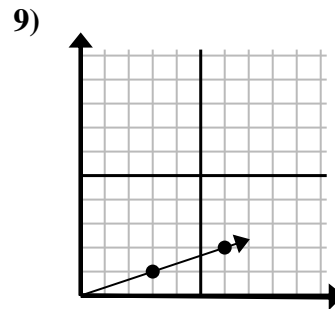
- A. (16 . 16)
- B. (12 . 12)
- C. (9 . 9)
- D. (24 . 24)



- A. (5 . 8)
- B. (5 . 15)
- C. (6 . 18)
- D. (3 . 9)



- A. (11 . 5)
- B. (15 . 2)
- C. (15 . 3)
- D. (14 . 2)



- A. (10 . 6)
- B. (9 . 3)
- C. (8 . 6)
- D. (9 . 2)

1. _____

2. _____

3. _____

4. _____

5. _____

6. _____

7. _____

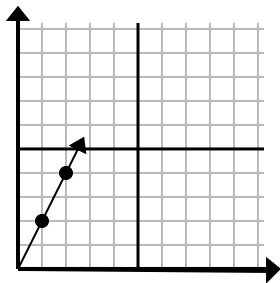
8. _____

9. _____



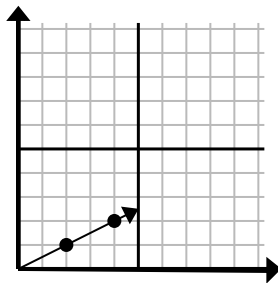
Determina quale scelta rappresenta un punto sulla linea se dovesse continuare.

1)



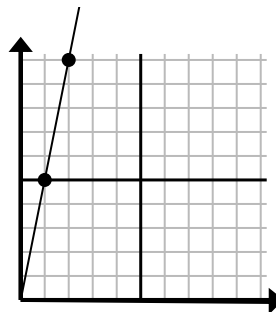
- A. (3 . 6)
 B. (7 . 3)
 C. (6 . 4)
 D. (7 . 14)

2)



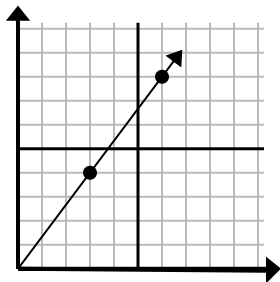
- A. (5 . 6)
 B. (5 . 4)
 C. (6 . 3)
 D. (9 . 6)

3)



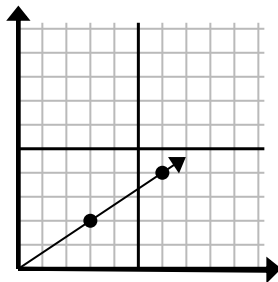
- A. (7 . 10)
 B. (3 . 15)
 C. (6 . 30)
 D. (5 . 8)

4)



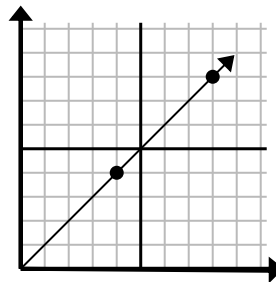
- A. (12 . 16)
 B. (10 . 6)
 C. (21 . 28)
 D. (9 . 12)

5)



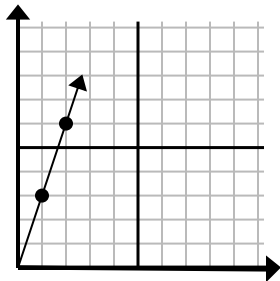
- A. (9 . 4)
 B. (9 . 6)
 C. (15 . 10)
 D. (12 . 8)

6)



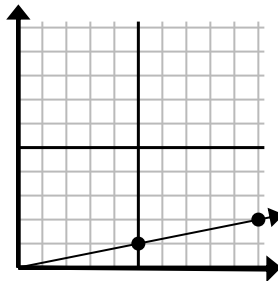
- A. (16 . 16)
 B. (12 . 12)
 C. (9 . 9)
 D. (24 . 24)

7)



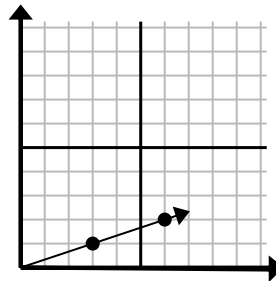
- A. (5 . 8)
 B. (5 . 15)
 C. (6 . 18)
 D. (3 . 9)

8)



- A. (11 . 5)
 B. (15 . 2)
 C. (15 . 3)
 D. (14 . 2)

9)



- A. (10 . 6)
 B. (9 . 3)
 C. (8 . 6)
 D. (9 . 2)

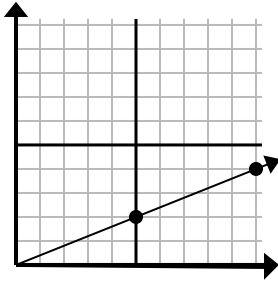
Risposte1. **A**2. **C**3. **B**4. **D**5. **B**6. **B**7. **D**8. **C**9. **B**



Determina quale scelta rappresenta un punto sulla linea se dovesse continuare.

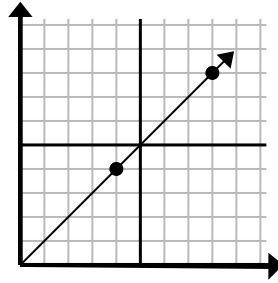
Risposte

1)



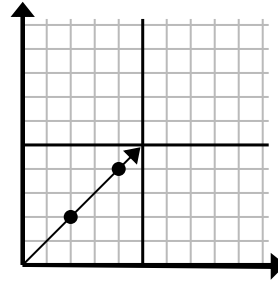
- A. (15 . 6)
- B. (25 . 10)
- C. (20 . 8)
- D. (30 . 12)

2)



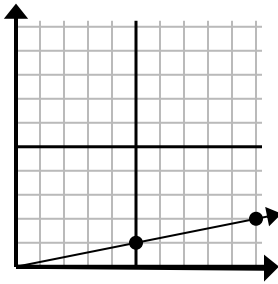
- A. (20 . 20)
- B. (11 . 6)
- C. (12 . 8)
- D. (12 . 12)

3)



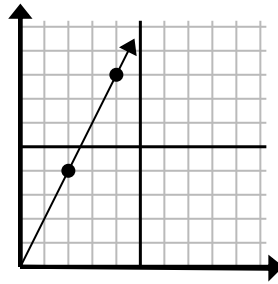
- A. (8 . 6)
- B. (10 . 10)
- C. (6 . 6)
- D. (14 . 14)

4)



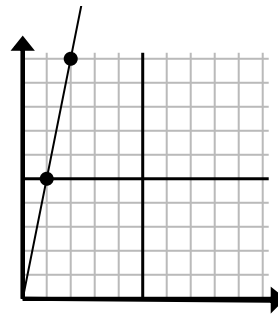
- A. (30 . 6)
- B. (14 . 5)
- C. (15 . 3)
- D. (14 . 3)

5)



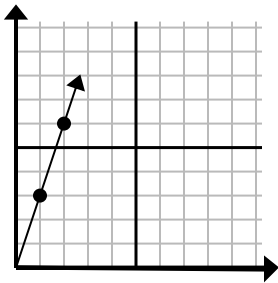
- A. (12 . 24)
- B. (6 . 12)
- C. (9 . 6)
- D. (7 . 7)

6)



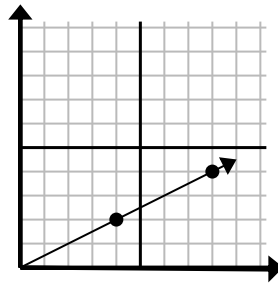
- A. (5 . 25)
- B. (6 . 7)
- C. (3 . 15)
- D. (4 . 8)

7)



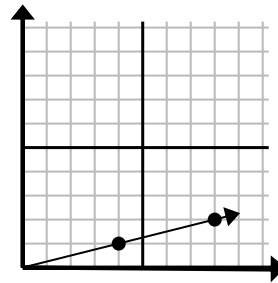
- A. (6 . 5)
- B. (6 . 18)
- C. (3 . 9)
- D. (7 . 21)

8)



- A. (20 . 10)
- B. (28 . 14)
- C. (13 . 7)
- D. (12 . 6)

9)



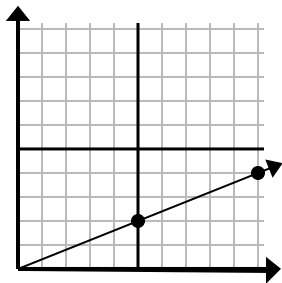
- A. (16 . 4)
- B. (24 . 6)
- C. (28 . 7)
- D. (12 . 3)

1. _____
2. _____
3. _____
4. _____
5. _____
6. _____
7. _____
8. _____
9. _____



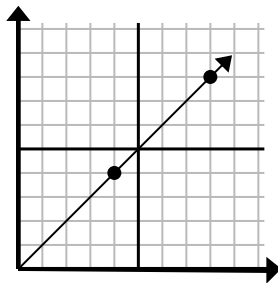
Determina quale scelta rappresenta un punto sulla linea se dovesse continuare.

1)



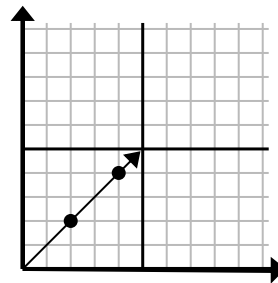
- A. (15 . 6)
 B. (25 . 10)
 C. (20 . 8)
 D. (30 . 12)

2)



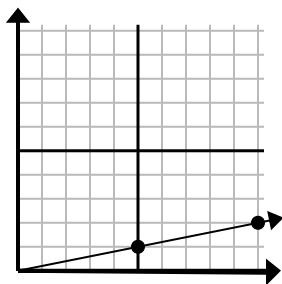
- A. (20 . 20)
 B. (11 . 6)
 C. (12 . 8)
 D. (12 . 12)

3)



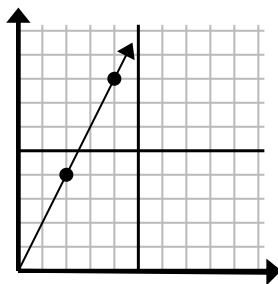
- A. (8 . 6)
 B. (10 . 10)
 C. (6 . 6)
 D. (14 . 14)

4)



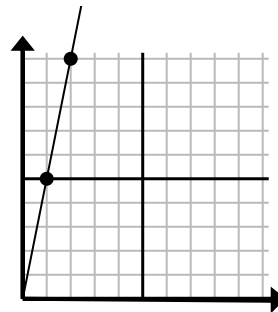
- A. (30 . 6)
 B. (14 . 5)
 C. (15 . 3)
 D. (14 . 3)

5)



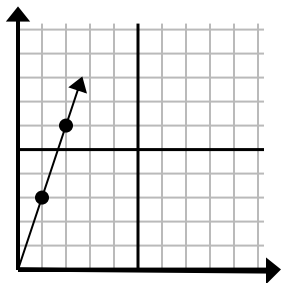
- A. (12 . 24)
 B. (6 . 12)
 C. (9 . 6)
 D. (7 . 7)

6)



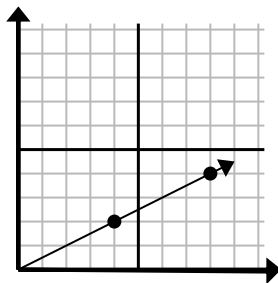
- A. (5 . 25)
 B. (6 . 7)
 C. (3 . 15)
 D. (4 . 8)

7)



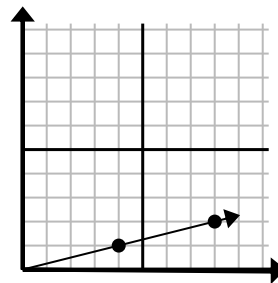
- A. (6 . 5)
 B. (6 . 18)
 C. (3 . 9)
 D. (7 . 21)

8)



- A. (20 . 10)
 B. (28 . 14)
 C. (13 . 7)
 D. (12 . 6)

9)



- A. (16 . 4)
 B. (24 . 6)
 C. (28 . 7)
 D. (12 . 3)

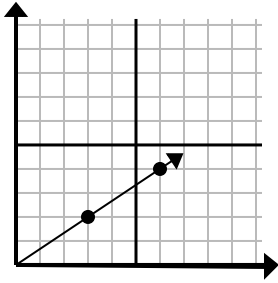
Risposte1. **A**2. **D**3. **C**4. **C**5. **B**6. **C**7. **C**8. **D**9. **D**



Determina quale scelta rappresenta un punto sulla linea se dovesse continuare.

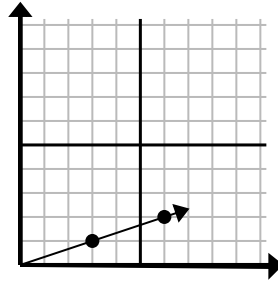
Risposte

1)



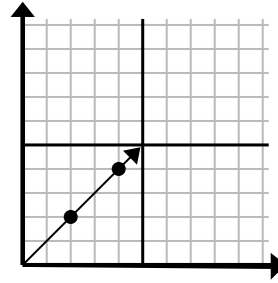
- A. (21 . 14)
- B. (12 . 8)
- C. (9 . 6)
- D. (15 . 10)

2)



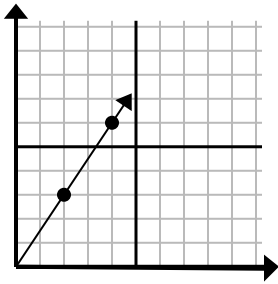
- A. (18 . 6)
- B. (12 . 4)
- C. (9 . 3)
- D. (10 . 3)

3)



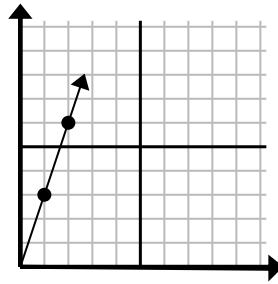
- A. (6 . 6)
- B. (12 . 12)
- C. (7 . 7)
- D. (8 . 4)

4)



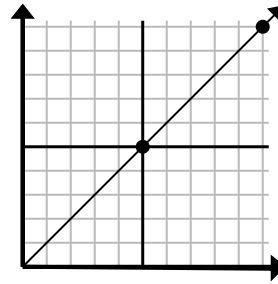
- A. (6 . 9)
- B. (14 . 21)
- C. (7 . 5)
- D. (8 . 7)

5)



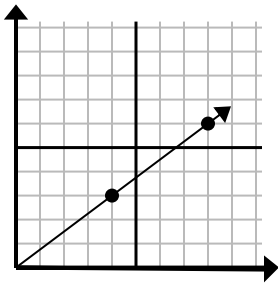
- A. (5 . 4)
- B. (4 . 8)
- C. (7 . 21)
- D. (3 . 9)

6)



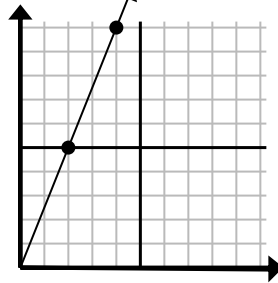
- A. (15 . 6)
- B. (30 . 30)
- C. (15 . 15)
- D. (35 . 35)

7)



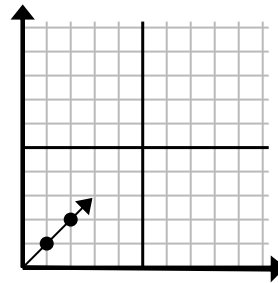
- A. (10 . 5)
- B. (10 . 6)
- C. (12 . 9)
- D. (28 . 21)

8)



- A. (12 . 30)
- B. (8 . 20)
- C. (6 . 15)
- D. (8 . 6)

9)



- A. (3 . 3)
- B. (3 . 2)
- C. (6 . 6)
- D. (6 . 3)

1. _____

2. _____

3. _____

4. _____

5. _____

6. _____

7. _____

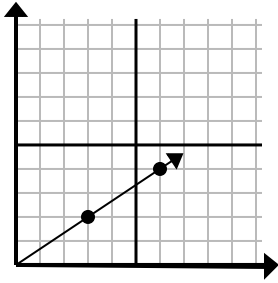
8. _____

9. _____



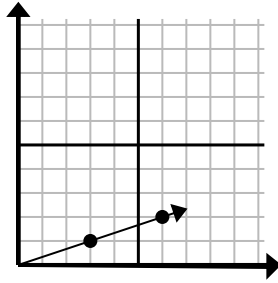
Determina quale scelta rappresenta un punto sulla linea se dovesse continuare.

1)



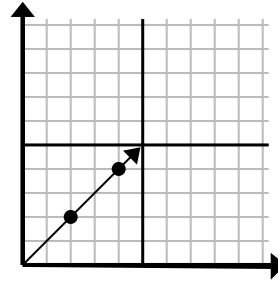
- A. (21 . 14)
 B. (12 . 8)
 C. (9 . 6)
 D. (15 . 10)

2)



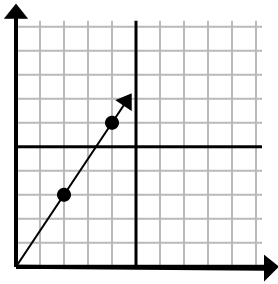
- A. (18 . 6)
 B. (12 . 4)
 C. (9 . 3)
 D. (10 . 3)

3)



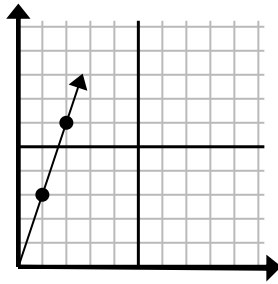
- A. (6 . 6)
 B. (12 . 12)
 C. (7 . 7)
 D. (8 . 4)

4)



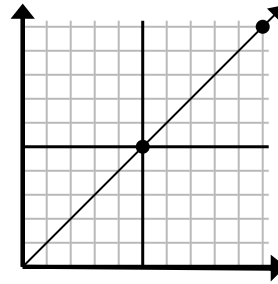
- A. (6 . 9)
 B. (14 . 21)
 C. (7 . 5)
 D. (8 . 7)

5)



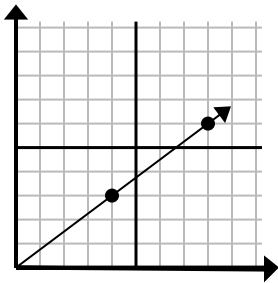
- A. (5 . 4)
 B. (4 . 8)
 C. (7 . 21)
 D. (3 . 9)

6)



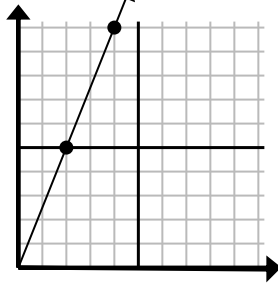
- A. (15 . 6)
 B. (30 . 30)
 C. (15 . 15)
 D. (35 . 35)

7)



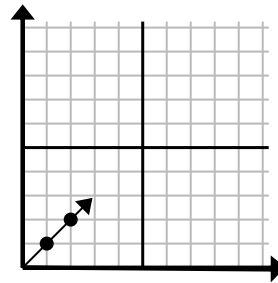
- A. (10 . 5)
 B. (10 . 6)
 C. (12 . 9)
 D. (28 . 21)

8)



- A. (12 . 30)
 B. (8 . 20)
 C. (6 . 15)
 D. (8 . 6)

9)



- A. (3 . 3)
 B. (3 . 2)
 C. (6 . 6)
 D. (6 . 3)

Risposte

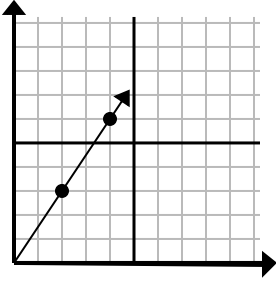
1. **C**
 2. **C**
 3. **A**
 4. **A**
 5. **D**
 6. **C**
 7. **C**
 8. **C**
 9. **A**



Determina quale scelta rappresenta un punto sulla linea se dovesse continuare.

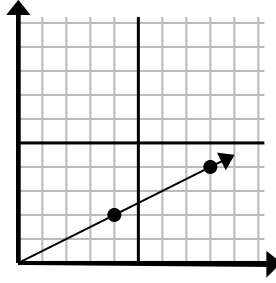
Risposte

1)



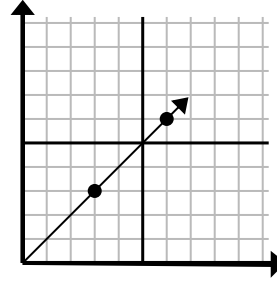
- A. (6 . 9)
 B. (8 . 6)
 C. (5 . 8)
 D. (5 . 5)

2)



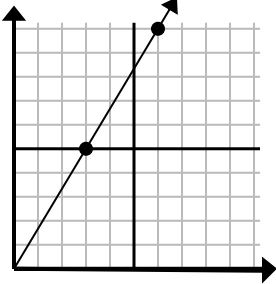
- A. (12 . 7)
 B. (12 . 6)
 C. (24 . 12)
 D. (20 . 10)

3)



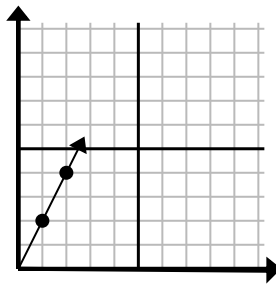
- A. (11 . 5)
 B. (9 . 9)
 C. (18 . 18)
 D. (11 . 8)

4)



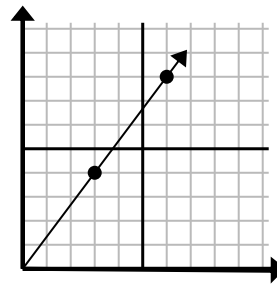
- A. (8 . 9)
 B. (12 . 20)
 C. (9 . 15)
 D. (11 . 6)

5)



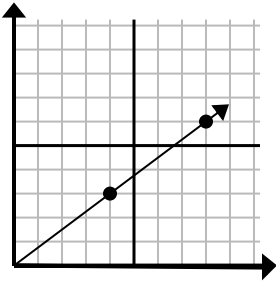
- A. (7 . 14)
 B. (7 . 7)
 C. (3 . 6)
 D. (6 . 12)

6)



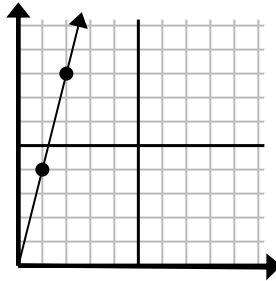
- A. (18 . 24)
 B. (21 . 28)
 C. (9 . 12)
 D. (11 . 9)

7)



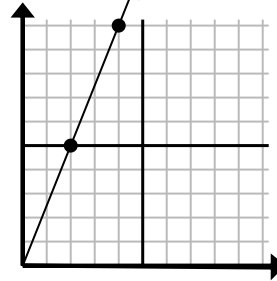
- A. (12 . 9)
 B. (28 . 21)
 C. (24 . 18)
 D. (11 . 8)

8)



- A. (3 . 12)
 B. (4 . 6)
 C. (4 . 16)
 D. (7 . 28)

9)



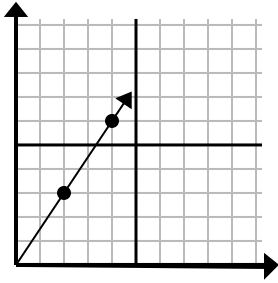
- A. (8 . 20)
 B. (14 . 35)
 C. (5 . 9)
 D. (6 . 15)

1. _____
2. _____
3. _____
4. _____
5. _____
6. _____
7. _____
8. _____
9. _____



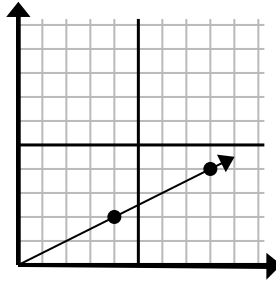
Determina quale scelta rappresenta un punto sulla linea se dovesse continuare.

1)



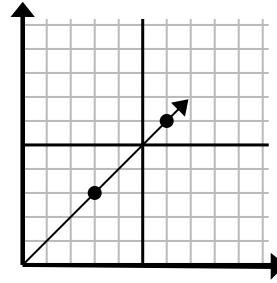
- A. (6 . 9)
 B. (8 . 6)
 C. (5 . 8)
 D. (5 . 5)

2)



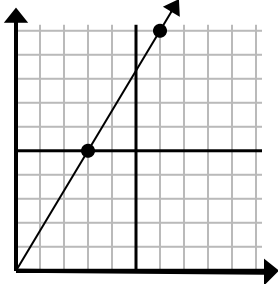
- A. (12 . 7)
 B. (12 . 6)
 C. (24 . 12)
 D. (20 . 10)

3)



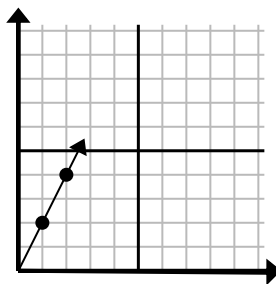
- A. (11 . 5)
 B. (9 . 9)
 C. (18 . 18)
 D. (11 . 8)

4)



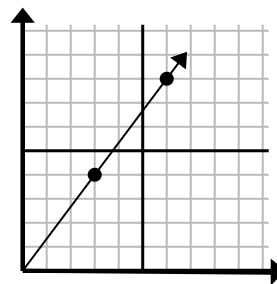
- A. (8 . 9)
 B. (12 . 20)
 C. (9 . 15)
 D. (11 . 6)

5)



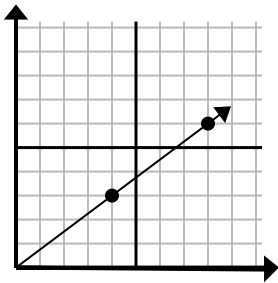
- A. (7 . 14)
 B. (7 . 7)
 C. (3 . 6)
 D. (6 . 12)

6)



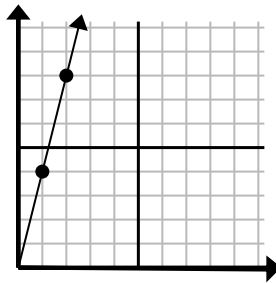
- A. (18 . 24)
 B. (21 . 28)
 C. (9 . 12)
 D. (11 . 9)

7)



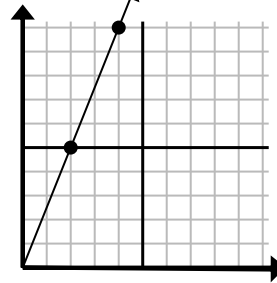
- A. (12 . 9)
 B. (28 . 21)
 C. (24 . 18)
 D. (11 . 8)

8)



- A. (3 . 12)
 B. (4 . 6)
 C. (4 . 16)
 D. (7 . 28)

9)



- A. (8 . 20)
 B. (14 . 35)
 C. (5 . 9)
 D. (6 . 15)

Risposte

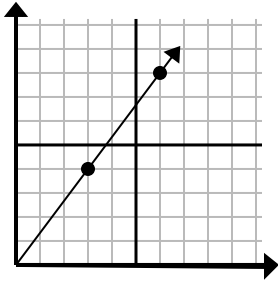
1. **A**
 2. **B**
 3. **B**
 4. **C**
 5. **C**
 6. **C**
 7. **A**
 8. **A**
 9. **D**



Determina quale scelta rappresenta un punto sulla linea se dovesse continuare.

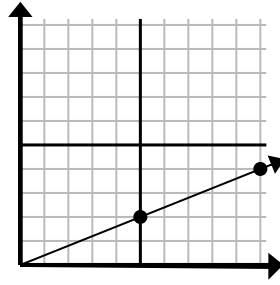
Risposte

1)



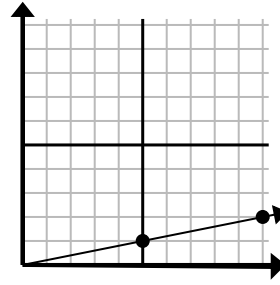
- A. (18 . 24)
- B. (15 . 20)
- C. (9 . 12)
- D. (9 . 5)

2)



- A. (11 . 7)
- B. (25 . 10)
- C. (30 . 12)
- D. (15 . 6)

3)



- A. (15 . 3)
- B. (20 . 4)
- C. (30 . 6)
- D. (12 . 6)

1. _____

2. _____

3. _____

4. _____

5. _____

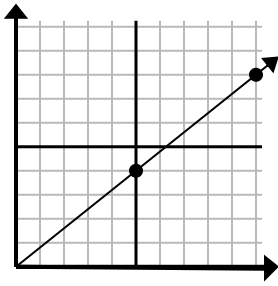
6. _____

7. _____

8. _____

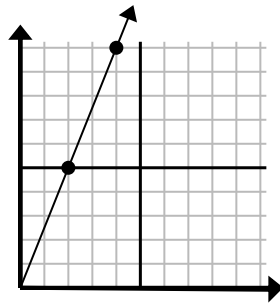
9. _____

4)



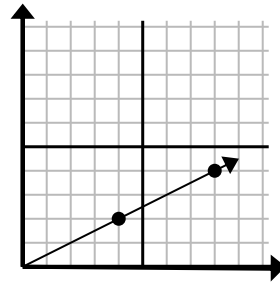
- A. (13 . 5)
- B. (15 . 12)
- C. (30 . 24)
- D. (11 . 6)

5)



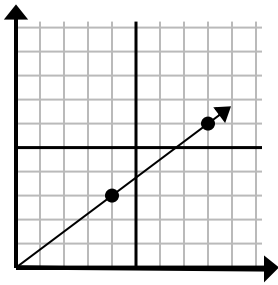
- A. (8 . 20)
- B. (7 . 6)
- C. (6 . 15)
- D. (10 . 25)

6)



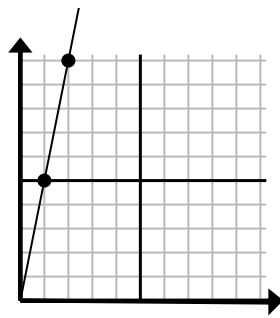
- A. (24 . 12)
- B. (28 . 14)
- C. (12 . 6)
- D. (10 . 4)

7)



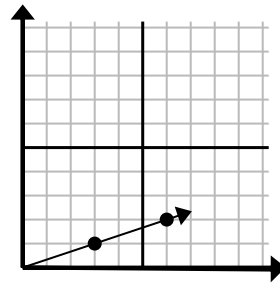
- A. (12 . 9)
- B. (24 . 18)
- C. (12 . 4)
- D. (16 . 12)

8)



- A. (6 . 8)
- B. (3 . 15)
- C. (7 . 7)
- D. (6 . 30)

9)

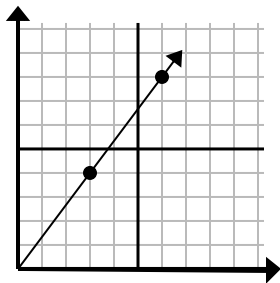


- A. (9 . 3)
- B. (8 . 6)
- C. (7 . 2)
- D. (18 . 6)



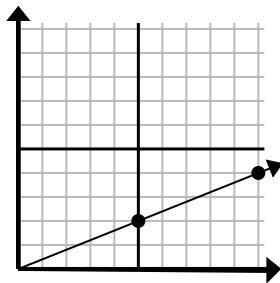
Determina quale scelta rappresenta un punto sulla linea se dovesse continuare.

1)



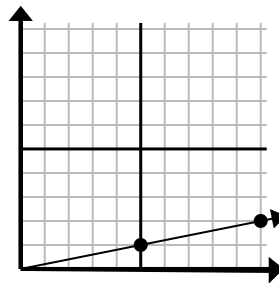
- A. (18 . 24)
 B. (15 . 20)
 C. (9 . 12)
 D. (9 . 5)

2)



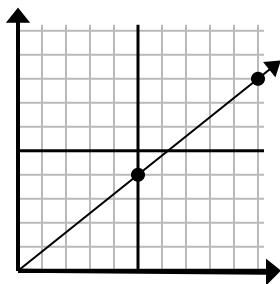
- A. (11 . 7)
 B. (25 . 10)
 C. (30 . 12)
 D. (15 . 6)

3)



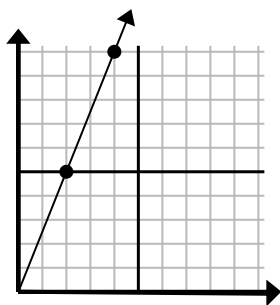
- A. (15 . 3)
 B. (20 . 4)
 C. (30 . 6)
 D. (12 . 6)

4)



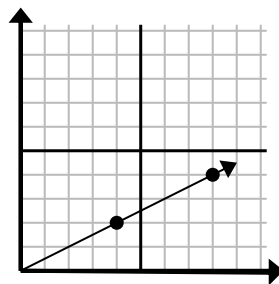
- A. (13 . 5)
 B. (15 . 12)
 C. (30 . 24)
 D. (11 . 6)

5)



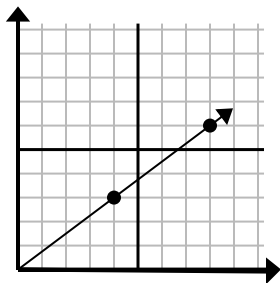
- A. (8 . 20)
 B. (7 . 6)
 C. (6 . 15)
 D. (10 . 25)

6)



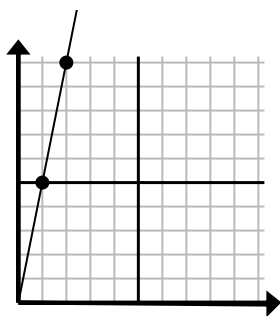
- A. (24 . 12)
 B. (28 . 14)
 C. (12 . 6)
 D. (10 . 4)

7)



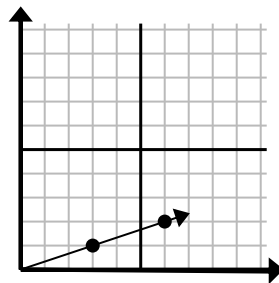
- A. (12 . 9)
 B. (24 . 18)
 C. (12 . 4)
 D. (16 . 12)

8)



- A. (6 . 8)
 B. (3 . 15)
 C. (7 . 7)
 D. (6 . 30)

9)



- A. (9 . 3)
 B. (8 . 6)
 C. (7 . 2)
 D. (18 . 6)

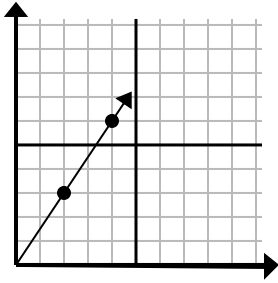
Risposte1. **C**2. **D**3. **A**4. **B**5. **C**6. **C**7. **A**8. **B**9. **A**



Determina quale scelta rappresenta un punto sulla linea se dovesse continuare.

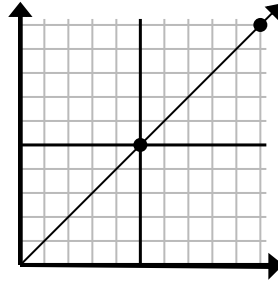
Risposte

1)



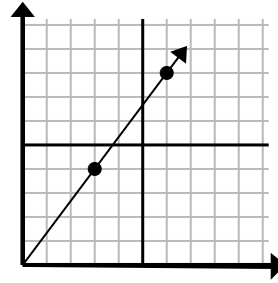
- A. (6 . 9)
- B. (5 . 4)
- C. (12 . 18)
- D. (14 . 21)

2)



- A. (30 . 30)
- B. (15 . 15)
- C. (15 . 7)
- D. (20 . 20)

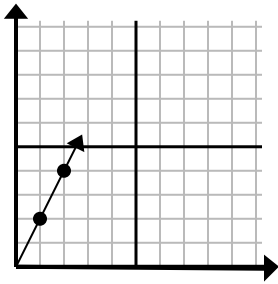
3)



- A. (8 . 5)
- B. (12 . 16)
- C. (9 . 12)
- D. (11 . 6)

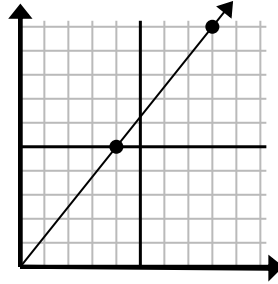
1. _____
2. _____
3. _____
4. _____
5. _____
6. _____
7. _____
8. _____
9. _____

4)



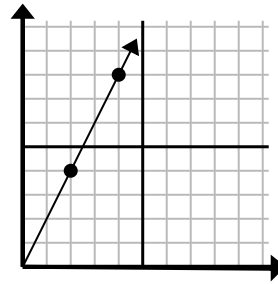
- A. (3 . 6)
- B. (4 . 8)
- C. (6 . 12)
- D. (7 . 14)

5)



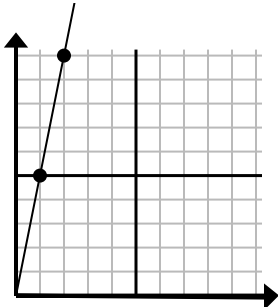
- A. (16 . 20)
- B. (13 . 10)
- C. (28 . 35)
- D. (12 . 15)

6)



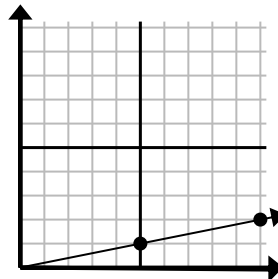
- A. (14 . 28)
- B. (7 . 8)
- C. (10 . 20)
- D. (6 . 12)

7)



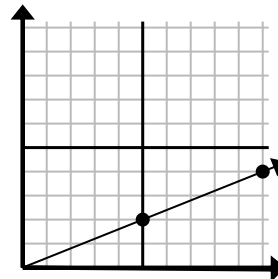
- A. (5 . 8)
- B. (7 . 35)
- C. (3 . 15)
- D. (6 . 30)

8)



- A. (25 . 5)
- B. (15 . 3)
- C. (35 . 7)
- D. (11 . 4)

9)

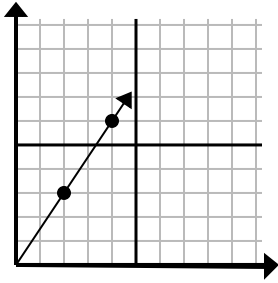


- A. (20 . 8)
- B. (14 . 6)
- C. (15 . 6)
- D. (25 . 10)



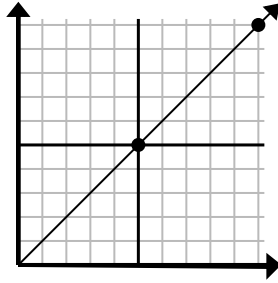
Determina quale scelta rappresenta un punto sulla linea se dovesse continuare.

1)



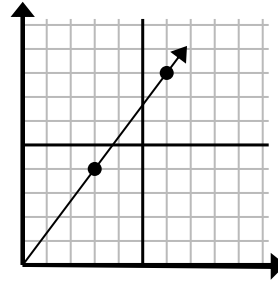
- A. (6 . 9)
 B. (5 . 4)
 C. (12 . 18)
 D. (14 . 21)

2)



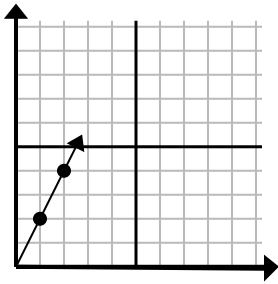
- A. (30 . 30)
 B. (15 . 15)
 C. (15 . 7)
 D. (20 . 20)

3)



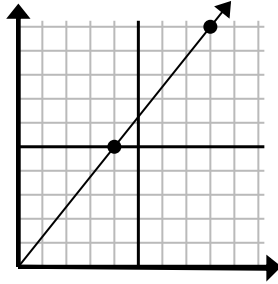
- A. (8 . 5)
 B. (12 . 16)
 C. (9 . 12)
 D. (11 . 6)

4)



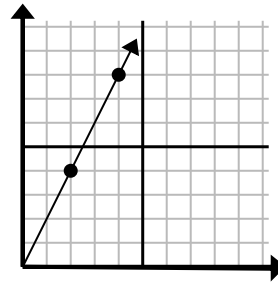
- A. (3 . 6)
 B. (4 . 8)
 C. (6 . 12)
 D. (7 . 14)

5)



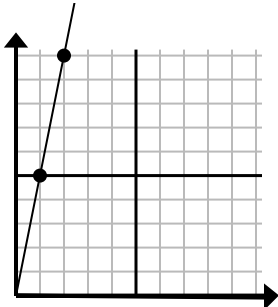
- A. (16 . 20)
 B. (13 . 10)
 C. (28 . 35)
 D. (12 . 15)

6)



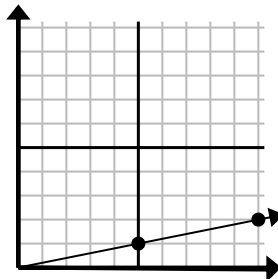
- A. (14 . 28)
 B. (7 . 8)
 C. (10 . 20)
 D. (6 . 12)

7)



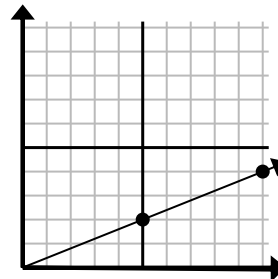
- A. (5 . 8)
 B. (7 . 35)
 C. (3 . 15)
 D. (6 . 30)

8)



- A. (25 . 5)
 B. (15 . 3)
 C. (35 . 7)
 D. (11 . 4)

9)



- A. (20 . 8)
 B. (14 . 6)
 C. (15 . 6)
 D. (25 . 10)

Risposte

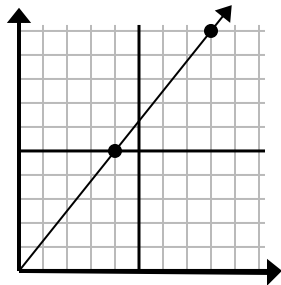
1. **A**
 2. **B**
 3. **C**
 4. **A**
 5. **D**
 6. **D**
 7. **C**
 8. **B**
 9. **C**



Determina quale scelta rappresenta un punto sulla linea se dovesse continuare.

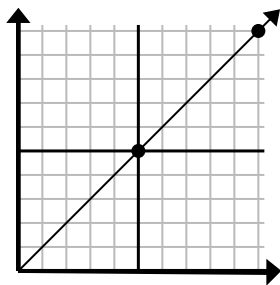
Risposte

1)



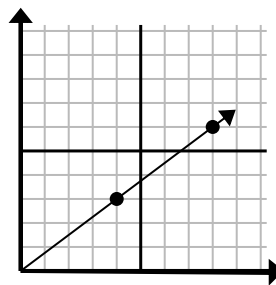
- A. (20 . 25)
- B. (12 . 15)
- C. (24 . 30)
- D. (11 . 10)

2)



- A. (15 . 15)
- B. (12 . 10)
- C. (14 . 6)
- D. (25 . 25)

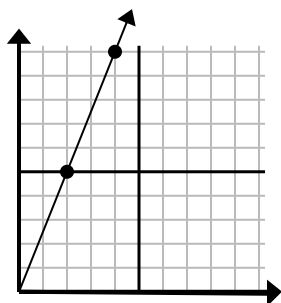
3)



- A. (28 . 21)
- B. (12 . 9)
- C. (24 . 18)
- D. (16 . 12)

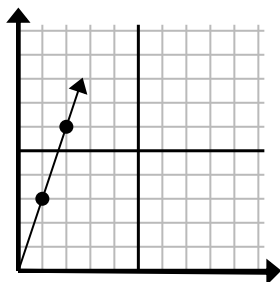
1. _____
2. _____
3. _____
4. _____
5. _____
6. _____
7. _____
8. _____
9. _____

4)



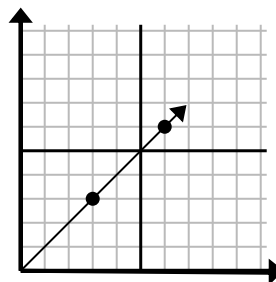
- A. (6 . 15)
- B. (5 . 9)
- C. (8 . 20)
- D. (12 . 30)

5)



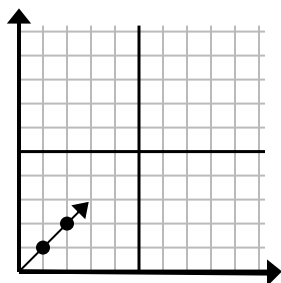
- A. (4 . 12)
- B. (3 . 9)
- C. (4 . 6)
- D. (7 . 6)

6)



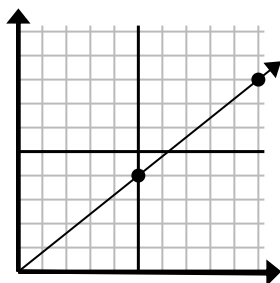
- A. (12 . 12)
- B. (9 . 9)
- C. (18 . 18)
- D. (9 . 5)

7)



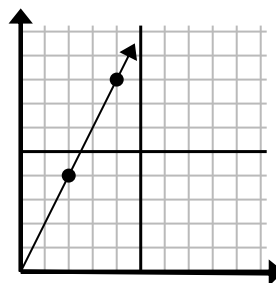
- A. (5 . 6)
- B. (3 . 3)
- C. (5 . 5)
- D. (7 . 3)

8)



- A. (15 . 12)
- B. (35 . 28)
- C. (14 . 8)
- D. (14 . 5)

9)

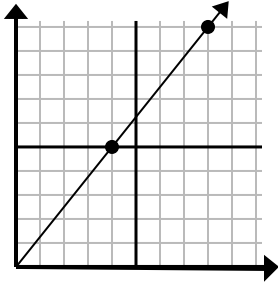


- A. (6 . 12)
- B. (7 . 9)
- C. (10 . 20)
- D. (8 . 16)



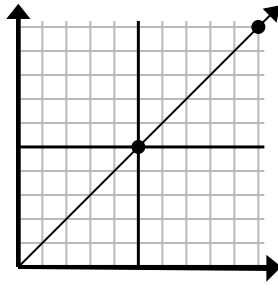
Determina quale scelta rappresenta un punto sulla linea se dovesse continuare.

1)



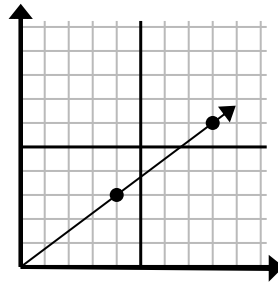
- A. (20 . 25)
 B. (12 . 15)
 C. (24 . 30)
 D. (11 . 10)

2)



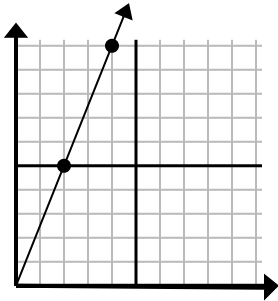
- A. (15 . 15)
 B. (12 . 10)
 C. (14 . 6)
 D. (25 . 25)

3)



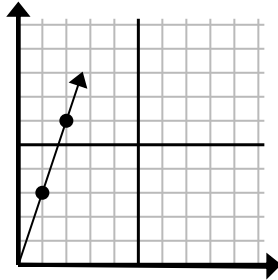
- A. (28 . 21)
 B. (12 . 9)
 C. (24 . 18)
 D. (16 . 12)

4)



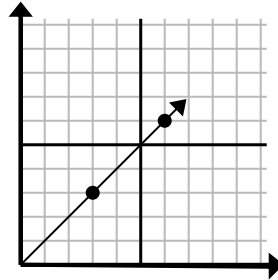
- A. (6 . 15)
 B. (5 . 9)
 C. (8 . 20)
 D. (12 . 30)

5)



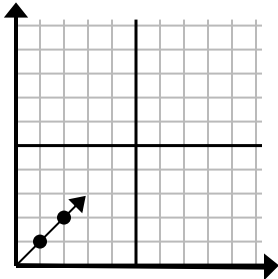
- A. (4 . 12)
 B. (3 . 9)
 C. (4 . 6)
 D. (7 . 6)

6)



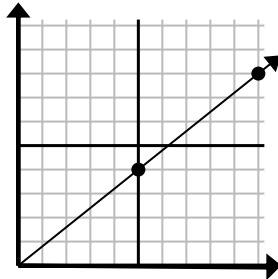
- A. (12 . 12)
 B. (9 . 9)
 C. (18 . 18)
 D. (9 . 5)

7)



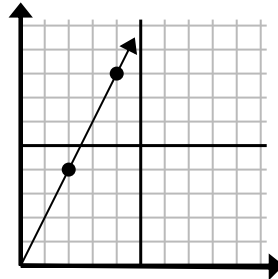
- A. (5 . 6)
 B. (3 . 3)
 C. (5 . 5)
 D. (7 . 3)

8)



- A. (15 . 12)
 B. (35 . 28)
 C. (14 . 8)
 D. (14 . 5)

9)



- A. (6 . 12)
 B. (7 . 9)
 C. (10 . 20)
 D. (8 . 16)

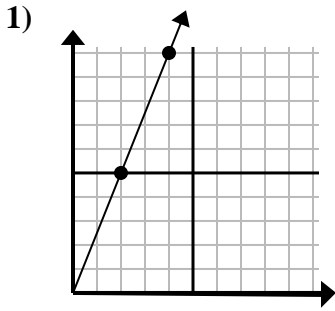
Risposte

1. **B**
 2. **A**
 3. **B**
 4. **A**
 5. **B**
 6. **B**
 7. **B**
 8. **A**
 9. **A**

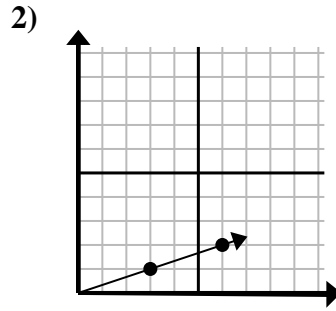


Determina quale scelta rappresenta un punto sulla linea se dovesse continuare.

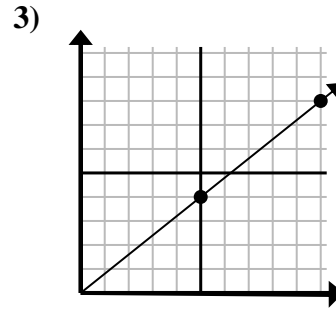
Risposte



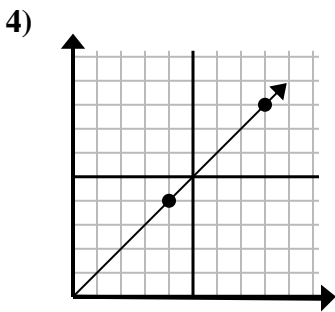
- A. (12 . 30)
- B. (8 . 20)
- C. (8 . 10)
- D. (6 . 15)



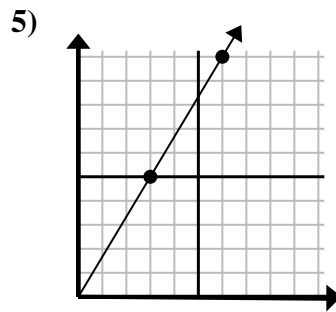
- A. (9 . 3)
- B. (10 . 6)
- C. (15 . 5)
- D. (18 . 6)



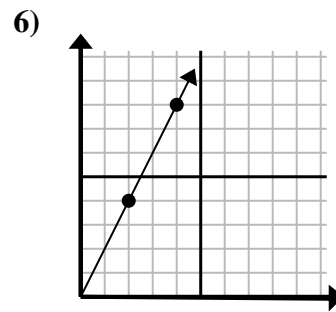
- A. (11 . 9)
- B. (15 . 12)
- C. (20 . 16)
- D. (25 . 20)



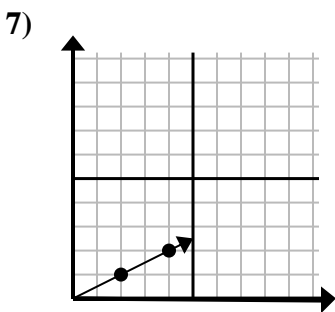
- A. (16 . 16)
- B. (12 . 12)
- C. (13 . 5)
- D. (28 . 28)



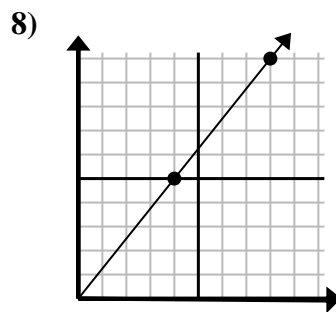
- A. (8 . 10)
- B. (15 . 25)
- C. (7 . 6)
- D. (9 . 15)



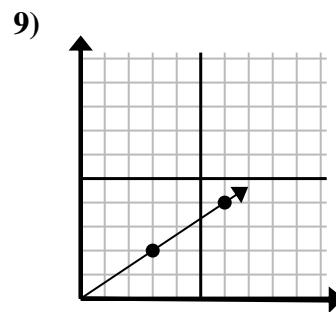
- A. (6 . 5)
- B. (6 . 12)
- C. (12 . 24)
- D. (8 . 16)



- A. (9 . 2)
- B. (6 . 3)
- C. (14 . 7)
- D. (7 . 4)



- A. (9 . 10)
- B. (12 . 15)
- C. (20 . 25)
- D. (24 . 30)



- A. (18 . 12)
- B. (8 . 7)
- C. (11 . 5)
- D. (9 . 6)

1. _____

2. _____

3. _____

4. _____

5. _____

6. _____

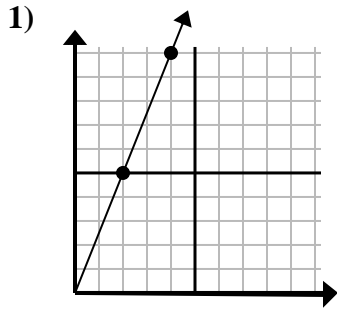
7. _____

8. _____

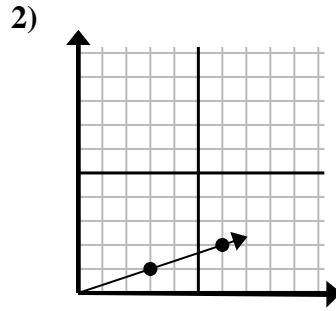
9. _____



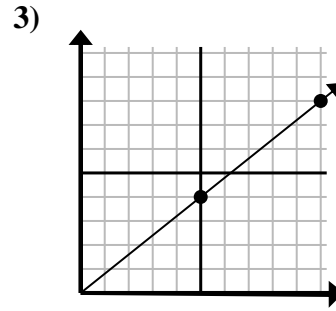
Determina quale scelta rappresenta un punto sulla linea se dovesse continuare.



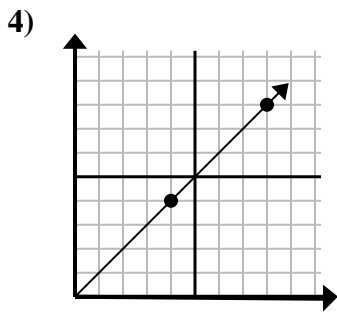
- A. (12 . 30)
 B. (8 . 20)
 C. (8 . 10)
 D. (6 . 15)



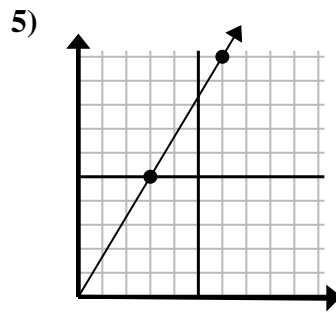
- A. (9 . 3)
 B. (10 . 6)
 C. (15 . 5)
 D. (18 . 6)



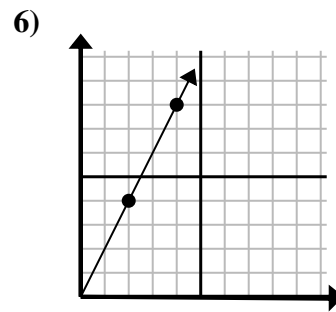
- A. (11 . 9)
 B. (15 . 12)
 C. (20 . 16)
 D. (25 . 20)



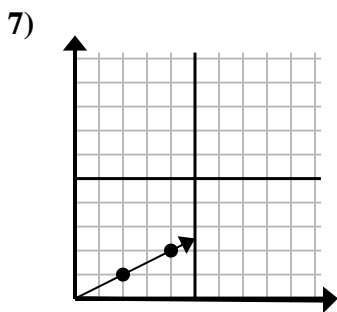
- A. (16 . 16)
 B. (12 . 12)
 C. (13 . 5)
 D. (28 . 28)



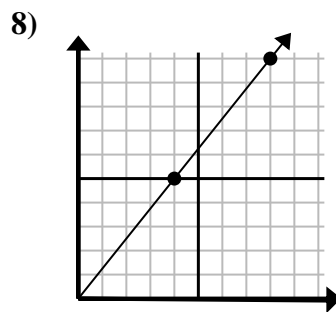
- A. (8 . 10)
 B. (15 . 25)
 C. (7 . 6)
 D. (9 . 15)



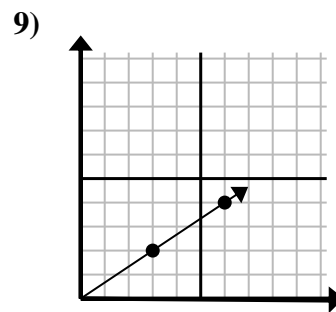
- A. (6 . 5)
 B. (6 . 12)
 C. (12 . 24)
 D. (8 . 16)



- A. (9 . 2)
 B. (6 . 3)
 C. (14 . 7)
 D. (7 . 4)



- A. (9 . 10)
 B. (12 . 15)
 C. (20 . 25)
 D. (24 . 30)



- A. (18 . 12)
 B. (8 . 7)
 C. (11 . 5)
 D. (9 . 6)

Risposte

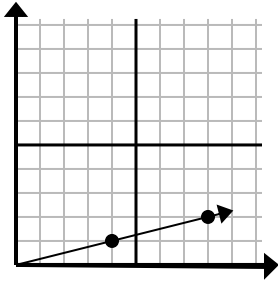
1. **D**
 2. **A**
 3. **B**
 4. **B**
 5. **D**
 6. **B**
 7. **B**
 8. **B**
 9. **D**



Determina quale scelta rappresenta un punto sulla linea se dovesse continuare.

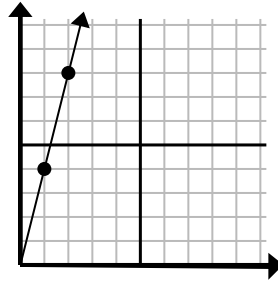
Risposte

1)



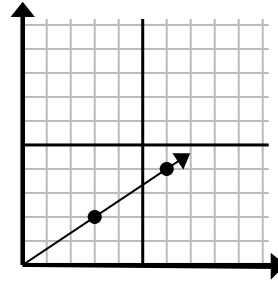
- A. (10 . 4)
- B. (13 . 5)
- C. (12 . 3)
- D. (9 . 3)

2)



- A. (3 . 9)
- B. (7 . 8)
- C. (5 . 5)
- D. (3 . 12)

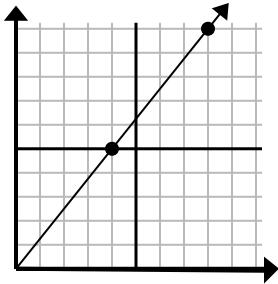
3)



- A. (12 . 8)
- B. (9 . 6)
- C. (18 . 12)
- D. (11 . 3)

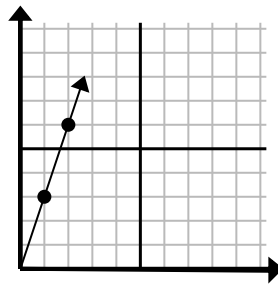
1. _____
2. _____
3. _____
4. _____
5. _____
6. _____
7. _____
8. _____
9. _____

4)



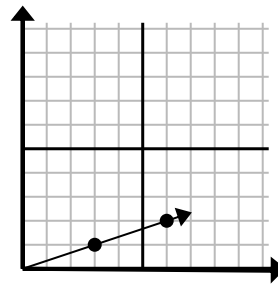
- A. (9 . 9)
- B. (12 . 15)
- C. (12 . 7)
- D. (28 . 35)

5)



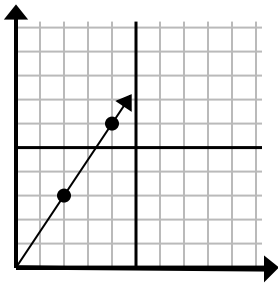
- A. (3 . 9)
- B. (4 . 12)
- C. (3 . 5)
- D. (7 . 4)

6)



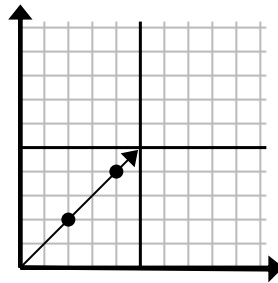
- A. (9 . 3)
- B. (11 . 4)
- C. (11 . 5)
- D. (15 . 5)

7)



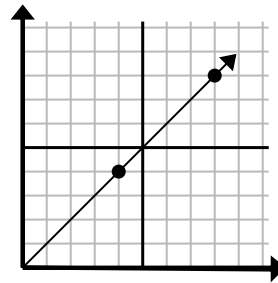
- A. (8 . 7)
- B. (6 . 4)
- C. (6 . 9)
- D. (12 . 18)

8)



- A. (6 . 6)
- B. (8 . 8)
- C. (10 . 10)
- D. (14 . 14)

9)

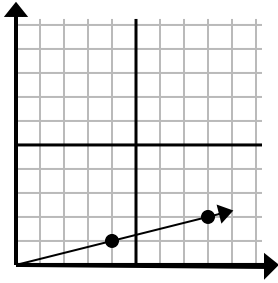


- A. (24 . 24)
- B. (12 . 12)
- C. (28 . 28)
- D. (20 . 20)



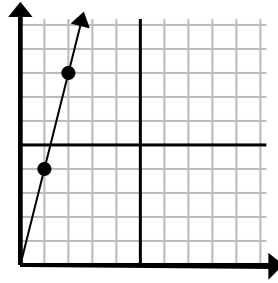
Determina quale scelta rappresenta un punto sulla linea se dovesse continuare.

1)



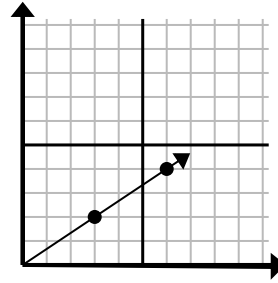
- A. (10 . 4)
- B. (13 . 5)
- C. (12 . 3)
- D. (9 . 3)

2)



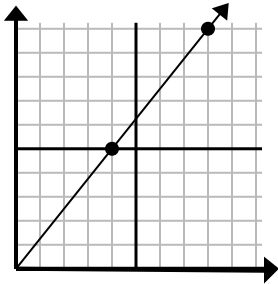
- A. (3 . 9)
- B. (7 . 8)
- C. (5 . 5)
- D. (3 . 12)

3)



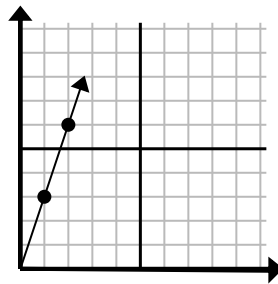
- A. (12 . 8)
- B. (9 . 6)
- C. (18 . 12)
- D. (11 . 3)

4)



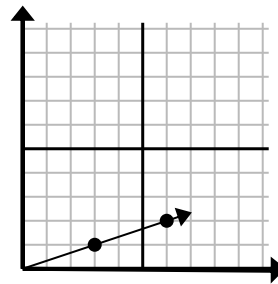
- A. (9 . 9)
- B. (12 . 15)
- C. (12 . 7)
- D. (28 . 35)

5)



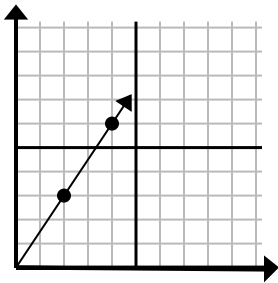
- A. (3 . 9)
- B. (4 . 12)
- C. (3 . 5)
- D. (7 . 4)

6)



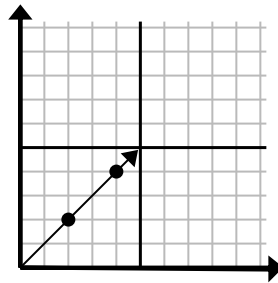
- A. (9 . 3)
- B. (11 . 4)
- C. (11 . 5)
- D. (15 . 5)

7)



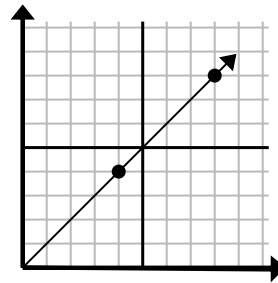
- A. (8 . 7)
- B. (6 . 4)
- C. (6 . 9)
- D. (12 . 18)

8)



- A. (6 . 6)
- B. (8 . 8)
- C. (10 . 10)
- D. (14 . 14)

9)



- A. (24 . 24)
- B. (12 . 12)
- C. (28 . 28)
- D. (20 . 20)

Risposte

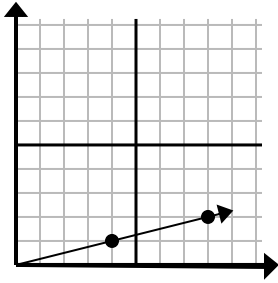
1. **C**
2. **D**
3. **B**
4. **B**
5. **A**
6. **A**
7. **C**
8. **A**
9. **B**



Determina quale scelta rappresenta un punto sulla linea se dovesse continuare.

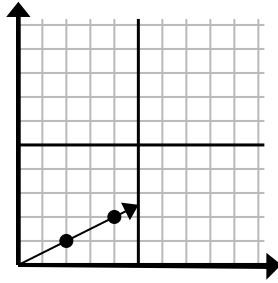
Risposte

1)



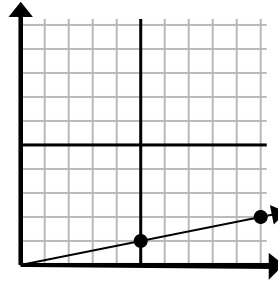
- A. (12 . 3)
- B. (28 . 7)
- C. (20 . 5)
- D. (10 . 2)

2)



- A. (6 . 3)
- B. (10 . 5)
- C. (14 . 7)
- D. (7 . 3)

3)



- A. (14 . 3)
- B. (13 . 5)
- C. (15 . 3)
- D. (35 . 7)

1. _____

2. _____

3. _____

4. _____

5. _____

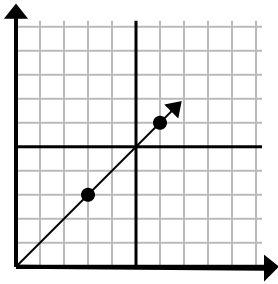
6. _____

7. _____

8. _____

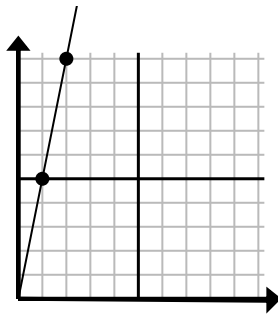
9. _____

4)



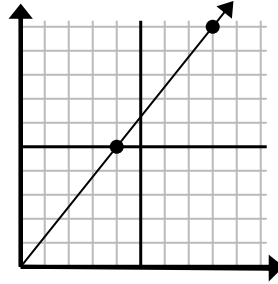
- A. (8 . 7)
- B. (15 . 15)
- C. (9 . 9)
- D. (21 . 21)

5)



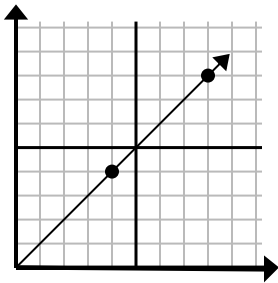
- A. (3 . 15)
- B. (3 . 7)
- C. (7 . 35)
- D. (5 . 25)

6)



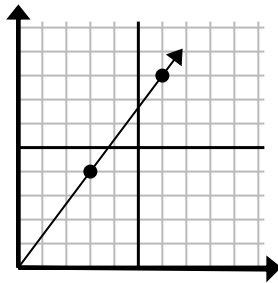
- A. (12 . 10)
- B. (24 . 30)
- C. (13 . 9)
- D. (12 . 15)

7)



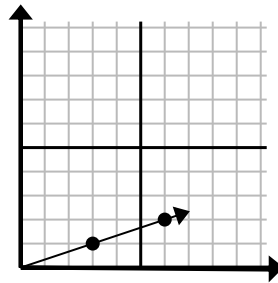
- A. (12 . 8)
- B. (12 . 12)
- C. (13 . 8)
- D. (20 . 20)

8)



- A. (21 . 28)
- B. (8 . 6)
- C. (9 . 12)
- D. (9 . 7)

9)

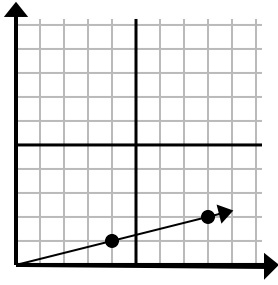


- A. (15 . 5)
- B. (9 . 3)
- C. (10 . 2)
- D. (12 . 4)



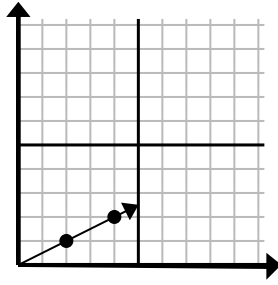
Determina quale scelta rappresenta un punto sulla linea se dovesse continuare.

1)



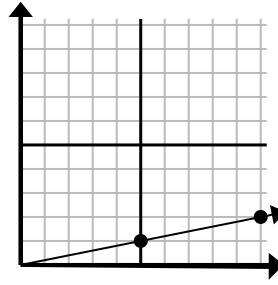
- A. (12 . 3)
 B. (28 . 7)
 C. (20 . 5)
 D. (10 . 2)

2)



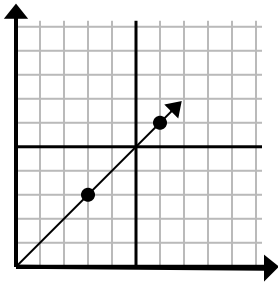
- A. (6 . 3)
 B. (10 . 5)
 C. (14 . 7)
 D. (7 . 3)

3)



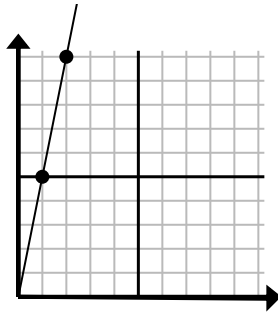
- A. (14 . 3)
 B. (13 . 5)
 C. (15 . 3)
 D. (35 . 7)

4)



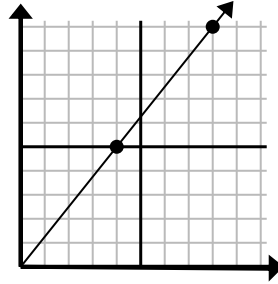
- A. (8 . 7)
 B. (15 . 15)
 C. (9 . 9)
 D. (21 . 21)

5)



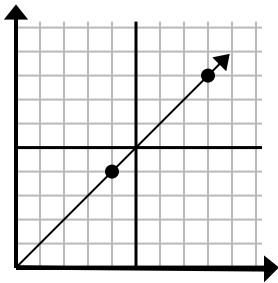
- A. (3 . 15)
 B. (3 . 7)
 C. (7 . 35)
 D. (5 . 25)

6)



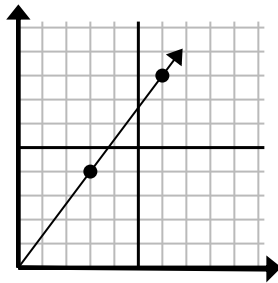
- A. (12 . 10)
 B. (24 . 30)
 C. (13 . 9)
 D. (12 . 15)

7)



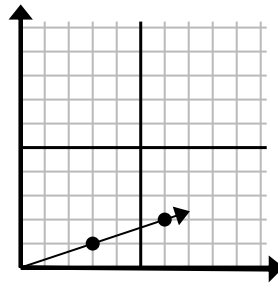
- A. (12 . 8)
 B. (12 . 12)
 C. (13 . 8)
 D. (20 . 20)

8)



- A. (21 . 28)
 B. (8 . 6)
 C. (9 . 12)
 D. (9 . 7)

9)



- A. (15 . 5)
 B. (9 . 3)
 C. (10 . 2)
 D. (12 . 4)

Risposte

1. **A**
 2. **A**
 3. **C**
 4. **C**
 5. **A**
 6. **D**
 7. **B**
 8. **C**
 9. **B**