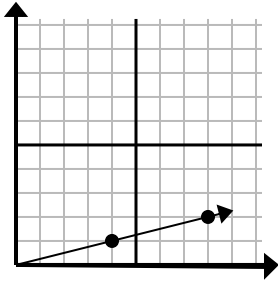




Determina quale scelta rappresenta un punto sulla linea se dovesse continuare.

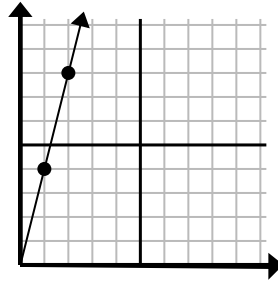
Risposte

1)



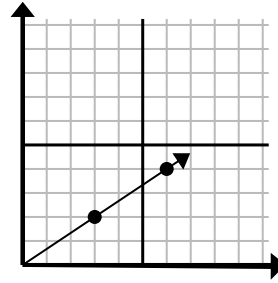
- A. (10 . 4)
- B. (13 . 5)
- C. (12 . 3)
- D. (9 . 3)

2)



- A. (3 . 9)
- B. (7 . 8)
- C. (5 . 5)
- D. (3 . 12)

3)



- A. (12 . 8)
- B. (9 . 6)
- C. (18 . 12)
- D. (11 . 3)

1. _____

2. _____

3. _____

4. _____

5. _____

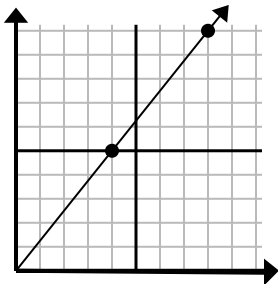
6. _____

7. _____

8. _____

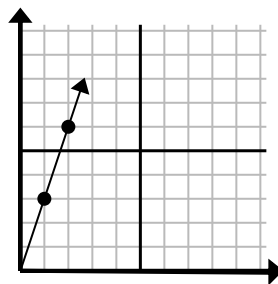
9. _____

4)



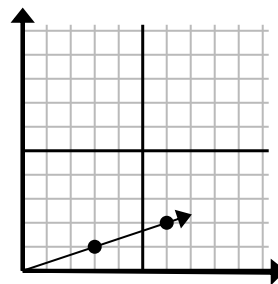
- A. (9 . 9)
- B. (12 . 15)
- C. (12 . 7)
- D. (28 . 35)

5)



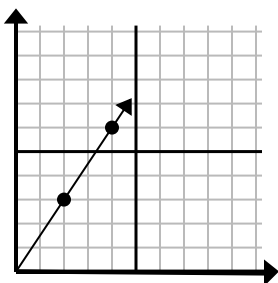
- A. (3 . 9)
- B. (4 . 12)
- C. (3 . 5)
- D. (7 . 4)

6)



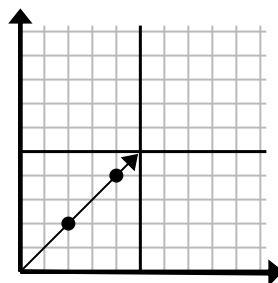
- A. (9 . 3)
- B. (11 . 4)
- C. (11 . 5)
- D. (15 . 5)

7)



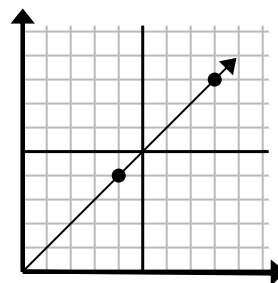
- A. (8 . 7)
- B. (6 . 4)
- C. (6 . 9)
- D. (12 . 18)

8)



- A. (6 . 6)
- B. (8 . 8)
- C. (10 . 10)
- D. (14 . 14)

9)

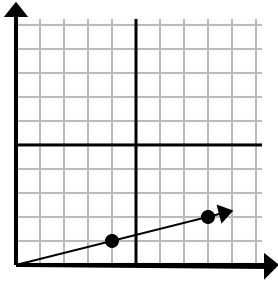


- A. (24 . 24)
- B. (12 . 12)
- C. (28 . 28)
- D. (20 . 20)



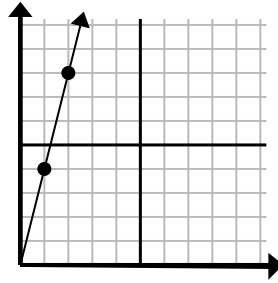
Determina quale scelta rappresenta un punto sulla linea se dovesse continuare.

1)



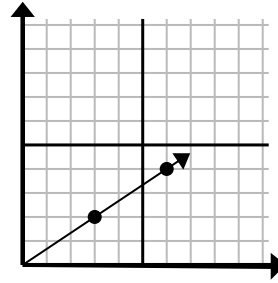
- A. (10 . 4)
- B. (13 . 5)
- C. (12 . 3)
- D. (9 . 3)

2)



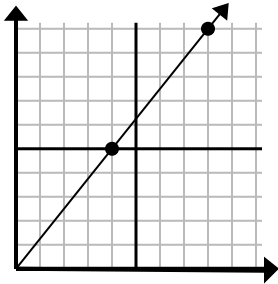
- A. (3 . 9)
- B. (7 . 8)
- C. (5 . 5)
- D. (3 . 12)

3)



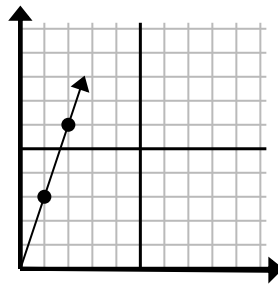
- A. (12 . 8)
- B. (9 . 6)
- C. (18 . 12)
- D. (11 . 3)

4)



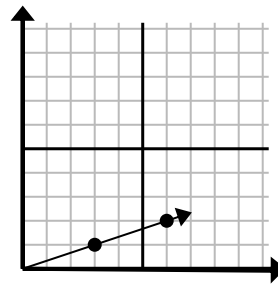
- A. (9 . 9)
- B. (12 . 15)
- C. (12 . 7)
- D. (28 . 35)

5)



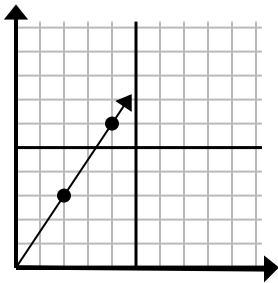
- A. (3 . 9)
- B. (4 . 12)
- C. (3 . 5)
- D. (7 . 4)

6)



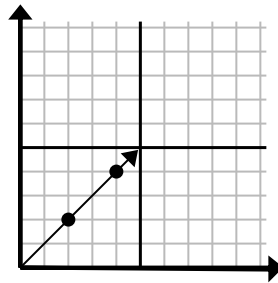
- A. (9 . 3)
- B. (11 . 4)
- C. (11 . 5)
- D. (15 . 5)

7)



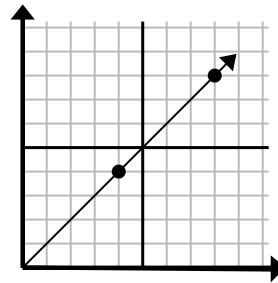
- A. (8 . 7)
- B. (6 . 4)
- C. (6 . 9)
- D. (12 . 18)

8)



- A. (6 . 6)
- B. (8 . 8)
- C. (10 . 10)
- D. (14 . 14)

9)



- A. (24 . 24)
- B. (12 . 12)
- C. (28 . 28)
- D. (20 . 20)

Risposte

1. **C**
2. **D**
3. **B**
4. **B**
5. **A**
6. **A**
7. **C**
8. **A**
9. **B**