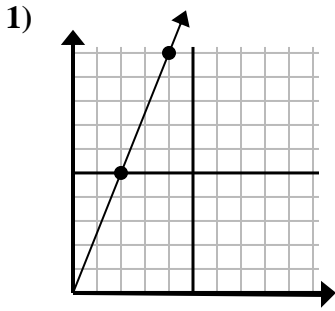


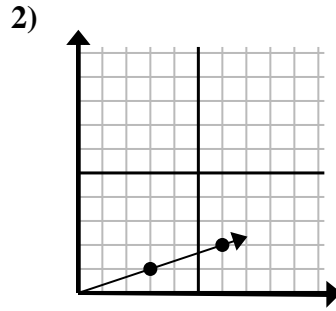


Determina quale scelta rappresenta un punto sulla linea se dovesse continuare.

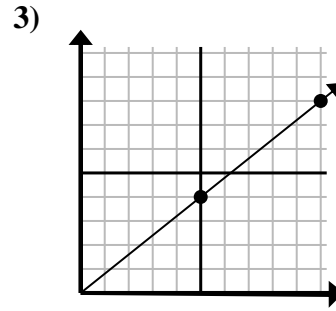
Risposte



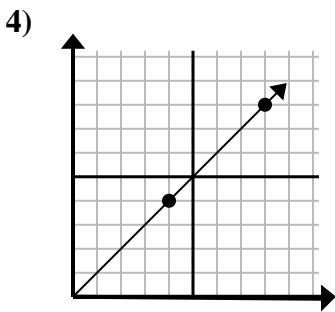
- A. (12 . 30)
- B. (8 . 20)
- C. (8 . 10)
- D. (6 . 15)



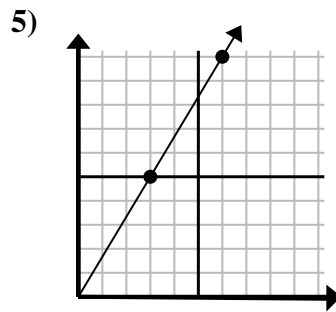
- A. (9 . 3)
- B. (10 . 6)
- C. (15 . 5)
- D. (18 . 6)



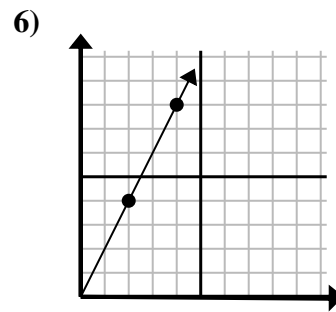
- A. (11 . 9)
- B. (15 . 12)
- C. (20 . 16)
- D. (25 . 20)



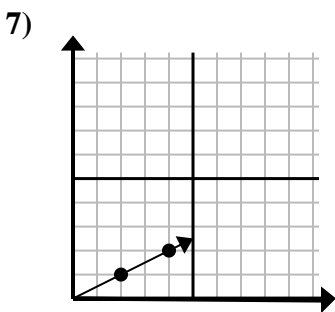
- A. (16 . 16)
- B. (12 . 12)
- C. (13 . 5)
- D. (28 . 28)



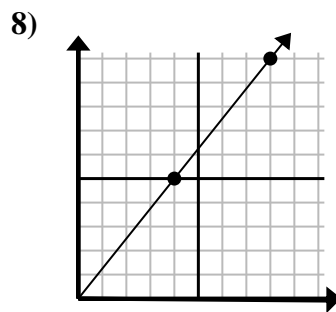
- A. (8 . 10)
- B. (15 . 25)
- C. (7 . 6)
- D. (9 . 15)



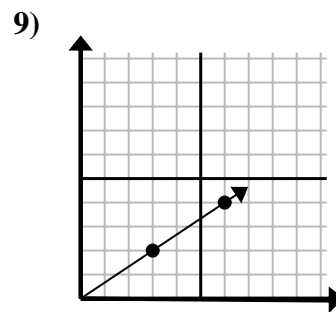
- A. (6 . 5)
- B. (6 . 12)
- C. (12 . 24)
- D. (8 . 16)



- A. (9 . 2)
- B. (6 . 3)
- C. (14 . 7)
- D. (7 . 4)



- A. (9 . 10)
- B. (12 . 15)
- C. (20 . 25)
- D. (24 . 30)



- A. (18 . 12)
- B. (8 . 7)
- C. (11 . 5)
- D. (9 . 6)

1. _____

2. _____

3. _____

4. _____

5. _____

6. _____

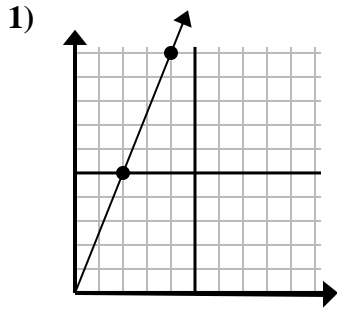
7. _____

8. _____

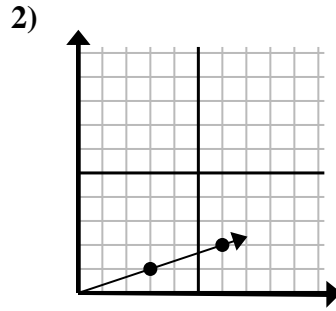
9. _____



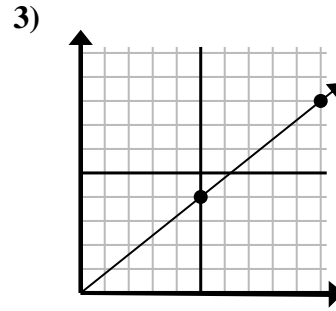
Determina quale scelta rappresenta un punto sulla linea se dovesse continuare.



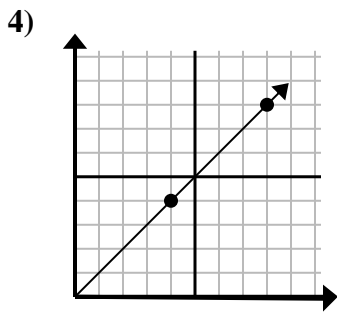
- A. (12 . 30)
 B. (8 . 20)
 C. (8 . 10)
 D. (6 . 15)



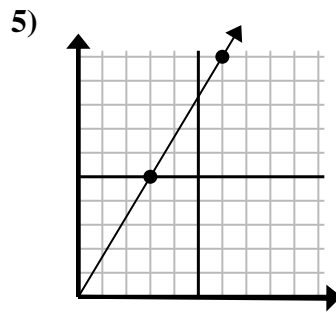
- A. (9 . 3)
 B. (10 . 6)
 C. (15 . 5)
 D. (18 . 6)



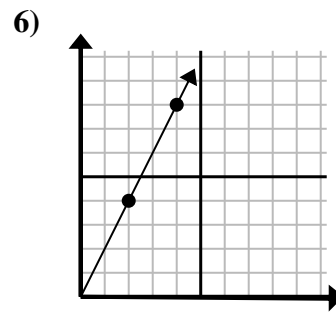
- A. (11 . 9)
 B. (15 . 12)
 C. (20 . 16)
 D. (25 . 20)



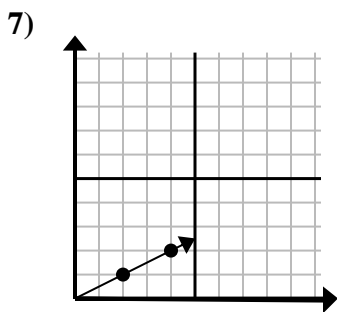
- A. (16 . 16)
 B. (12 . 12)
 C. (13 . 5)
 D. (28 . 28)



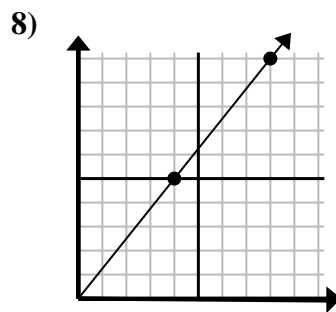
- A. (8 . 10)
 B. (15 . 25)
 C. (7 . 6)
 D. (9 . 15)



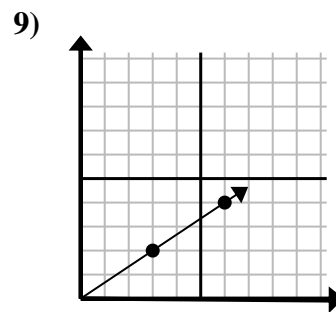
- A. (6 . 5)
 B. (6 . 12)
 C. (12 . 24)
 D. (8 . 16)



- A. (9 . 2)
 B. (6 . 3)
 C. (14 . 7)
 D. (7 . 4)



- A. (9 . 10)
 B. (12 . 15)
 C. (20 . 25)
 D. (24 . 30)



- A. (18 . 12)
 B. (8 . 7)
 C. (11 . 5)
 D. (9 . 6)

Risposte

1. **D**
 2. **A**
 3. **B**
 4. **B**
 5. **D**
 6. **B**
 7. **B**
 8. **B**
 9. **D**