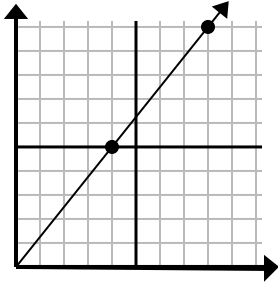




Determina quale scelta rappresenta un punto sulla linea se dovesse continuare.

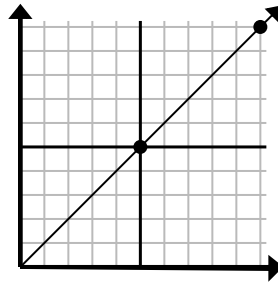
Risposte

1)



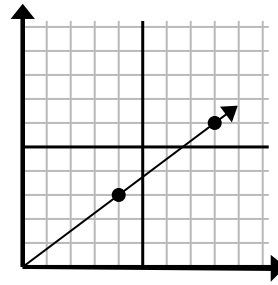
- A. (20 . 25)
- B. (12 . 15)
- C. (24 . 30)
- D. (11 . 10)

2)



- A. (15 . 15)
- B. (12 . 10)
- C. (14 . 6)
- D. (25 . 25)

3)



- A. (28 . 21)
- B. (12 . 9)
- C. (24 . 18)
- D. (16 . 12)

1. _____

2. _____

3. _____

4. _____

5. _____

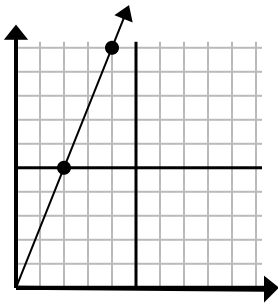
6. _____

7. _____

8. _____

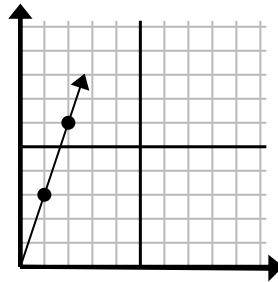
9. _____

4)



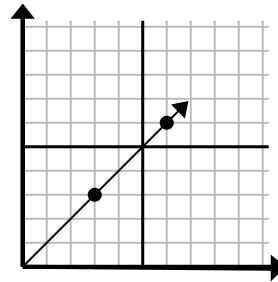
- A. (6 . 15)
- B. (5 . 9)
- C. (8 . 20)
- D. (12 . 30)

5)



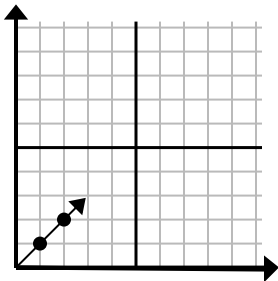
- A. (4 . 12)
- B. (3 . 9)
- C. (4 . 6)
- D. (7 . 6)

6)



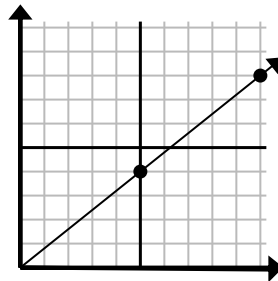
- A. (12 . 12)
- B. (9 . 9)
- C. (18 . 18)
- D. (9 . 5)

7)



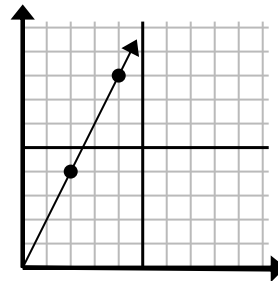
- A. (5 . 6)
- B. (3 . 3)
- C. (5 . 5)
- D. (7 . 3)

8)



- A. (15 . 12)
- B. (35 . 28)
- C. (14 . 8)
- D. (14 . 5)

9)

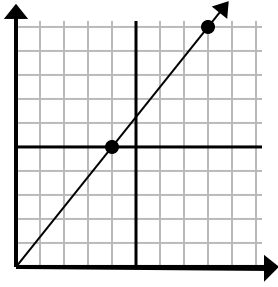


- A. (6 . 12)
- B. (7 . 9)
- C. (10 . 20)
- D. (8 . 16)



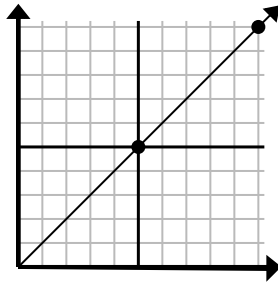
Determina quale scelta rappresenta un punto sulla linea se dovesse continuare.

1)



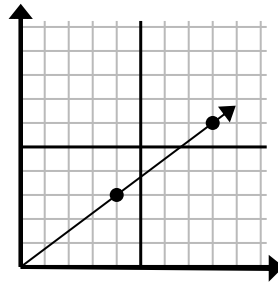
- A. (20 . 25)
 B. (12 . 15)
 C. (24 . 30)
 D. (11 . 10)

2)



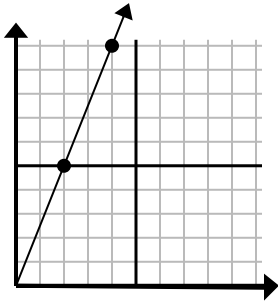
- A. (15 . 15)
 B. (12 . 10)
 C. (14 . 6)
 D. (25 . 25)

3)



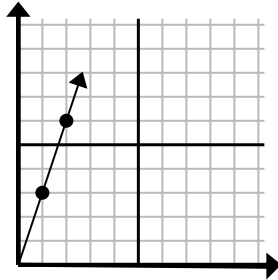
- A. (28 . 21)
 B. (12 . 9)
 C. (24 . 18)
 D. (16 . 12)

4)



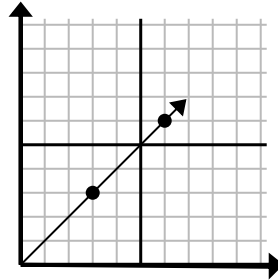
- A. (6 . 15)
 B. (5 . 9)
 C. (8 . 20)
 D. (12 . 30)

5)



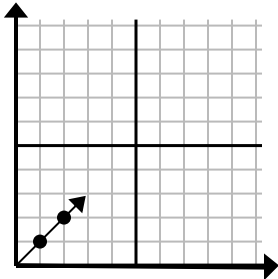
- A. (4 . 12)
 B. (3 . 9)
 C. (4 . 6)
 D. (7 . 6)

6)



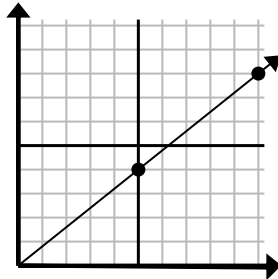
- A. (12 . 12)
 B. (9 . 9)
 C. (18 . 18)
 D. (9 . 5)

7)



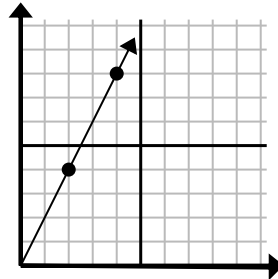
- A. (5 . 6)
 B. (3 . 3)
 C. (5 . 5)
 D. (7 . 3)

8)



- A. (15 . 12)
 B. (35 . 28)
 C. (14 . 8)
 D. (14 . 5)

9)



- A. (6 . 12)
 B. (7 . 9)
 C. (10 . 20)
 D. (8 . 16)

Risposte

1. **B**
 2. **A**
 3. **B**
 4. **A**
 5. **B**
 6. **B**
 7. **B**
 8. **A**
 9. **A**