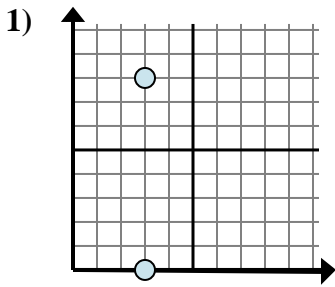


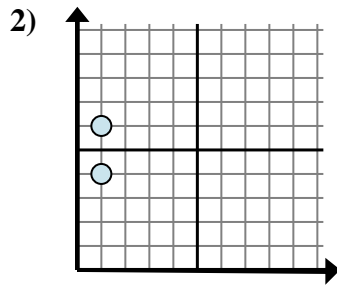


Determina quale espressione mostra meglio la distanza tra i due punti.

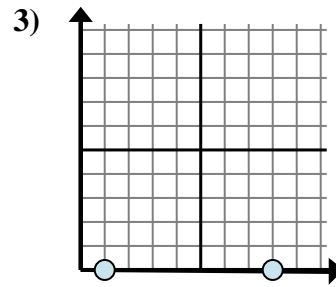
Risposte



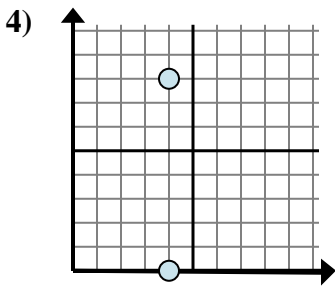
- A. $3 - 3$
- B. $8 - 0$
- C. $8 - 3$
- D. $3 - 3$



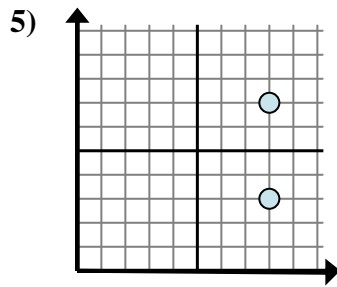
- A. $6 - 4$
- B. $1 - 1$
- C. $1 - 1$
- D. $6 - 1$



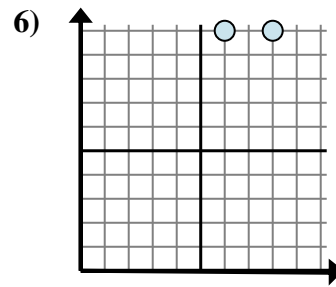
- A. $8 - 1$
- B. $0 - 0$
- C. $1 - 8$
- D. $0 - 0$



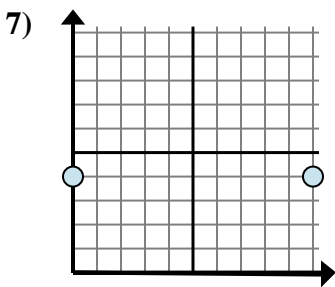
- A. $4 - 4$
- B. $8 - 0$
- C. $8 - 4$
- D. $4 - 8$



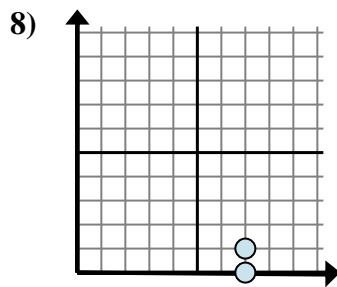
- A. $8 - 7$
- B. $3 - 7$
- C. $7 - 3$
- D. $8 - 7$



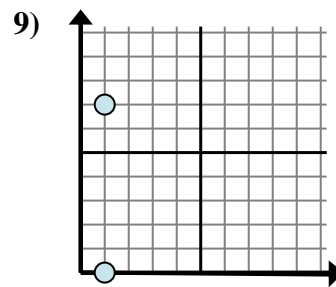
- A. $10 - 10$
- B. $6 - 10$
- C. $8 - 6$
- D. $8 - 10$



- A. $10 - 0$
- B. $4 - 4$
- C. $4 - 4$
- D. $0 - 4$



- A. $0 - 7$
- B. $1 - 7$
- C. $7 - 1$
- D. $1 - 0$



- A. $7 - 0$
- B. $1 - 0$
- C. $1 - 0$
- D. $7 - 1$

1. _____

2. _____

3. _____

4. _____

5. _____

6. _____

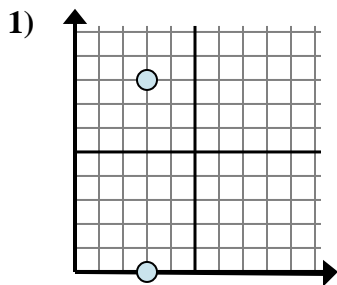
7. _____

8. _____

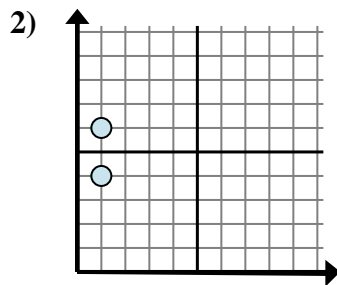
9. _____



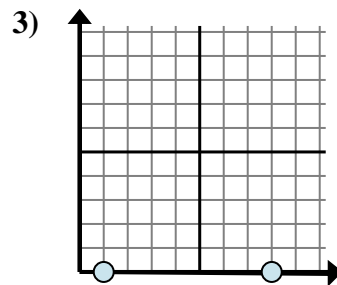
Determina quale espressione mostra meglio la distanza tra i due punti.



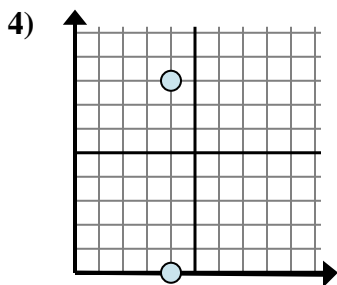
- A. $3 - 3$
 B. $8 - 0$
 C. $8 - 3$
 D. $3 - 3$



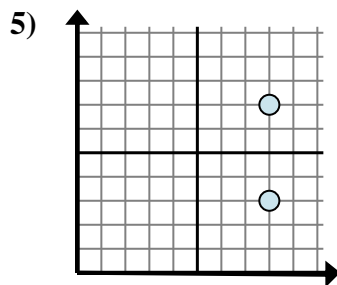
- A. $6 - 4$
 B. $1 - 1$
 C. $1 - 1$
 D. $6 - 1$



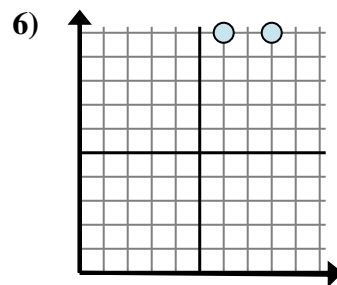
- A. $8 - 1$
 B. $0 - 0$
 C. $1 - 8$
 D. $0 - 0$



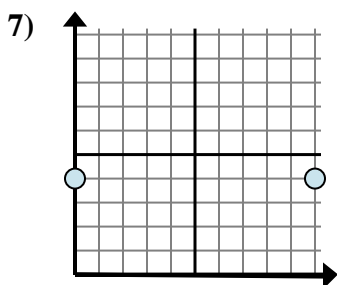
- A. $4 - 4$
 B. $8 - 0$
 C. $8 - 4$
 D. $4 - 8$



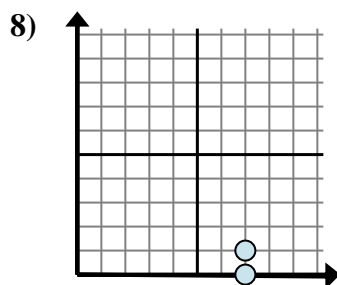
- A. $8 - 7$
 B. $3 - 7$
 C. $7 - 3$
 D. $8 - 7$



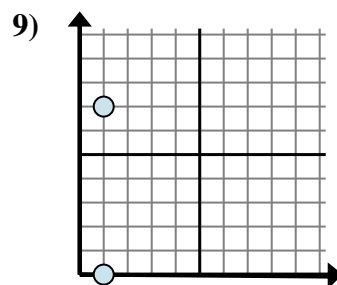
- A. $10 - 10$
 B. $6 - 10$
 C. $8 - 6$
 D. $8 - 10$



- A. $10 - 0$
 B. $4 - 4$
 C. $4 - 4$
 D. $0 - 4$



- A. $0 - 7$
 B. $1 - 7$
 C. $7 - 1$
 D. $1 - 0$



- A. $7 - 0$
 B. $1 - 0$
 C. $1 - 0$
 D. $7 - 1$

Risposte1. **B**2. **A**3. **A**4. **B**5. **C**6. **C**7. **A**8. **D**9. **A**