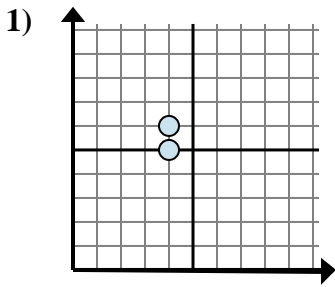


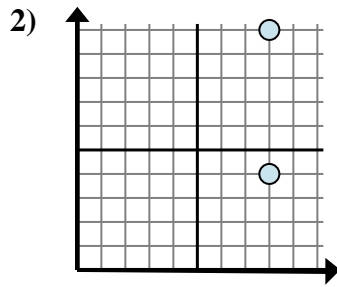


Determina quale espressione mostra meglio la distanza tra i due punti.

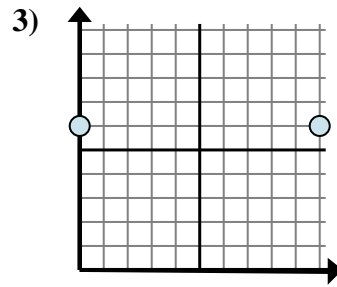
Risposte



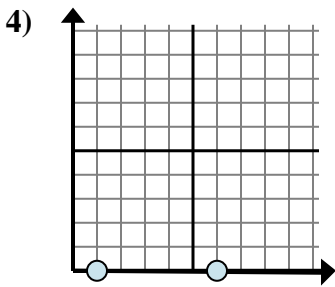
- A. $6 - 5$
- B. $4 - 4$
- C. $5 - 6$
- D. $6 - 4$



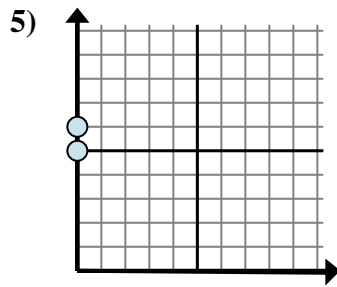
- A. $4 - 10$
- B. $8 - 8$
- C. $8 - 10$
- D. $10 - 4$



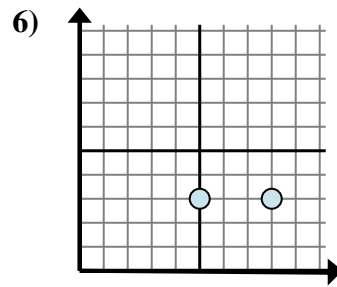
- A. $10 - 0$
- B. $0 - 10$
- C. $6 - 0$
- D. $6 - 0$



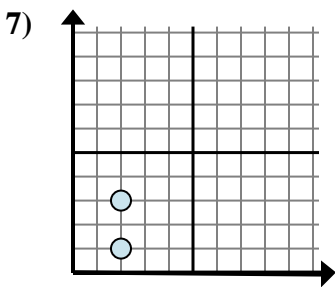
- A. $0 - 0$
- B. $0 - 0$
- C. $0 - 1$
- D. $6 - 1$



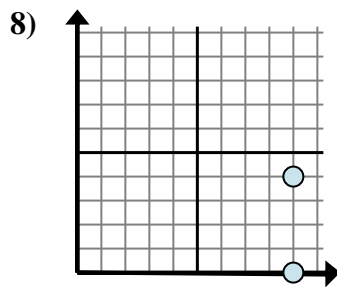
- A. $0 - 6$
- B. $0 - 0$
- C. $6 - 5$
- D. $6 - 0$



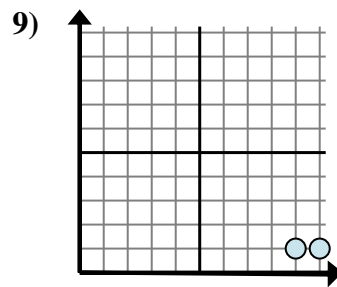
- A. $3 - 8$
- B. $8 - 3$
- C. $3 - 3$
- D. $8 - 5$



- A. $2 - 2$
- B. $3 - 2$
- C. $3 - 1$
- D. $2 - 3$



- A. $0 - 4$
- B. $9 - 4$
- C. $4 - 0$
- D. $9 - 9$



- A. $1 - 9$
- B. $10 - 9$
- C. $1 - 9$
- D. $9 - 1$

1. _____

2. _____

3. _____

4. _____

5. _____

6. _____

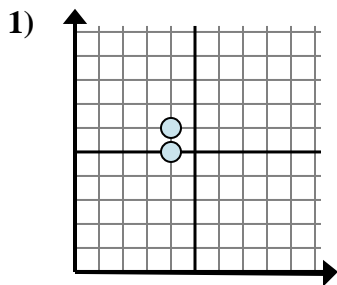
7. _____

8. _____

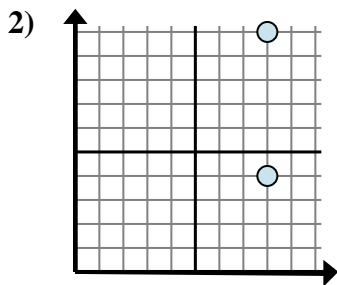
9. _____



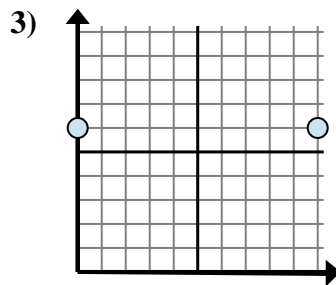
Determina quale espressione mostra meglio la distanza tra i due punti.



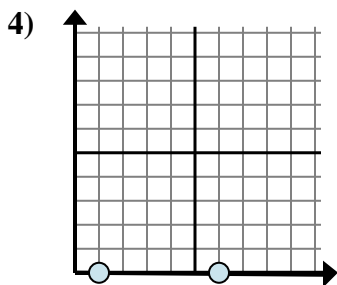
- A. $6 - 5$
- B. $4 - 4$
- C. $5 - 6$
- D. $6 - 4$



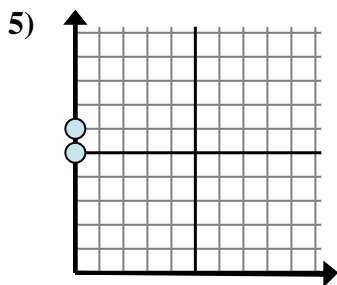
- A. $4 - 10$
- B. $8 - 8$
- C. $8 - 10$
- D. $10 - 4$



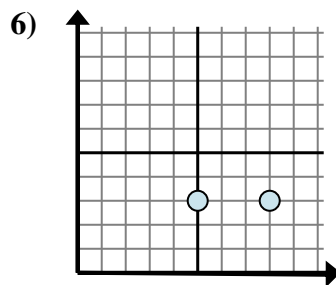
- A. $10 - 0$
- B. $0 - 10$
- C. $6 - 0$
- D. $6 - 0$



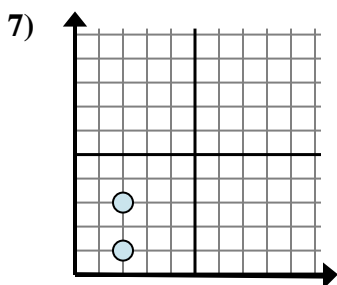
- A. $0 - 0$
- B. $0 - 0$
- C. $0 - 1$
- D. $6 - 1$



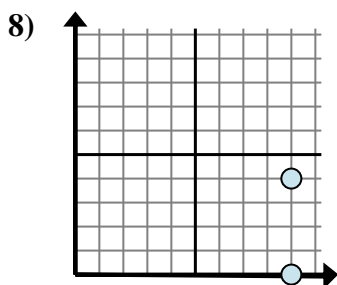
- A. $0 - 6$
- B. $0 - 0$
- C. $6 - 5$
- D. $6 - 0$



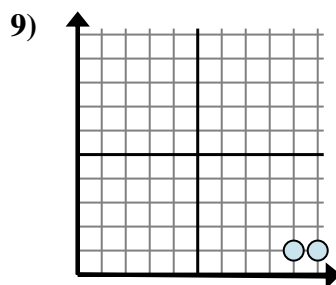
- A. $3 - 8$
- B. $8 - 3$
- C. $3 - 3$
- D. $8 - 5$



- A. $2 - 2$
- B. $3 - 2$
- C. $3 - 1$
- D. $2 - 3$



- A. $0 - 4$
- B. $9 - 4$
- C. $4 - 0$
- D. $9 - 9$



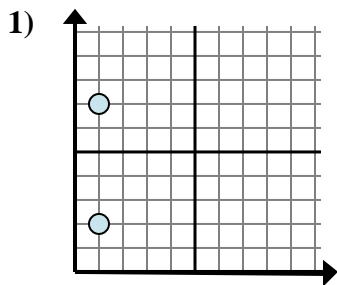
- A. $1 - 9$
- B. $10 - 9$
- C. $1 - 9$
- D. $9 - 1$

Risposte

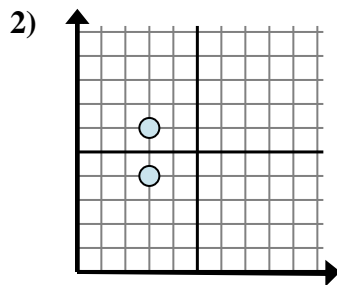
- 1. **A**
- 2. **D**
- 3. **A**
- 4. **D**
- 5. **C**
- 6. **D**
- 7. **C**
- 8. **C**
- 9. **B**



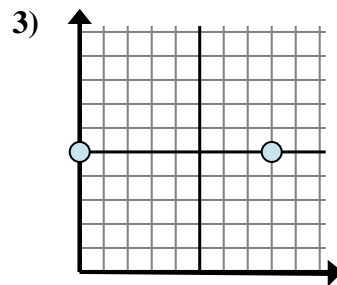
Determina quale espressione mostra meglio la distanza tra i due punti.

Risposte

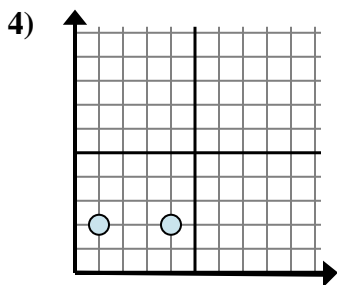
- A. $1 - 2$
 B. $7 - 2$
 C. $2 - 1$
 D. $2 - 7$



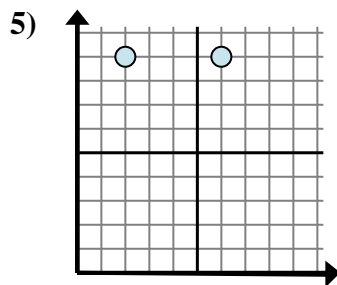
- A. $6 - 3$
 B. $3 - 6$
 C. $6 - 4$
 D. $3 - 3$



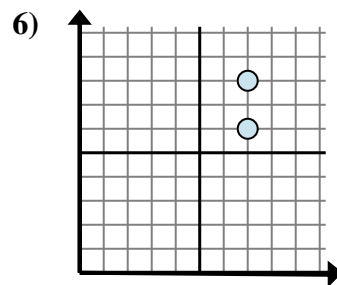
- A. $8 - 0$
 B. $0 - 5$
 C. $5 - 5$
 D. $0 - 8$



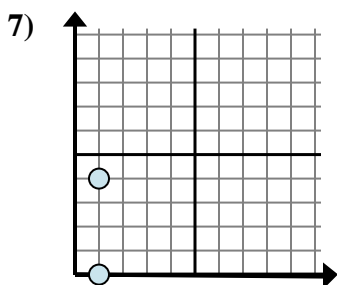
- A. $2 - 4$
 B. $4 - 1$
 C. $2 - 2$
 D. $1 - 4$



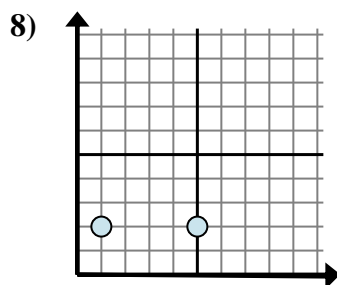
- A. $9 - 9$
 B. $2 - 6$
 C. $9 - 9$
 D. $6 - 2$



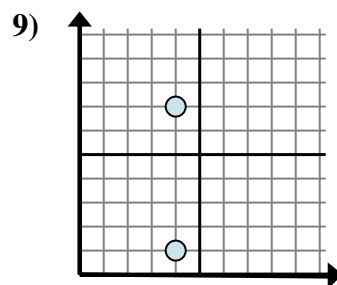
- A. $7 - 7$
 B. $6 - 8$
 C. $7 - 7$
 D. $8 - 6$



- A. $1 - 1$
 B. $4 - 1$
 C. $1 - 1$
 D. $4 - 0$



- A. $1 - 5$
 B. $5 - 1$
 C. $1 - 2$
 D. $2 - 1$

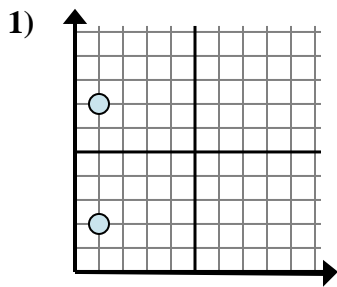


- A. $4 - 4$
 B. $7 - 4$
 C. $4 - 1$
 D. $7 - 1$

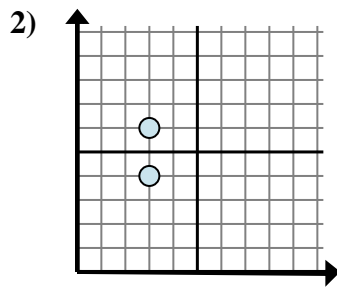
1. _____
 2. _____
 3. _____
 4. _____
 5. _____
 6. _____
 7. _____
 8. _____
 9. _____



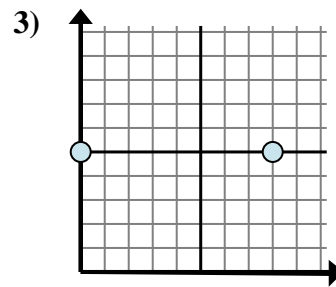
Determina quale espressione mostra meglio la distanza tra i due punti.



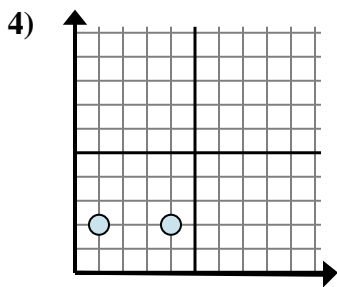
- A. $1 - 2$
 B. $7 - 2$
 C. $2 - 1$
 D. $2 - 7$



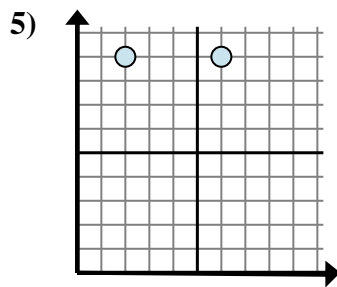
- A. $6 - 3$
 B. $3 - 6$
 C. $6 - 4$
 D. $3 - 3$



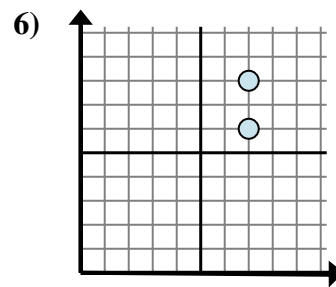
- A. $8 - 0$
 B. $0 - 5$
 C. $5 - 5$
 D. $0 - 8$



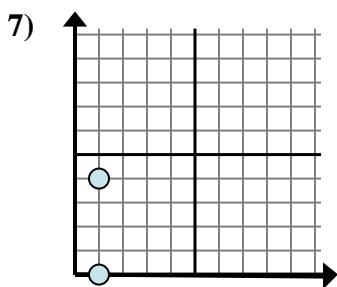
- A. $2 - 4$
 B. $4 - 1$
 C. $2 - 2$
 D. $1 - 4$



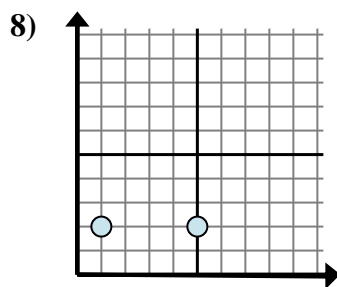
- A. $9 - 9$
 B. $2 - 6$
 C. $9 - 9$
 D. $6 - 2$



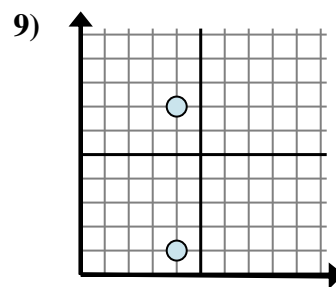
- A. $7 - 7$
 B. $6 - 8$
 C. $7 - 7$
 D. $8 - 6$



- A. $1 - 1$
 B. $4 - 1$
 C. $1 - 1$
 D. $4 - 0$



- A. $1 - 5$
 B. $5 - 1$
 C. $1 - 2$
 D. $2 - 1$



- A. $4 - 4$
 B. $7 - 4$
 C. $4 - 1$
 D. $7 - 1$

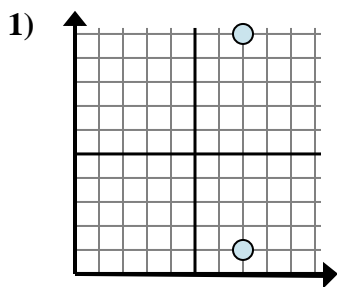
Risposte

1. **B**
 2. **C**
 3. **A**
 4. **B**
 5. **D**
 6. **D**
 7. **D**
 8. **B**
 9. **D**

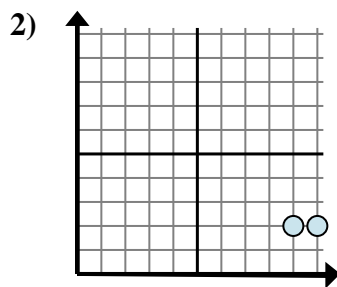


Determina quale espressione mostra meglio la distanza tra i due punti.

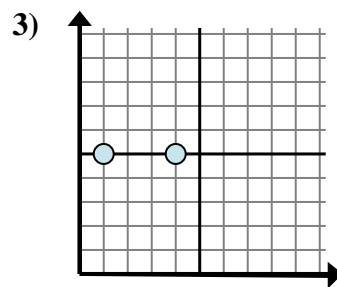
Risposte



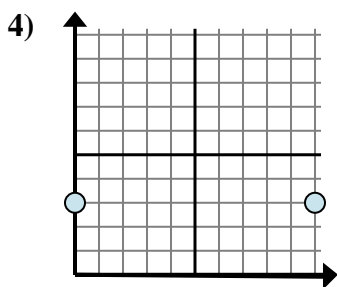
- A. $7 - 1$
- B. $10 - 7$
- C. $7 - 1$
- D. $10 - 1$



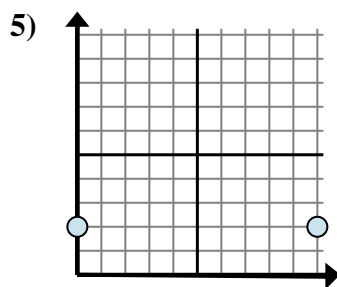
- A. $10 - 9$
- B. $2 - 2$
- C. $2 - 2$
- D. $9 - 2$



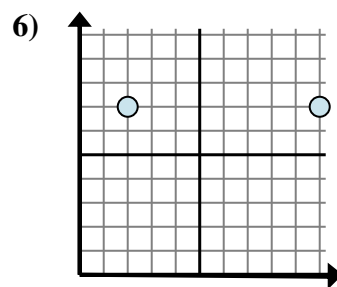
- A. $4 - 1$
- B. $1 - 5$
- C. $5 - 1$
- D. $4 - 5$



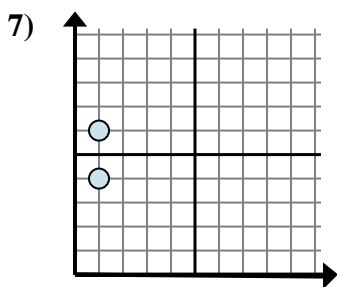
- A. $10 - 3$
- B. $10 - 0$
- C. $3 - 0$
- D. $3 - 3$



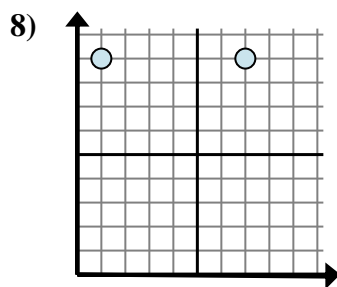
- A. $2 - 2$
- B. $10 - 2$
- C. $2 - 0$
- D. $10 - 0$



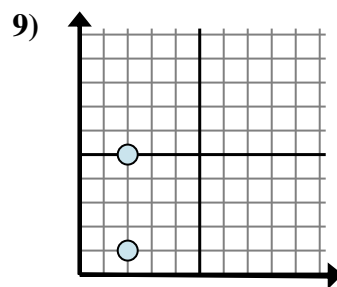
- A. $10 - 2$
- B. $7 - 2$
- C. $2 - 10$
- D. $10 - 7$



- A. $1 - 4$
- B. $6 - 1$
- C. $1 - 4$
- D. $6 - 4$



- A. $1 - 9$
- B. $7 - 1$
- C. $1 - 7$
- D. $7 - 9$



- A. $5 - 1$
- B. $2 - 2$
- C. $5 - 2$
- D. $2 - 1$

1. _____

2. _____

3. _____

4. _____

5. _____

6. _____

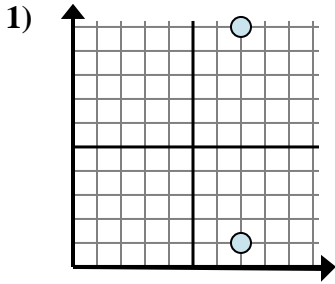
7. _____

8. _____

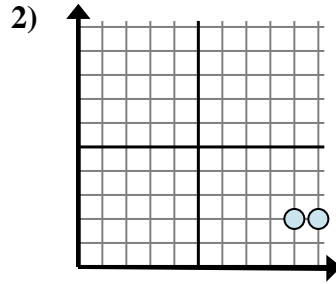
9. _____



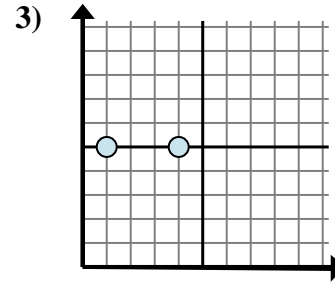
Determina quale espressione mostra meglio la distanza tra i due punti.



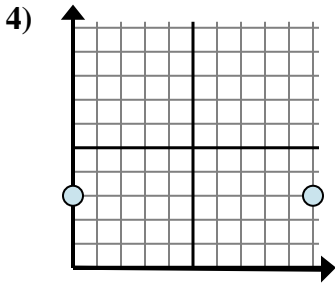
- A. $7 - 1$
 B. $10 - 7$
 C. $7 - 1$
 D. $10 - 1$



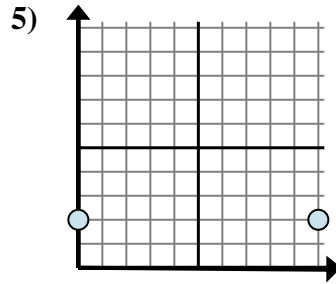
- A. $10 - 9$
 B. $2 - 2$
 C. $2 - 2$
 D. $9 - 2$



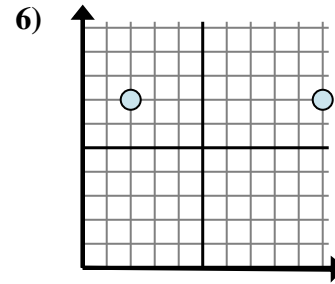
- A. $4 - 1$
 B. $1 - 5$
 C. $5 - 1$
 D. $4 - 5$



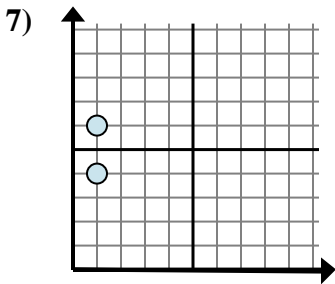
- A. $10 - 3$
 B. $10 - 0$
 C. $3 - 0$
 D. $3 - 3$



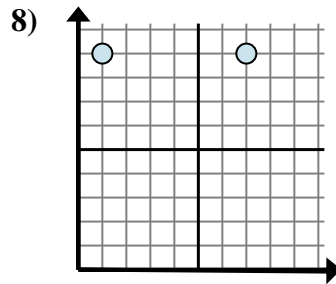
- A. $2 - 2$
 B. $10 - 2$
 C. $2 - 0$
 D. $10 - 0$



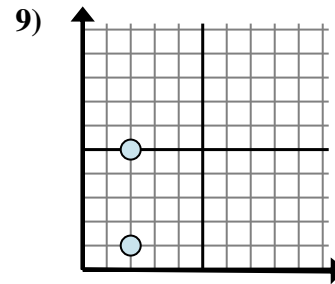
- A. $10 - 2$
 B. $7 - 2$
 C. $2 - 10$
 D. $10 - 7$



- A. $1 - 4$
 B. $6 - 1$
 C. $1 - 4$
 D. $6 - 4$



- A. $1 - 9$
 B. $7 - 1$
 C. $1 - 7$
 D. $7 - 9$



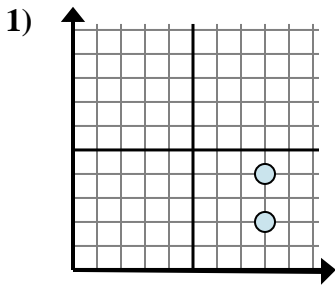
- A. $5 - 1$
 B. $2 - 2$
 C. $5 - 2$
 D. $2 - 1$

Risposte

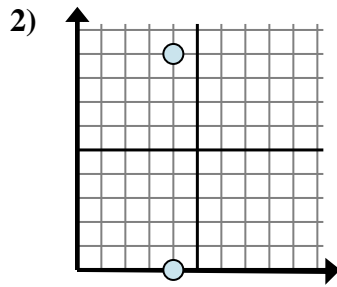
1. **D**
 2. **A**
 3. **A**
 4. **B**
 5. **D**
 6. **A**
 7. **D**
 8. **B**
 9. **A**



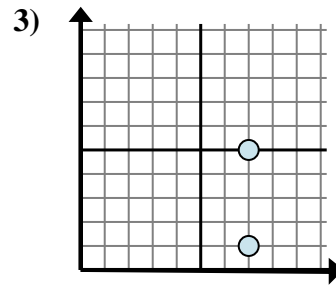
Determina quale espressione mostra meglio la distanza tra i due punti.

Risposte

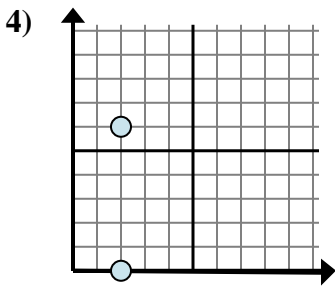
- A. $8 - 8$
 B. $4 - 2$
 C. $4 - 8$
 D. $8 - 4$



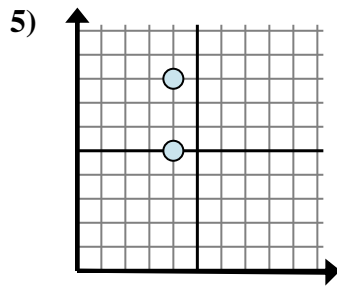
- A. $0 - 4$
 B. $4 - 4$
 C. $9 - 0$
 D. $4 - 4$



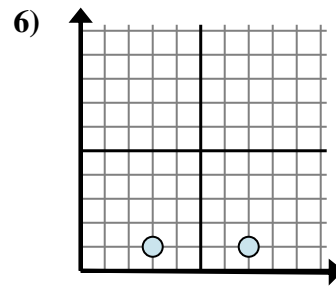
- A. $1 - 7$
 B. $1 - 5$
 C. $5 - 7$
 D. $5 - 1$



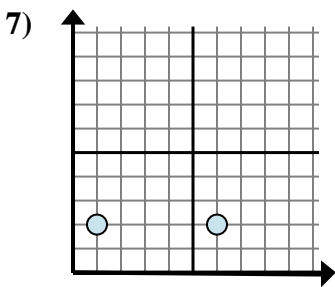
- A. $2 - 0$
 B. $6 - 0$
 C. $6 - 2$
 D. $2 - 2$



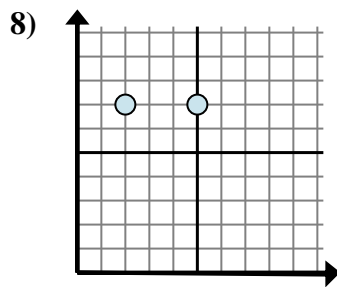
- A. $5 - 4$
 B. $8 - 5$
 C. $4 - 4$
 D. $5 - 8$



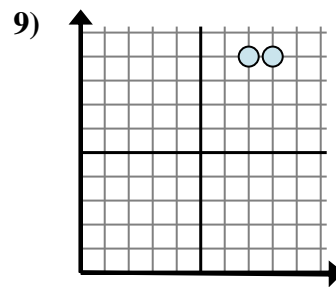
- A. $7 - 1$
 B. $7 - 3$
 C. $1 - 3$
 D. $3 - 1$



- A. $2 - 2$
 B. $2 - 6$
 C. $6 - 1$
 D. $1 - 2$



- A. $5 - 7$
 B. $5 - 2$
 C. $2 - 7$
 D. $7 - 7$

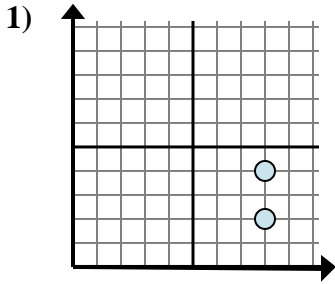


- A. $9 - 7$
 B. $8 - 7$
 C. $9 - 9$
 D. $7 - 8$

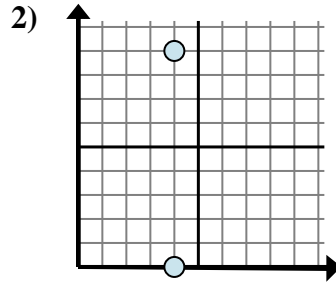
1. _____
 2. _____
 3. _____
 4. _____
 5. _____
 6. _____
 7. _____
 8. _____
 9. _____



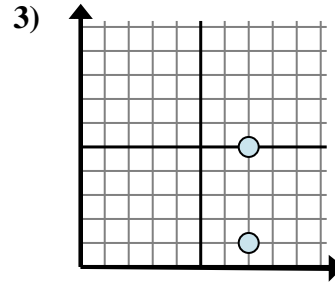
Determina quale espressione mostra meglio la distanza tra i due punti.



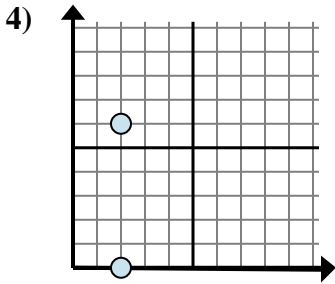
- A. $8 - 8$
 B. $4 - 2$
 C. $4 - 8$
 D. $8 - 4$



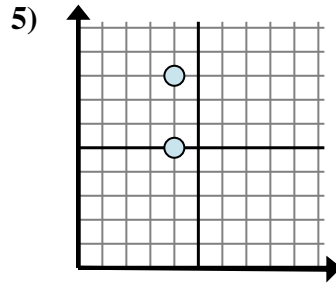
- A. $0 - 4$
 B. $4 - 4$
 C. $9 - 0$
 D. $4 - 4$



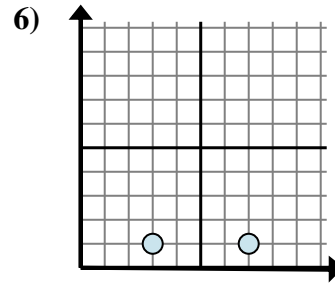
- A. $1 - 7$
 B. $1 - 5$
 C. $5 - 7$
 D. $5 - 1$



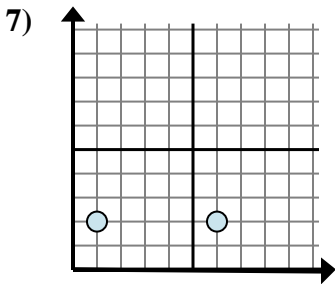
- A. $2 - 0$
 B. $6 - 0$
 C. $6 - 2$
 D. $2 - 2$



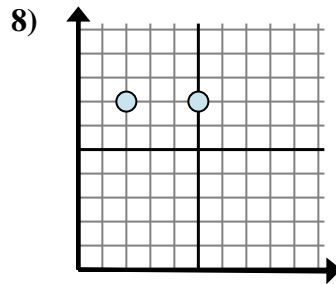
- A. $5 - 4$
 B. $8 - 5$
 C. $4 - 4$
 D. $5 - 8$



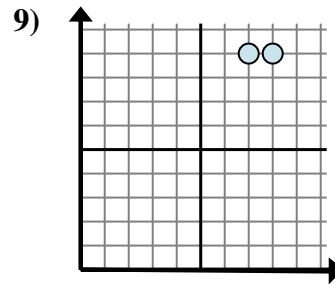
- A. $7 - 1$
 B. $7 - 3$
 C. $1 - 3$
 D. $3 - 1$



- A. $2 - 2$
 B. $2 - 6$
 C. $6 - 1$
 D. $1 - 2$



- A. $5 - 7$
 B. $5 - 2$
 C. $2 - 7$
 D. $7 - 7$



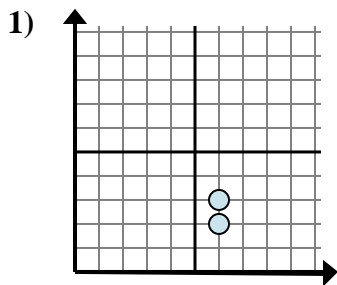
- A. $9 - 7$
 B. $8 - 7$
 C. $9 - 9$
 D. $7 - 8$

Risposte

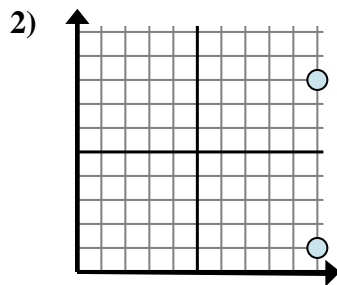
1. **B**
 2. **C**
 3. **D**
 4. **B**
 5. **B**
 6. **B**
 7. **C**
 8. **B**
 9. **B**



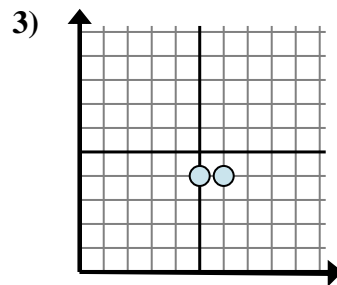
Determina quale espressione mostra meglio la distanza tra i due punti.

Risposte

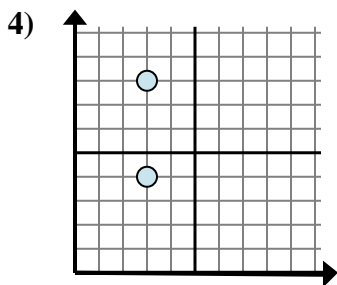
- A. $3 - 2$
 B. $6 - 6$
 C. $3 - 6$
 D. $2 - 3$



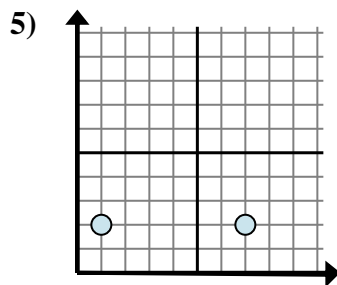
- A. $10 - 10$
 B. $10 - 8$
 C. $8 - 10$
 D. $8 - 1$



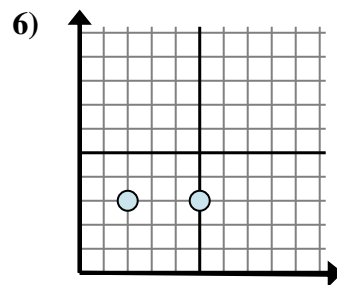
- A. $6 - 5$
 B. $4 - 4$
 C. $5 - 4$
 D. $6 - 4$



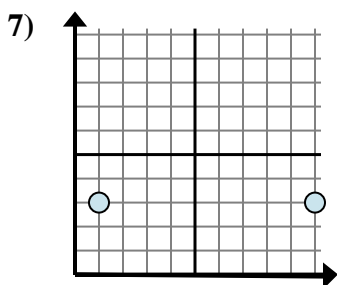
- A. $3 - 3$
 B. $3 - 4$
 C. $8 - 4$
 D. $4 - 8$



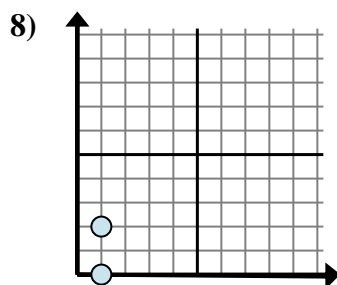
- A. $1 - 2$
 B. $2 - 2$
 C. $7 - 1$
 D. $2 - 2$



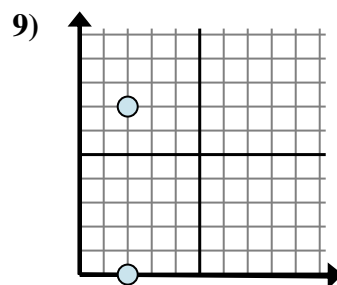
- A. $3 - 5$
 B. $2 - 5$
 C. $5 - 2$
 D. $3 - 5$



- A. $10 - 1$
 B. $3 - 3$
 C. $1 - 3$
 D. $3 - 10$



- A. $2 - 0$
 B. $1 - 0$
 C. $1 - 1$
 D. $2 - 1$

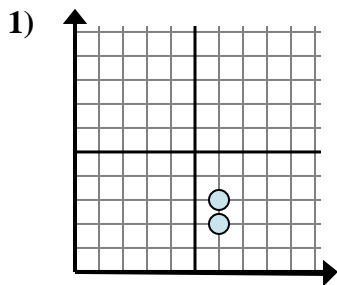


- A. $2 - 2$
 B. $0 - 2$
 C. $7 - 0$
 D. $2 - 7$

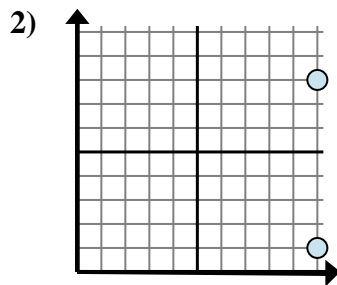
1. _____
 2. _____
 3. _____
 4. _____
 5. _____
 6. _____
 7. _____
 8. _____
 9. _____



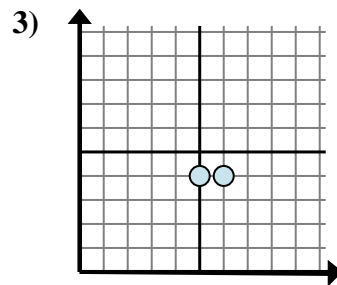
Determina quale espressione mostra meglio la distanza tra i due punti.



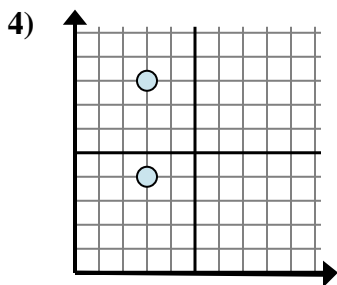
- A. $3 - 2$
 B. $6 - 6$
 C. $3 - 6$
 D. $2 - 3$



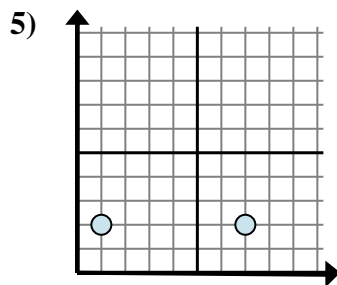
- A. $10 - 10$
 B. $10 - 8$
 C. $8 - 10$
 D. $8 - 1$



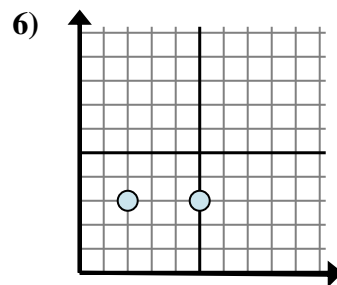
- A. $6 - 5$
 B. $4 - 4$
 C. $5 - 4$
 D. $6 - 4$



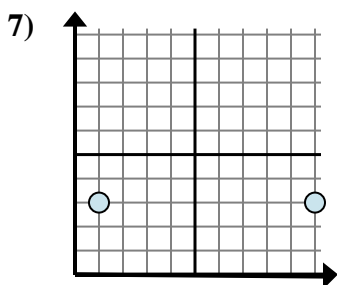
- A. $3 - 3$
 B. $3 - 4$
 C. $8 - 4$
 D. $4 - 8$



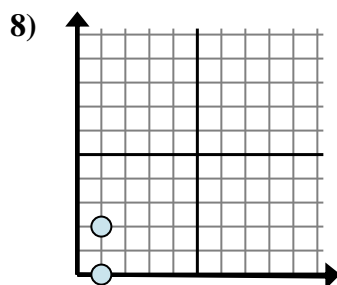
- A. $1 - 2$
 B. $2 - 2$
 C. $7 - 1$
 D. $2 - 2$



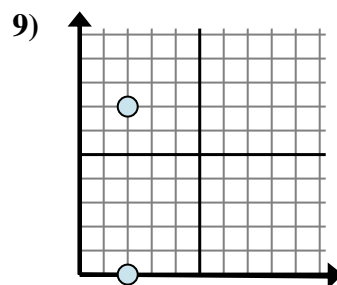
- A. $3 - 5$
 B. $2 - 5$
 C. $5 - 2$
 D. $3 - 5$



- A. $10 - 1$
 B. $3 - 3$
 C. $1 - 3$
 D. $3 - 10$



- A. $2 - 0$
 B. $1 - 0$
 C. $1 - 1$
 D. $2 - 1$



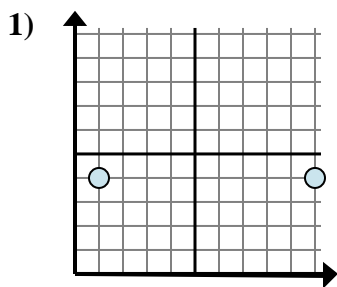
- A. $2 - 2$
 B. $0 - 2$
 C. $7 - 0$
 D. $2 - 7$

Risposte1. **A** 2. **D** 3. **A** 4. **C** 5. **C** 6. **C** 7. **A** 8. **A** 9. **C**

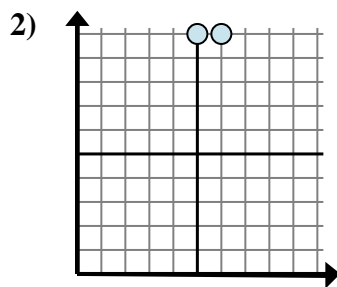


Determina quale espressione mostra meglio la distanza tra i due punti.

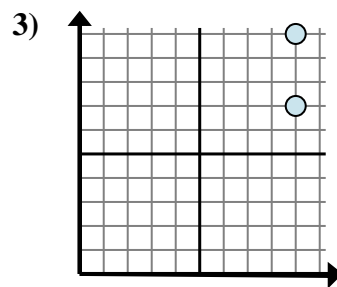
Risposte



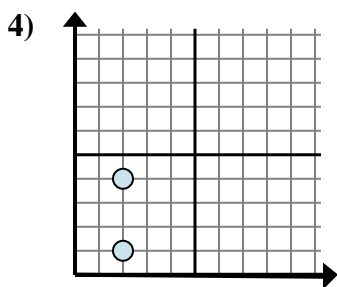
- A. $4 - 4$
- B. $4 - 4$
- C. $4 - 10$
- D. $10 - 1$



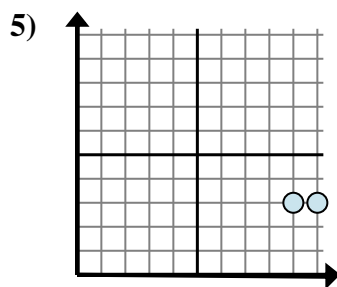
- A. $6 - 10$
- B. $5 - 10$
- C. $6 - 5$
- D. $10 - 5$



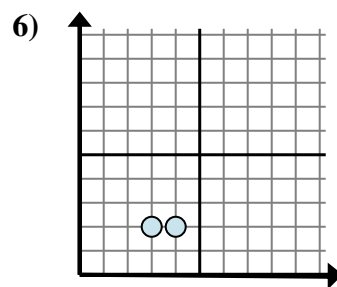
- A. $10 - 7$
- B. $9 - 9$
- C. $7 - 10$
- D. $9 - 7$



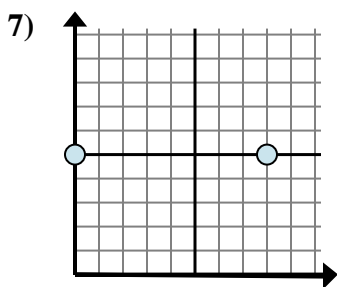
- A. $2 - 4$
- B. $4 - 1$
- C. $1 - 4$
- D. $2 - 2$



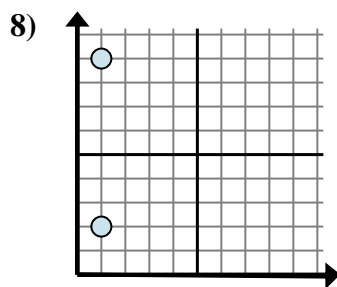
- A. $9 - 10$
- B. $10 - 3$
- C. $3 - 9$
- D. $10 - 9$



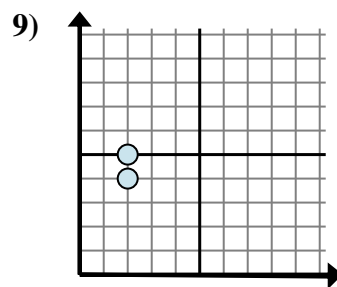
- A. $3 - 2$
- B. $2 - 4$
- C. $2 - 4$
- D. $4 - 3$



- A. $5 - 8$
- B. $5 - 5$
- C. $8 - 0$
- D. $8 - 5$



- A. $1 - 1$
- B. $1 - 2$
- C. $9 - 2$
- D. $2 - 9$



- A. $5 - 2$
- B. $5 - 4$
- C. $2 - 2$
- D. $2 - 2$

1. _____

2. _____

3. _____

4. _____

5. _____

6. _____

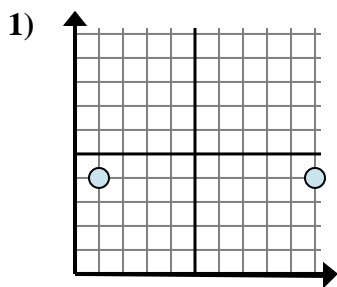
7. _____

8. _____

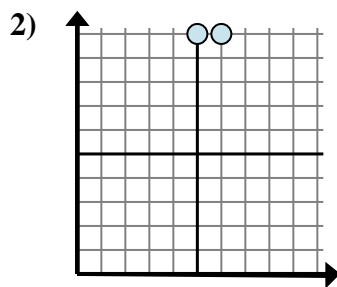
9. _____



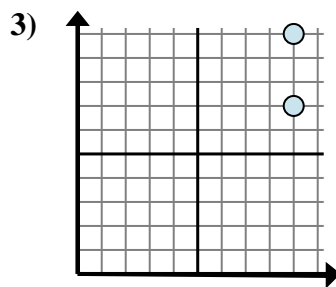
Determina quale espressione mostra meglio la distanza tra i due punti.



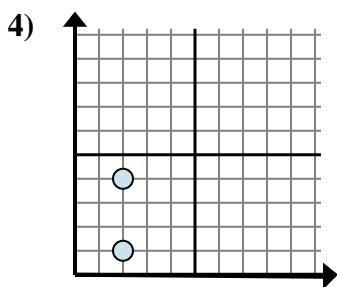
- A. $4 - 4$
- B. $4 - 4$
- C. $4 - 10$
- D. $10 - 1$



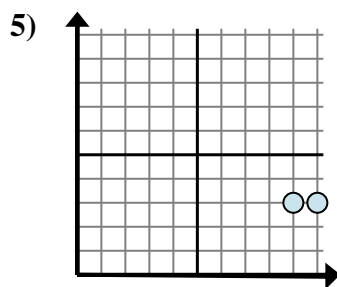
- A. $6 - 10$
- B. $5 - 10$
- C. $6 - 5$
- D. $10 - 5$



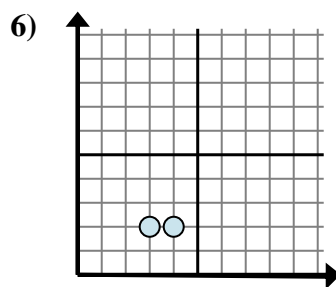
- A. $10 - 7$
- B. $9 - 9$
- C. $7 - 10$
- D. $9 - 7$



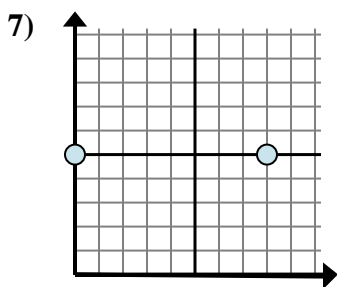
- A. $2 - 4$
- B. $4 - 1$
- C. $1 - 4$
- D. $2 - 2$



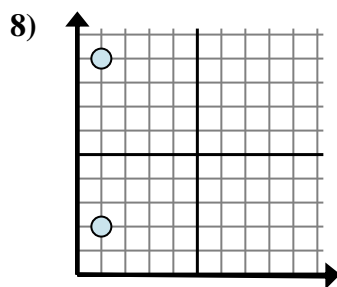
- A. $9 - 10$
- B. $10 - 3$
- C. $3 - 9$
- D. $10 - 9$



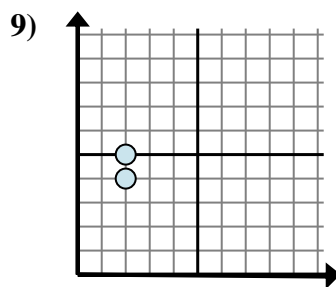
- A. $3 - 2$
- B. $2 - 4$
- C. $2 - 4$
- D. $4 - 3$



- A. $5 - 8$
- B. $5 - 5$
- C. $8 - 0$
- D. $8 - 5$



- A. $1 - 1$
- B. $1 - 2$
- C. $9 - 2$
- D. $2 - 9$



- A. $5 - 2$
- B. $5 - 4$
- C. $2 - 2$
- D. $2 - 2$

Risposte

1. **D**

2. **C**

3. **A**

4. **B**

5. **D**

6. **D**

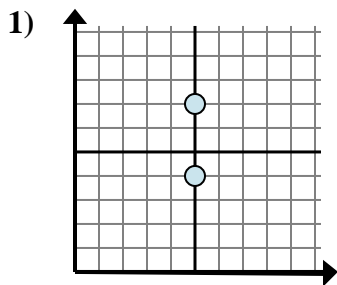
7. **C**

8. **C**

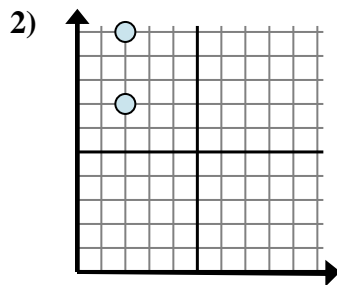
9. **B**



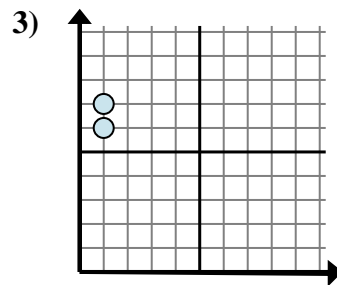
Determina quale espressione mostra meglio la distanza tra i due punti.

Risposte

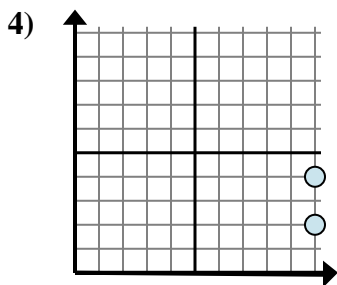
- A. $5 - 5$
 B. $7 - 4$
 C. $7 - 5$
 D. $5 - 4$



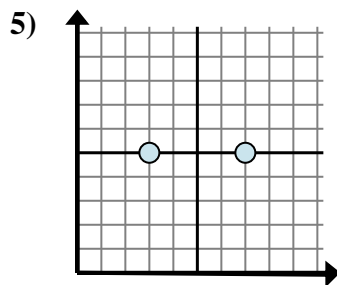
- A. $10 - 2$
 B. $2 - 10$
 C. $2 - 2$
 D. $10 - 7$



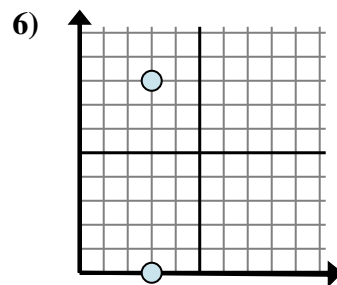
- A. $7 - 6$
 B. $1 - 6$
 C. $6 - 1$
 D. $1 - 1$



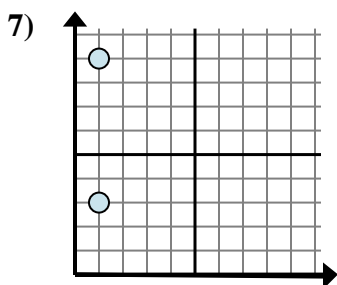
- A. $10 - 4$
 B. $10 - 4$
 C. $2 - 10$
 D. $4 - 2$



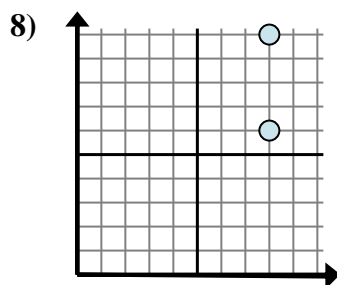
- A. $7 - 5$
 B. $7 - 3$
 C. $5 - 7$
 D. $3 - 7$



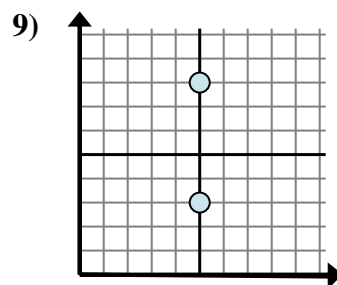
- A. $3 - 3$
 B. $8 - 0$
 C. $3 - 0$
 D. $0 - 8$



- A. $9 - 1$
 B. $9 - 3$
 C. $1 - 1$
 D. $1 - 1$



- A. $8 - 6$
 B. $8 - 6$
 C. $10 - 8$
 D. $10 - 6$

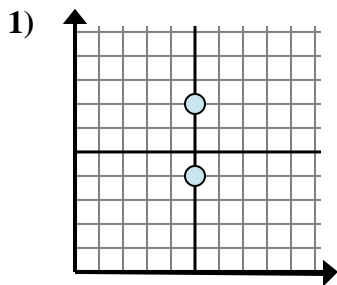


- A. $8 - 3$
 B. $5 - 5$
 C. $8 - 5$
 D. $5 - 8$

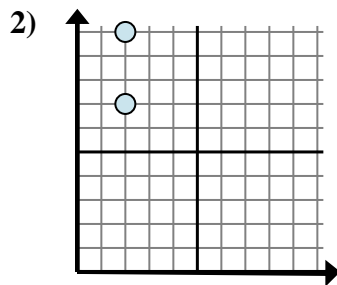
1. _____
 2. _____
 3. _____
 4. _____
 5. _____
 6. _____
 7. _____
 8. _____
 9. _____



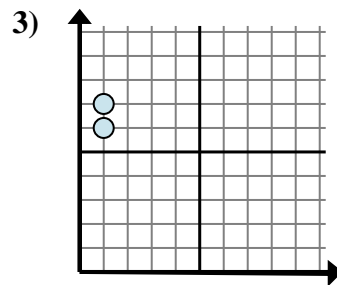
Determina quale espressione mostra meglio la distanza tra i due punti.



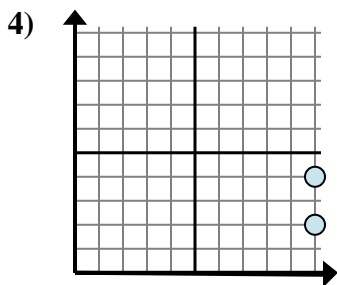
- A. $5 - 5$
 B. $7 - 4$
 C. $7 - 5$
 D. $5 - 4$



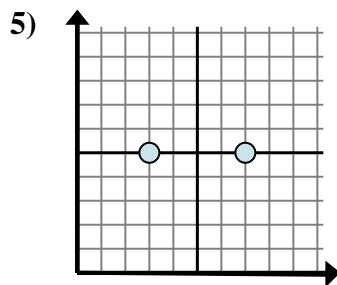
- A. $10 - 2$
 B. $2 - 10$
 C. $2 - 2$
 D. $10 - 7$



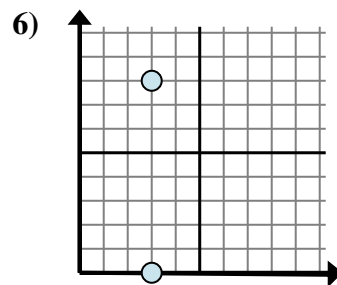
- A. $7 - 6$
 B. $1 - 6$
 C. $6 - 1$
 D. $1 - 1$



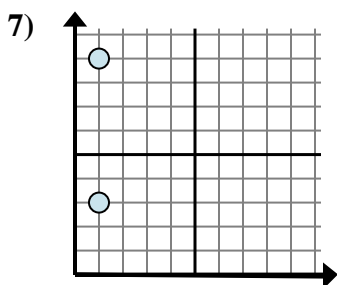
- A. $10 - 4$
 B. $10 - 4$
 C. $2 - 10$
 D. $4 - 2$



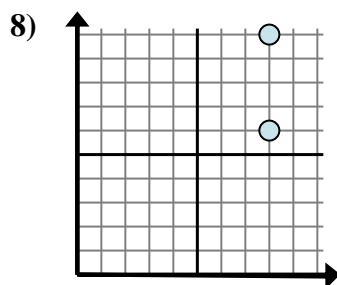
- A. $7 - 5$
 B. $7 - 3$
 C. $5 - 7$
 D. $3 - 7$



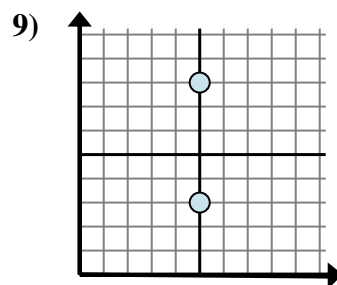
- A. $3 - 3$
 B. $8 - 0$
 C. $3 - 0$
 D. $0 - 8$



- A. $9 - 1$
 B. $9 - 3$
 C. $1 - 1$
 D. $1 - 1$



- A. $8 - 6$
 B. $8 - 6$
 C. $10 - 8$
 D. $10 - 6$



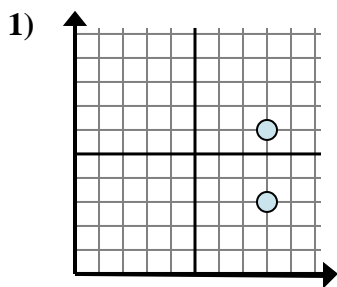
- A. $8 - 3$
 B. $5 - 5$
 C. $8 - 5$
 D. $5 - 8$

Risposte1. **B**2. **D**3. **A**4. **D**5. **B**6. **B**7. **B**8. **D**9. **A**

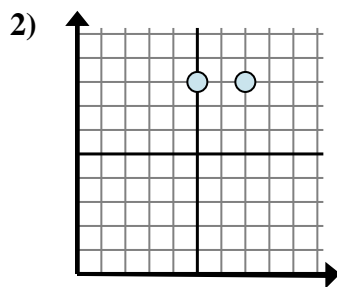


Determina quale espressione mostra meglio la distanza tra i due punti.

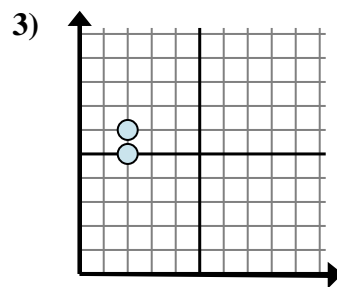
Risposte



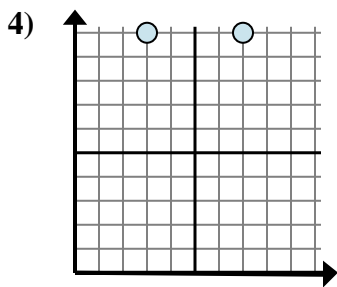
- A. $6 - 3$
- B. $6 - 8$
- C. $8 - 8$
- D. $3 - 8$



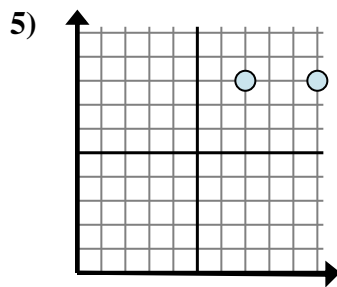
- A. $8 - 7$
- B. $7 - 5$
- C. $8 - 7$
- D. $8 - 8$



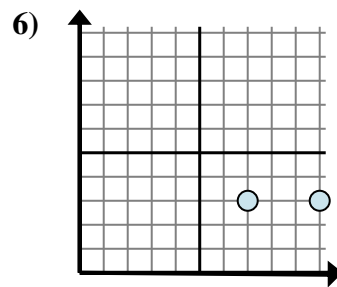
- A. $6 - 5$
- B. $2 - 5$
- C. $5 - 2$
- D. $6 - 2$



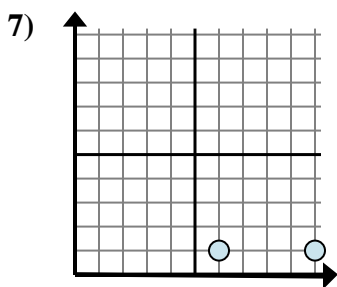
- A. $7 - 3$
- B. $10 - 3$
- C. $10 - 3$
- D. $10 - 10$



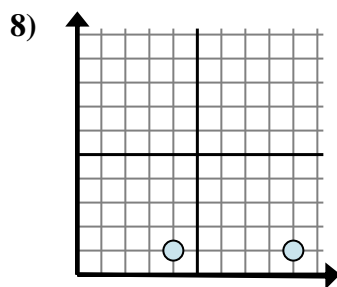
- A. $8 - 8$
- B. $10 - 8$
- C. $7 - 8$
- D. $10 - 7$



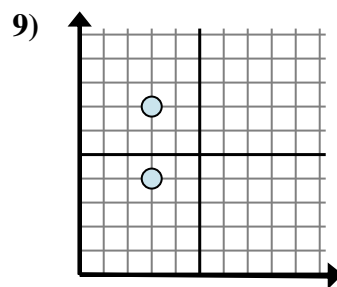
- A. $10 - 7$
- B. $7 - 3$
- C. $3 - 10$
- D. $3 - 10$



- A. $10 - 6$
- B. $6 - 1$
- C. $6 - 10$
- D. $1 - 1$



- A. $4 - 9$
- B. $9 - 4$
- C. $1 - 9$
- D. $4 - 1$



- A. $3 - 3$
- B. $4 - 3$
- C. $3 - 3$
- D. $7 - 4$

1. _____

2. _____

3. _____

4. _____

5. _____

6. _____

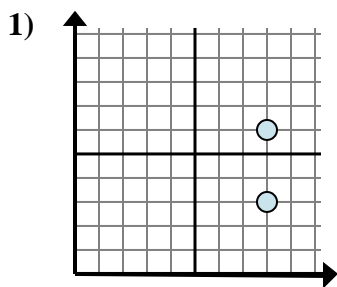
7. _____

8. _____

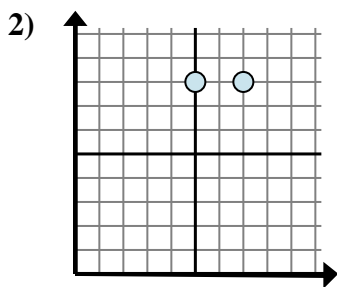
9. _____



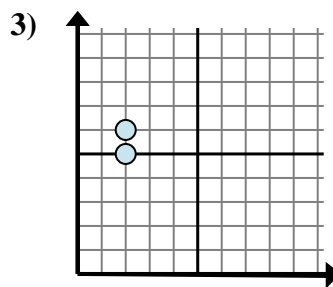
Determina quale espressione mostra meglio la distanza tra i due punti.



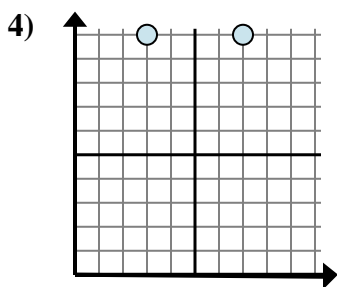
- A. $6 - 3$
 B. $6 - 8$
 C. $8 - 8$
 D. $3 - 8$



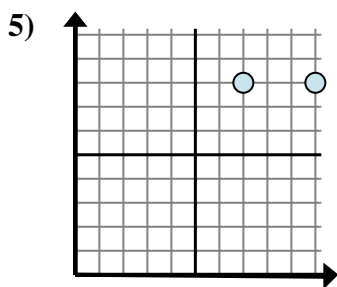
- A. $8 - 7$
 B. $7 - 5$
 C. $8 - 7$
 D. $8 - 8$



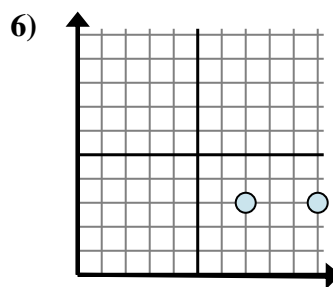
- A. $6 - 5$
 B. $2 - 5$
 C. $5 - 2$
 D. $6 - 2$



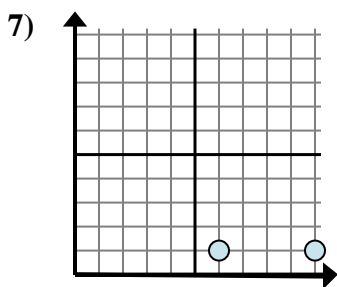
- A. $7 - 3$
 B. $10 - 3$
 C. $10 - 3$
 D. $10 - 10$



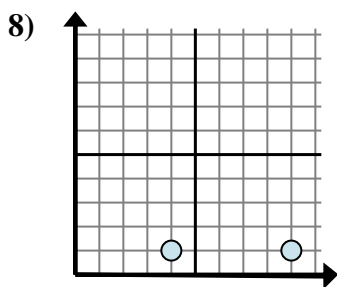
- A. $8 - 8$
 B. $10 - 8$
 C. $7 - 8$
 D. $10 - 7$



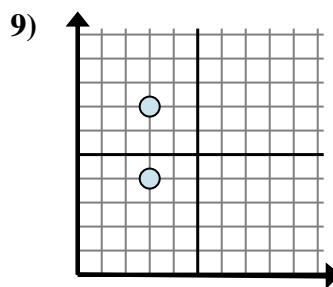
- A. $10 - 7$
 B. $7 - 3$
 C. $3 - 10$
 D. $3 - 10$



- A. $10 - 6$
 B. $6 - 1$
 C. $6 - 10$
 D. $1 - 1$



- A. $4 - 9$
 B. $9 - 4$
 C. $1 - 9$
 D. $4 - 1$



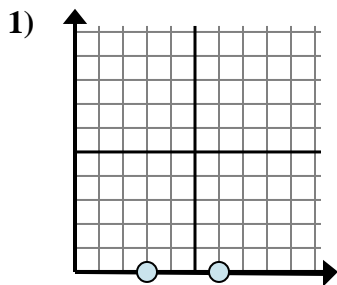
- A. $3 - 3$
 B. $4 - 3$
 C. $3 - 3$
 D. $7 - 4$

Risposte1. **A**2. **B**3. **A**4. **A**5. **D**6. **A**7. **A**8. **B**9. **D**

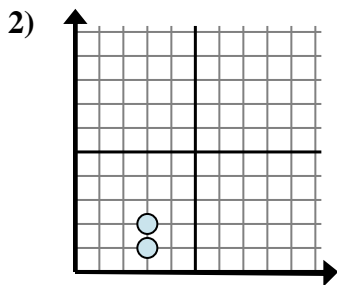


Determina quale espressione mostra meglio la distanza tra i due punti.

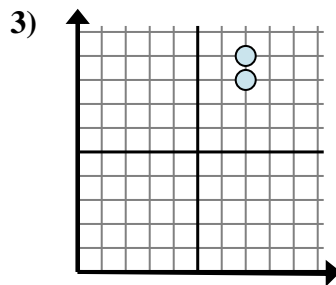
Risposte



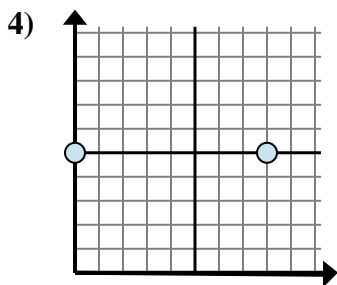
- A. $0 - 6$
- B. $3 - 0$
- C. $6 - 0$
- D. $6 - 3$



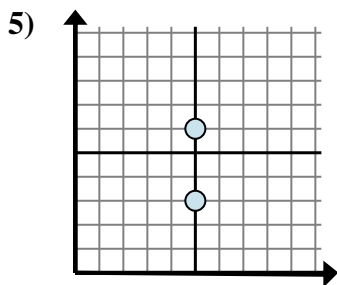
- A. $3 - 3$
- B. $3 - 2$
- C. $3 - 3$
- D. $2 - 1$



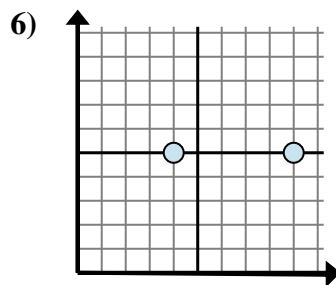
- A. $7 - 8$
- B. $7 - 7$
- C. $9 - 8$
- D. $8 - 7$



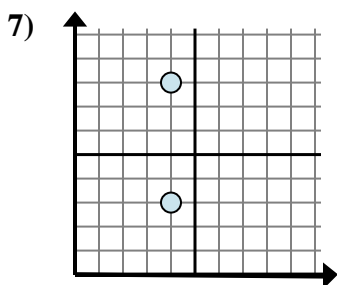
- A. $8 - 0$
- B. $5 - 5$
- C. $5 - 8$
- D. $8 - 5$



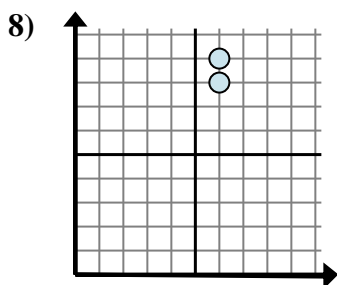
- A. $6 - 5$
- B. $6 - 3$
- C. $5 - 5$
- D. $5 - 5$



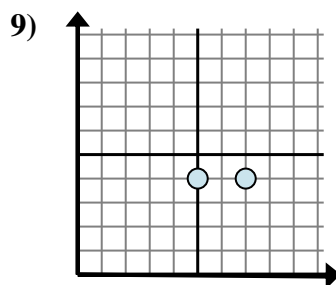
- A. $5 - 5$
- B. $9 - 4$
- C. $9 - 5$
- D. $4 - 9$



- A. $4 - 3$
- B. $8 - 3$
- C. $4 - 4$
- D. $4 - 4$



- A. $9 - 8$
- B. $6 - 6$
- C. $8 - 6$
- D. $9 - 6$



- A. $5 - 4$
- B. $4 - 4$
- C. $7 - 5$
- D. $4 - 7$

1. _____

2. _____

3. _____

4. _____

5. _____

6. _____

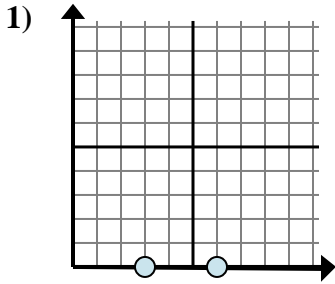
7. _____

8. _____

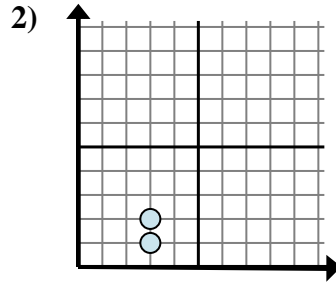
9. _____



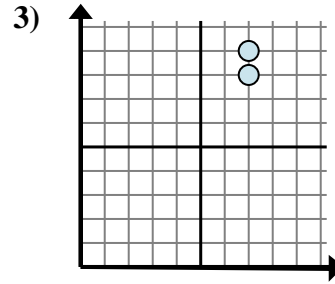
Determina quale espressione mostra meglio la distanza tra i due punti.



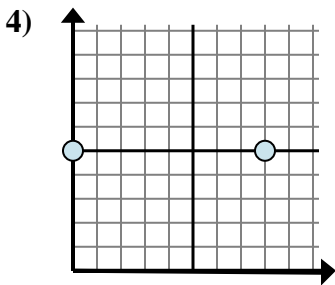
- A. $0 - 6$
 B. $3 - 0$
 C. $6 - 0$
 D. $6 - 3$



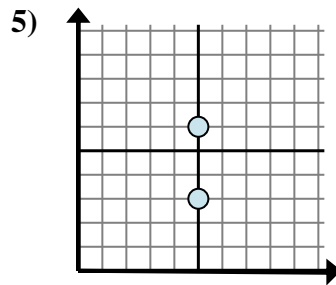
- A. $3 - 3$
 B. $3 - 2$
 C. $3 - 3$
 D. $2 - 1$



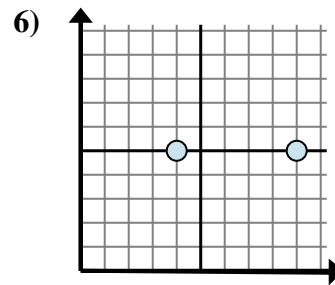
- A. $7 - 8$
 B. $7 - 7$
 C. $9 - 8$
 D. $8 - 7$



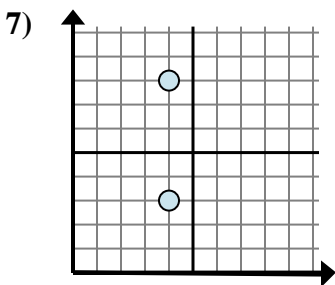
- A. $8 - 0$
 B. $5 - 5$
 C. $5 - 8$
 D. $8 - 5$



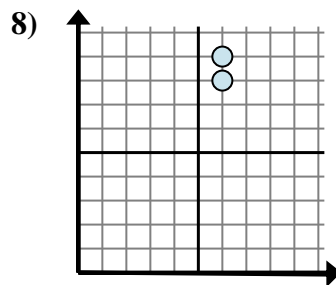
- A. $6 - 5$
 B. $6 - 3$
 C. $5 - 5$
 D. $5 - 5$



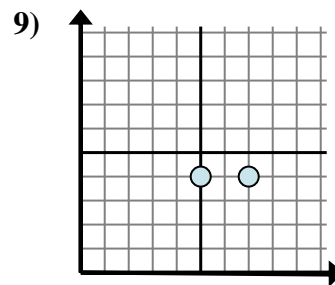
- A. $5 - 5$
 B. $9 - 4$
 C. $9 - 5$
 D. $4 - 9$



- A. $4 - 3$
 B. $8 - 3$
 C. $4 - 4$
 D. $4 - 4$



- A. $9 - 8$
 B. $6 - 6$
 C. $8 - 6$
 D. $9 - 6$



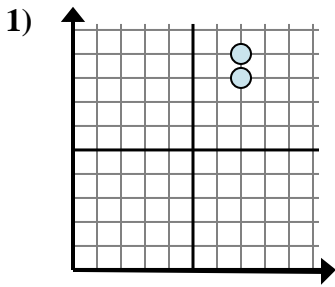
- A. $5 - 4$
 B. $4 - 4$
 C. $7 - 5$
 D. $4 - 7$

Risposte1. **D**2. **D**3. **C**4. **A**5. **B**6. **B**7. **B**8. **A**9. **C**

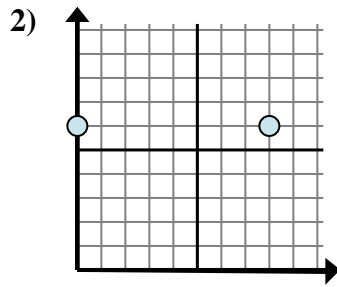


Determina quale espressione mostra meglio la distanza tra i due punti.

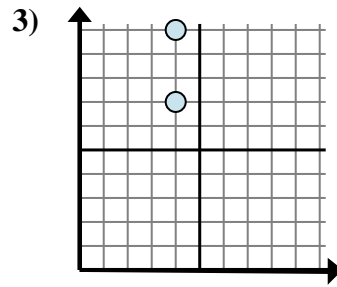
Risposte



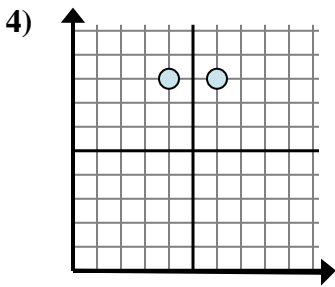
- A. $7 - 9$
- B. $8 - 9$
- C. $9 - 8$
- D. $7 - 7$



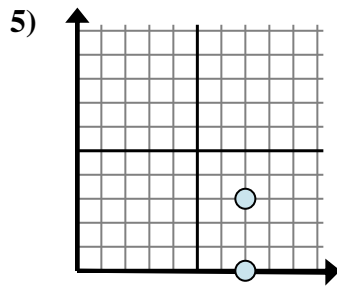
- A. $8 - 6$
- B. $8 - 0$
- C. $0 - 8$
- D. $6 - 6$



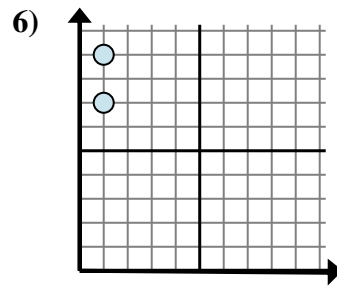
- A. $7 - 10$
- B. $4 - 7$
- C. $10 - 7$
- D. $4 - 4$



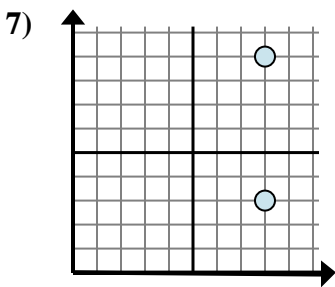
- A. $8 - 8$
- B. $4 - 8$
- C. $6 - 4$
- D. $6 - 8$



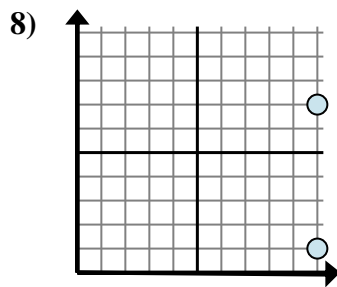
- A. $7 - 3$
- B. $3 - 0$
- C. $0 - 3$
- D. $3 - 7$



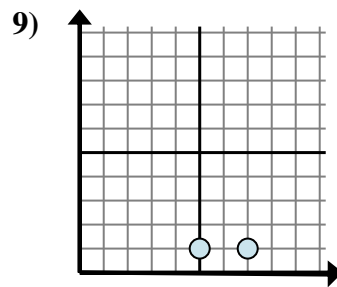
- A. $9 - 7$
- B. $7 - 9$
- C. $1 - 1$
- D. $1 - 1$



- A. $8 - 8$
- B. $3 - 9$
- C. $9 - 3$
- D. $9 - 8$



- A. $1 - 7$
- B. $7 - 10$
- C. $7 - 1$
- D. $1 - 10$



- A. $7 - 1$
- B. $1 - 1$
- C. $1 - 7$
- D. $7 - 5$

1. _____

2. _____

3. _____

4. _____

5. _____

6. _____

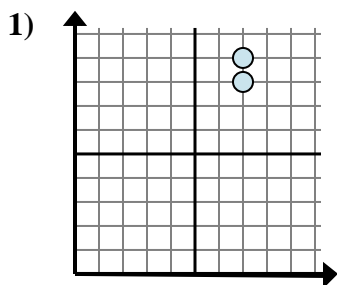
7. _____

8. _____

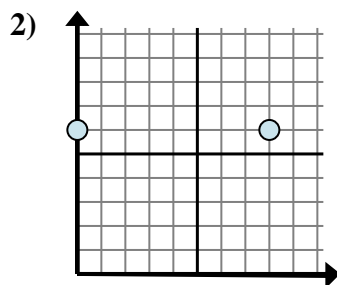
9. _____



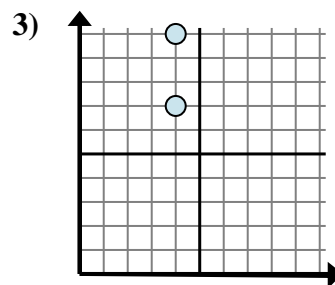
Determina quale espressione mostra meglio la distanza tra i due punti.



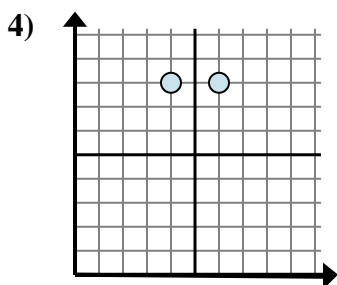
- A. $7 - 9$
 B. $8 - 9$
 C. $9 - 8$
 D. $7 - 7$



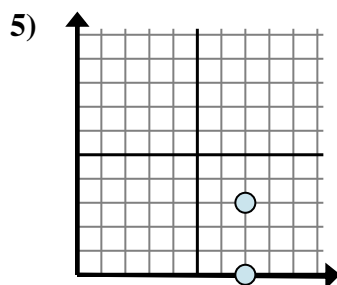
- A. $8 - 6$
 B. $8 - 0$
 C. $0 - 8$
 D. $6 - 6$



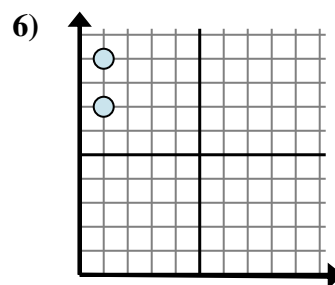
- A. $7 - 10$
 B. $4 - 7$
 C. $10 - 7$
 D. $4 - 4$



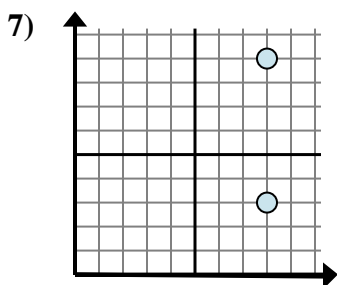
- A. $8 - 8$
 B. $4 - 8$
 C. $6 - 4$
 D. $6 - 8$



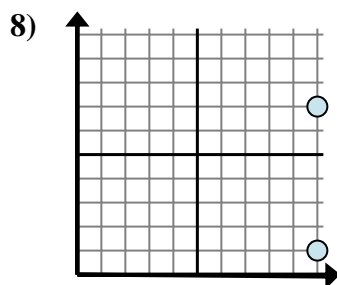
- A. $7 - 3$
 B. $3 - 0$
 C. $0 - 3$
 D. $3 - 7$



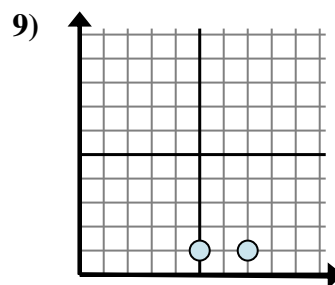
- A. $9 - 7$
 B. $7 - 9$
 C. $1 - 1$
 D. $1 - 1$



- A. $8 - 8$
 B. $3 - 9$
 C. $9 - 3$
 D. $9 - 8$



- A. $1 - 7$
 B. $7 - 10$
 C. $7 - 1$
 D. $1 - 10$



- A. $7 - 1$
 B. $1 - 1$
 C. $1 - 7$
 D. $7 - 5$

Risposte

1. **C**
 2. **B**
 3. **C**
 4. **C**
 5. **B**
 6. **A**
 7. **C**
 8. **C**
 9. **D**